

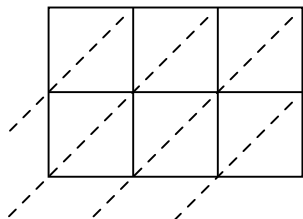


Usa la moltiplicazione del reticolo per risolvere ogni problema.

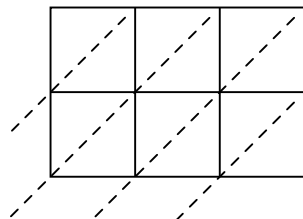
1) $718 \times 14 =$



2) $428 \times 34 =$



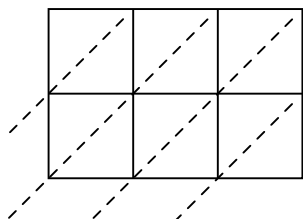
3) $823 \times 37 =$



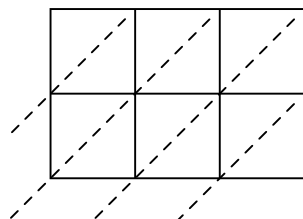
4) $171 \times 34 =$



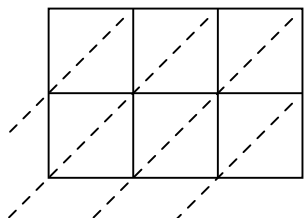
5) $745 \times 82 =$



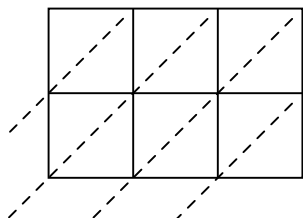
6) $314 \times 99 =$



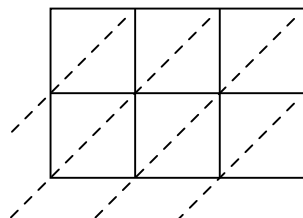
7) $920 \times 70 =$



8) $664 \times 98 =$



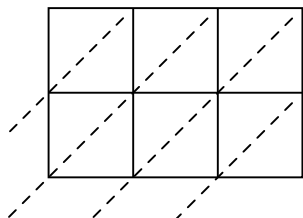
9) $281 \times 53 =$



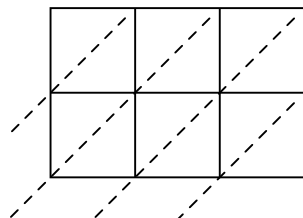
10) $530 \times 53 =$



11) $104 \times 75 =$



12) $375 \times 51 =$

**Risposte**

1. _____

2. _____

3. _____

4. _____

5. _____

6. _____

7. _____

8. _____

9. _____

10. _____

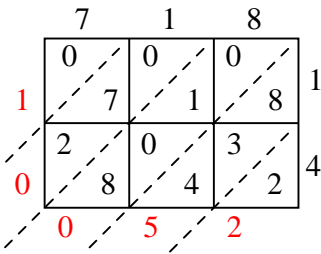
11. _____

12. _____

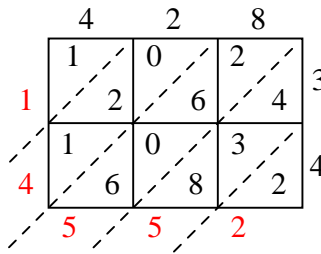


Usa la moltiplicazione del reticolo per risolvere ogni problema.

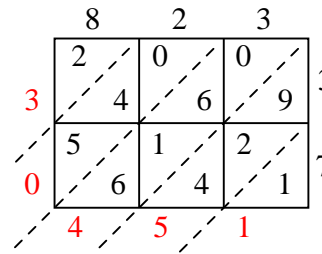
1) $718 \times 14 =$



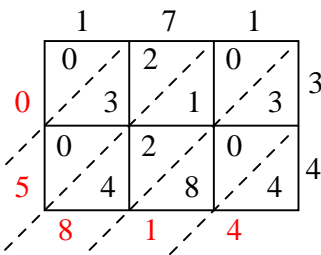
2) $428 \times 34 =$



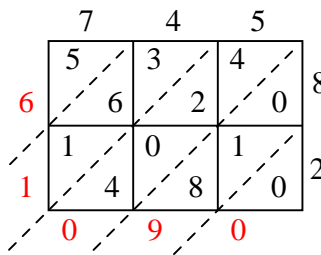
3) $823 \times 37 =$



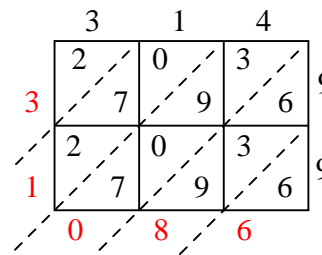
4) $171 \times 34 =$



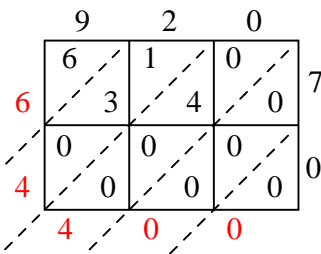
5) $745 \times 82 =$



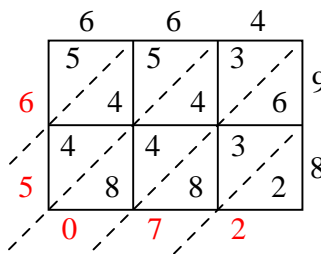
6) $314 \times 99 =$



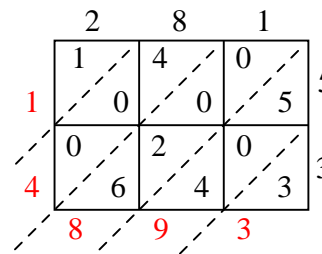
7) $920 \times 70 =$



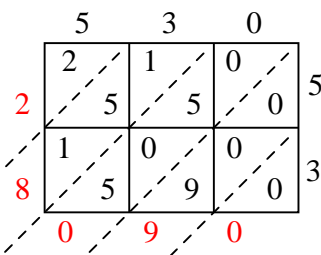
8) $664 \times 98 =$



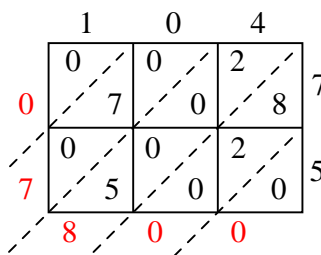
9) $281 \times 53 =$



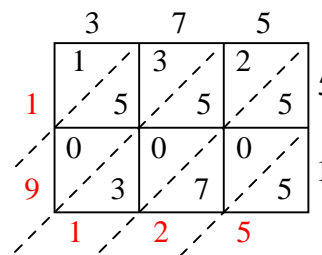
10) $530 \times 53 =$



11) $104 \times 75 =$



12) $375 \times 51 =$

**Risposte**1. **10.052**2. **14.552**3. **30.451**4. **5.814**5. **61.090**6. **31.086**7. **64.400**8. **65.072**9. **14.893**10. **28.090**11. **7.800**12. **19.125**