



Usa la moltiplicazione del reticolo per risolvere ogni problema.

1)  $485 \times 11 =$



2)  $401 \times 55 =$



3)  $665 \times 39 =$



4)  $257 \times 58 =$



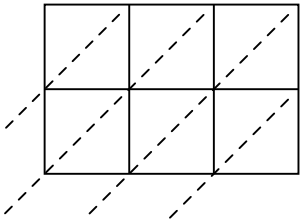
5)  $242 \times 51 =$



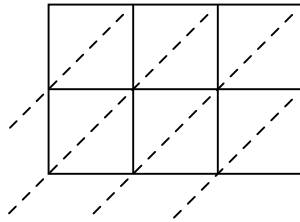
6)  $338 \times 18 =$



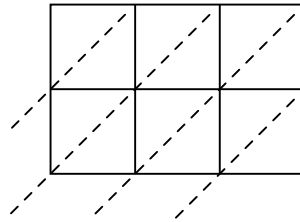
7)  $690 \times 32 =$



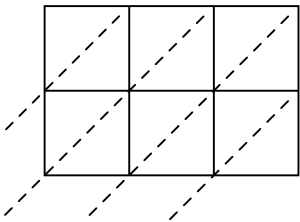
8)  $309 \times 90 =$



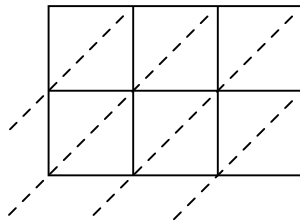
9)  $211 \times 95 =$



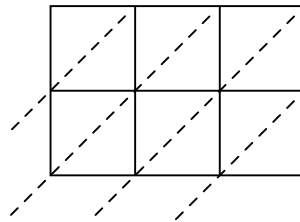
10)  $226 \times 83 =$



11)  $329 \times 59 =$



12)  $306 \times 62 =$



**Risposte**

1. \_\_\_\_\_

2. \_\_\_\_\_

3. \_\_\_\_\_

4. \_\_\_\_\_

5. \_\_\_\_\_

6. \_\_\_\_\_

7. \_\_\_\_\_

8. \_\_\_\_\_

9. \_\_\_\_\_

10. \_\_\_\_\_

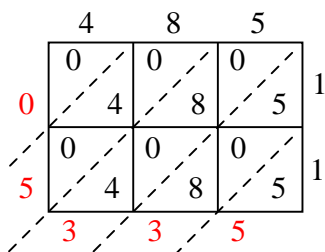
11. \_\_\_\_\_

12. \_\_\_\_\_

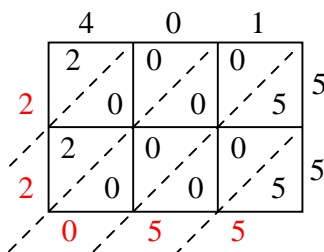


Usa la moltiplicazione del reticolo per risolvere ogni problema.

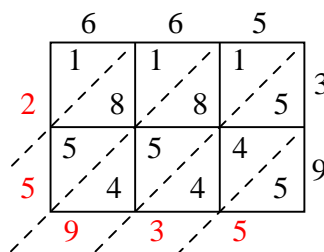
1)  $485 \times 11 =$



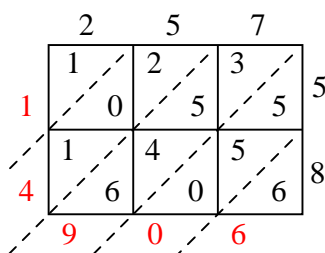
2)  $401 \times 55 =$



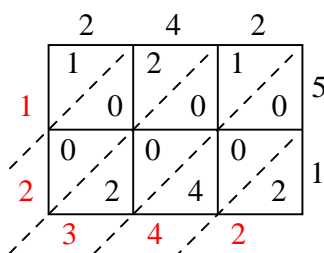
3)  $665 \times 39 =$



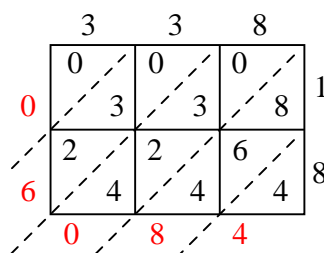
4)  $257 \times 58 =$



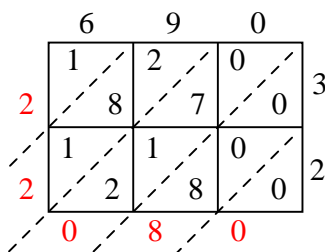
5)  $242 \times 51 =$



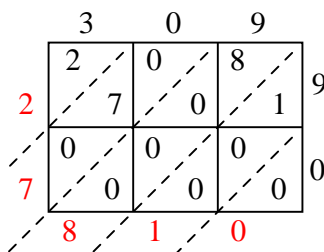
6)  $338 \times 18 =$



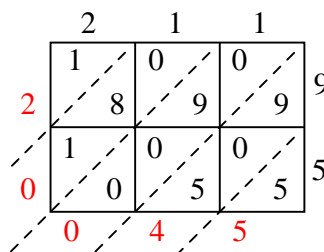
7)  $690 \times 32 =$



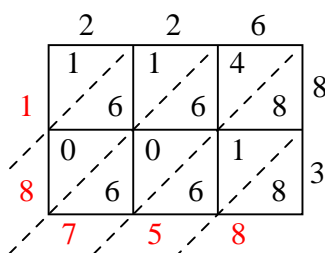
8)  $309 \times 90 =$



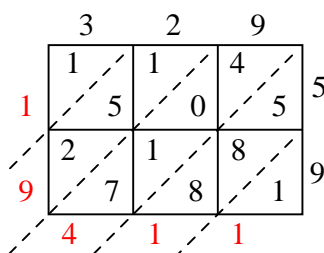
9)  $211 \times 95 =$



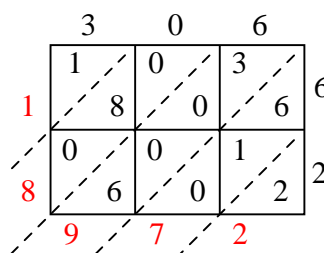
10)  $226 \times 83 =$



11)  $329 \times 59 =$



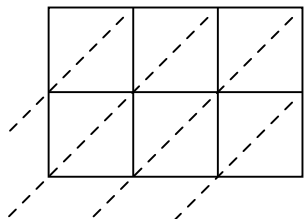
12)  $306 \times 62 =$

**Risposte**1. **5.335**2. **22.055**3. **25.935**4. **14.906**5. **12.342**6. **6.084**7. **22.080**8. **27.810**9. **20.045**10. **18.758**11. **19.411**12. **18.972**

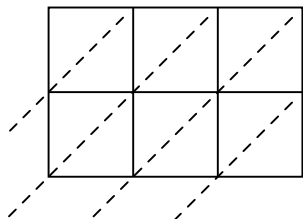


Usa la moltiplicazione del reticolo per risolvere ogni problema.

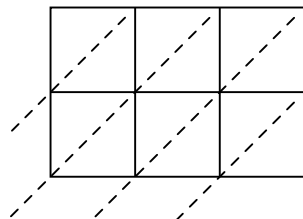
1)  $189 \times 31 =$



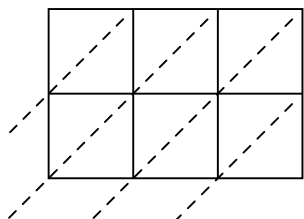
2)  $633 \times 58 =$



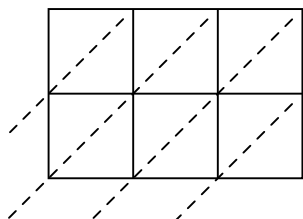
3)  $856 \times 16 =$



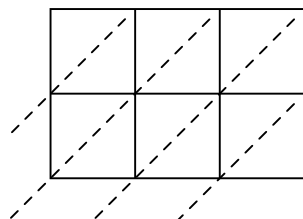
4)  $254 \times 35 =$



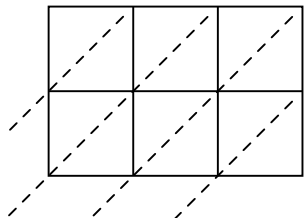
5)  $186 \times 28 =$



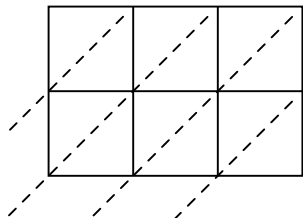
6)  $390 \times 84 =$



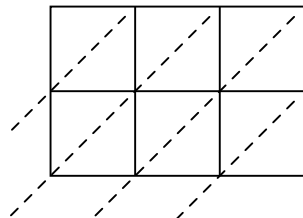
7)  $325 \times 37 =$



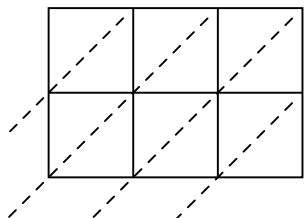
8)  $493 \times 91 =$



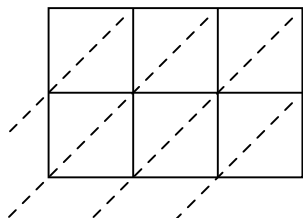
9)  $348 \times 20 =$



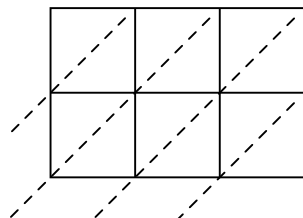
10)  $894 \times 10 =$



11)  $961 \times 10 =$



12)  $317 \times 15 =$

**Risposte**

1. \_\_\_\_\_

2. \_\_\_\_\_

3. \_\_\_\_\_

4. \_\_\_\_\_

5. \_\_\_\_\_

6. \_\_\_\_\_

7. \_\_\_\_\_

8. \_\_\_\_\_

9. \_\_\_\_\_

10. \_\_\_\_\_

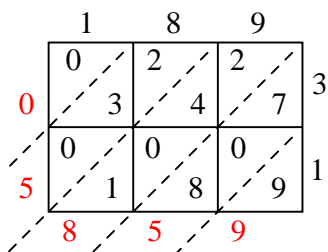
11. \_\_\_\_\_

12. \_\_\_\_\_

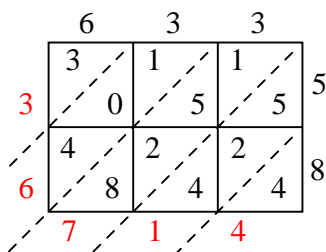


Usa la moltiplicazione del reticolo per risolvere ogni problema.

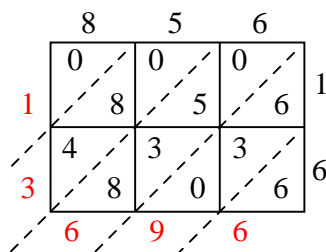
1)  $189 \times 31 =$



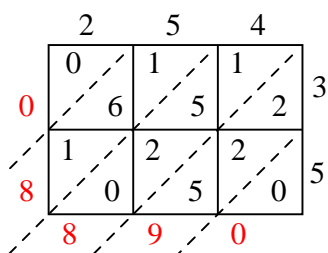
2)  $633 \times 58 =$



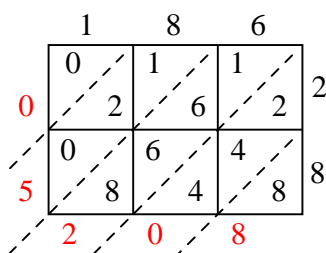
3)  $856 \times 16 =$



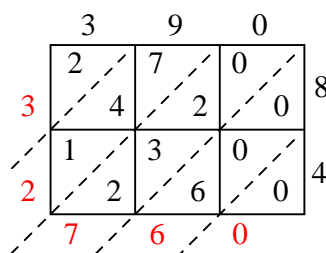
4)  $254 \times 35 =$



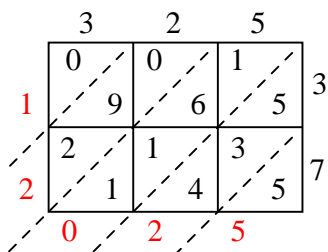
5)  $186 \times 28 =$



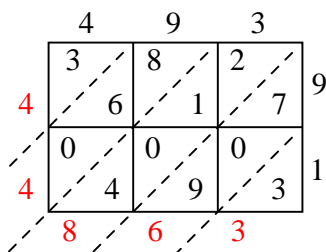
6)  $390 \times 84 =$



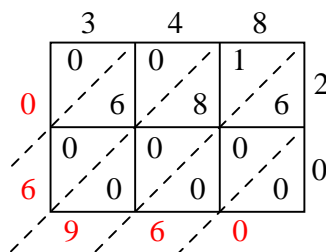
7)  $325 \times 37 =$



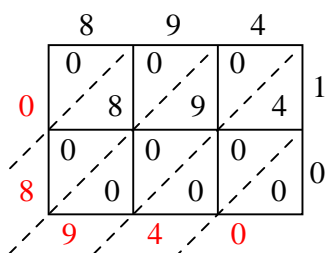
8)  $493 \times 91 =$



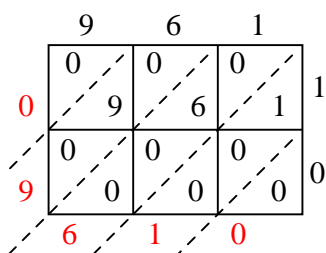
9)  $348 \times 20 =$



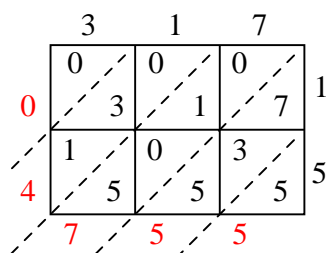
10)  $894 \times 10 =$



11)  $961 \times 10 =$



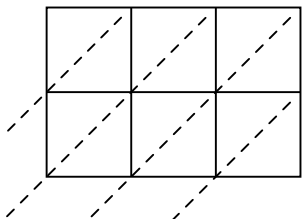
12)  $317 \times 15 =$

**Risposte**1. **5.859**2. **36.714**3. **13.696**4. **8.890**5. **5.208**6. **32.760**7. **12.025**8. **44.863**9. **6.960**10. **8.940**11. **9.610**12. **4.755**

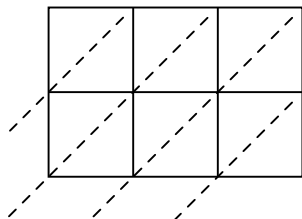


Usa la moltiplicazione del reticolo per risolvere ogni problema.

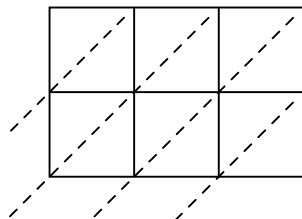
1)  $617 \times 36 =$



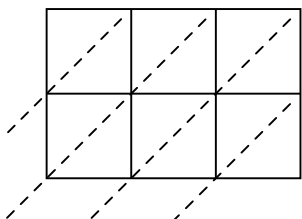
2)  $902 \times 60 =$



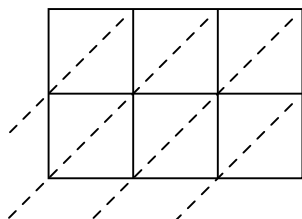
3)  $936 \times 11 =$



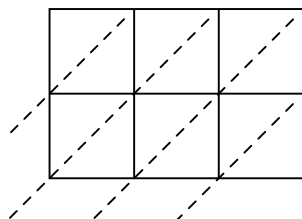
4)  $506 \times 97 =$



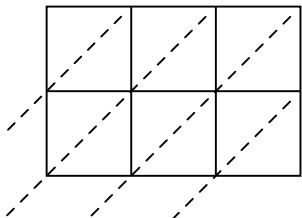
5)  $375 \times 92 =$



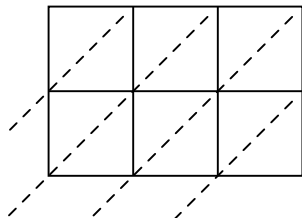
6)  $944 \times 94 =$



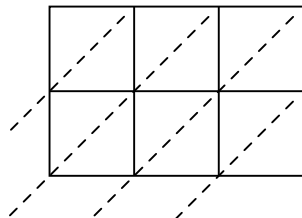
7)  $773 \times 32 =$



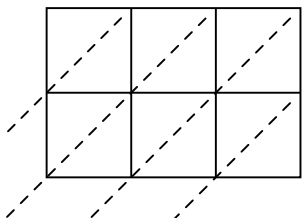
8)  $444 \times 54 =$



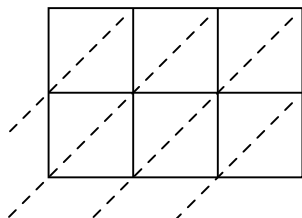
9)  $950 \times 35 =$



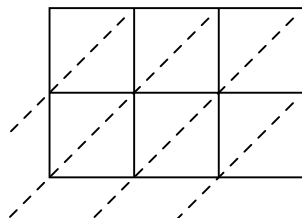
10)  $608 \times 49 =$



11)  $289 \times 74 =$



12)  $530 \times 32 =$



**Risposte**

1. \_\_\_\_\_

2. \_\_\_\_\_

3. \_\_\_\_\_

4. \_\_\_\_\_

5. \_\_\_\_\_

6. \_\_\_\_\_

7. \_\_\_\_\_

8. \_\_\_\_\_

9. \_\_\_\_\_

10. \_\_\_\_\_

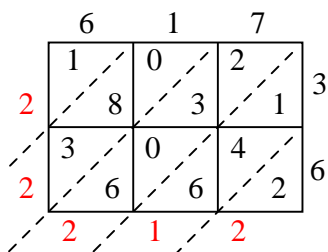
11. \_\_\_\_\_

12. \_\_\_\_\_

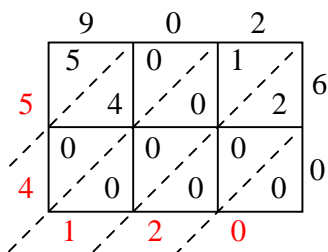


Usa la moltiplicazione del reticolo per risolvere ogni problema.

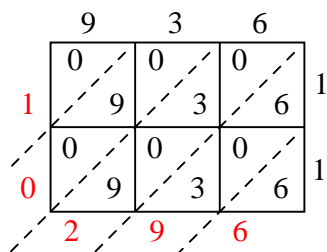
1)  $617 \times 36 =$



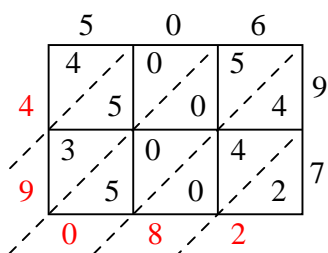
2)  $902 \times 60 =$



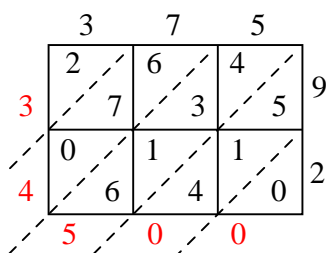
3)  $936 \times 11 =$



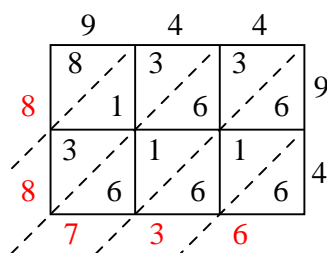
4)  $506 \times 97 =$



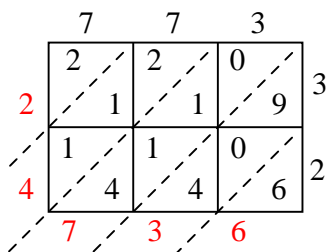
5)  $375 \times 92 =$



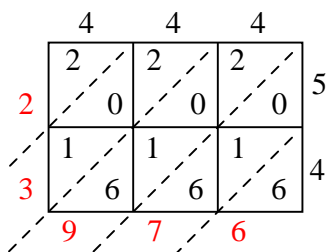
6)  $944 \times 94 =$



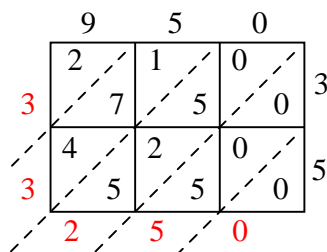
7)  $773 \times 32 =$



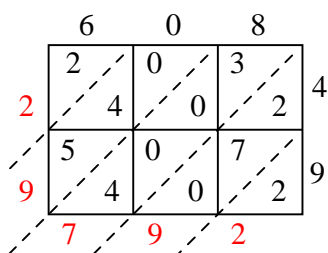
8)  $444 \times 54 =$



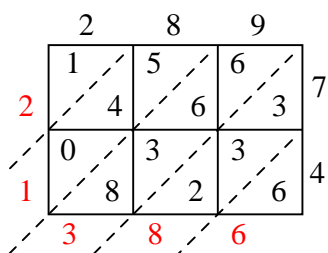
9)  $950 \times 35 =$



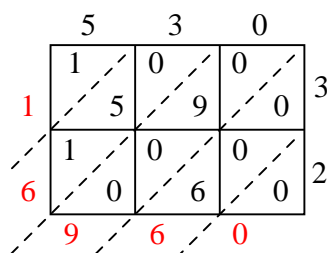
10)  $608 \times 49 =$



11)  $289 \times 74 =$



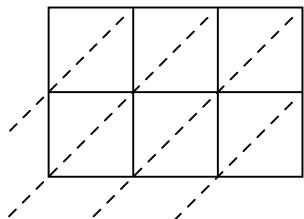
12)  $530 \times 32 =$

**Risposte**1. **22.212**2. **54.120**3. **10.296**4. **49.082**5. **34.500**6. **88.736**7. **24.736**8. **23.976**9. **33.250**10. **29.792**11. **21.386**12. **16.960**

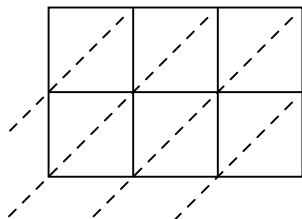


Usa la moltiplicazione del reticolo per risolvere ogni problema.

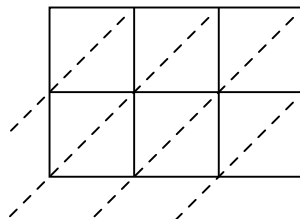
1)  $341 \times 47 =$



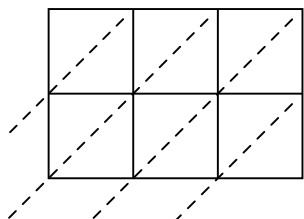
2)  $768 \times 31 =$



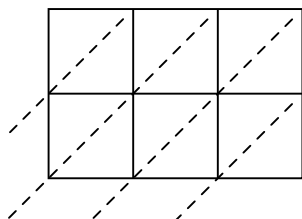
3)  $166 \times 52 =$



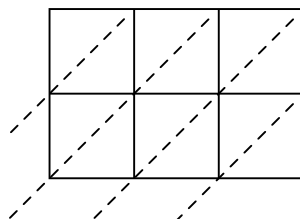
4)  $126 \times 82 =$



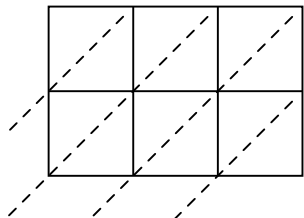
5)  $130 \times 86 =$



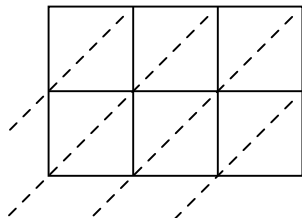
6)  $692 \times 58 =$



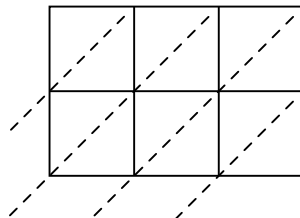
7)  $268 \times 37 =$



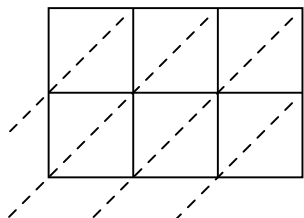
8)  $535 \times 68 =$



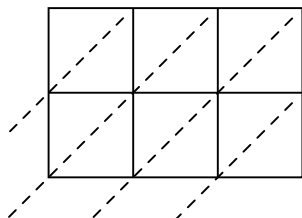
9)  $631 \times 39 =$



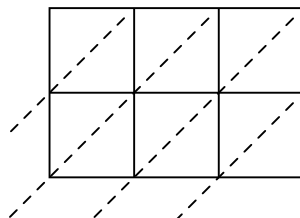
10)  $404 \times 13 =$



11)  $173 \times 57 =$



12)  $394 \times 75 =$



**Risposte**

1. \_\_\_\_\_

2. \_\_\_\_\_

3. \_\_\_\_\_

4. \_\_\_\_\_

5. \_\_\_\_\_

6. \_\_\_\_\_

7. \_\_\_\_\_

8. \_\_\_\_\_

9. \_\_\_\_\_

10. \_\_\_\_\_

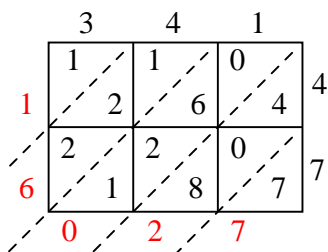
11. \_\_\_\_\_

12. \_\_\_\_\_

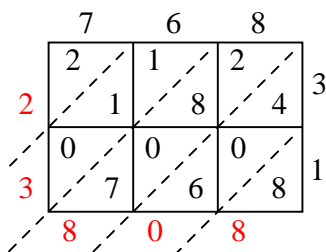


Usa la moltiplicazione del reticolo per risolvere ogni problema.

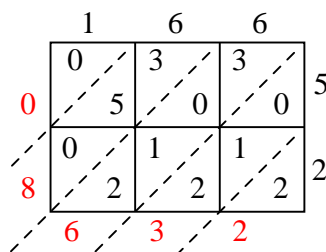
1)  $341 \times 47 =$



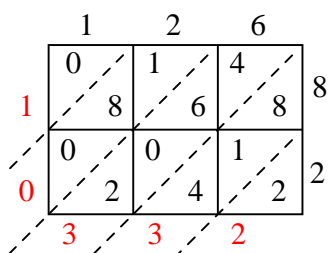
2)  $768 \times 31 =$



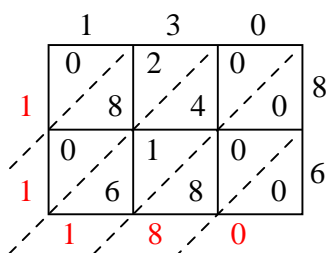
3)  $166 \times 52 =$



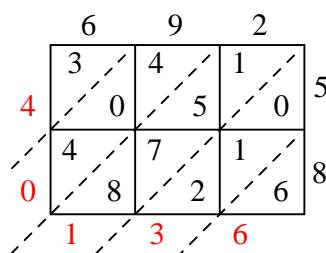
4)  $126 \times 82 =$



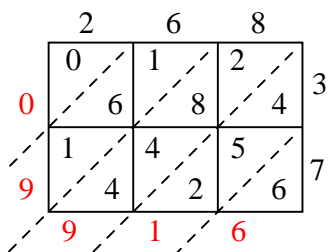
5)  $130 \times 86 =$



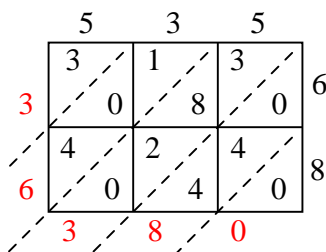
6)  $692 \times 58 =$



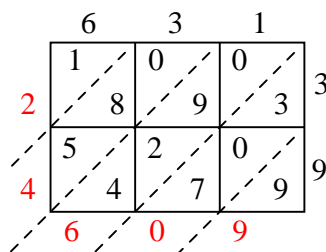
7)  $268 \times 37 =$



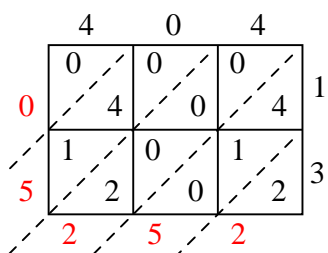
8)  $535 \times 68 =$



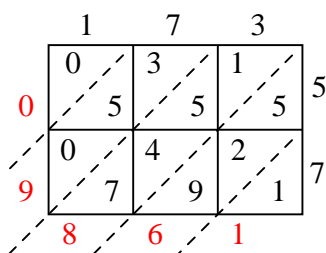
9)  $631 \times 39 =$



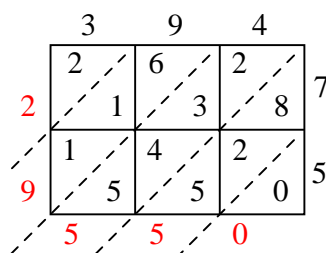
10)  $404 \times 13 =$



11)  $173 \times 57 =$



12)  $394 \times 75 =$

**Risposte**1. **16.027**2. **23.808**3. **8.632**4. **10.332**5. **11.180**6. **40.136**7. **9.916**8. **36.380**9. **24.609**10. **5.252**11. **9.861**12. **29.550**





Usa la moltiplicazione del reticolo per risolvere ogni problema.

1)  $927 \times 78 =$



2)  $669 \times 51 =$



3)  $864 \times 95 =$



4)  $709 \times 28 =$



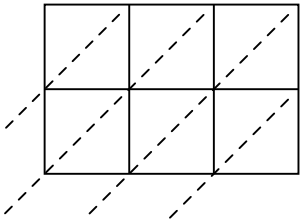
5)  $776 \times 14 =$



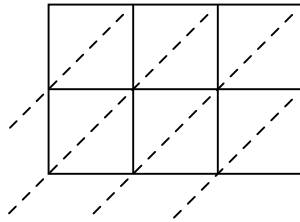
6)  $743 \times 46 =$



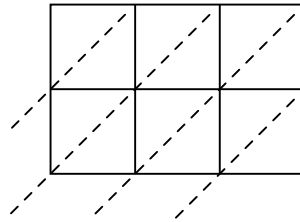
7)  $139 \times 10 =$



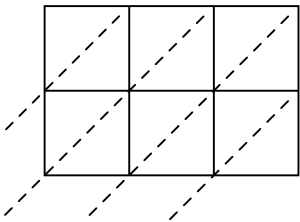
8)  $139 \times 15 =$



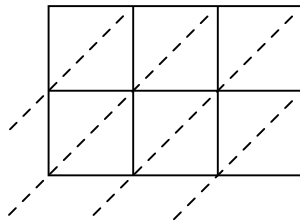
9)  $652 \times 85 =$



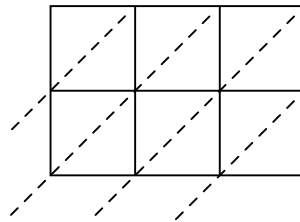
10)  $692 \times 17 =$



11)  $362 \times 41 =$



12)  $355 \times 63 =$

**Risposte**

1. \_\_\_\_\_

2. \_\_\_\_\_

3. \_\_\_\_\_

4. \_\_\_\_\_

5. \_\_\_\_\_

6. \_\_\_\_\_

7. \_\_\_\_\_

8. \_\_\_\_\_

9. \_\_\_\_\_

10. \_\_\_\_\_

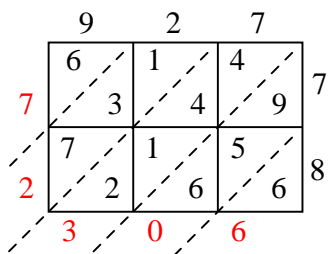
11. \_\_\_\_\_

12. \_\_\_\_\_

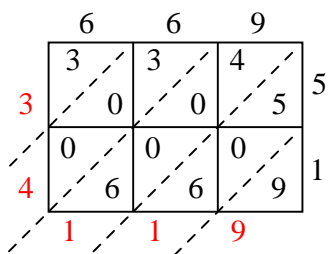


Usa la moltiplicazione del reticolo per risolvere ogni problema.

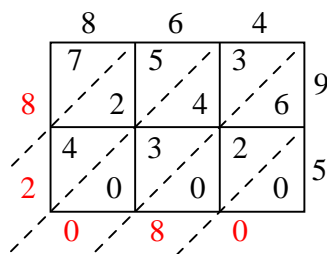
1)  $927 \times 78 =$



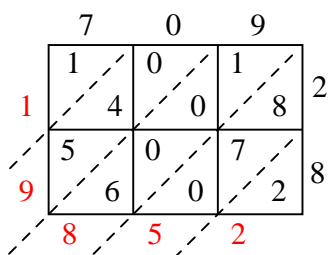
2)  $669 \times 51 =$



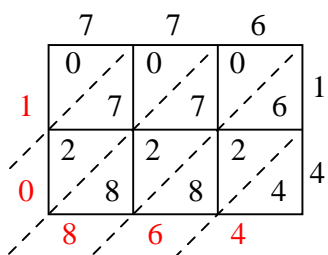
3)  $864 \times 95 =$



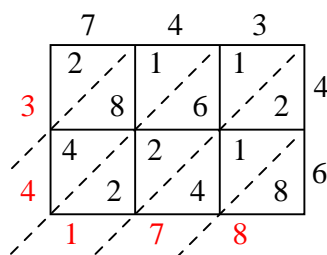
4)  $709 \times 28 =$



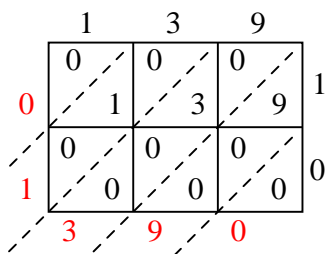
5)  $776 \times 14 =$



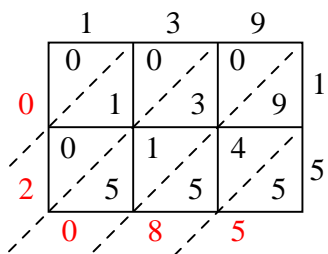
6)  $743 \times 46 =$



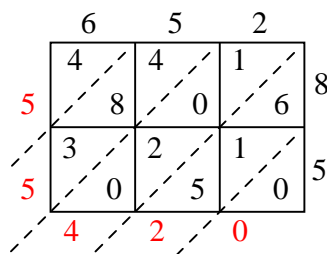
7)  $139 \times 10 =$



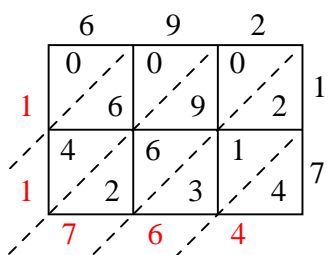
8)  $139 \times 15 =$



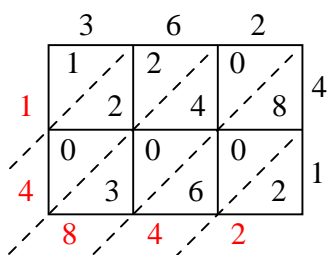
9)  $652 \times 85 =$



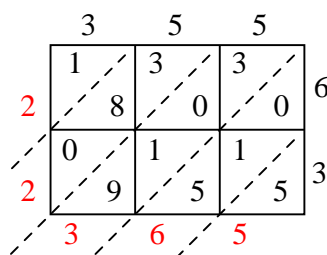
10)  $692 \times 17 =$



11)  $362 \times 41 =$



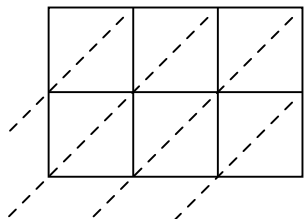
12)  $355 \times 63 =$

**Risposte**1. **72.306**2. **34.119**3. **82.080**4. **19.852**5. **10.864**6. **34.178**7. **1.390**8. **2.085**9. **55.420**10. **11.764**11. **14.842**12. **22.365**

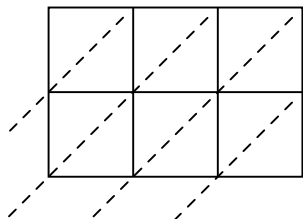


Usa la moltiplicazione del reticolo per risolvere ogni problema.

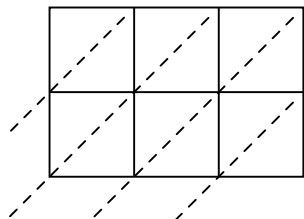
1)  $636 \times 32 =$



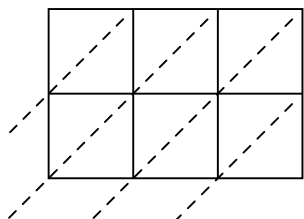
2)  $339 \times 54 =$



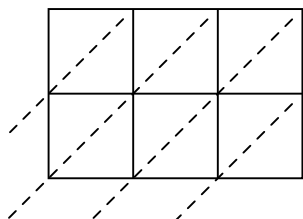
3)  $637 \times 28 =$



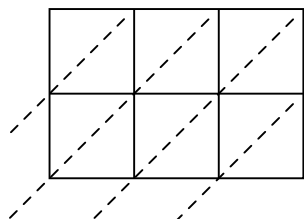
4)  $525 \times 91 =$



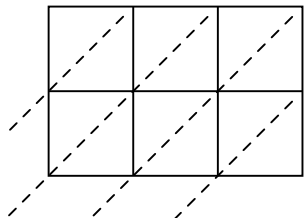
5)  $768 \times 79 =$



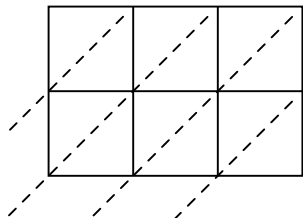
6)  $686 \times 73 =$



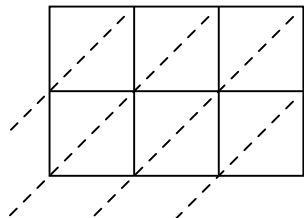
7)  $675 \times 69 =$



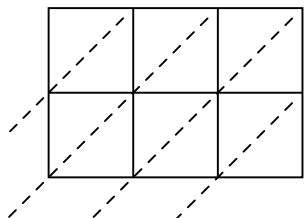
8)  $714 \times 45 =$



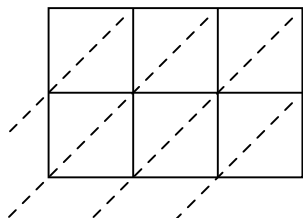
9)  $389 \times 41 =$



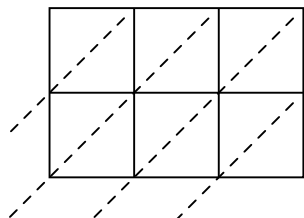
10)  $135 \times 24 =$



11)  $363 \times 59 =$



12)  $417 \times 39 =$



**Risposte**

1. \_\_\_\_\_

2. \_\_\_\_\_

3. \_\_\_\_\_

4. \_\_\_\_\_

5. \_\_\_\_\_

6. \_\_\_\_\_

7. \_\_\_\_\_

8. \_\_\_\_\_

9. \_\_\_\_\_

10. \_\_\_\_\_

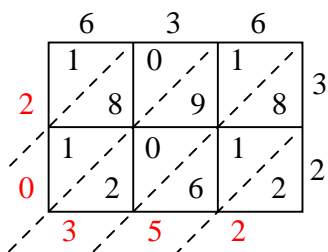
11. \_\_\_\_\_

12. \_\_\_\_\_

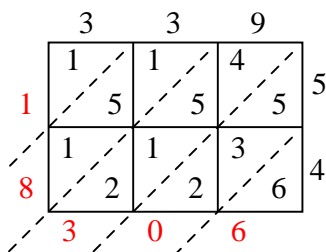


Usa la moltiplicazione del reticolo per risolvere ogni problema.

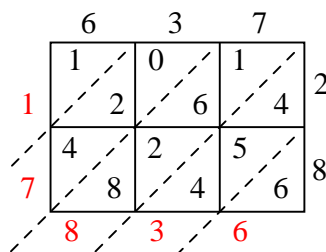
1)  $636 \times 32 =$



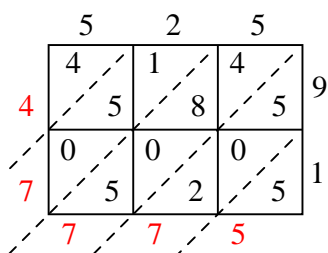
2)  $339 \times 54 =$



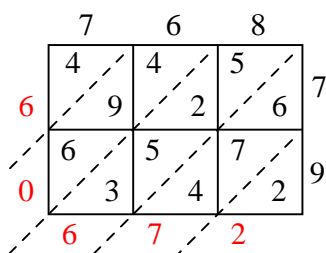
3)  $637 \times 28 =$



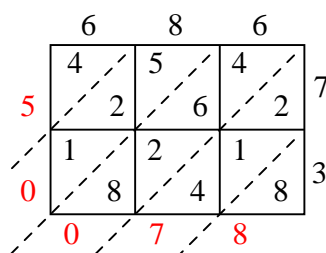
4)  $525 \times 91 =$



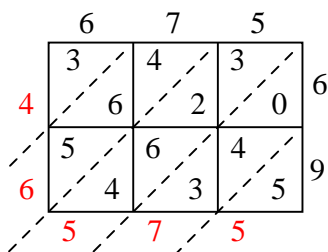
5)  $768 \times 79 =$



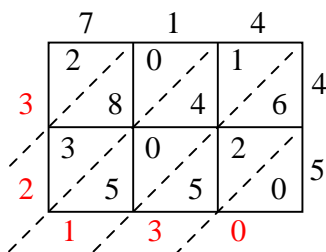
6)  $686 \times 73 =$



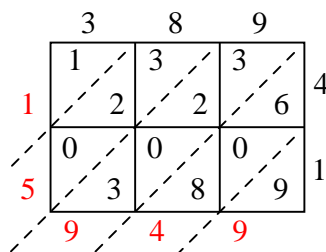
7)  $675 \times 69 =$



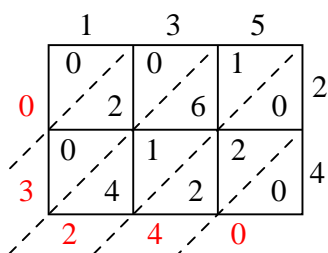
8)  $714 \times 45 =$



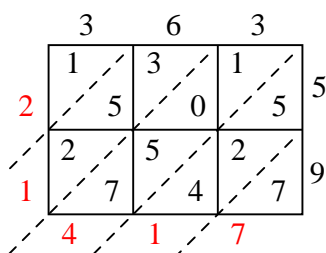
9)  $389 \times 41 =$



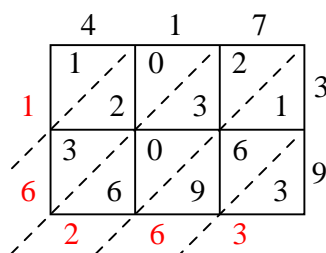
10)  $135 \times 24 =$



11)  $363 \times 59 =$



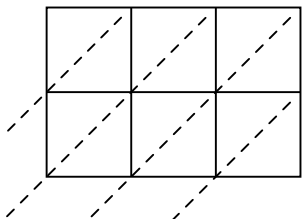
12)  $417 \times 39 =$

**Risposte**1. **20.352**2. **18.306**3. **17.836**4. **47.775**5. **60.672**6. **50.078**7. **46.575**8. **32.130**9. **15.949**10. **3.240**11. **21.417**12. **16.263**

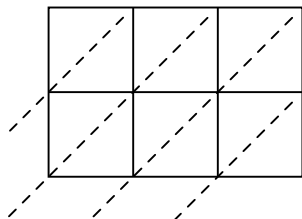


Usa la moltiplicazione del reticolo per risolvere ogni problema.

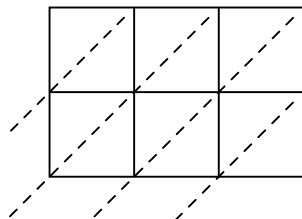
1)  $718 \times 14 =$



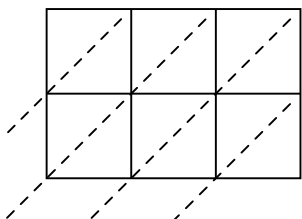
2)  $428 \times 34 =$



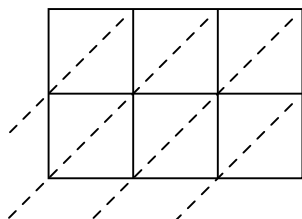
3)  $823 \times 37 =$



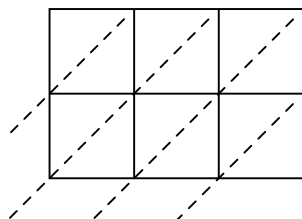
4)  $171 \times 34 =$



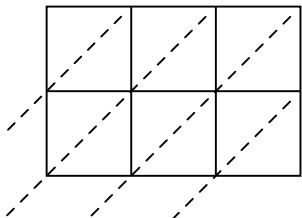
5)  $745 \times 82 =$



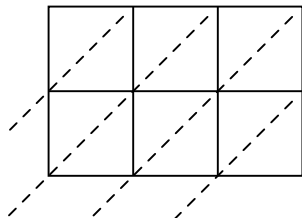
6)  $314 \times 99 =$



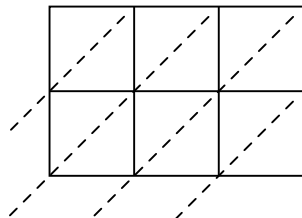
7)  $920 \times 70 =$



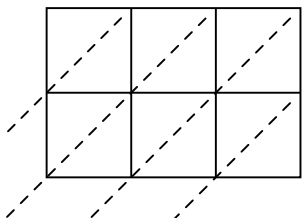
8)  $664 \times 98 =$



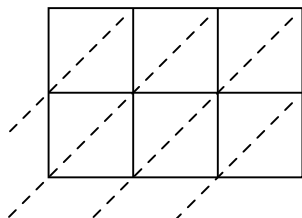
9)  $281 \times 53 =$



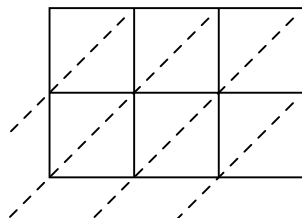
10)  $530 \times 53 =$



11)  $104 \times 75 =$



12)  $375 \times 51 =$



**Risposte**

1. \_\_\_\_\_

2. \_\_\_\_\_

3. \_\_\_\_\_

4. \_\_\_\_\_

5. \_\_\_\_\_

6. \_\_\_\_\_

7. \_\_\_\_\_

8. \_\_\_\_\_

9. \_\_\_\_\_

10. \_\_\_\_\_

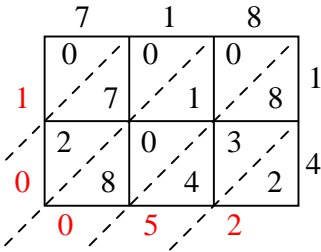
11. \_\_\_\_\_

12. \_\_\_\_\_

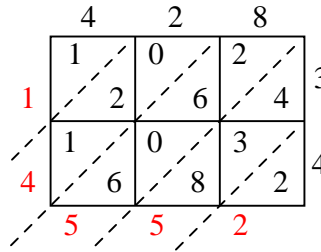


Usa la moltiplicazione del reticolo per risolvere ogni problema.

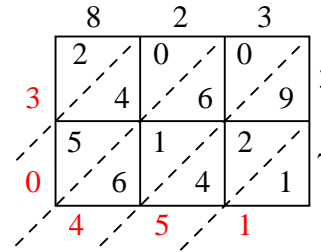
1)  $718 \times 14 =$



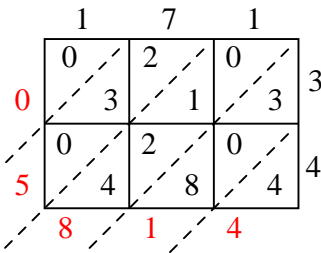
2)  $428 \times 34 =$



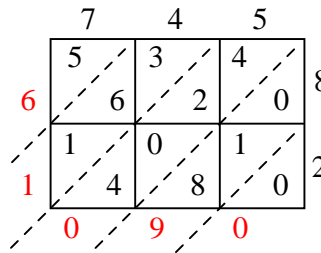
3)  $823 \times 37 =$



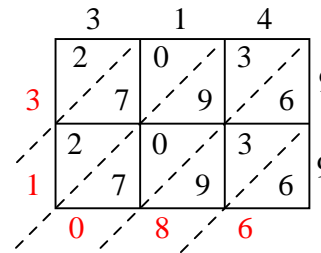
4)  $171 \times 34 =$



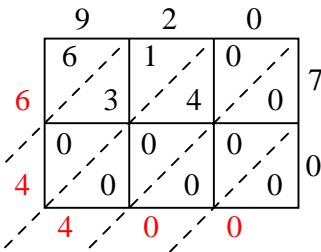
5)  $745 \times 82 =$



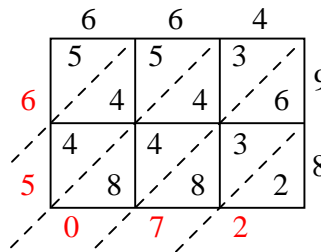
6)  $314 \times 99 =$



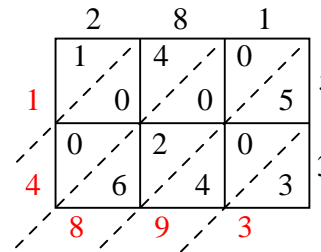
7)  $920 \times 70 =$



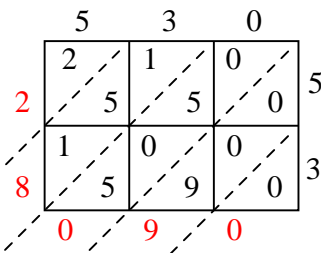
8)  $664 \times 98 =$



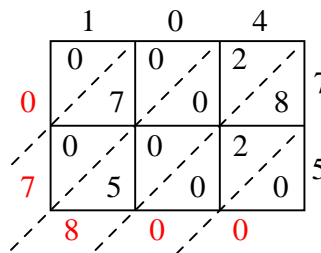
9)  $281 \times 53 =$



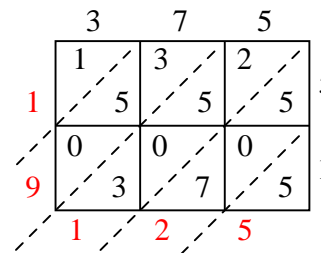
10)  $530 \times 53 =$



11)  $104 \times 75 =$



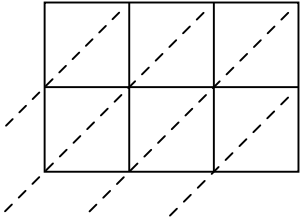
12)  $375 \times 51 =$

**Risposte**1. **10.052**2. **14.552**3. **30.451**4. **5.814**5. **61.090**6. **31.086**7. **64.400**8. **65.072**9. **14.893**10. **28.090**11. **7.800**12. **19.125**

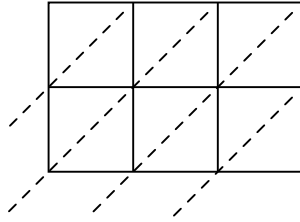


Usa la moltiplicazione del reticolo per risolvere ogni problema.

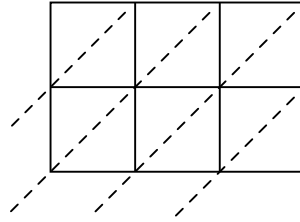
1)  $591 \times 54 =$



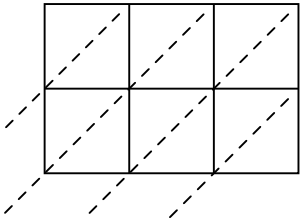
2)  $722 \times 75 =$



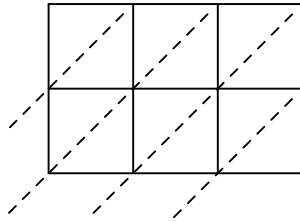
3)  $524 \times 33 =$



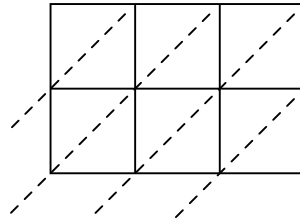
4)  $698 \times 33 =$



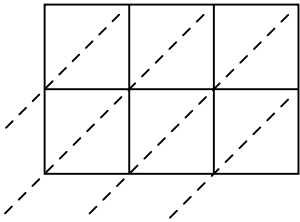
5)  $447 \times 39 =$



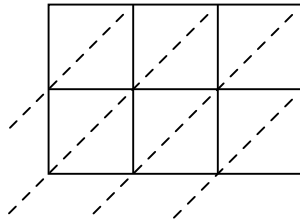
6)  $111 \times 53 =$



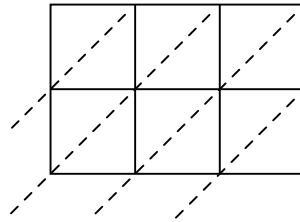
7)  $696 \times 63 =$



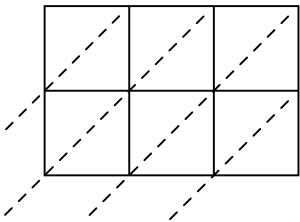
8)  $568 \times 79 =$



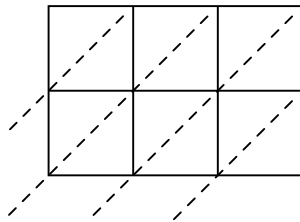
9)  $907 \times 26 =$



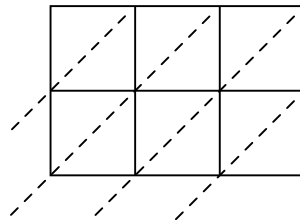
10)  $399 \times 30 =$



11)  $798 \times 26 =$



12)  $712 \times 46 =$

**Risposte**

1. \_\_\_\_\_

2. \_\_\_\_\_

3. \_\_\_\_\_

4. \_\_\_\_\_

5. \_\_\_\_\_

6. \_\_\_\_\_

7. \_\_\_\_\_

8. \_\_\_\_\_

9. \_\_\_\_\_

10. \_\_\_\_\_

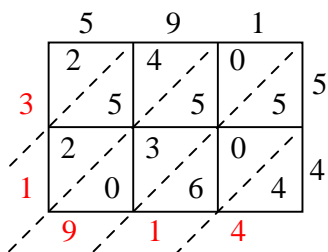
11. \_\_\_\_\_

12. \_\_\_\_\_

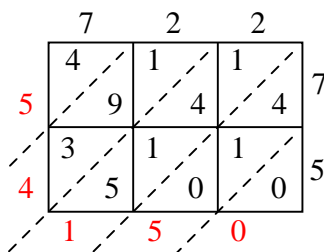


Usa la moltiplicazione del reticolo per risolvere ogni problema.

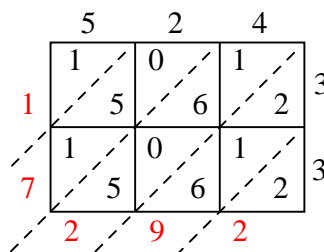
1)  $591 \times 54 =$



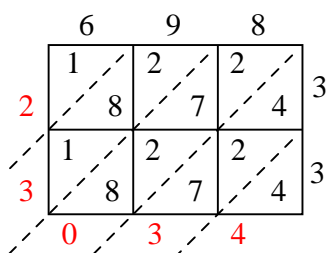
2)  $722 \times 75 =$



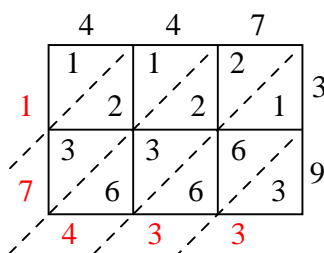
3)  $524 \times 33 =$



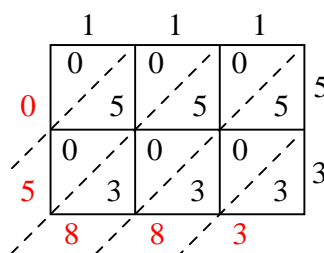
4)  $698 \times 33 =$



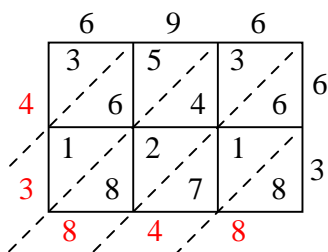
5)  $447 \times 39 =$



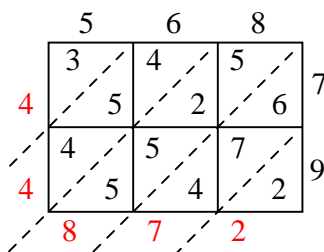
6)  $111 \times 53 =$



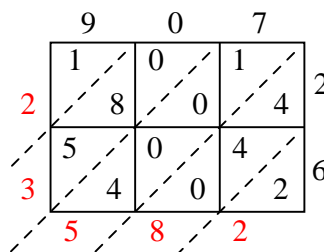
7)  $696 \times 63 =$



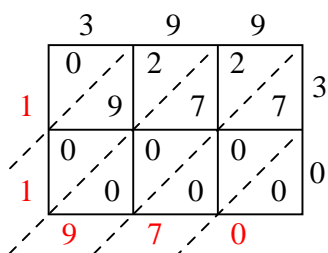
8)  $568 \times 79 =$



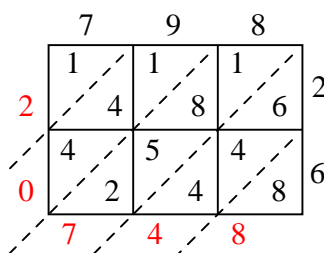
9)  $907 \times 26 =$



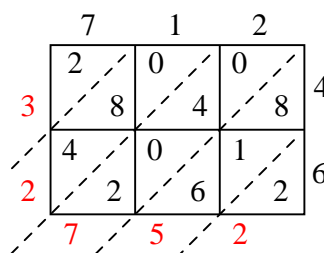
10)  $399 \times 30 =$



11)  $798 \times 26 =$



12)  $712 \times 46 =$

**Risposte**1. **31.914**2. **54.150**3. **17.292**4. **23.034**5. **17.433**6. **5.883**7. **43.848**8. **44.872**9. **23.582**10. **11.970**11. **20.748**12. **32.752**





Usa la moltiplicazione del reticolo per risolvere ogni problema.

1)  $133 \times 55 =$



2)  $680 \times 53 =$



3)  $362 \times 51 =$



4)  $703 \times 44 =$



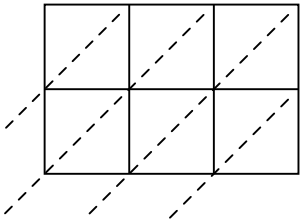
5)  $560 \times 57 =$



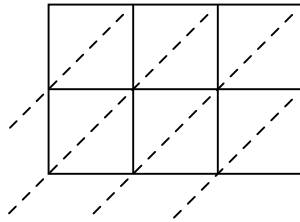
6)  $637 \times 90 =$



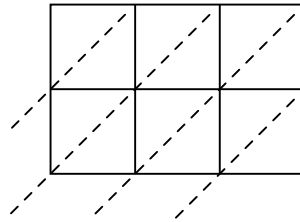
7)  $711 \times 62 =$



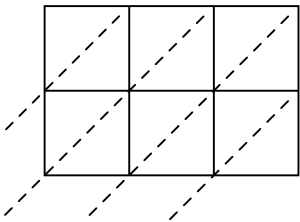
8)  $361 \times 36 =$



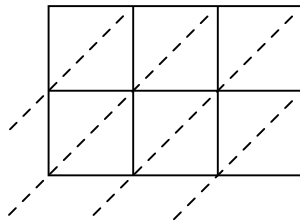
9)  $743 \times 53 =$



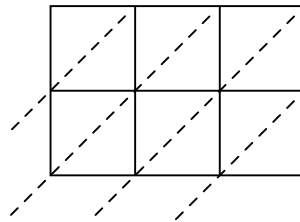
10)  $344 \times 41 =$



11)  $279 \times 94 =$



12)  $862 \times 89 =$

**Risposte**

1. \_\_\_\_\_

2. \_\_\_\_\_

3. \_\_\_\_\_

4. \_\_\_\_\_

5. \_\_\_\_\_

6. \_\_\_\_\_

7. \_\_\_\_\_

8. \_\_\_\_\_

9. \_\_\_\_\_

10. \_\_\_\_\_

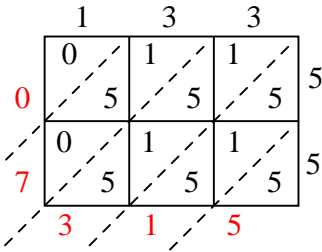
11. \_\_\_\_\_

12. \_\_\_\_\_

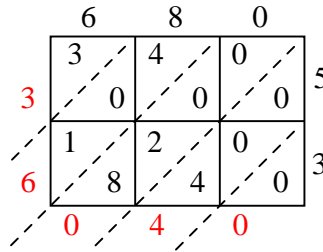


Usa la moltiplicazione del reticolo per risolvere ogni problema.

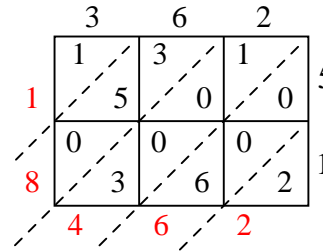
1)  $133 \times 55 =$



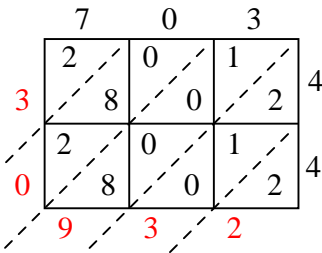
2)  $680 \times 53 =$



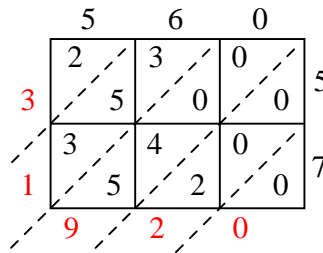
3)  $362 \times 51 =$



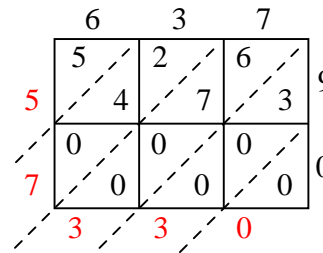
4)  $703 \times 44 =$



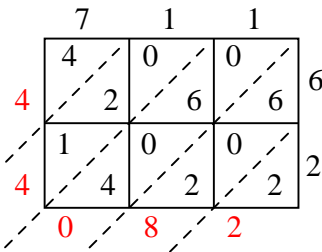
5)  $560 \times 57 =$



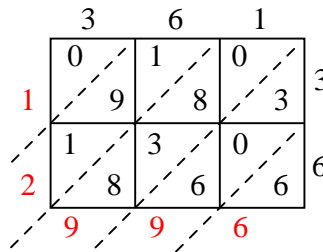
6)  $637 \times 90 =$



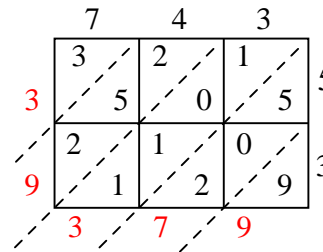
7)  $711 \times 62 =$



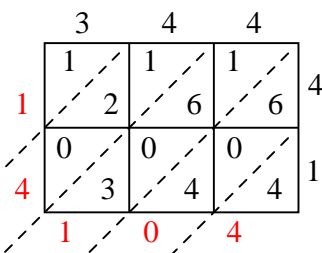
8)  $361 \times 36 =$



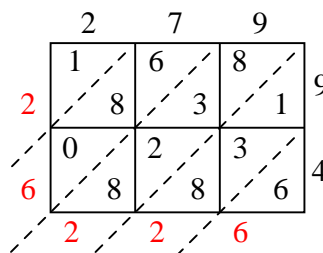
9)  $743 \times 53 =$



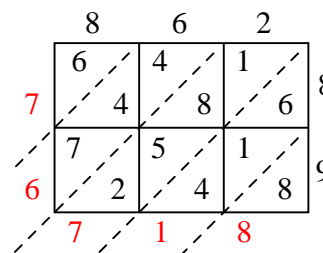
10)  $344 \times 41 =$



11)  $279 \times 94 =$



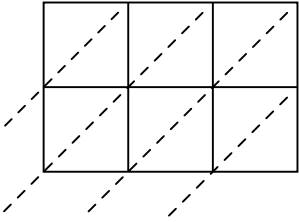
12)  $862 \times 89 =$

**Risposte**1. **7.315**2. **36.040**3. **18.462**4. **30.932**5. **31.920**6. **57.330**7. **44.082**8. **12.996**9. **39.379**10. **14.104**11. **26.226**12. **76.718**

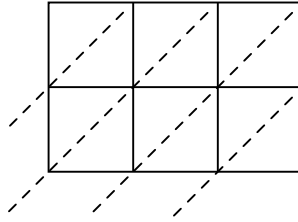


Usa la moltiplicazione del reticolo per risolvere ogni problema.

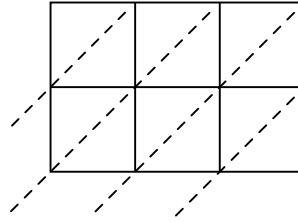
1)  $828 \times 35 =$



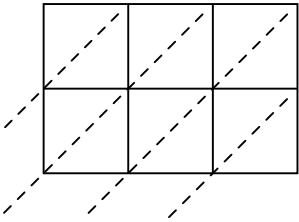
2)  $953 \times 85 =$



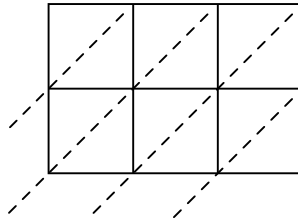
3)  $706 \times 55 =$



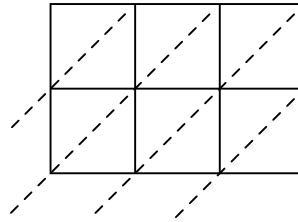
4)  $862 \times 57 =$



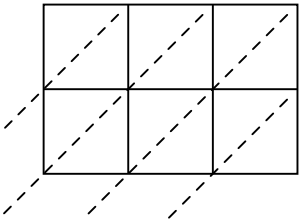
5)  $350 \times 99 =$



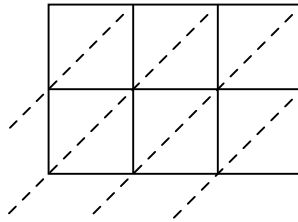
6)  $488 \times 19 =$



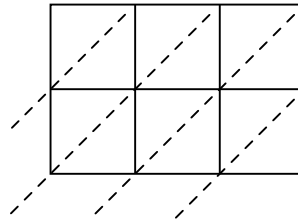
7)  $543 \times 53 =$



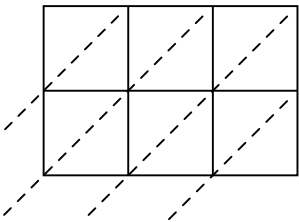
8)  $387 \times 83 =$



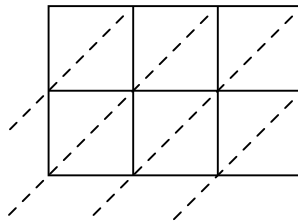
9)  $702 \times 60 =$



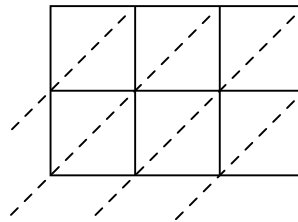
10)  $244 \times 16 =$



11)  $848 \times 21 =$



12)  $673 \times 70 =$

**Risposte**

1. \_\_\_\_\_

2. \_\_\_\_\_

3. \_\_\_\_\_

4. \_\_\_\_\_

5. \_\_\_\_\_

6. \_\_\_\_\_

7. \_\_\_\_\_

8. \_\_\_\_\_

9. \_\_\_\_\_

10. \_\_\_\_\_

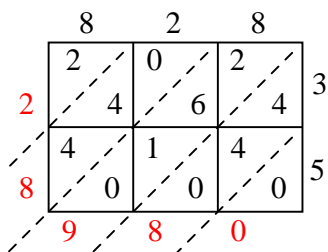
11. \_\_\_\_\_

12. \_\_\_\_\_

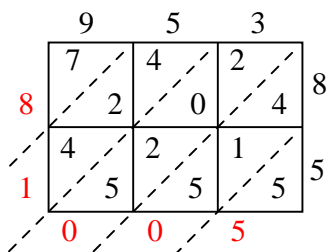


Usa la moltiplicazione del reticolo per risolvere ogni problema.

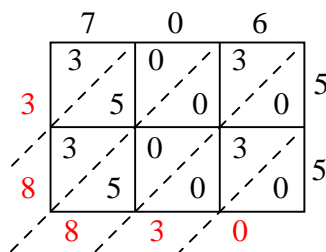
1)  $828 \times 35 =$



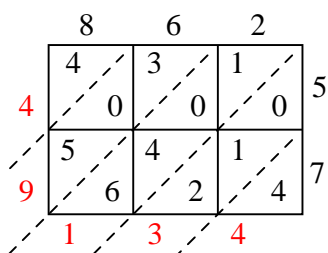
2)  $953 \times 85 =$



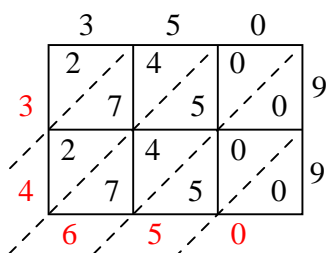
3)  $706 \times 55 =$



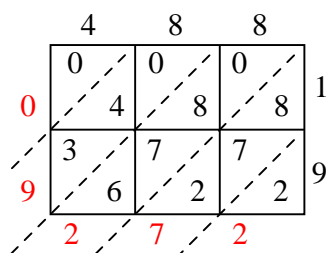
4)  $862 \times 57 =$



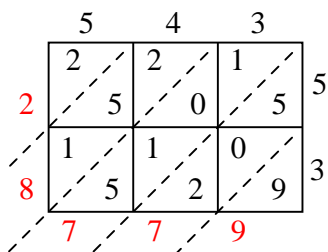
5)  $350 \times 99 =$



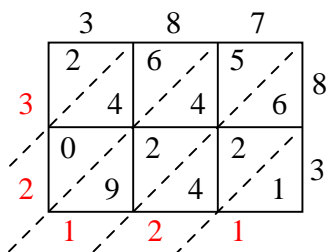
6)  $488 \times 19 =$



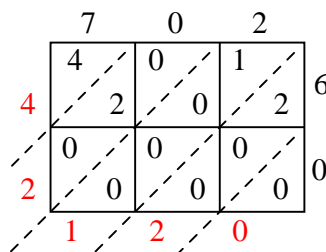
7)  $543 \times 53 =$



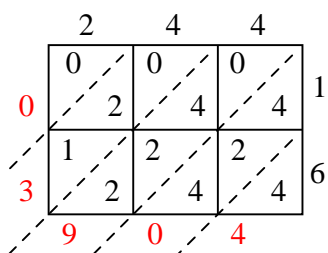
8)  $387 \times 83 =$



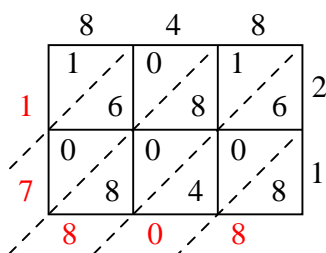
9)  $702 \times 60 =$



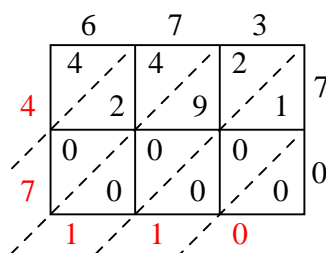
10)  $244 \times 16 =$



11)  $848 \times 21 =$



12)  $673 \times 70 =$

**Risposte**1. **28.980**2. **81.005**3. **38.830**4. **49.134**5. **34.650**6. **9.272**7. **28.779**8. **32.121**9. **42.120**10. **3.904**11. **17.808**12. **47.110**