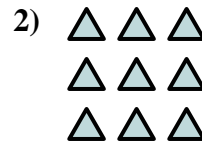





Scrivi un'equazione che esprima il contenuto degli insiemi e trova il numero delle forme.

Risposte

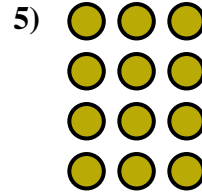



Es. $2 \times 2 = 4$

1. _____

2. _____

3. _____

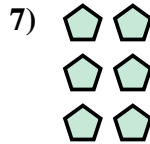



4. _____

5. _____

6. _____

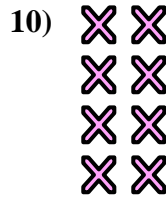
7. _____



8. _____

9. _____

10. _____


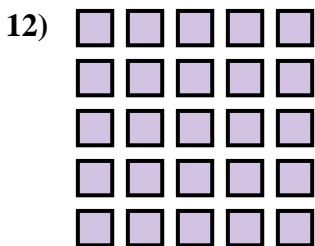


11. _____

12. _____

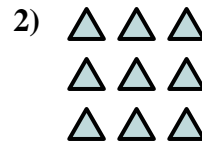

13. _____

14. _____

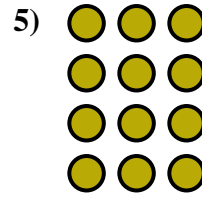





Scrivi un'equazione che esprima il contenuto degli insiemi e trova il numero delle forme.



Risposte
Es. $2 \times 2 = 4$



1. $5 \times 2 = 10$

2. $3 \times 3 = 9$

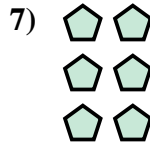

3. $2 \times 3 = 6$

4. $3 \times 4 = 12$

5. $4 \times 3 = 12$

6. $5 \times 4 = 20$

7. $3 \times 2 = 6$

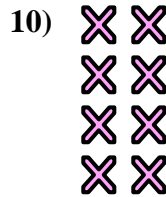


8. $5 \times 3 = 15$

9. $2 \times 5 = 10$

10. $4 \times 2 = 8$

11. $3 \times 5 = 15$



12. $5 \times 5 = 25$

13. $2 \times 4 = 8$

14. $4 \times 4 = 16$

