
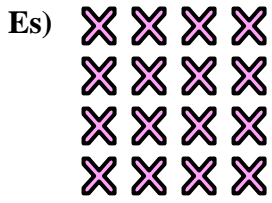




Scrivi un'equazione che esprima il contenuto degli insiemi e trova il numero delle forme.

Risposte

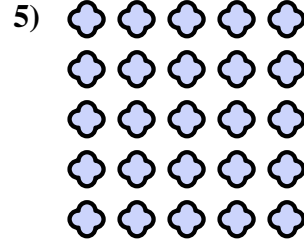
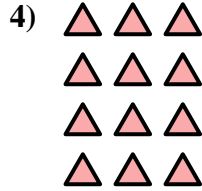


Es. $4 \times 4 = 16$

1. _____

2. _____

3. _____

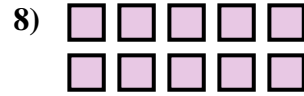
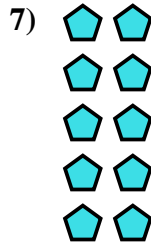


4. _____

5. _____

6. _____


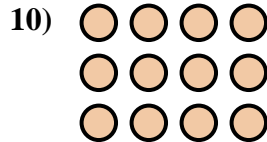

7. _____



8. _____

9. _____

10. _____

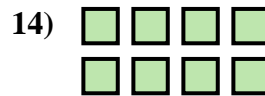

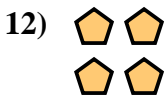


11. _____

12. _____


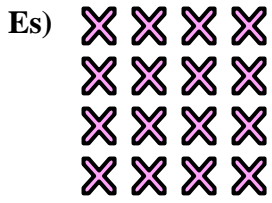
13. _____

14. _____



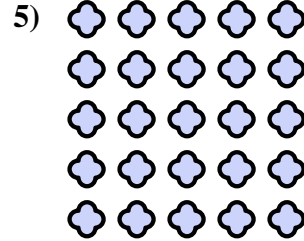
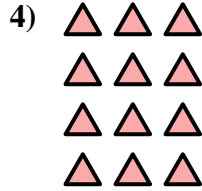


Scrivi un'equazione che esprima il contenuto degli insiemi e trova il numero delle forme.



Risposte

Es. $4 \times 4 = 16$



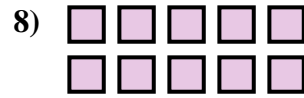
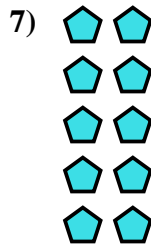
1. $5 \times 4 = 20$

2. $4 \times 5 = 20$

3. $2 \times 3 = 6$

4. $4 \times 3 = 12$




5. $5 \times 5 = 25$



6. $3 \times 5 = 15$

7. $5 \times 2 = 10$

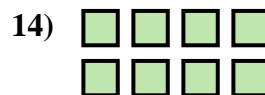

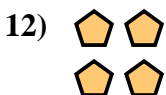
8. $2 \times 5 = 10$



9. $3 \times 3 = 9$

10. $3 \times 4 = 12$

11. $4 \times 2 = 8$



12. $2 \times 2 = 4$

13. $3 \times 2 = 6$

14. $2 \times 4 = 8$