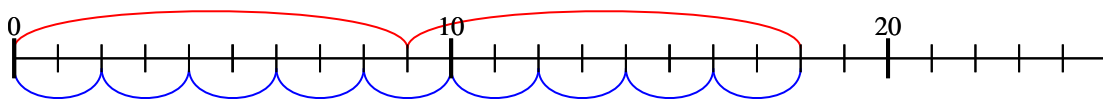


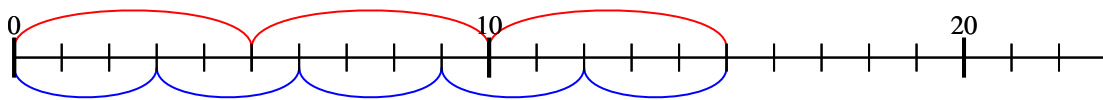


Usa la linea numerata per risolvere ogni operazione.

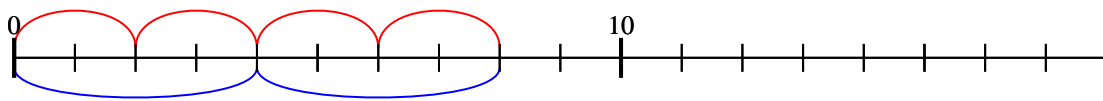
1) $2 \times 9 =$
 $9 \times 2 =$



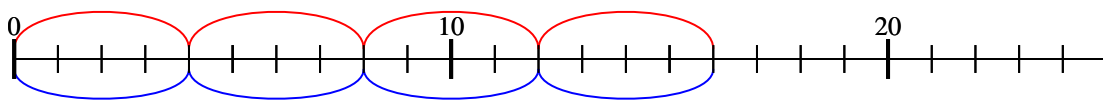
2) $3 \times 5 =$
 $5 \times 3 =$



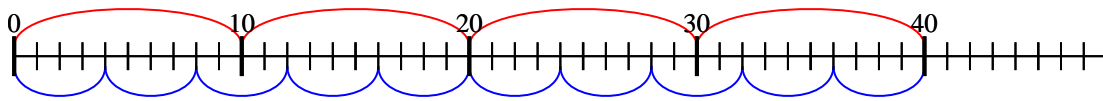
3) $4 \times 2 =$
 $2 \times 4 =$



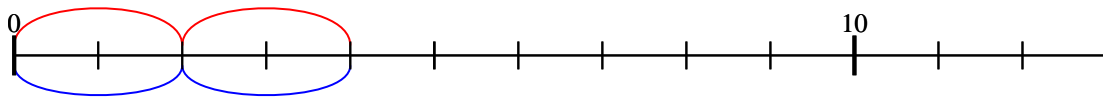
4) $4 \times 4 =$
 $4 \times 4 =$



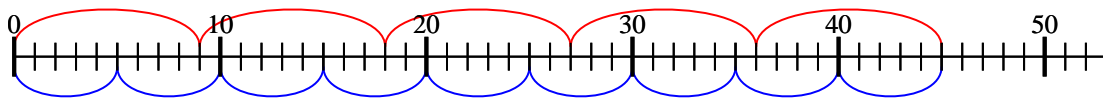
5) $4 \times 10 =$
 $10 \times 4 =$



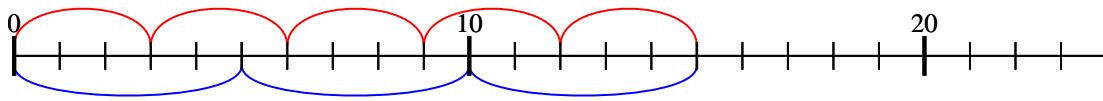
6) $2 \times 2 =$
 $2 \times 2 =$



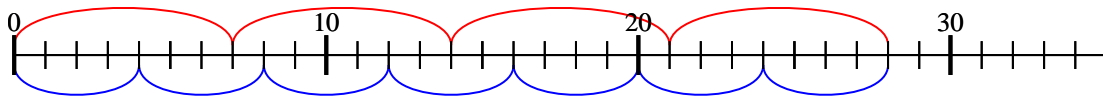
7) $5 \times 9 =$
 $9 \times 5 =$



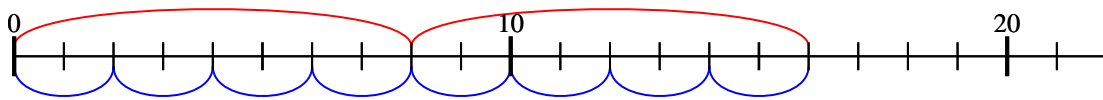
8) $5 \times 3 =$
 $3 \times 5 =$



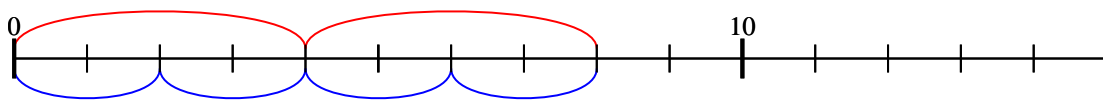
9) $4 \times 7 =$
 $7 \times 4 =$



10) $2 \times 8 =$
 $8 \times 2 =$



11) $2 \times 4 =$
 $4 \times 2 =$



Risposte

1. 18

2. 15

3. 8

4. 16

5. 40

6. 4

7. 45

8. 15

9. 28

10. 16

11. 8