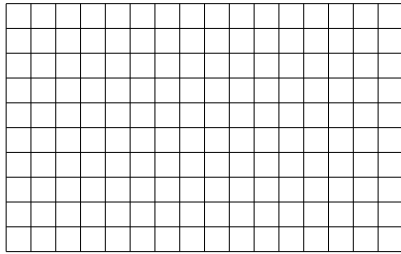





Usa le griglie fornite per calcolare i risultati.


1)  $10 \times 16 =$




2)  $11 \times 10 =$




3)  $10 \times 12 =$




4)  $10 \times 18 =$



5)  $10 \times 19 =$



6)  $10 \times 13 =$

**Risposte**

1. \_\_\_\_\_

2. \_\_\_\_\_

3. \_\_\_\_\_

4. \_\_\_\_\_

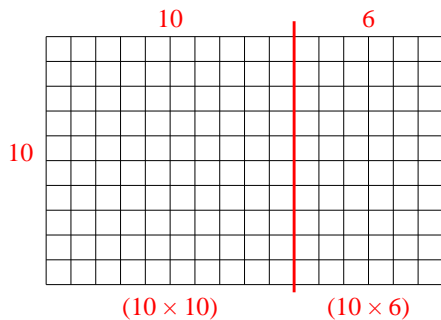
5. \_\_\_\_\_

6. \_\_\_\_\_

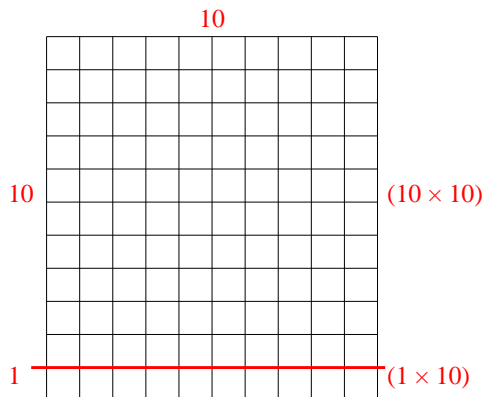


Usa le griglie fornite per calcolare i risultati.

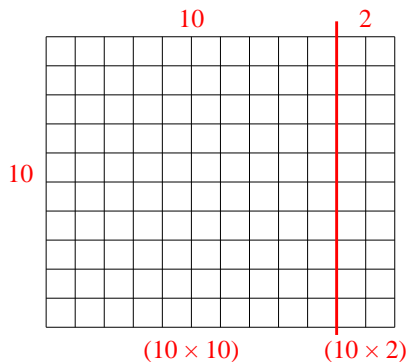
1)  $10 \times 16 =$



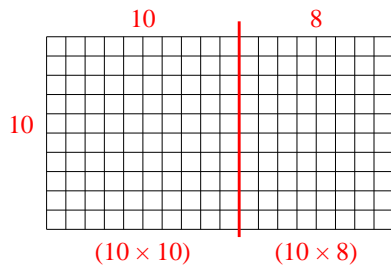
2)  $11 \times 10 =$



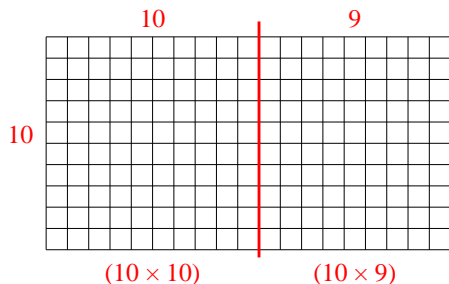
3)  $10 \times 12 =$



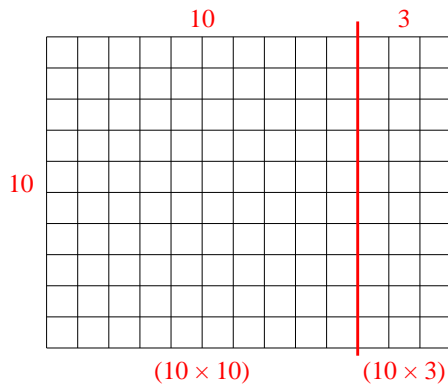
4)  $10 \times 18 =$



5)  $10 \times 19 =$



6)  $10 \times 13 =$



**Risposte**

1. **160**

2. **110**

3. **120**

4. **180**

5. **190**

6. **130**