





Usa le griglie fornite per calcolare i risultati.


1)  $16 \times 10 =$




2)  $10 \times 12 =$




3)  $19 \times 10 =$




4)  $10 \times 19 =$



5)  $15 \times 10 =$



6)  $10 \times 18 =$

**Risposte**

1. \_\_\_\_\_

2. \_\_\_\_\_

3. \_\_\_\_\_

4. \_\_\_\_\_

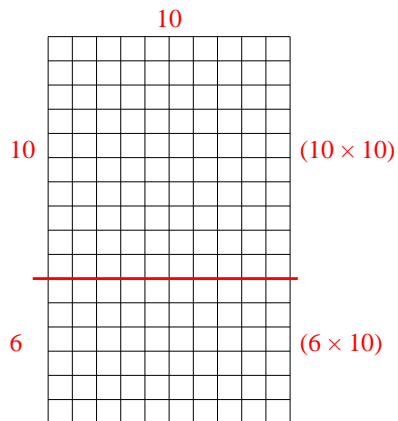
5. \_\_\_\_\_

6. \_\_\_\_\_

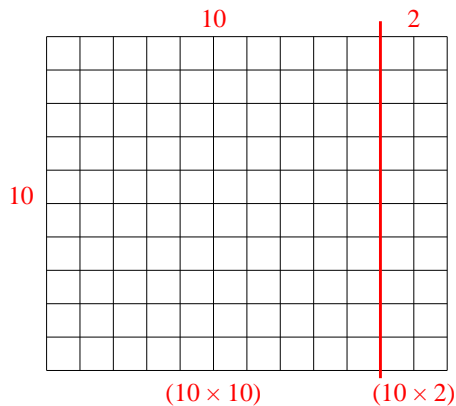


Usa le griglie fornite per calcolare i risultati.

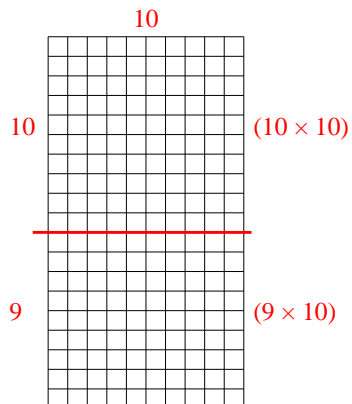
1)  $16 \times 10 =$



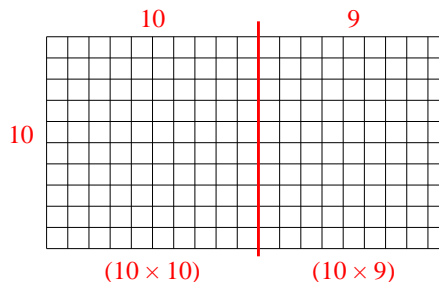
2)  $10 \times 12 =$



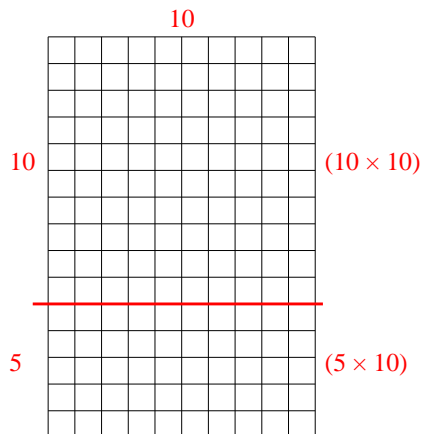
3)  $19 \times 10 =$



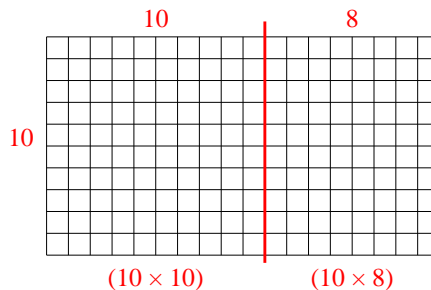
4)  $10 \times 19 =$



5)  $15 \times 10 =$



6)  $10 \times 18 =$



**Risposte**

1. 160

2. 120

3. 190

4. 190

5. 150

6. 180