





Usa le griglie fornite per calcolare i risultati.


1) $13 \times 10 =$




2) $10 \times 18 =$




3) $10 \times 11 =$




4) $16 \times 10 =$



5) $10 \times 12 =$



6) $15 \times 10 =$



Risposte

1. _____

2. _____

3. _____

4. _____

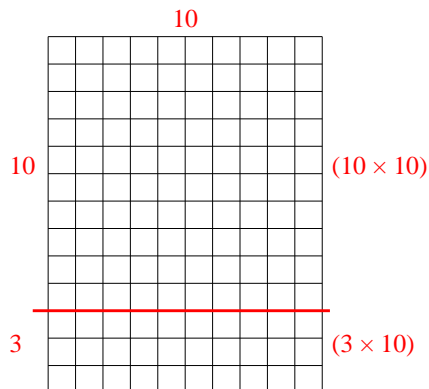
5. _____

6. _____

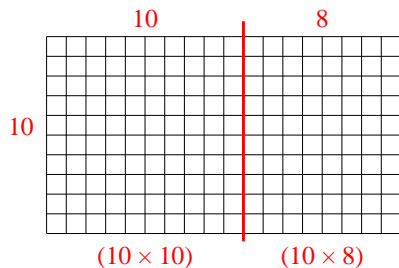


Usa le griglie fornite per calcolare i risultati.

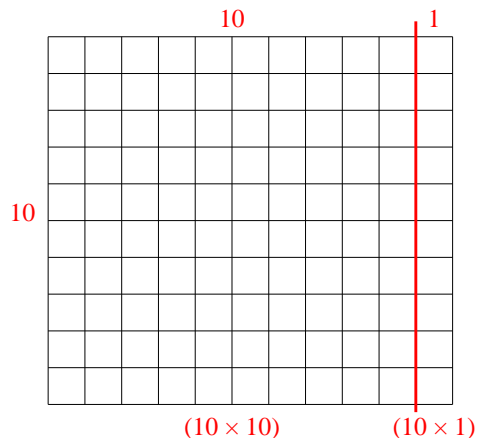
1) $13 \times 10 =$



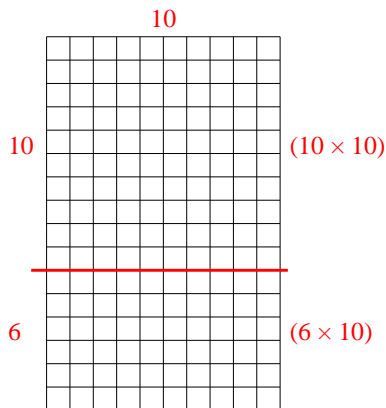
2) $10 \times 18 =$



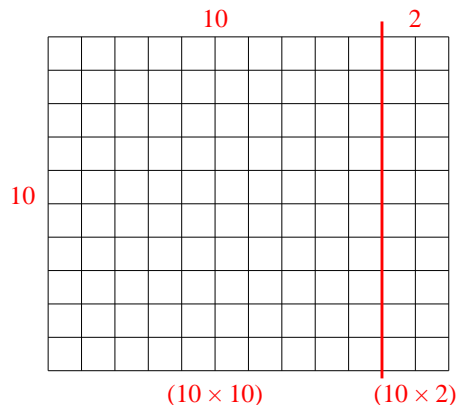
3) $10 \times 11 =$



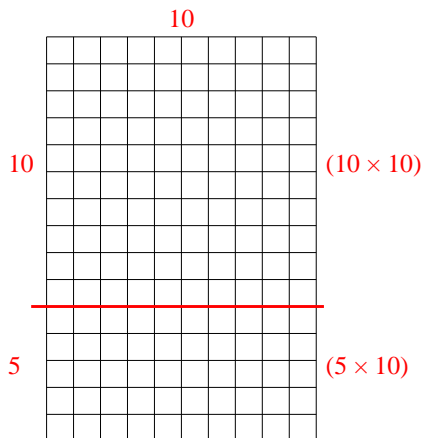
4) $16 \times 10 =$



5) $10 \times 12 =$



6) $15 \times 10 =$



Risposte

1. **130**

2. **180**

3. **110**

4. **160**

5. **120**

6. **150**