





Usa le griglie fornite per calcolare i risultati.


1) $22 \times 20 =$




2) $20 \times 29 =$




3) $29 \times 20 =$




4) $25 \times 10 =$



5) $10 \times 29 =$



6) $10 \times 26 =$



Risposte

1. _____

2. _____

3. _____

4. _____

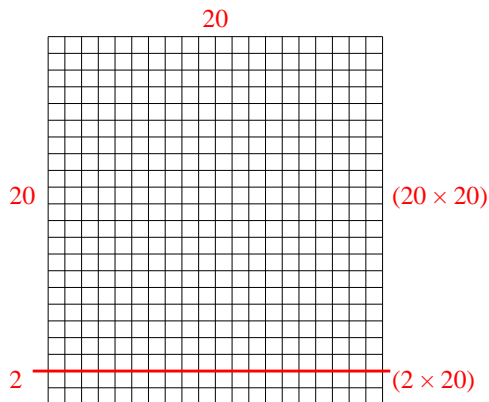
5. _____

6. _____

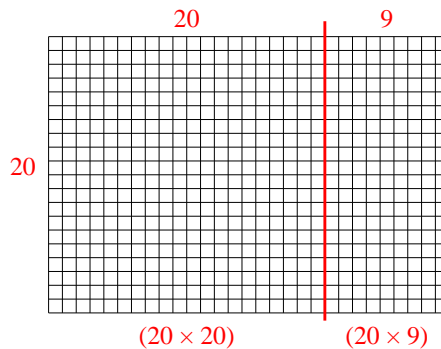


Usa le griglie fornite per calcolare i risultati.

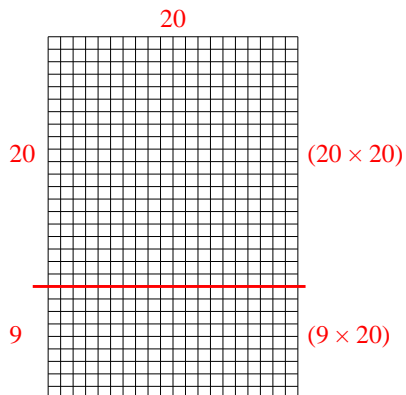
1) $22 \times 20 =$



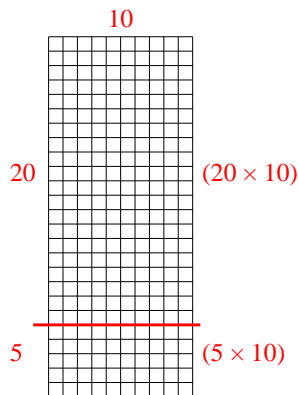
2) $20 \times 29 =$



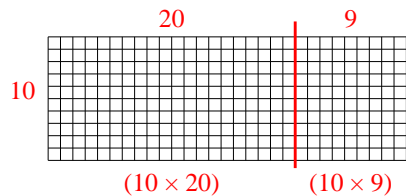
3) $29 \times 20 =$



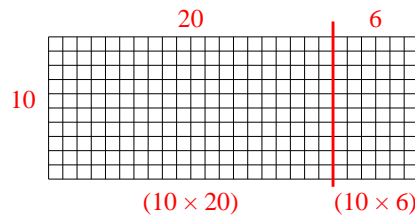
4) $25 \times 10 =$



5) $10 \times 29 =$



6) $10 \times 26 =$



Risposte

1. **440**

2. **580**

3. **580**

4. **250**

5. **290**

6. **260**