





Usa le griglie per risolvere ogni operazione.

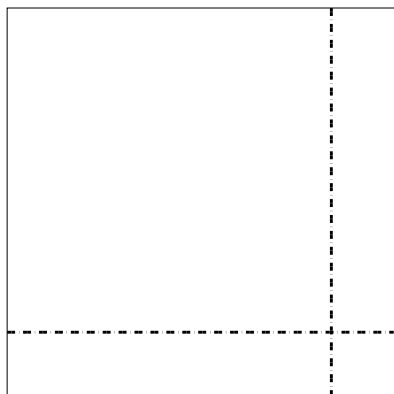
1)  $43 \times 28 =$



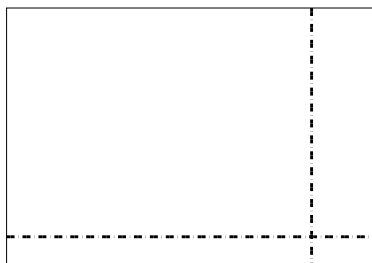
2)  $37 \times 18 =$




3)  $36 \times 36 =$




4)  $34 \times 49 =$



5)  $46 \times 54 =$



6)  $44 \times 52 =$



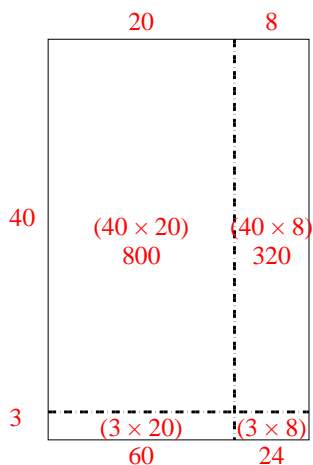
**Risposte**

- 1. \_\_\_\_\_
- 2. \_\_\_\_\_
- 3. \_\_\_\_\_
- 4. \_\_\_\_\_
- 5. \_\_\_\_\_
- 6. \_\_\_\_\_

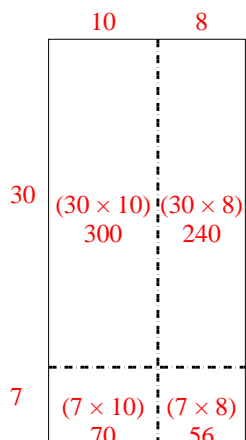


Usa le griglie per risolvere ogni operazione.

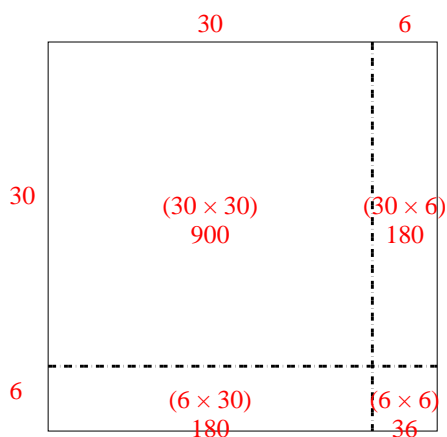
1)  $43 \times 28 =$



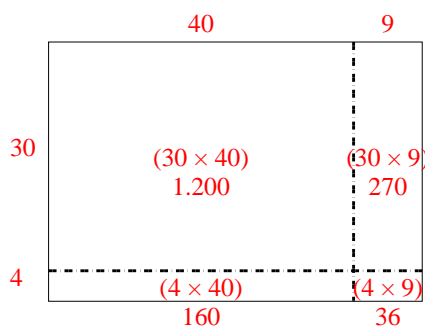
2)  $37 \times 18 =$



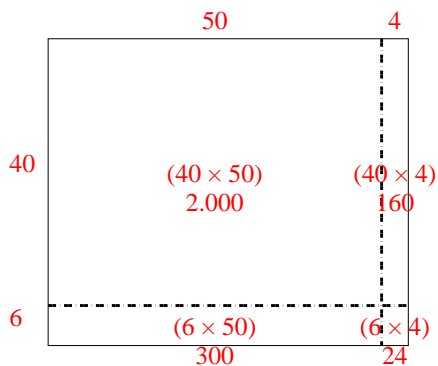
3)  $36 \times 36 =$



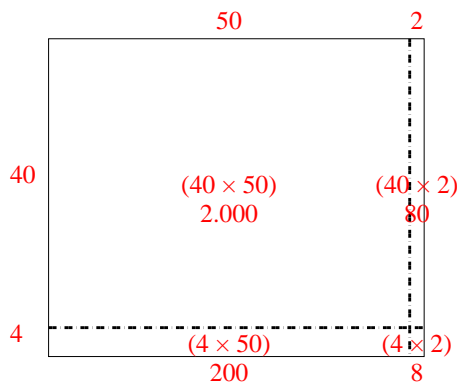
4)  $34 \times 49 =$



5)  $46 \times 54 =$



6)  $44 \times 52 =$



**Risposte**

1. **1.204**
2. **666**
3. **1.296**
4. **1.666**
5. **2.484**
6. **2.288**