





Usa le griglie per risolvere ogni operazione.

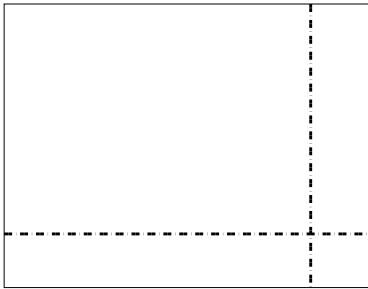
1)  $36 \times 55 =$




2)  $42 \times 26 =$




3)  $37 \times 48 =$




4)  $44 \times 59 =$



5)  $46 \times 39 =$



6)  $47 \times 59 =$



**Risposte**

1. \_\_\_\_\_

2. \_\_\_\_\_

3. \_\_\_\_\_

4. \_\_\_\_\_

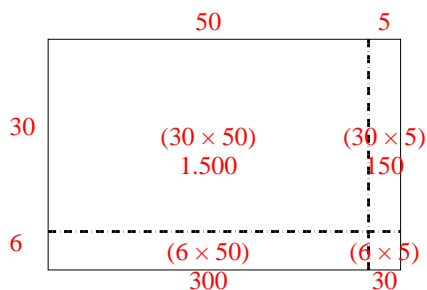
5. \_\_\_\_\_

6. \_\_\_\_\_

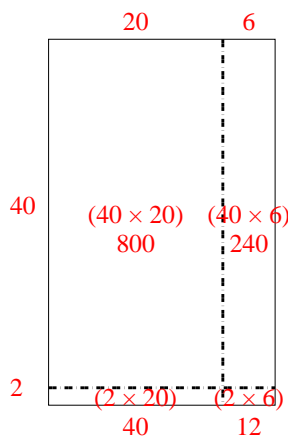


Usa le griglie per risolvere ogni operazione.

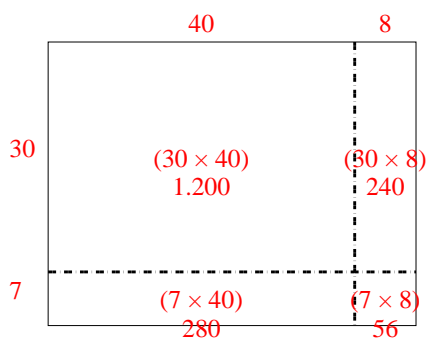
1)  $36 \times 55 =$



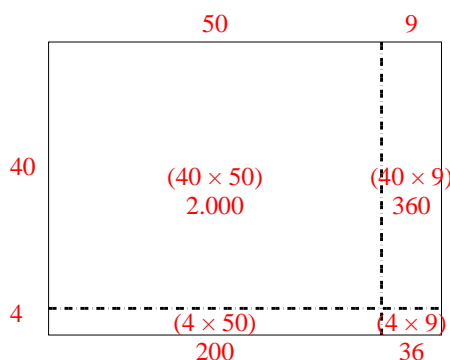
2)  $42 \times 26 =$



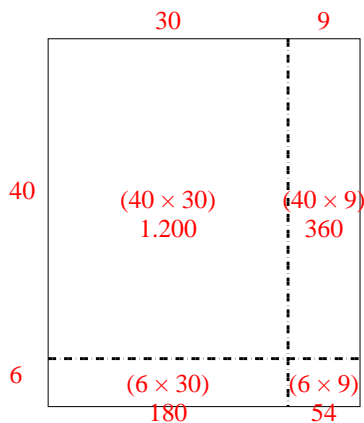
3)  $37 \times 48 =$



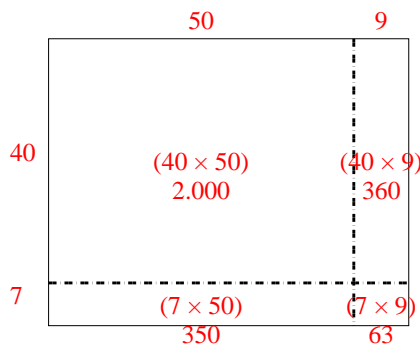
4)  $44 \times 59 =$



5)  $46 \times 39 =$



6)  $47 \times 59 =$



**Risposte**

1. **1.980**

2. **1.092**

3. **1.776**

4. **2.596**

5. **1.794**

6. **2.773**