





Usa le griglie per risolvere ogni operazione.

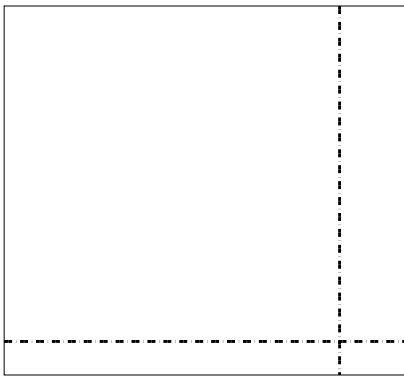
1) $48 \times 23 =$




2) $45 \times 44 =$




3) $33 \times 36 =$




4) $37 \times 24 =$



5) $39 \times 14 =$



6) $35 \times 12 =$



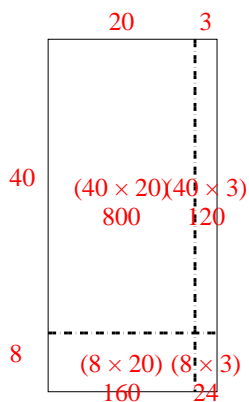
Risposte

- 1. _____
- 2. _____
- 3. _____
- 4. _____
- 5. _____
- 6. _____

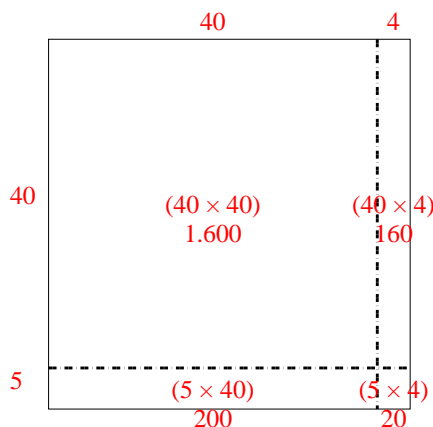


Usa le griglie per risolvere ogni operazione.

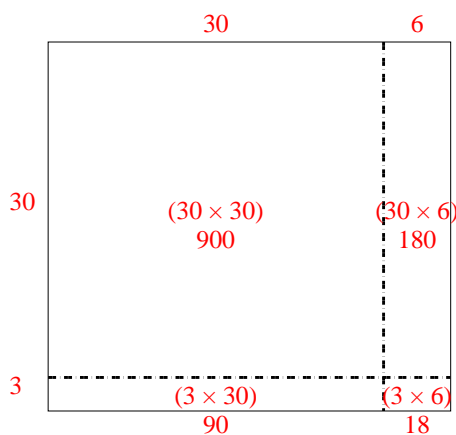
1) $48 \times 23 =$



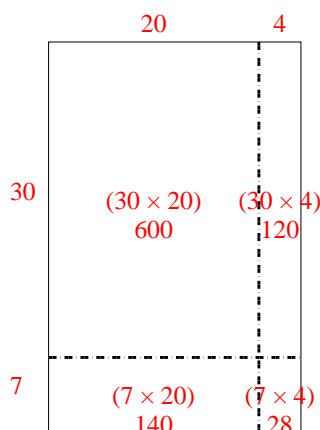
2) $45 \times 44 =$



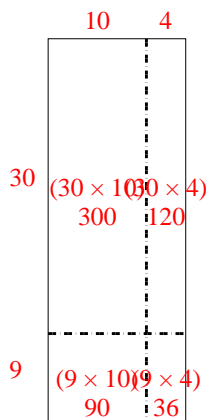
3) $33 \times 36 =$



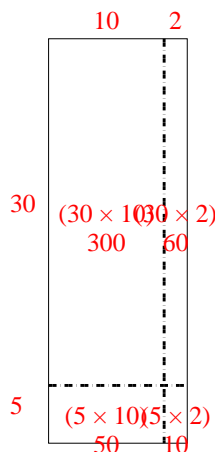
4) $37 \times 24 =$



5) $39 \times 14 =$



6) $35 \times 12 =$



Risposte

1. **1.104**

2. **1.980**

3. **1.188**

4. **888**

5. **546**

6. **420**