





Usa le griglie per risolvere ogni operazione.


1) $43 \times 36 =$




2) $37 \times 43 =$




3) $33 \times 22 =$




4) $34 \times 45 =$



5) $39 \times 46 =$



6) $36 \times 35 =$



Risposte

1. _____

2. _____

3. _____

4. _____

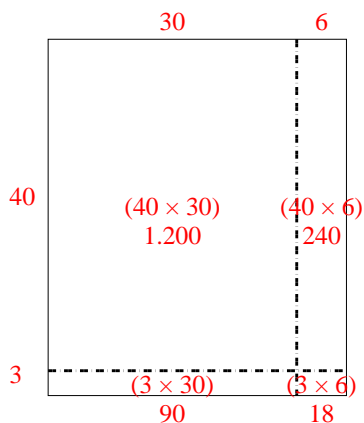
5. _____

6. _____

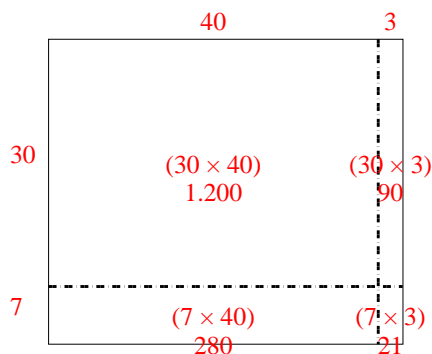


Usa le griglie per risolvere ogni operazione.

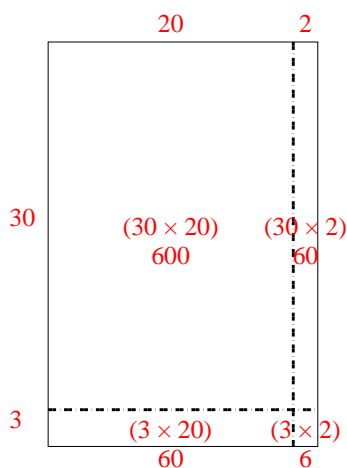
1) $43 \times 36 =$



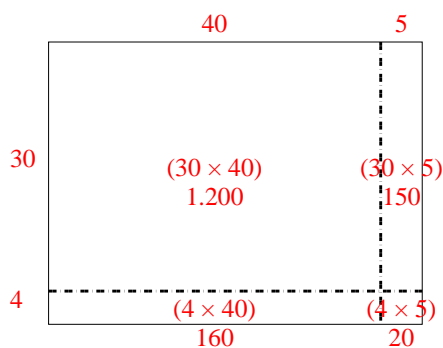
2) $37 \times 43 =$



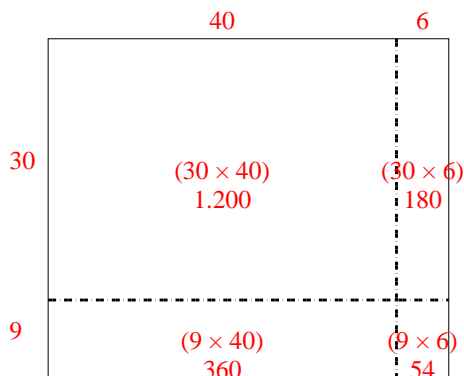
3) $33 \times 22 =$



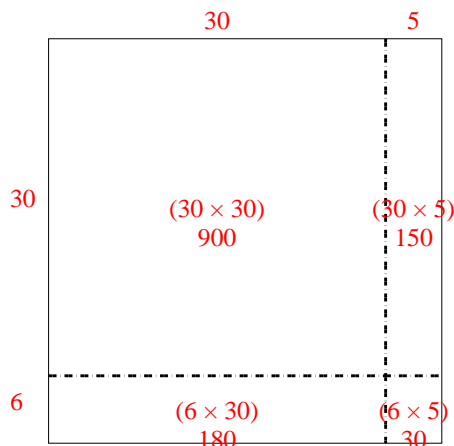
4) $34 \times 45 =$



5) $39 \times 46 =$



6) $36 \times 35 =$



Risposte

1. **1.548**

2. **1.591**

3. **726**

4. **1.530**

5. **1.794**

6. **1.260**