





Usa le griglie per risolvere ogni operazione.

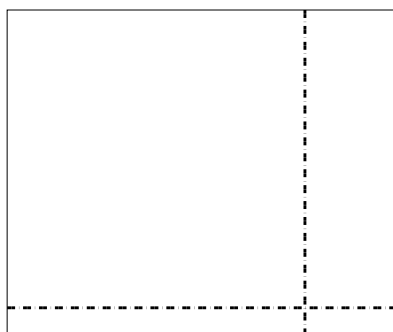
1) $54 \times 44 =$




2) $38 \times 23 =$



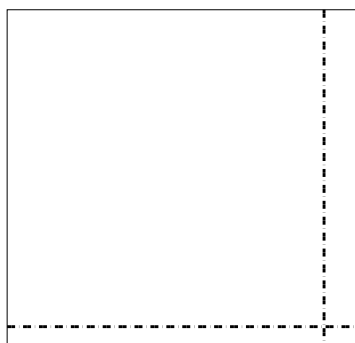
3) $33 \times 39 =$




4) $32 \times 37 =$



5) $32 \times 33 =$



6) $33 \times 13 =$



Risposte

1. _____

2. _____

3. _____

4. _____

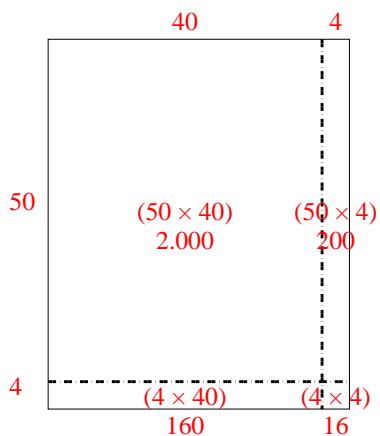
5. _____

6. _____

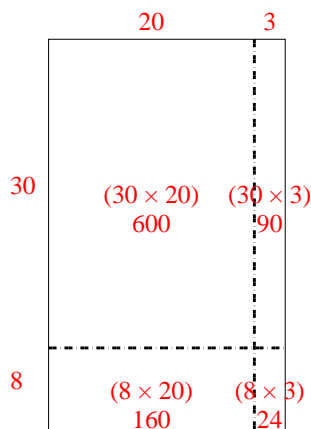


Usa le griglie per risolvere ogni operazione.

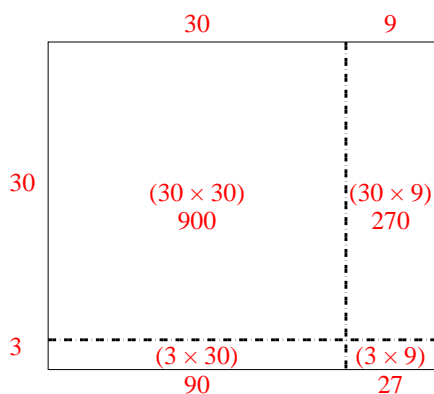
1) $54 \times 44 =$



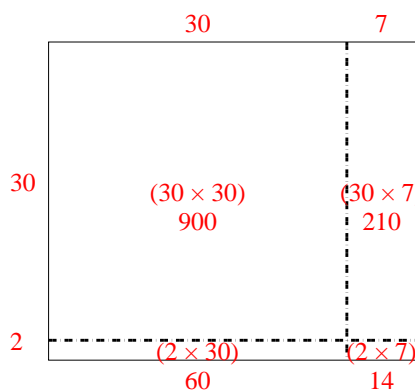
2) $38 \times 23 =$



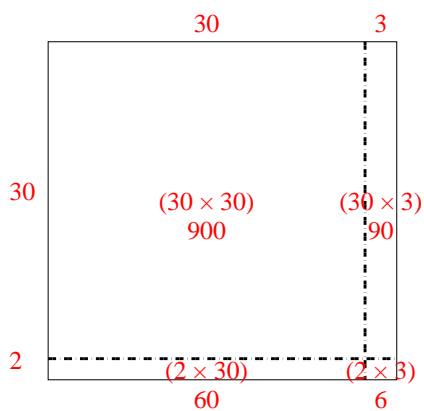
3) $33 \times 39 =$



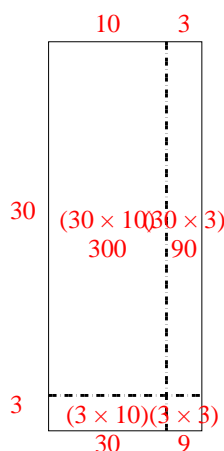
4) $32 \times 37 =$



5) $32 \times 33 =$



6) $33 \times 13 =$



Risposte

1. **2.376**

2. **874**

3. **1.287**

4. **1.184**

5. **1.056**

6. **429**