





Usa le griglie fornite per risolvere ogni operazione.


1) $32 \times 20 =$




2) $30 \times 37 =$




3) $20 \times 22 =$




4) $20 \times 29 =$



5) $23 \times 20 =$



6) $28 \times 20 =$



Risposte

1. _____

2. _____

3. _____

4. _____

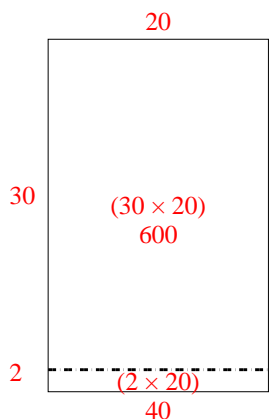
5. _____

6. _____

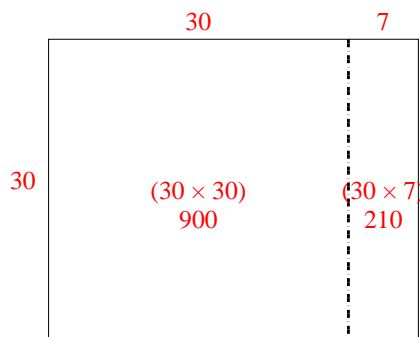


Usa le griglie fornite per risolvere ogni operazione.

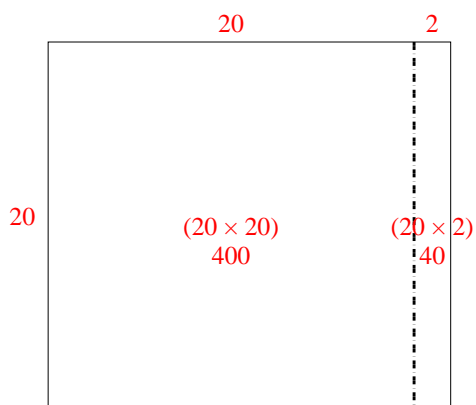
1) $32 \times 20 =$



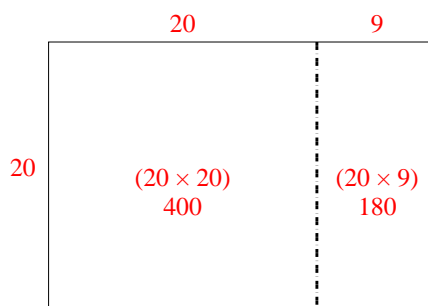
2) $30 \times 37 =$



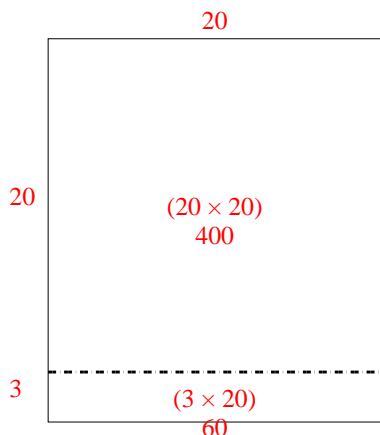
3) $20 \times 22 =$



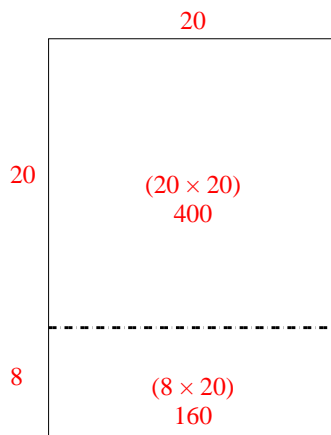
4) $20 \times 29 =$



5) $23 \times 20 =$



6) $28 \times 20 =$



Risposte

1. 640

2. 1.110

3. 440

4. 580

5. 460

6. 560