





Usa le griglie fornite per risolvere ogni operazione.

1) $20 \times 36 =$




2) $38 \times 30 =$




3) $39 \times 20 =$




4) $23 \times 20 =$



5) $20 \times 26 =$



6) $24 \times 20 =$



Risposte

1. _____

2. _____

3. _____

4. _____

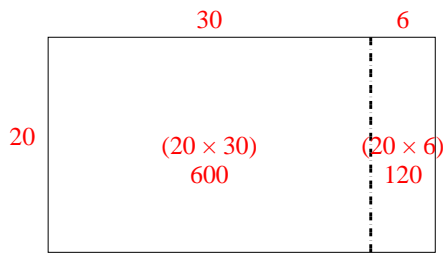
5. _____

6. _____

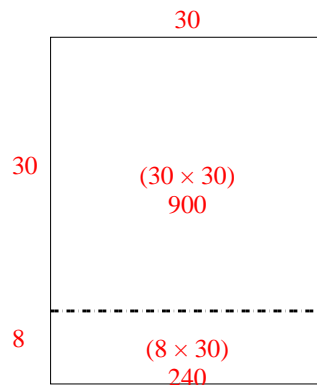


Usa le griglie fornite per risolvere ogni operazione.

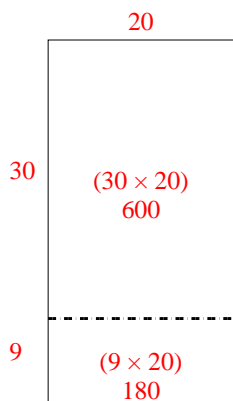
1) $20 \times 36 =$



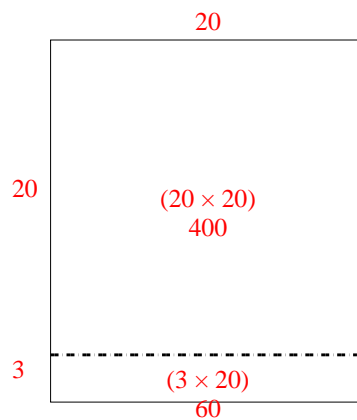
2) $38 \times 30 =$



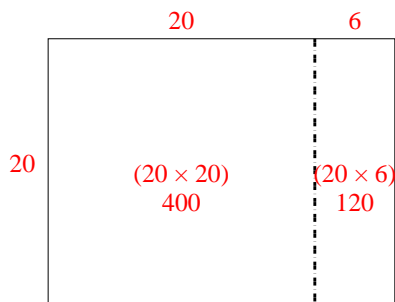
3) $39 \times 20 =$



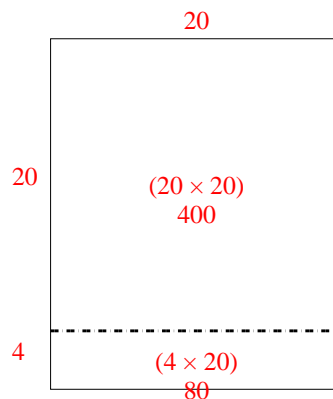
4) $23 \times 20 =$



5) $20 \times 26 =$



6) $24 \times 20 =$



Risposte

1. **720**

2. **1.140**

3. **780**

4. **460**

5. **520**

6. **480**