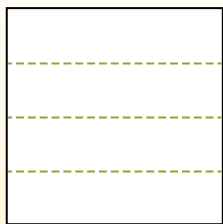


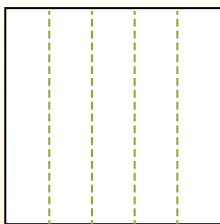


Dividi i rettangoli come descritto e poi conta per trovare il numero delle divisioni.

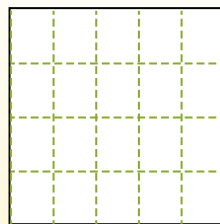
Las filas van de izquierda a derecha.




Las columnas van de arriba a abajo.




Aqui tem 4 linhas e 5 colunas .
Existem 20 caixas no total.




1) 2 righe
5 colonne




2) 3 righe
5 colonne




3) 5 righe
5 colonne




4) 4 righe
3 colonne




5) 5 righe
3 colonne




6) 2 righe
3 colonne




7) 5 righe
4 colonne



8) 2 righe
2 colonne



9) 4 righe
4 colonne



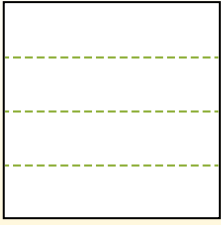
Risposte

- 1. _____
- 2. _____
- 3. _____
- 4. _____
- 5. _____
- 6. _____
- 7. _____
- 8. _____
- 9. _____

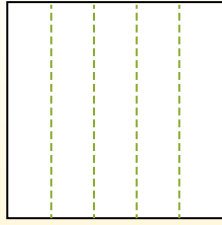


Dividi i rettangoli come descritto e poi conta per trovare il numero delle divisioni.

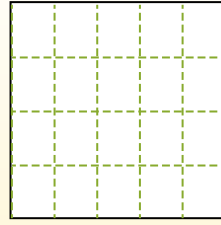
Las filas van de izquierda a derecha.



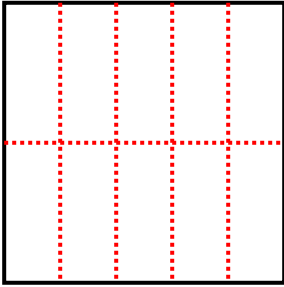
Las columnas van de arriba a abajo.



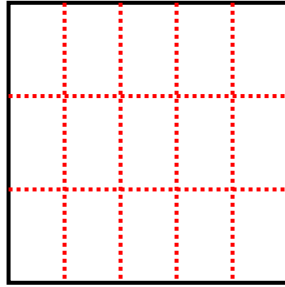
Aqui tem 4 linhas e 5 colunas. Existem 20 caixas no total.



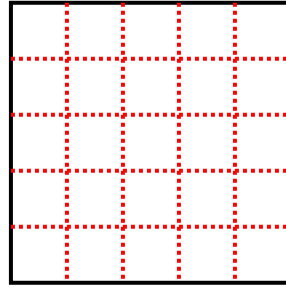
1) 2 righe
5 colonne



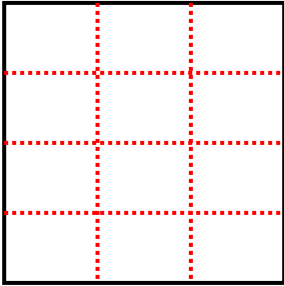
2) 3 righe
5 colonne



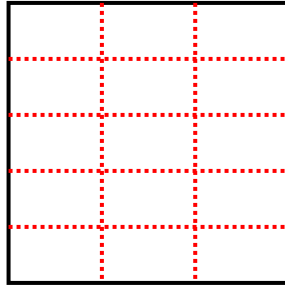
3) 5 righe
5 colonne



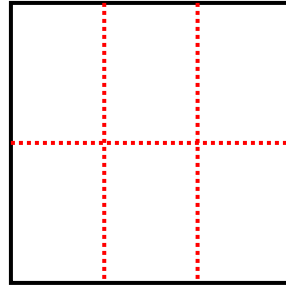
4) 4 righe
3 colonne



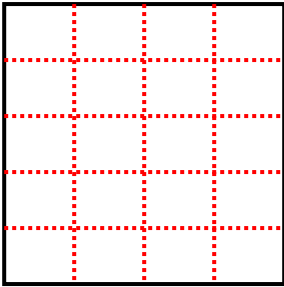
5) 5 righe
3 colonne



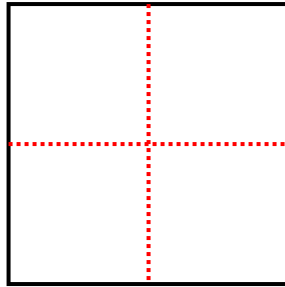
6) 2 righe
3 colonne



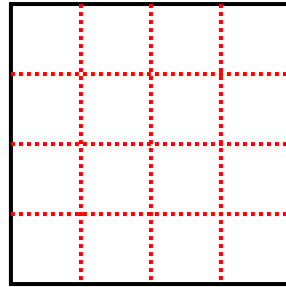
7) 5 righe
4 colonne



8) 2 righe
2 colonne



9) 4 righe
4 colonne



Risposte

1. **10**

2. **15**

3. **25**

4. **12**

5. **15**

6. **6**

7. **20**

8. **4**

9. **16**