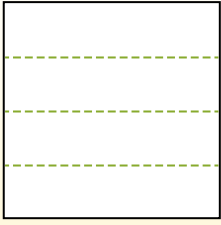


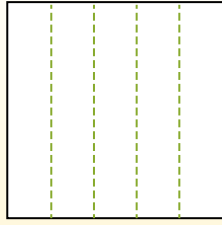


Dividi i rettangoli come descritto e poi conta per trovare il numero delle divisioni.

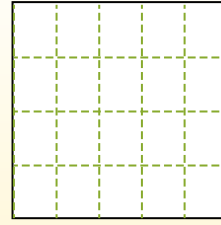
Las filas van de izquierda a derecha.




Las columnas van de arriba a abajo.




Aqui tem 4 linhas e 5 colunas .
Existem 20 caixas no total.




1) 5 righe
2 colonne




2) 3 righe
3 colonne




3) 2 righe
3 colonne




4) 3 righe
4 colonne




5) 2 righe
2 colonne




6) 5 righe
4 colonne




7) 3 righe
2 colonne



8) 5 righe
3 colonne



9) 2 righe
5 colonne



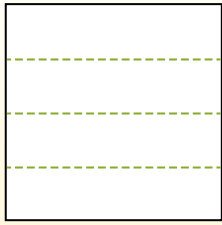
Risposte

- 1. _____
- 2. _____
- 3. _____
- 4. _____
- 5. _____
- 6. _____
- 7. _____
- 8. _____
- 9. _____

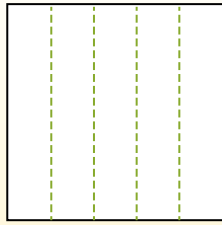


Dividi i rettangoli come descritto e poi conta per trovare il numero delle divisioni.

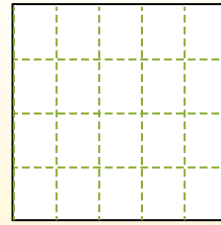
Las filas van de izquierda a derecha.



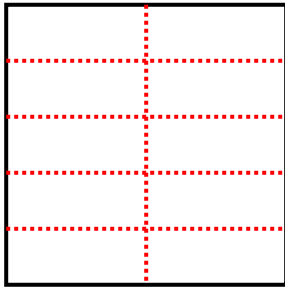
Las columnas van de arriba a abajo.



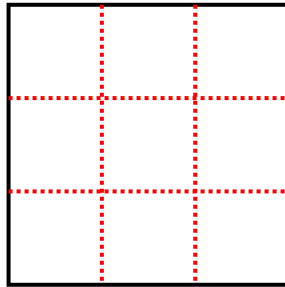
Aqui tem 4 linhas e 5 colunas .
Existem 20 caixas no total.



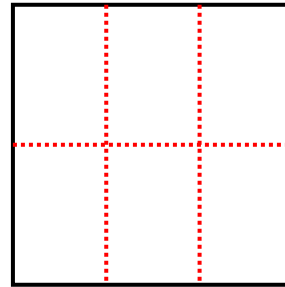
1) 5 righe
2 colonne



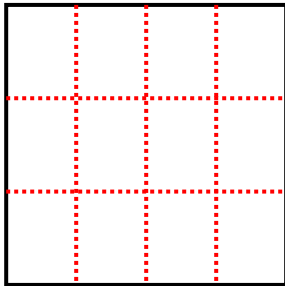
2) 3 righe
3 colonne



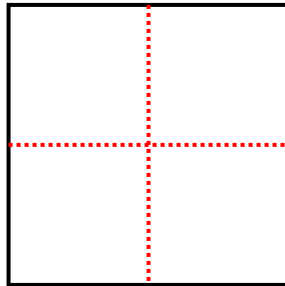
3) 2 righe
3 colonne



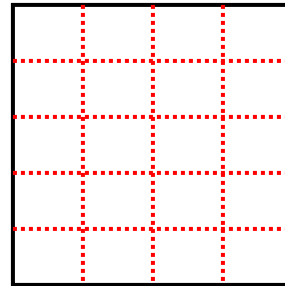
4) 3 righe
4 colonne



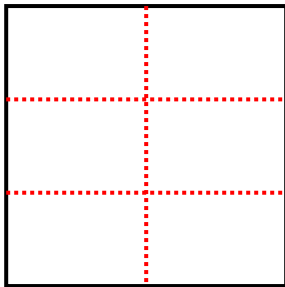
5) 2 righe
2 colonne



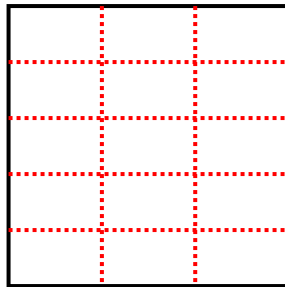
6) 5 righe
4 colonne



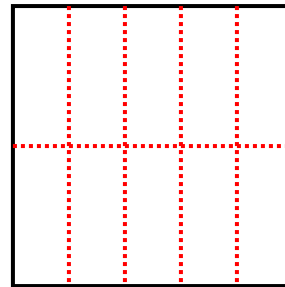
7) 3 righe
2 colonne



8) 5 righe
3 colonne



9) 2 righe
5 colonne



Risposte

1. 10

2. 9

3. 6

4. 12

5. 4

6. 20

7. 6

8. 15

9. 10