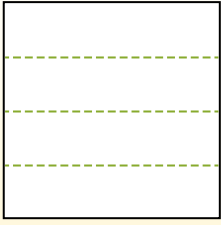


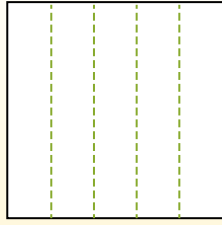


**Dividi i rettangoli come descritto e poi conta per trovare il numero delle divisioni.**

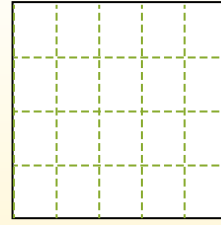
Las filas van de izquierda a derecha.




Las columnas van de arriba a abajo.




Aqui tem 4 linhas e 5 colunas .  
Existem 20 caixas no total.




1) 3 righe  
3 colonne




2) 2 righe  
3 colonne




3) 4 righe  
3 colonne




4) 5 righe  
4 colonne




5) 2 righe  
5 colonne




6) 3 righe  
2 colonne




7) 2 righe  
4 colonne



8) 4 righe  
4 colonne



9) 5 righe  
3 colonne



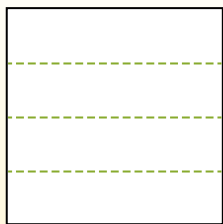
**Risposte**

- 1. \_\_\_\_\_
- 2. \_\_\_\_\_
- 3. \_\_\_\_\_
- 4. \_\_\_\_\_
- 5. \_\_\_\_\_
- 6. \_\_\_\_\_
- 7. \_\_\_\_\_
- 8. \_\_\_\_\_
- 9. \_\_\_\_\_

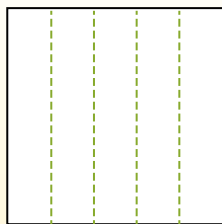


Dividi i rettangoli come descritto e poi conta per trovare il numero delle divisioni.

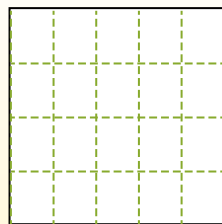
Las filas van de izquierda a derecha.



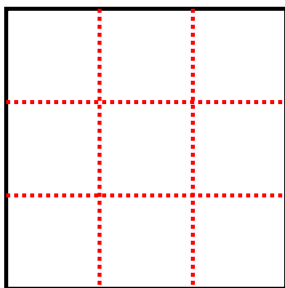
Las columnas van de arriba a abajo.



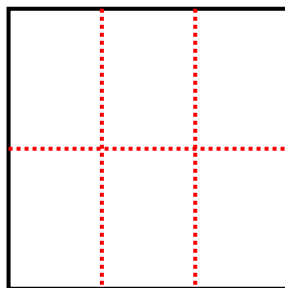
Aqui tem 4 linhas e 5 colunas .  
Existem 20 caixas no total.



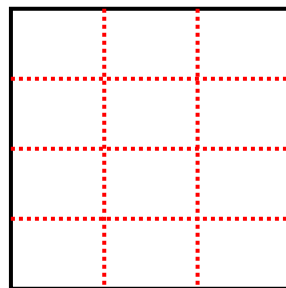
1) 3 righe  
3 colonne



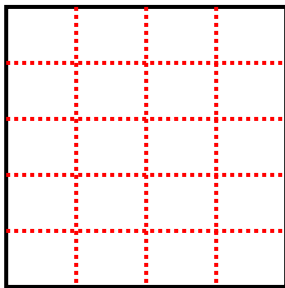
2) 2 righe  
3 colonne



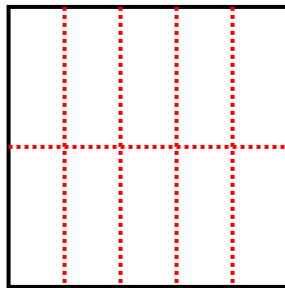
3) 4 righe  
3 colonne



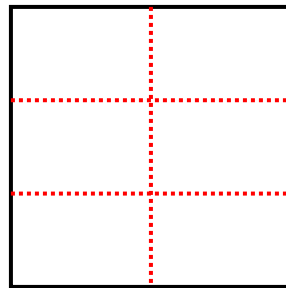
4) 5 righe  
4 colonne



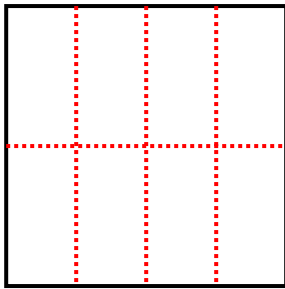
5) 2 righe  
5 colonne



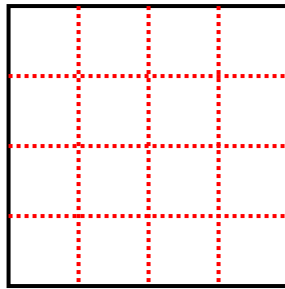
6) 3 righe  
2 colonne



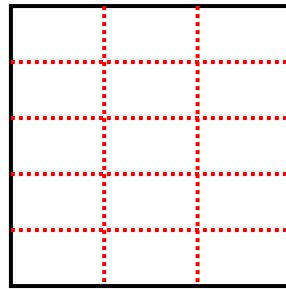
7) 2 righe  
4 colonne



8) 4 righe  
4 colonne



9) 5 righe  
3 colonne



**Risposte**

1. 9

2. 6

3. 12

4. 20

5. 10

6. 6

7. 8

8. 16

9. 15