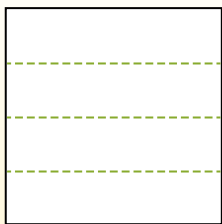


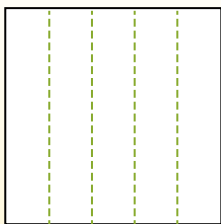


**Dividi i rettangoli come descritto e poi conta per trovare il numero delle divisioni.**

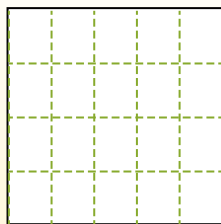
Las filas van de izquierda a derecha.




Las columnas van de arriba a abajo.




Aqui tem 4 linhas e 5 colunas .  
Existem 20 caixas no total.




1) 3 righe  
5 colonne




2) 3 righe  
3 colonne




3) 2 righe  
5 colonne




4) 3 righe  
2 colonne




5) 4 righe  
3 colonne




6) 4 righe  
4 colonne




7) 4 righe  
2 colonne



8) 3 righe  
4 colonne



9) 5 righe  
5 colonne



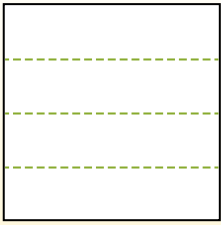
**Risposte**

- 1. \_\_\_\_\_
- 2. \_\_\_\_\_
- 3. \_\_\_\_\_
- 4. \_\_\_\_\_
- 5. \_\_\_\_\_
- 6. \_\_\_\_\_
- 7. \_\_\_\_\_
- 8. \_\_\_\_\_
- 9. \_\_\_\_\_

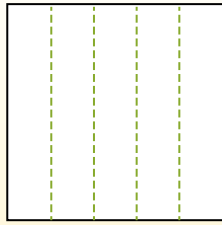


Dividi i rettangoli come descritto e poi conta per trovare il numero delle divisioni.

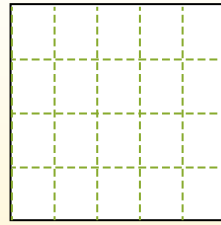
Las filas van de izquierda a derecha.



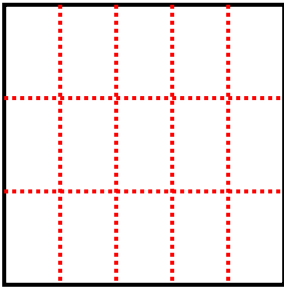
Las columnas van de arriba a abajo.



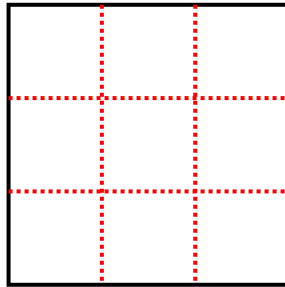
Aqui tem 4 linhas e 5 colunas. Existem 20 caixas no total.



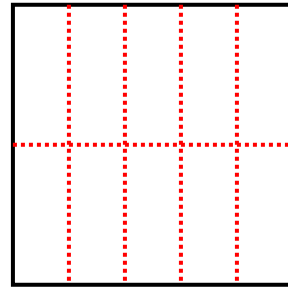
1) 3 righe  
5 colonne



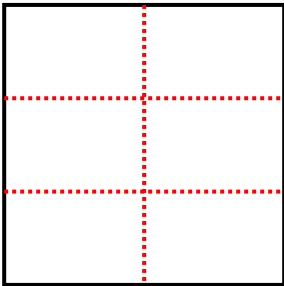
2) 3 righe  
3 colonne



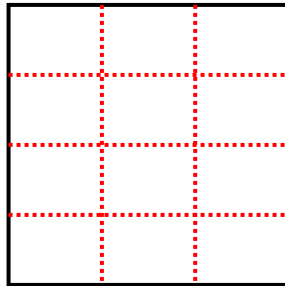
3) 2 righe  
5 colonne



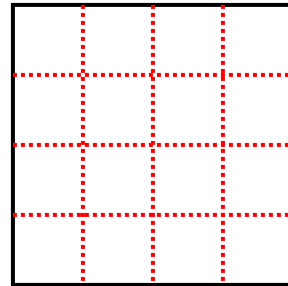
4) 3 righe  
2 colonne



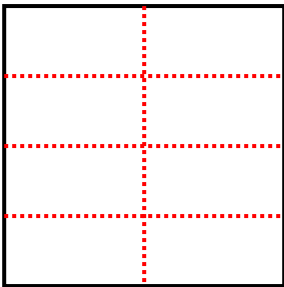
5) 4 righe  
3 colonne



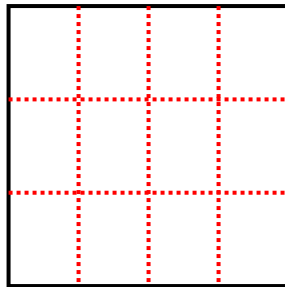
6) 4 righe  
4 colonne



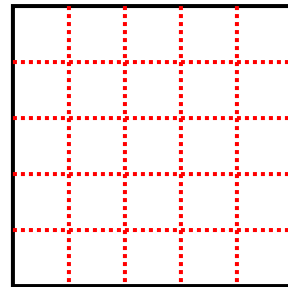
7) 4 righe  
2 colonne



8) 3 righe  
4 colonne



9) 5 righe  
5 colonne



**Risposte**

1. **15**

2. **9**

3. **10**

4. **6**

5. **12**

6. **16**

7. **8**

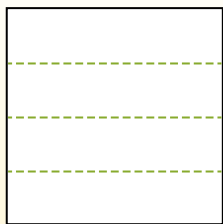
8. **12**

9. **25**

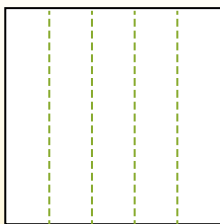


**Dividi i rettangoli come descritto e poi conta per trovare il numero delle divisioni.**

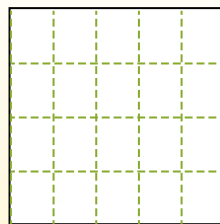
Las filas van de izquierda a derecha.




Las columnas van de arriba a abajo.




Aqui tem 4 linhas e 5 colunas .  
Existem 20 caixas no total.




1) 3 righe  
3 colonne




2) 3 righe  
2 colonne




3) 2 righe  
2 colonne




4) 4 righe  
3 colonne




5) 4 righe  
2 colonne




6) 4 righe  
4 colonne




7) 3 righe  
5 colonne



8) 2 righe  
5 colonne



9) 2 righe  
4 colonne



**Risposte**

- 1. \_\_\_\_\_
- 2. \_\_\_\_\_
- 3. \_\_\_\_\_
- 4. \_\_\_\_\_
- 5. \_\_\_\_\_
- 6. \_\_\_\_\_
- 7. \_\_\_\_\_
- 8. \_\_\_\_\_
- 9. \_\_\_\_\_

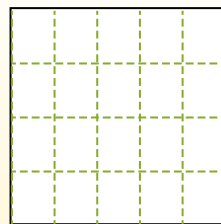
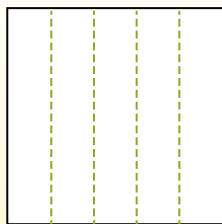
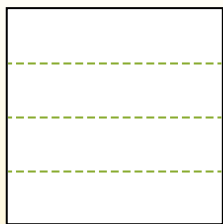


Dividi i rettangoli come descritto e poi conta per trovare il numero delle divisioni.

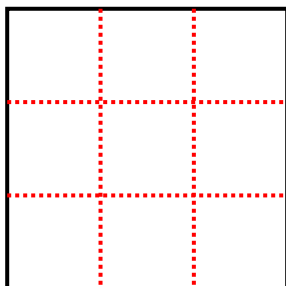
Las filas van de izquierda a derecha.

Las columnas van de arriba a abajo.

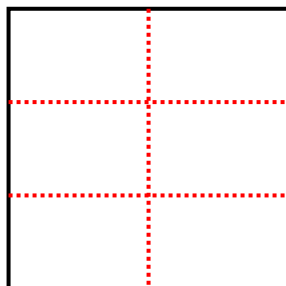
Aqui tem 4 linhas e 5 colunas. Existem 20 caixas no total.



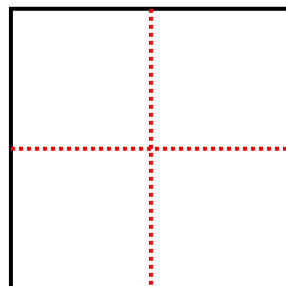
1) 3 righe  
3 colonne



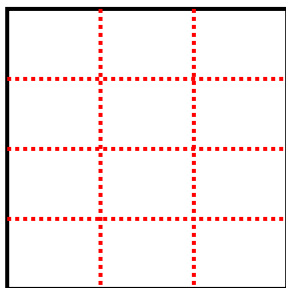
2) 3 righe  
2 colonne



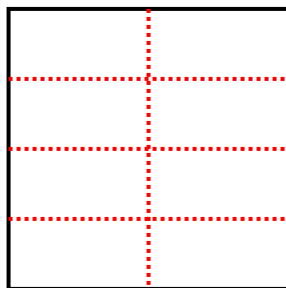
3) 2 righe  
2 colonne



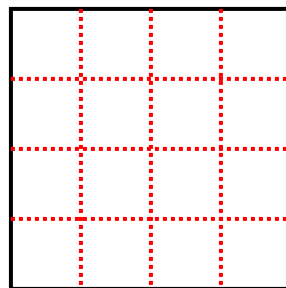
4) 4 righe  
3 colonne



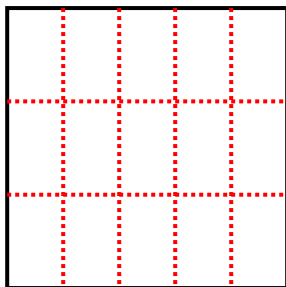
5) 4 righe  
2 colonne



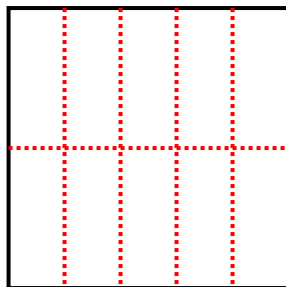
6) 4 righe  
4 colonne



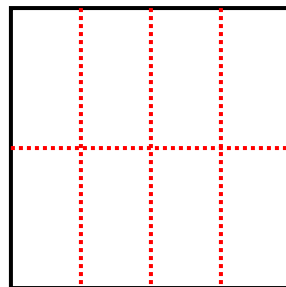
7) 3 righe  
5 colonne



8) 2 righe  
5 colonne



9) 2 righe  
4 colonne



**Risposte**

1. 9

2. 6

3. 4

4. 12

5. 8

6. 16

7. 15

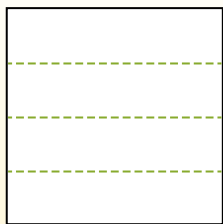
8. 10

9. 8

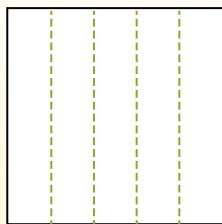


**Dividi i rettangoli come descritto e poi conta per trovare il numero delle divisioni.**

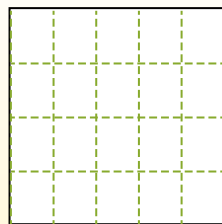
Las filas van de izquierda a derecha.




Las columnas van de arriba a abajo.



Aqui tem 4 linhas e 5 colunas .  
Existem 20 caixas no total.




1) 3 righe  
2 colonne




2) 4 righe  
2 colonne




3) 2 righe  
3 colonne




4) 5 righe  
4 colonne




5) 5 righe  
2 colonne




6) 2 righe  
2 colonne




7) 3 righe  
4 colonne



8) 5 righe  
5 colonne



9) 4 righe  
3 colonne



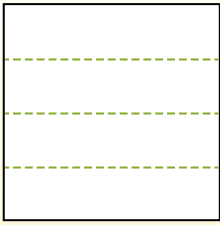
**Risposte**

- 1. \_\_\_\_\_
- 2. \_\_\_\_\_
- 3. \_\_\_\_\_
- 4. \_\_\_\_\_
- 5. \_\_\_\_\_
- 6. \_\_\_\_\_
- 7. \_\_\_\_\_
- 8. \_\_\_\_\_
- 9. \_\_\_\_\_

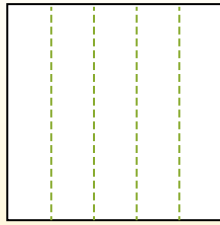


Dividi i rettangoli come descritto e poi conta per trovare il numero delle divisioni.

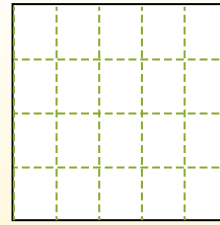
Las filas van de izquierda a derecha.



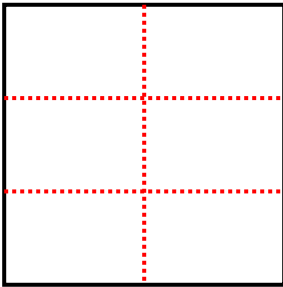
Las columnas van de arriba a abajo.



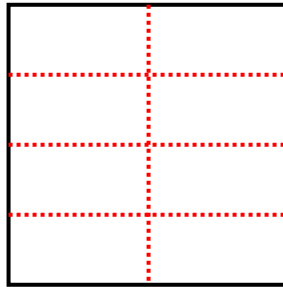
Aqui tem 4 linhas e 5 colunas. Existem 20 caixas no total.



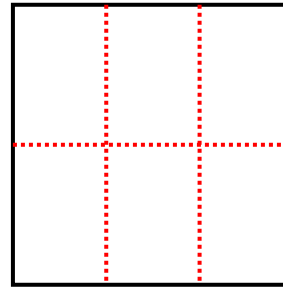
1) 3 righe  
2 colonne



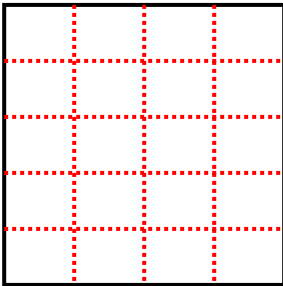
2) 4 righe  
2 colonne



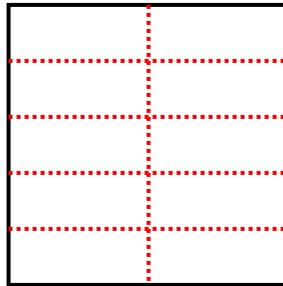
3) 2 righe  
3 colonne



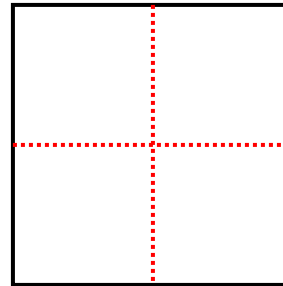
4) 5 righe  
4 colonne



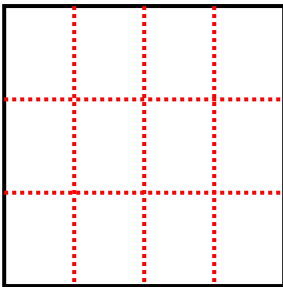
5) 5 righe  
2 colonne



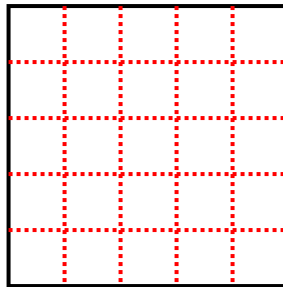
6) 2 righe  
2 colonne



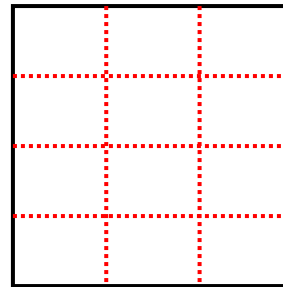
7) 3 righe  
4 colonne



8) 5 righe  
5 colonne



9) 4 righe  
3 colonne



**Risposte**

1. 6

2. 8

3. 6

4. 20

5. 10

6. 4

7. 12

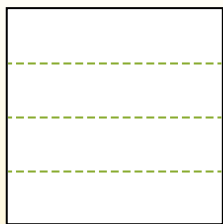
8. 25

9. 12

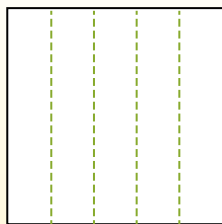


Dividi i rettangoli come descritto e poi conta per trovare il numero delle divisioni.

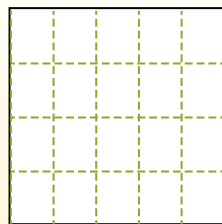
Las filas van de izquierda a derecha.




Las columnas van de arriba a abajo.




Aqui tem 4 linhas e 5 colunas .  
Existem 20 caixas no total.




1) 3 righe  
3 colonne




2) 2 righe  
3 colonne




3) 4 righe  
2 colonne




4) 4 righe  
4 colonne




5) 2 righe  
5 colonne




6) 2 righe  
4 colonne




7) 4 righe  
3 colonne



8) 5 righe  
4 colonne



9) 5 righe  
3 colonne



**Risposte**

- 1. \_\_\_\_\_
- 2. \_\_\_\_\_
- 3. \_\_\_\_\_
- 4. \_\_\_\_\_
- 5. \_\_\_\_\_
- 6. \_\_\_\_\_
- 7. \_\_\_\_\_
- 8. \_\_\_\_\_
- 9. \_\_\_\_\_

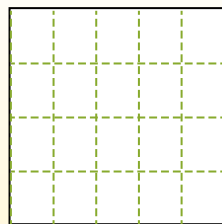
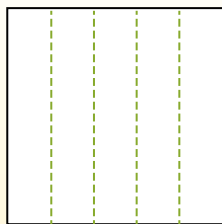
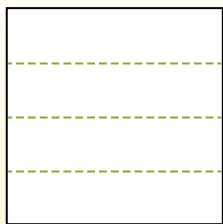


Dividi i rettangoli come descritto e poi conta per trovare il numero delle divisioni.

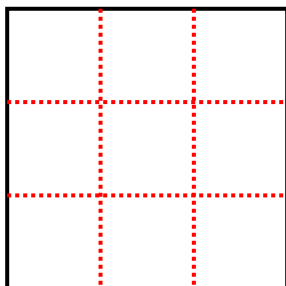
Las filas van de izquierda a derecha.

Las columnas van de arriba a abajo.

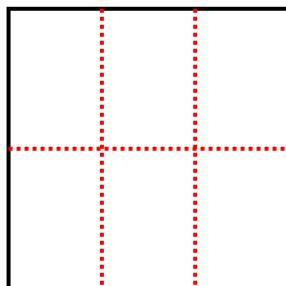
Aqui tem 4 linhas e 5 colunas .  
Existem 20 caixas no total.



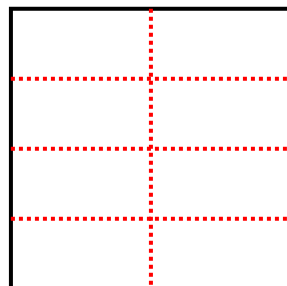
1) 3 righe  
3 colonne



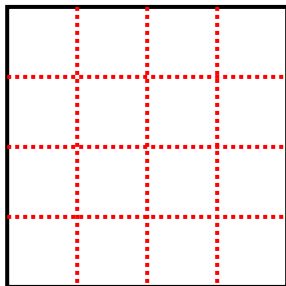
2) 2 righe  
3 colonne



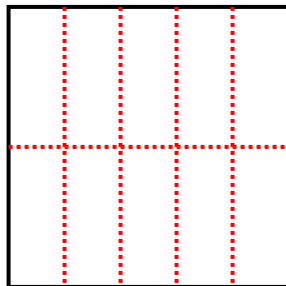
3) 4 righe  
2 colonne



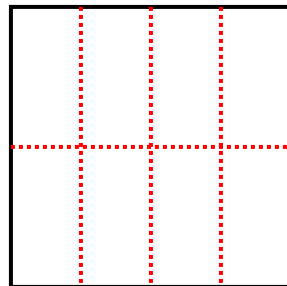
4) 4 righe  
4 colonne



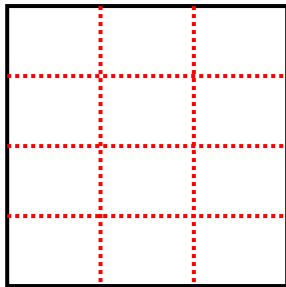
5) 2 righe  
5 colonne



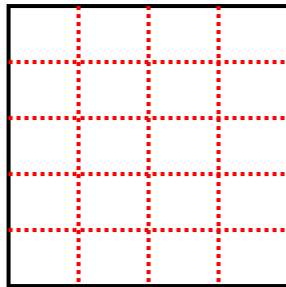
6) 2 righe  
4 colonne



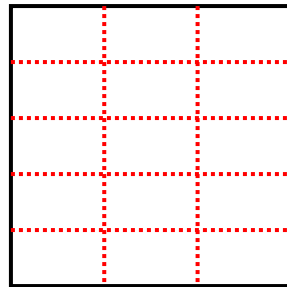
7) 4 righe  
3 colonne



8) 5 righe  
4 colonne



9) 5 righe  
3 colonne



**Risposte**

1. 9

2. 6

3. 8

4. 16

5. 10

6. 8

7. 12

8. 20

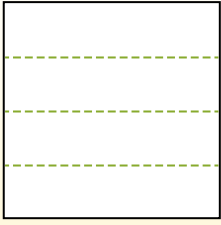
9. 15



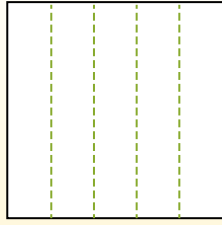


**Dividi i rettangoli come descritto e poi conta per trovare il numero delle divisioni.**

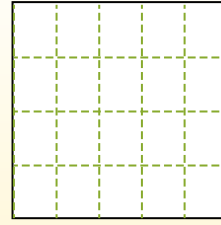
Las filas van de izquierda a derecha.




Las columnas van de arriba a abajo.




Aqui tem 4 linhas e 5 colunas .  
Existem 20 caixas no total.




1) 5 righe  
2 colonne




2) 3 righe  
3 colonne




3) 2 righe  
3 colonne




4) 3 righe  
4 colonne




5) 2 righe  
2 colonne




6) 5 righe  
4 colonne




7) 3 righe  
2 colonne



8) 5 righe  
3 colonne



9) 2 righe  
5 colonne



**Risposte**

- 1. \_\_\_\_\_
- 2. \_\_\_\_\_
- 3. \_\_\_\_\_
- 4. \_\_\_\_\_
- 5. \_\_\_\_\_
- 6. \_\_\_\_\_
- 7. \_\_\_\_\_
- 8. \_\_\_\_\_
- 9. \_\_\_\_\_

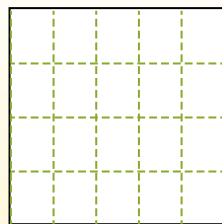
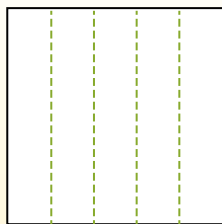
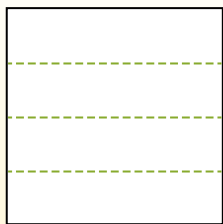


Dividi i rettangoli come descritto e poi conta per trovare il numero delle divisioni.

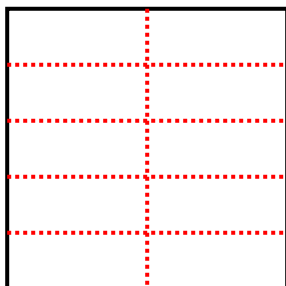
Las filas van de izquierda a derecha.

Las columnas van de arriba a abajo.

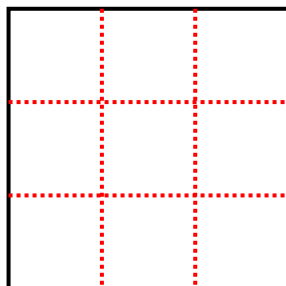
Aqui tem 4 linhas e 5 colunas .  
Existem 20 caixas no total.



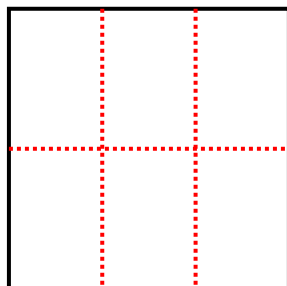
1) 5 righe  
2 colonne



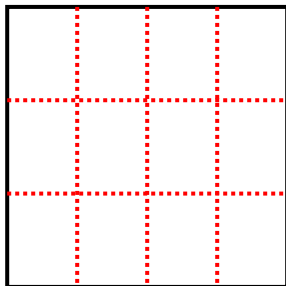
2) 3 righe  
3 colonne



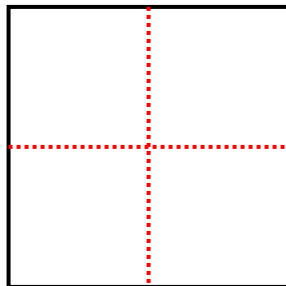
3) 2 righe  
3 colonne



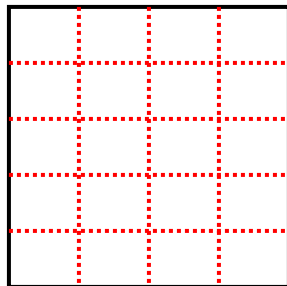
4) 3 righe  
4 colonne



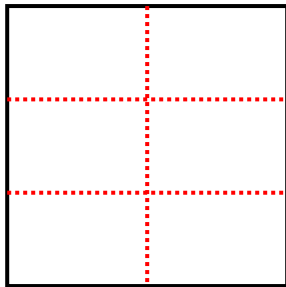
5) 2 righe  
2 colonne



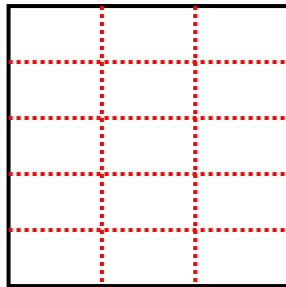
6) 5 righe  
4 colonne



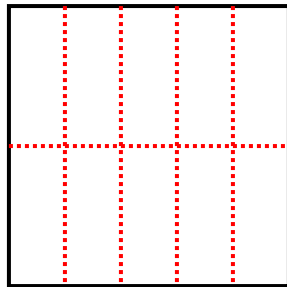
7) 3 righe  
2 colonne



8) 5 righe  
3 colonne



9) 2 righe  
5 colonne



**Risposte**

1. 10

2. 9

3. 6

4. 12

5. 4

6. 20

7. 6

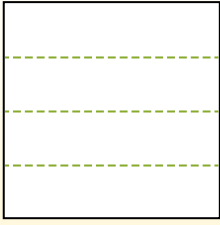
8. 15

9. 10

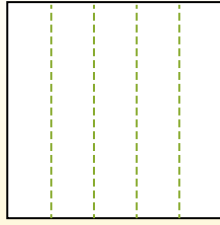


**Dividi i rettangoli come descritto e poi conta per trovare il numero delle divisioni.**

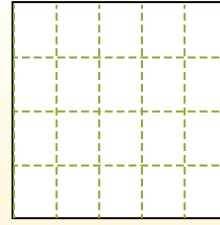
Las filas van de izquierda a derecha.




Las columnas van de arriba a abajo.




Aqui tem 4 linhas e 5 colunas .  
Existem 20 caixas no total.




1) 2 righe  
4 colonne




2) 5 righe  
2 colonne




3) 3 righe  
4 colonne




4) 3 righe  
5 colonne




5) 2 righe  
3 colonne




6) 4 righe  
3 colonne




7) 5 righe  
3 colonne



8) 3 righe  
2 colonne



9) 3 righe  
3 colonne



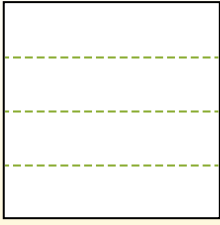
**Risposte**

- 1. \_\_\_\_\_
- 2. \_\_\_\_\_
- 3. \_\_\_\_\_
- 4. \_\_\_\_\_
- 5. \_\_\_\_\_
- 6. \_\_\_\_\_
- 7. \_\_\_\_\_
- 8. \_\_\_\_\_
- 9. \_\_\_\_\_

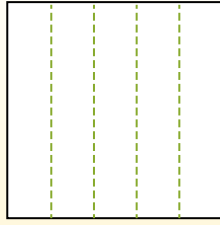


Dividi i rettangoli come descritto e poi conta per trovare il numero delle divisioni.

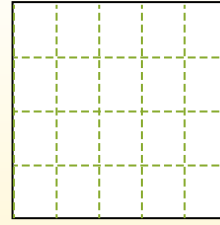
Las filas van de izquierda a derecha.



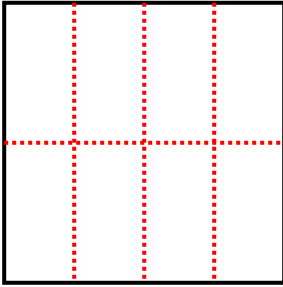
Las columnas van de arriba a abajo.



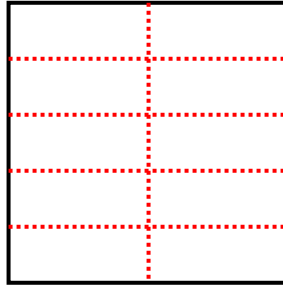
Aqui tem 4 linhas e 5 colunas .  
Existem 20 caixas no total.



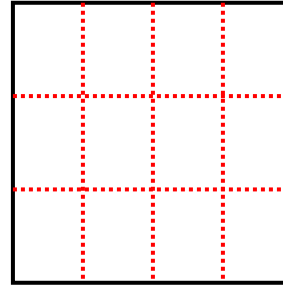
1) 2 righe  
4 colonne



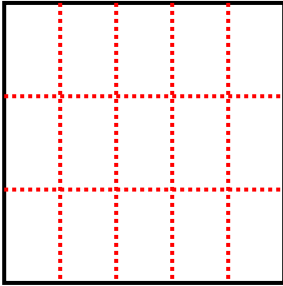
2) 5 righe  
2 colonne



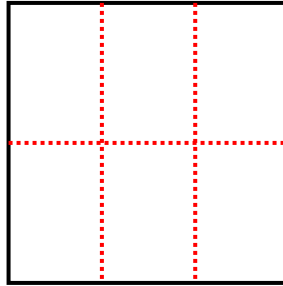
3) 3 righe  
4 colonne



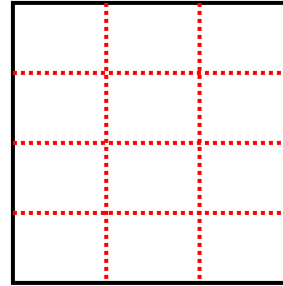
4) 3 righe  
5 colonne



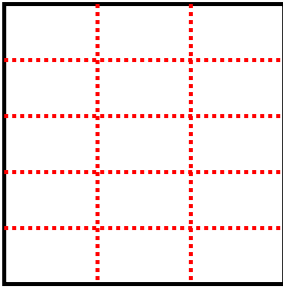
5) 2 righe  
3 colonne



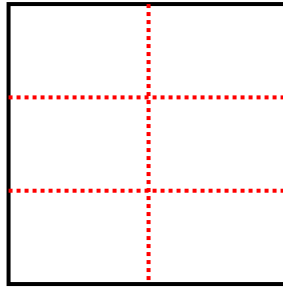
6) 4 righe  
3 colonne



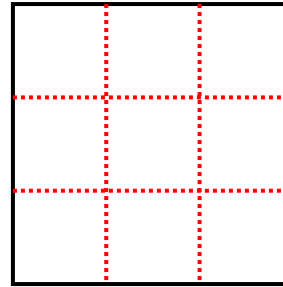
7) 5 righe  
3 colonne



8) 3 righe  
2 colonne



9) 3 righe  
3 colonne



**Risposte**

1. 8

2. 10

3. 12

4. 15

5. 6

6. 12

7. 15

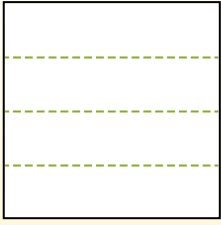
8. 6

9. 9

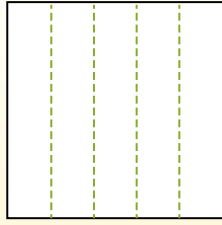


**Dividi i rettangoli come descritto e poi conta per trovare il numero delle divisioni.**

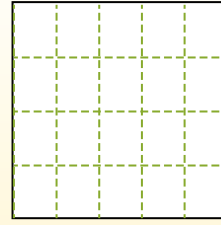
Las filas van de izquierda a derecha.




Las columnas van de arriba a abajo.




Aqui tem 4 linhas e 5 colunas .  
Existem 20 caixas no total.




1) 4 righe  
2 colonne




2) 2 righe  
2 colonne




3) 5 righe  
3 colonne




4) 5 righe  
4 colonne




5) 3 righe  
2 colonne




6) 4 righe  
3 colonne




7) 5 righe  
2 colonne



8) 4 righe  
4 colonne



9) 3 righe  
3 colonne



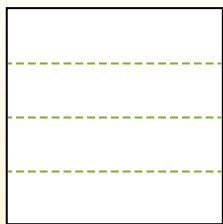
**Risposte**

- 1. \_\_\_\_\_
- 2. \_\_\_\_\_
- 3. \_\_\_\_\_
- 4. \_\_\_\_\_
- 5. \_\_\_\_\_
- 6. \_\_\_\_\_
- 7. \_\_\_\_\_
- 8. \_\_\_\_\_
- 9. \_\_\_\_\_

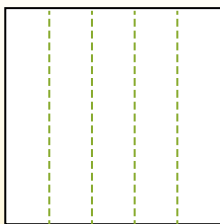


Dividi i rettangoli come descritto e poi conta per trovare il numero delle divisioni.

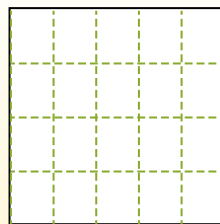
Las filas van de izquierda a derecha.



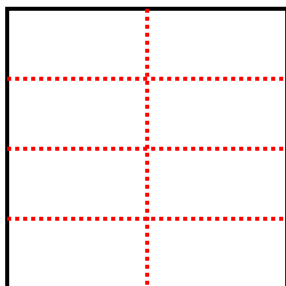
Las columnas van de arriba a abajo.



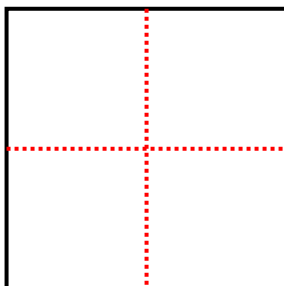
Aqui tem 4 linhas e 5 colunas .  
Existem 20 caixas no total.



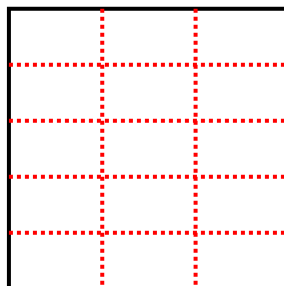
1) 4 righe  
2 colonne



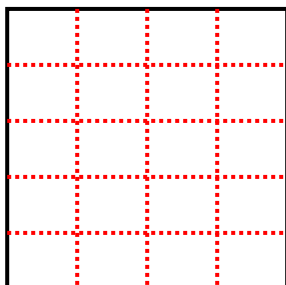
2) 2 righe  
2 colonne



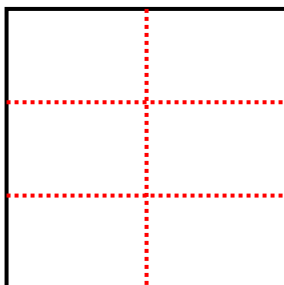
3) 5 righe  
3 colonne



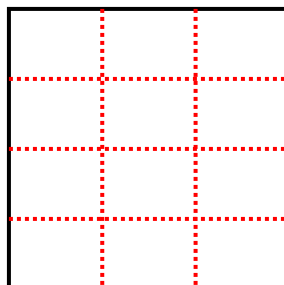
4) 5 righe  
4 colonne



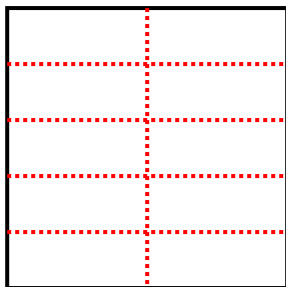
5) 3 righe  
2 colonne



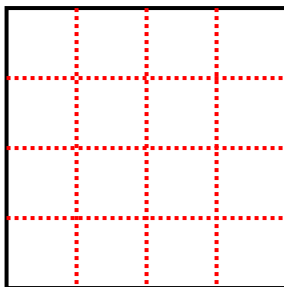
6) 4 righe  
3 colonne



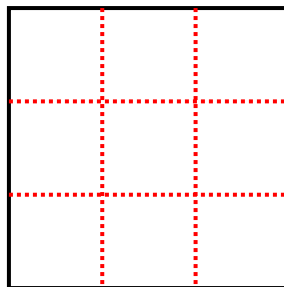
7) 5 righe  
2 colonne



8) 4 righe  
4 colonne



9) 3 righe  
3 colonne



**Risposte**

1. 8

2. 4

3. 15

4. 20

5. 6

6. 12

7. 10

8. 16

9. 9

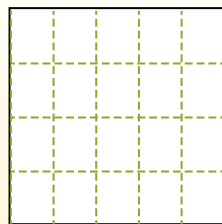
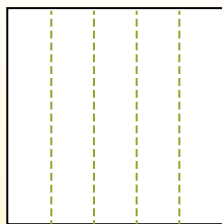
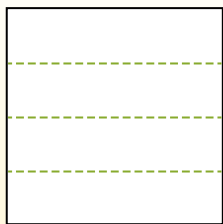


**Dividi i rettangoli come descritto e poi conta per trovare il numero delle divisioni.**


Las filas van de izquierda a derecha.

Las columnas van de arriba a abajo.


Aqui tem 4 linhas e 5 colunas .  
Existem 20 caixas no total.




1) 5 righe  
4 colonne




2) 4 righe  
4 colonne




3) 2 righe  
3 colonne




4) 4 righe  
3 colonne




5) 5 righe  
5 colonne




6) 3 righe  
5 colonne




7) 5 righe  
2 colonne



8) 2 righe  
5 colonne



9) 3 righe  
3 colonne



**Risposte**

- 1. \_\_\_\_\_
- 2. \_\_\_\_\_
- 3. \_\_\_\_\_
- 4. \_\_\_\_\_
- 5. \_\_\_\_\_
- 6. \_\_\_\_\_
- 7. \_\_\_\_\_
- 8. \_\_\_\_\_
- 9. \_\_\_\_\_

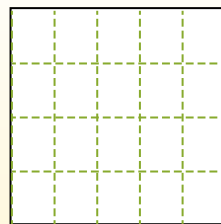
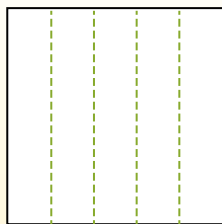
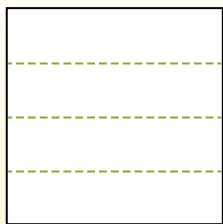


Dividi i rettangoli come descritto e poi conta per trovare il numero delle divisioni.

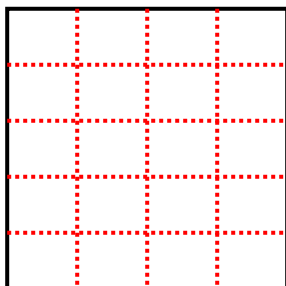
Las filas van de izquierda a derecha.

Las columnas van de arriba a abajo.


Aqui tem 4 linhas e 5 colunas .  
Existem 20 caixas no total.



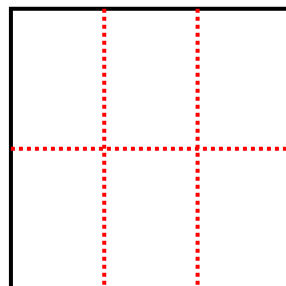
1) 5 righe  
4 colonne



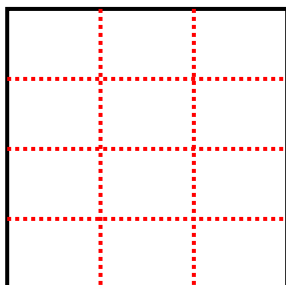
2) 4 righe  
4 colonne



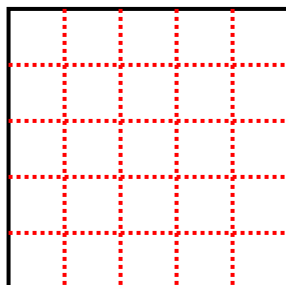
3) 2 righe  
3 colonne



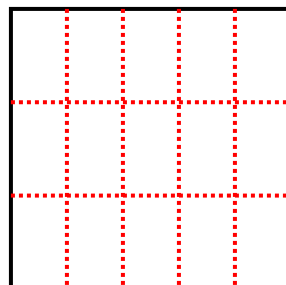
4) 4 righe  
3 colonne



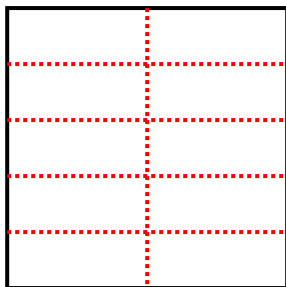
5) 5 righe  
5 colonne



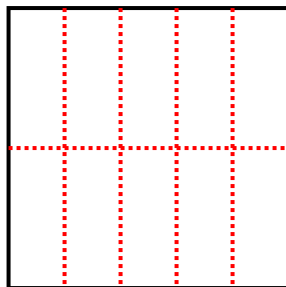
6) 3 righe  
5 colonne



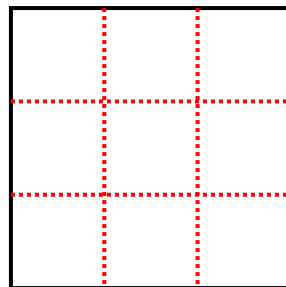
7) 5 righe  
2 colonne



8) 2 righe  
5 colonne



9) 3 righe  
3 colonne



**Risposte**

1. 20

2. 16

3. 6

4. 12

5. 25

6. 15

7. 10

8. 10

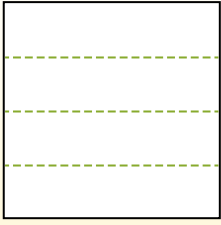
9. 9



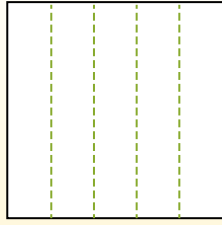


**Dividi i rettangoli come descritto e poi conta per trovare il numero delle divisioni.**

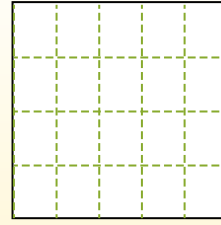
Las filas van de izquierda a derecha.




Las columnas van de arriba a abajo.




Aqui tem 4 linhas e 5 colunas .  
Existem 20 caixas no total.




1) 3 righe  
3 colonne




2) 2 righe  
3 colonne




3) 4 righe  
3 colonne




4) 5 righe  
4 colonne




5) 2 righe  
5 colonne




6) 3 righe  
2 colonne




7) 2 righe  
4 colonne



8) 4 righe  
4 colonne



9) 5 righe  
3 colonne



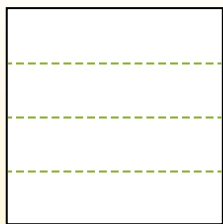
**Risposte**

- 1. \_\_\_\_\_
- 2. \_\_\_\_\_
- 3. \_\_\_\_\_
- 4. \_\_\_\_\_
- 5. \_\_\_\_\_
- 6. \_\_\_\_\_
- 7. \_\_\_\_\_
- 8. \_\_\_\_\_
- 9. \_\_\_\_\_

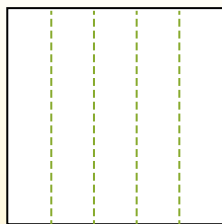


Dividi i rettangoli come descritto e poi conta per trovare il numero delle divisioni.

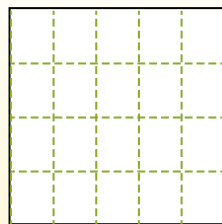
Las filas van de izquierda a derecha.



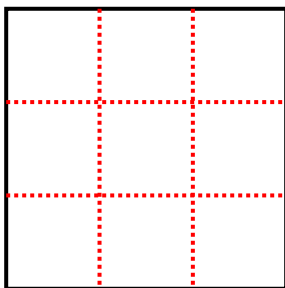
Las columnas van de arriba a abajo.



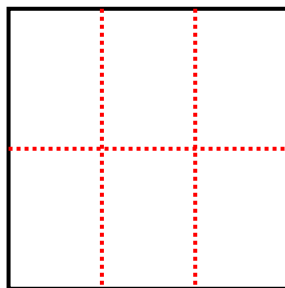
Aqui tem 4 linhas e 5 colunas .  
Existem 20 caixas no total.



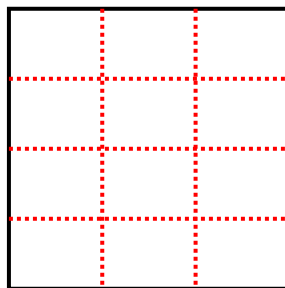
1) 3 righe  
3 colonne



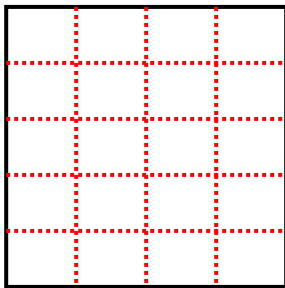
2) 2 righe  
3 colonne



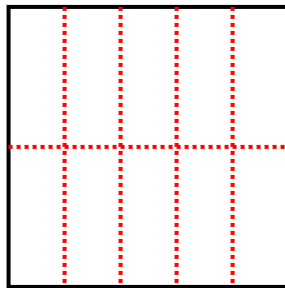
3) 4 righe  
3 colonne



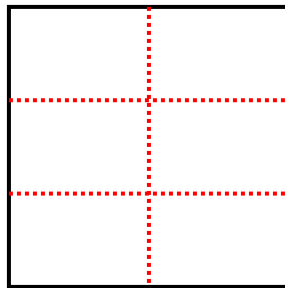
4) 5 righe  
4 colonne



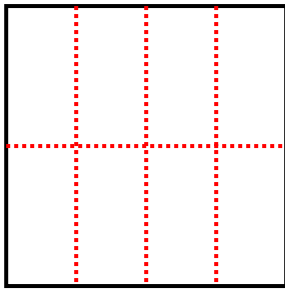
5) 2 righe  
5 colonne



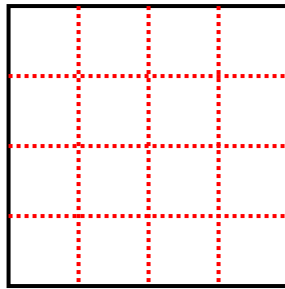
6) 3 righe  
2 colonne



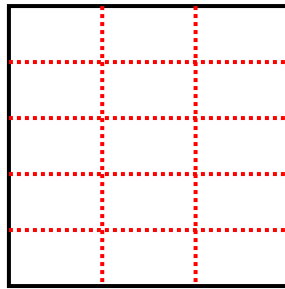
7) 2 righe  
4 colonne



8) 4 righe  
4 colonne



9) 5 righe  
3 colonne



**Risposte**

1. 9

2. 6

3. 12

4. 20

5. 10

6. 6

7. 8

8. 16

9. 15

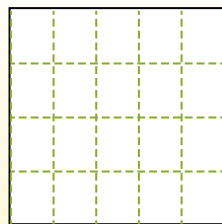
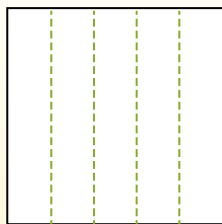
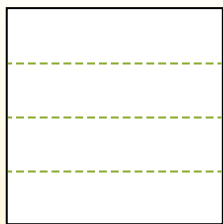


**Dividi i rettangoli come descritto e poi conta per trovare il numero delle divisioni.**


Las filas van de izquierda a derecha.

Las columnas van de arriba a abajo.


Aqui tem 4 linhas e 5 colunas .  
Existem 20 caixas no total.




1) 2 righe  
5 colonne




2) 3 righe  
5 colonne




3) 5 righe  
5 colonne




4) 4 righe  
3 colonne




5) 5 righe  
3 colonne




6) 2 righe  
3 colonne




7) 5 righe  
4 colonne



8) 2 righe  
2 colonne



9) 4 righe  
4 colonne



**Risposte**

- 1. \_\_\_\_\_
- 2. \_\_\_\_\_
- 3. \_\_\_\_\_
- 4. \_\_\_\_\_
- 5. \_\_\_\_\_
- 6. \_\_\_\_\_
- 7. \_\_\_\_\_
- 8. \_\_\_\_\_
- 9. \_\_\_\_\_

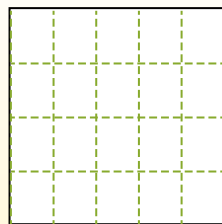
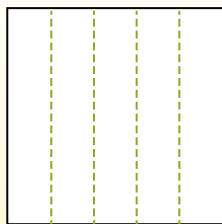
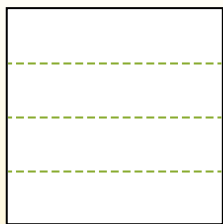


Dividi i rettangoli come descritto e poi conta per trovare il numero delle divisioni.

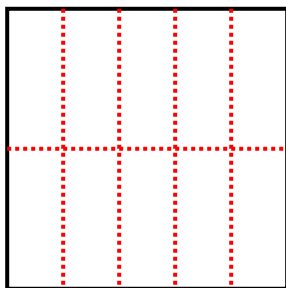
Las filas van de izquierda a derecha.

Las columnas van de arriba a abajo.

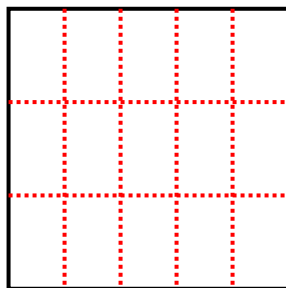
Aqui tem 4 linhas e 5 colunas .  
Existem 20 caixas no total.



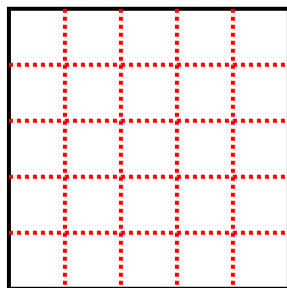
1) 2 righe  
5 colonne



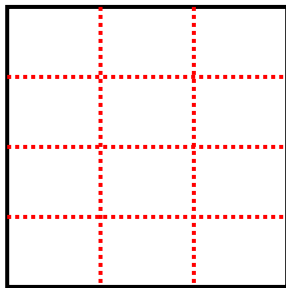
2) 3 righe  
5 colonne



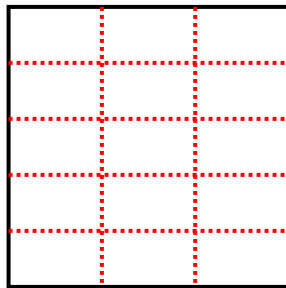
3) 5 righe  
5 colonne



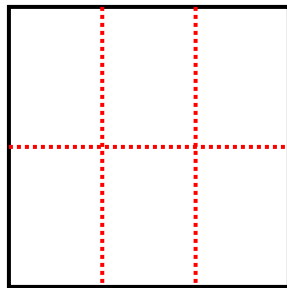
4) 4 righe  
3 colonne



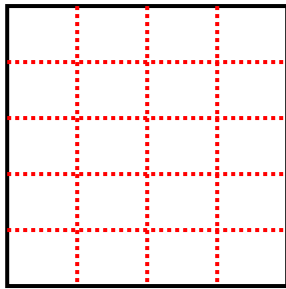
5) 5 righe  
3 colonne



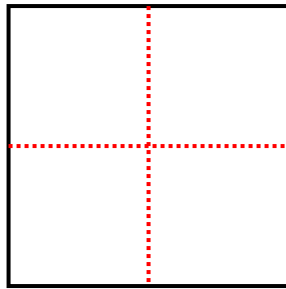
6) 2 righe  
3 colonne



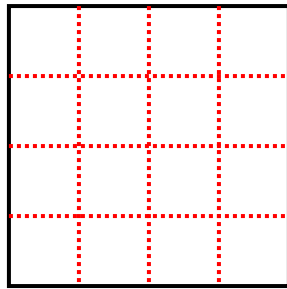
7) 5 righe  
4 colonne



8) 2 righe  
2 colonne



9) 4 righe  
4 colonne



**Risposte**

1. **10**

2. **15**

3. **25**

4. **12**

5. **15**

6. **6**

7. **20**

8. **4**

9. **16**