



Determina come scriveresti ogni gruppo sotto forma di moltiplicazione.

Risposte

Es)

Es. $7 \times 7 = 49$

1)

1. _____

2)

2. _____

3)

3. _____

4)

4. _____

5)

5. _____

6)

6. _____

7)

7. _____


8)

8. _____

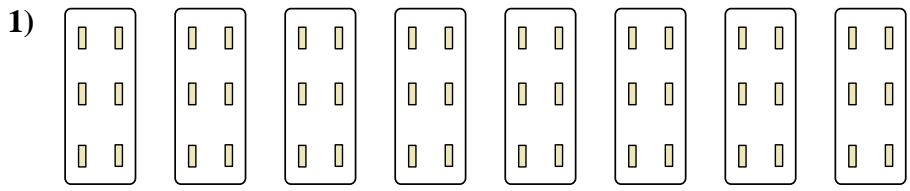


Determina come scriveresti ogni gruppo sotto forma di moltiplicazione.

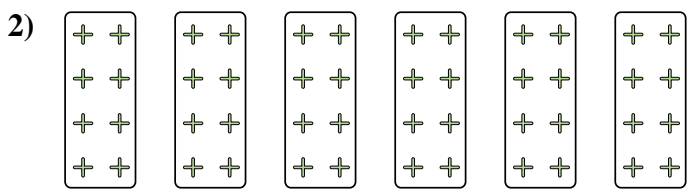
Risposte



Es. $7 \times 7 = 49$




1. $8 \times 6 = 48$



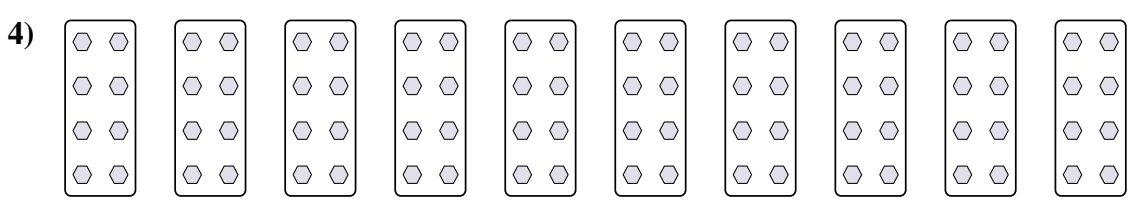
2. $6 \times 8 = 48$

3. $5 \times 2 = 10$



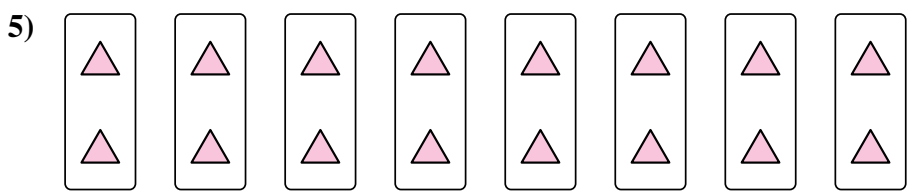
4. $10 \times 8 = 80$

5. $8 \times 2 = 16$



6. $9 \times 10 = 90$

7. $3 \times 8 = 24$



8. $8 \times 9 = 72$

