




Determina come scriveresti ogni gruppo sotto forma di moltiplicazione.

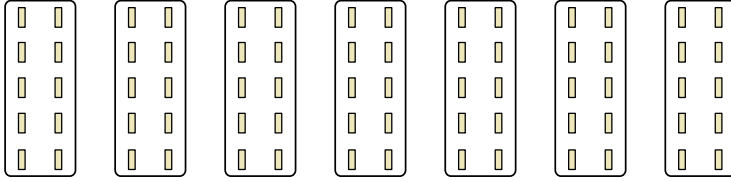
Risposte

Es)



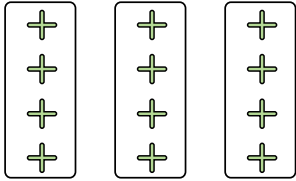
Es. $6 \times 7 = 42$

1)




1. _____

2)



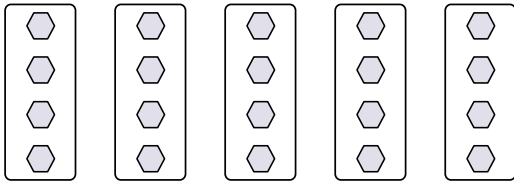
2. _____

3)



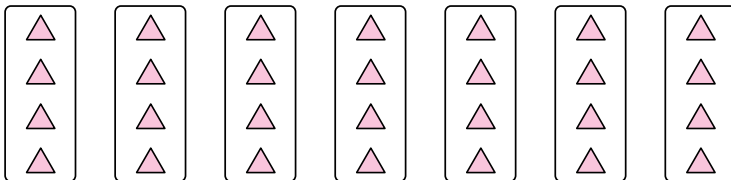
3. _____

4)



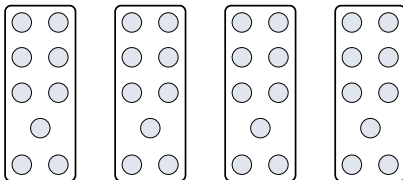
4. _____

5)




5. _____

6)



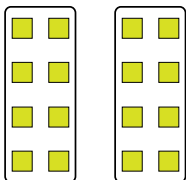
6. _____

7)



7. _____

8)



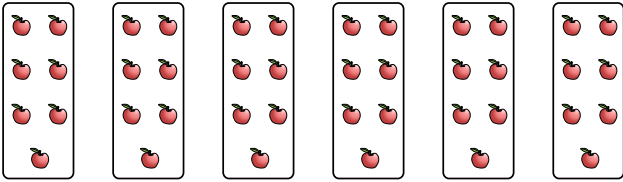
8. _____



Determina come scriveresti ogni gruppo sotto forma di moltiplicazione.

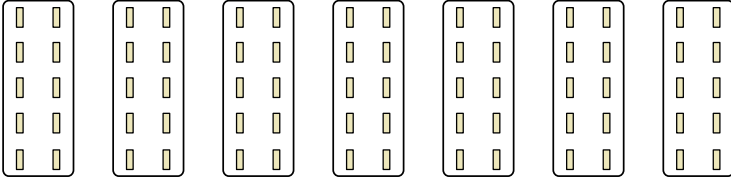
Risposte

Es)



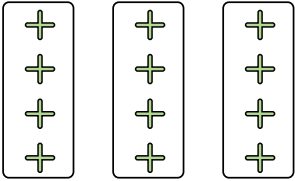
Es. $6 \times 7 = 42$

1)




1. $7 \times 10 = 70$

2)



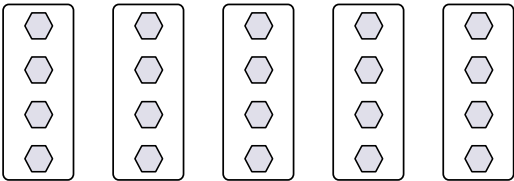
2. $3 \times 4 = 12$

3)



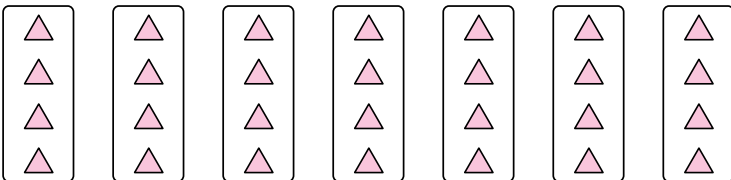
3. $3 \times 7 = 21$

4)



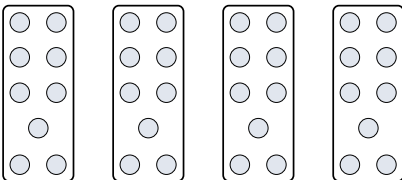
4. $5 \times 4 = 20$

5)




5. $7 \times 4 = 28$

6)




6. $4 \times 9 = 36$

7)



7. $4 \times 10 = 40$

8)



8. $2 \times 8 = 16$