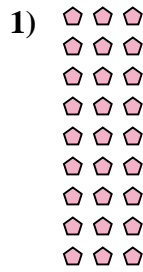
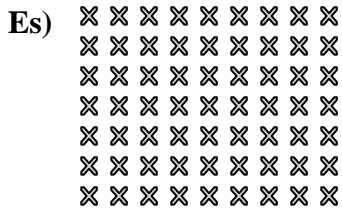




Scrivi ogni blocco sotto forma di moltiplicazione e calcola il risultato.



**Risposte**

Es. 7 x 9 = 63

1. \_\_\_\_\_

2. \_\_\_\_\_

3. \_\_\_\_\_

4. \_\_\_\_\_

5. \_\_\_\_\_

6. \_\_\_\_\_




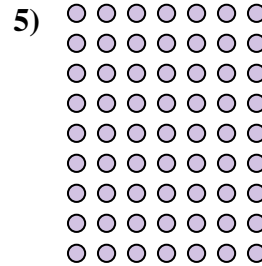


7. \_\_\_\_\_

8. \_\_\_\_\_

9. \_\_\_\_\_

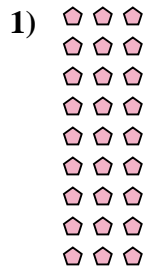
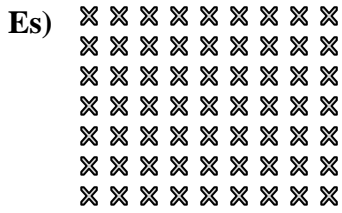
10. \_\_\_\_\_

11. \_\_\_\_\_





Scrivi ogni blocco sotto forma di moltiplicazione e calcola il risultato.



**Risposte**

Es. 7 × 9 = 63

1. 9 × 3 = 27

2. 6 × 2 = 12

3. 9 × 4 = 36

4. 6 × 5 = 30

5. 9 × 7 = 63

6. 6 × 10 = 60





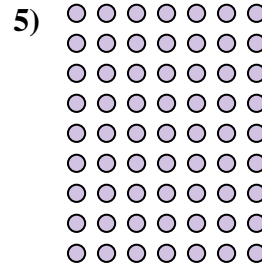


7. 7 × 6 = 42

8. 4 × 10 = 40

9. 5 × 6 = 30

10. 2 × 3 = 6

11. 6 × 6 = 36











Scrivi ogni blocco sotto forma di moltiplicazione e calcola il risultato.



**Risposte**

Es. 2 × 5 = 10

1. 6 × 10 = 60

2. 3 × 7 = 21

3. 10 × 3 = 30

4. 3 × 8 = 24

5. 7 × 3 = 21

6. 9 × 5 = 45

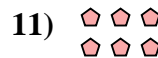




7. 9 × 6 = 54

8. 4 × 10 = 40

9. 6 × 9 = 54

10. 6 × 5 = 30

11. 2 × 3 = 6
























Scrivi ogni blocco sotto forma di moltiplicazione e calcola il risultato.



**Risposte**

Es. 7 × 7 = 49

1. 8 × 6 = 48

2. 6 × 8 = 48

3. 5 × 2 = 10

4. 10 × 8 = 80

5. 8 × 2 = 16

6. 9 × 10 = 90

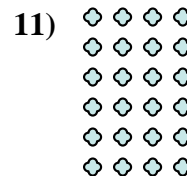
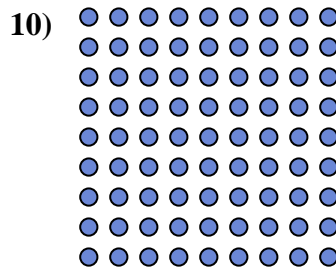



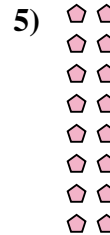

7. 3 × 8 = 24

8. 8 × 9 = 72

9. 3 × 9 = 27

10. 9 × 9 = 81

11. 6 × 4 = 24















Scrivi ogni blocco sotto forma di moltiplicazione e calcola il risultato.



**Risposte**

Es. 9 × 5 = 45

1. 8 × 2 = 16

2. 6 × 9 = 54

3. 3 × 7 = 21

4. 2 × 9 = 18

5. 3 × 4 = 12

6. 8 × 10 = 80





7. 10 × 9 = 90

8. 2 × 10 = 20

9. 4 × 2 = 8

10. 3 × 6 = 18

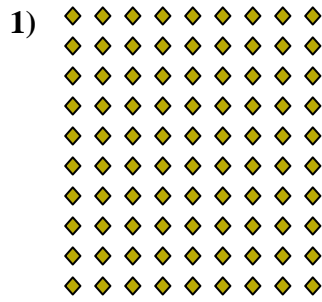

11. 10 × 5 = 50







Scrivi ogni blocco sotto forma di moltiplicazione e calcola il risultato.



**Risposte**

Es. 6 × 3 = 18

1. 10 × 9 = 90

2. 9 × 5 = 45

3. 5 × 2 = 10

4. 8 × 4 = 32

5. 9 × 10 = 90

6. 3 × 2 = 6

7. 4 × 9 = 36

8. 10 × 3 = 30

9. 10 × 7 = 70

10. 2 × 8 = 16

11. 3 × 4 = 12

