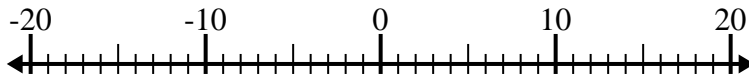


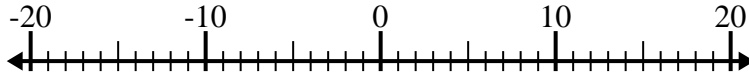


Risolvi ogni operazione. Usa la linea numerata se necessario.

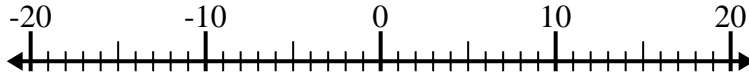
1) $(-15) - (-7) =$ _____



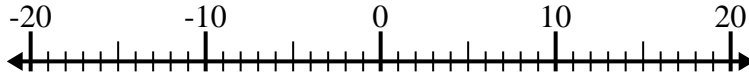
2) $(-9) - 4 =$ _____



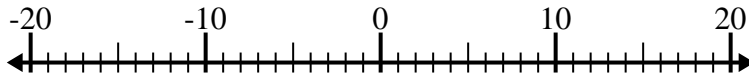
3) $7 - (-13) =$ _____



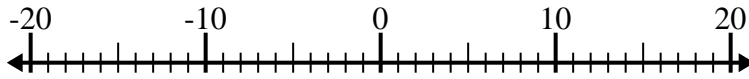
4) $(-5) + (-11) =$ _____



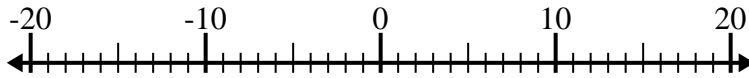
5) $(-12) + 4 =$ _____



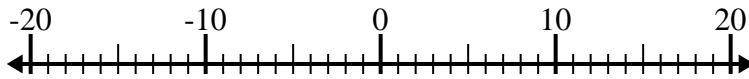
6) $14 - (-2) =$ _____



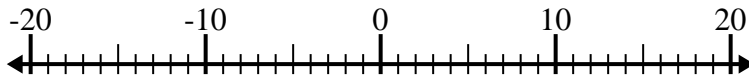
7) $1 + (-13) =$ _____



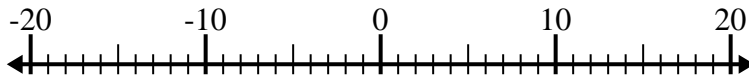
8) $(-4) - (-7) =$ _____



9) $(-9) - 11 =$ _____



10) $(-15) + (-1) =$ _____



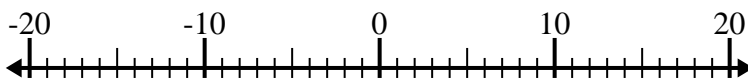
Risposte

1. _____
2. _____
3. _____
4. _____
5. _____
6. _____
7. _____
8. _____
9. _____
10. _____

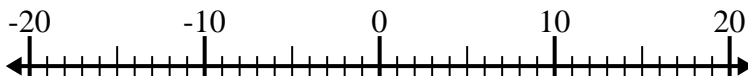


Risolvi ogni operazione. Usa la linea numerata se necessario.

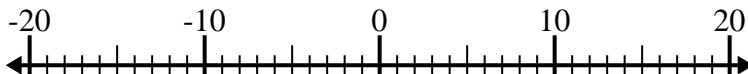
1) $(-15) - (-7) = \underline{-8}$



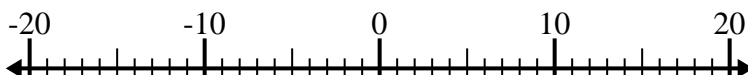
2) $(-9) - 4 = \underline{-13}$



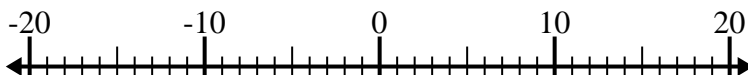
3) $7 - (-13) = \underline{20}$



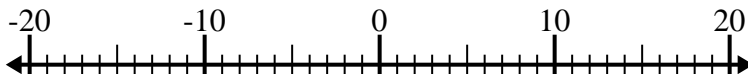
4) $(-5) + (-11) = \underline{-16}$



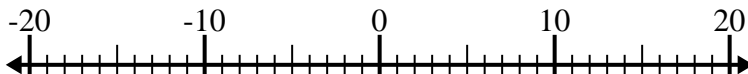
5) $(-12) + 4 = \underline{-8}$



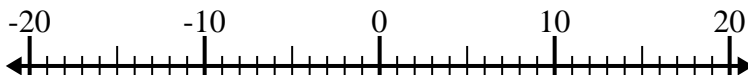
6) $14 - (-2) = \underline{16}$



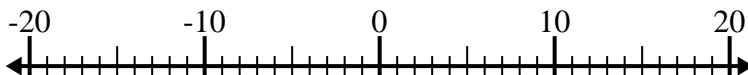
7) $1 + (-13) = \underline{-12}$



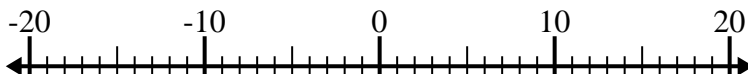
8) $(-4) - (-7) = \underline{3}$



9) $(-9) - 11 = \underline{-20}$



10) $(-15) + (-1) = \underline{-16}$

**Risposte**1. **-8**2. **-13**3. **20**4. **-16**5. **-8**6. **16**7. **-12**8. **3**9. **-20**10. **-16**