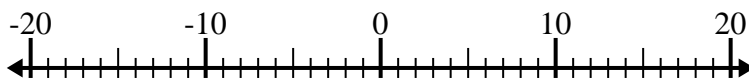


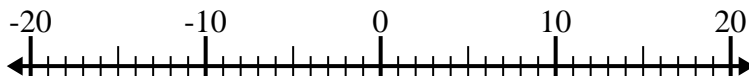


Risolvi ogni operazione. Usa la linea numerata se necessario.

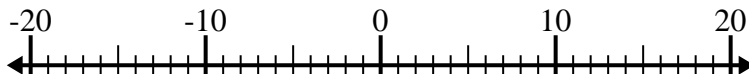
1)  $8 - (-12) =$  \_\_\_\_\_



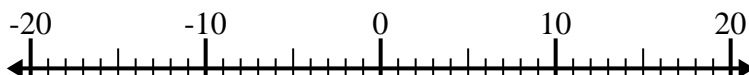
2)  $(-8) + (-6) =$  \_\_\_\_\_



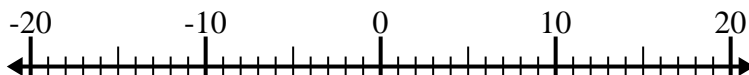
3)  $12 + (-2) =$  \_\_\_\_\_



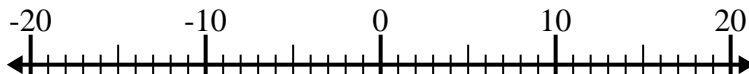
4)  $(-2) + (-13) =$  \_\_\_\_\_



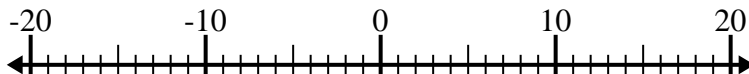
5)  $(-6) + 8 =$  \_\_\_\_\_



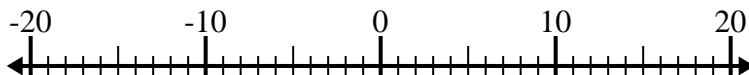
6)  $(-5) - 10 =$  \_\_\_\_\_



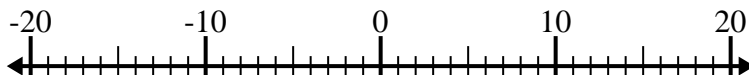
7)  $(-14) - (-8) =$  \_\_\_\_\_



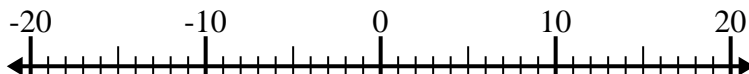
8)  $5 - (-2) =$  \_\_\_\_\_



9)  $(-11) - (-14) =$  \_\_\_\_\_



10)  $14 + (-10) =$  \_\_\_\_\_

**Risposte**

1. \_\_\_\_\_

2. \_\_\_\_\_

3. \_\_\_\_\_

4. \_\_\_\_\_

5. \_\_\_\_\_

6. \_\_\_\_\_

7. \_\_\_\_\_

8. \_\_\_\_\_

9. \_\_\_\_\_

10. \_\_\_\_\_



Risolvi ogni operazione. Usa la linea numerata se necessario.

1)  $8 - (-12) = \underline{20}$



2)  $(-8) + (-6) = \underline{-14}$



3)  $12 + (-2) = \underline{10}$



4)  $(-2) + (-13) = \underline{-15}$



5)  $(-6) + 8 = \underline{2}$



6)  $(-5) - 10 = \underline{-15}$



7)  $(-14) - (-8) = \underline{-6}$



8)  $5 - (-2) = \underline{7}$



9)  $(-11) - (-14) = \underline{3}$



10)  $14 + (-10) = \underline{4}$

**Risposte**1. **20**2. **-14**3. **10**4. **-15**5. **2**6. **-15**7. **-6**8. **7**9. **3**10. **4**