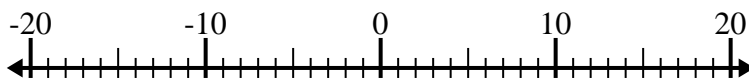


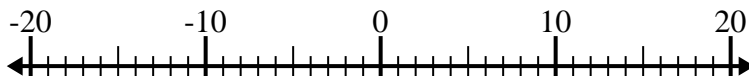


Risolvi ogni operazione. Usa la linea numerata se necessario.

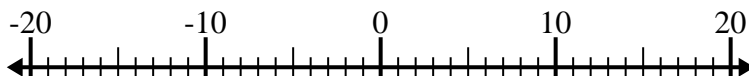
1) $(-3) - 9 =$ _____



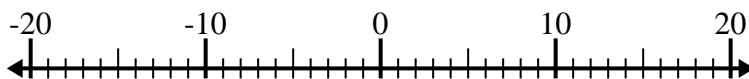
2) $(-11) + (-7) =$ _____



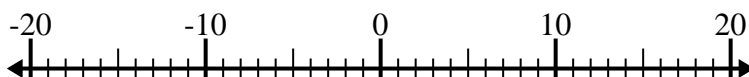
3) $(-15) + 11 =$ _____



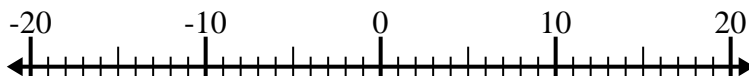
4) $10 - (-4) =$ _____



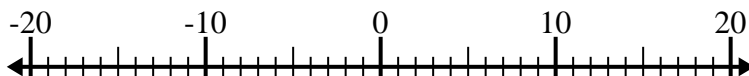
5) $(-2) + (-5) =$ _____



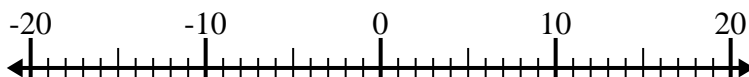
6) $(-14) - (-7) =$ _____



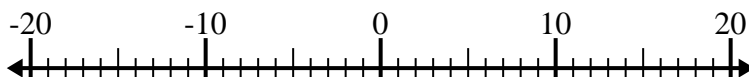
7) $(-10) - 1 =$ _____



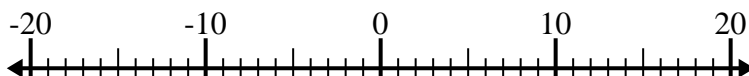
8) $10 - (-6) =$ _____



9) $13 + (-1) =$ _____



10) $(-8) + 4 =$ _____

**Risposte**

1. _____

2. _____

3. _____

4. _____

5. _____

6. _____

7. _____

8. _____

9. _____

10. _____



Risolvi ogni operazione. Usa la linea numerata se necessario.

1) $(-3) - 9 = \underline{-12}$



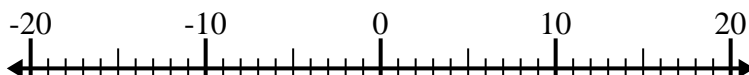
2) $(-11) + (-7) = \underline{-18}$



3) $(-15) + 11 = \underline{-4}$



4) $10 - (-4) = \underline{14}$



5) $(-2) + (-5) = \underline{-7}$



6) $(-14) - (-7) = \underline{-7}$



7) $(-10) - 1 = \underline{-11}$



8) $10 - (-6) = \underline{16}$



9) $13 + (-1) = \underline{12}$



10) $(-8) + 4 = \underline{-4}$

**Risposte**1. **-12**2. **-18**3. **-4**4. **14**5. **-7**6. **-7**7. **-11**8. **16**9. **12**10. **-4**