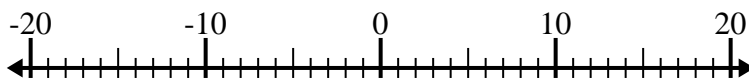


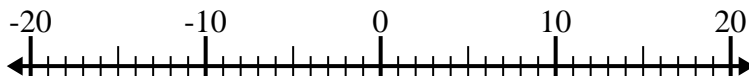


Risolvi ogni operazione. Usa la linea numerata se necessario.

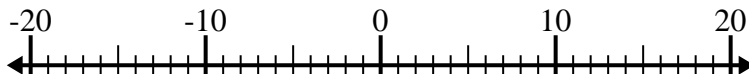
1)  $(-4) - (-5) =$  \_\_\_\_\_



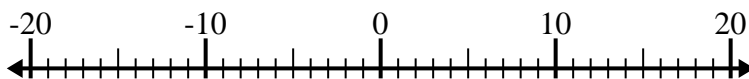
2)  $5 - (-12) =$  \_\_\_\_\_



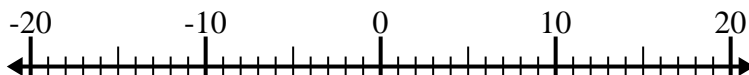
3)  $(-4) - (-13) =$  \_\_\_\_\_



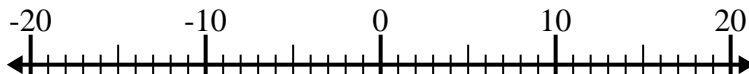
4)  $12 + (-10) =$  \_\_\_\_\_



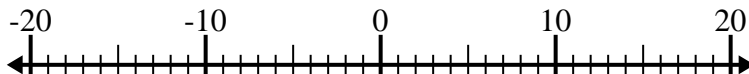
5)  $(-1) - 13 =$  \_\_\_\_\_



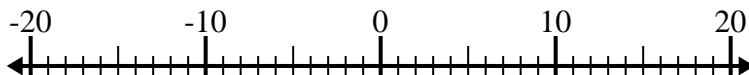
6)  $(-5) + 15 =$  \_\_\_\_\_



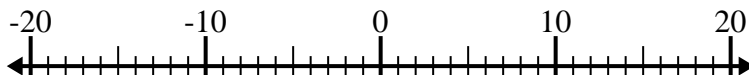
7)  $(-11) + 1 =$  \_\_\_\_\_



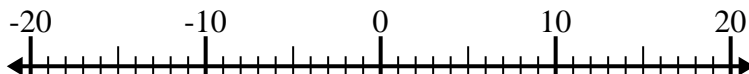
8)  $14 - (-4) =$  \_\_\_\_\_



9)  $(-2) - 14 =$  \_\_\_\_\_



10)  $(-4) + (-1) =$  \_\_\_\_\_

**Risposte**

1. \_\_\_\_\_

2. \_\_\_\_\_

3. \_\_\_\_\_

4. \_\_\_\_\_

5. \_\_\_\_\_

6. \_\_\_\_\_

7. \_\_\_\_\_

8. \_\_\_\_\_

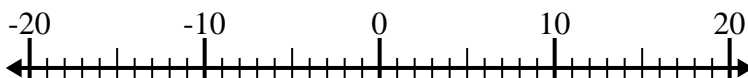
9. \_\_\_\_\_

10. \_\_\_\_\_

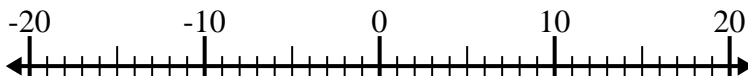


Risolvi ogni operazione. Usa la linea numerata se necessario.

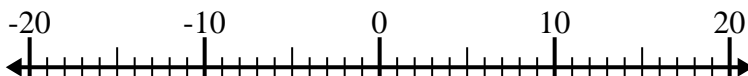
1)  $(-4) - (-5) = \underline{1}$



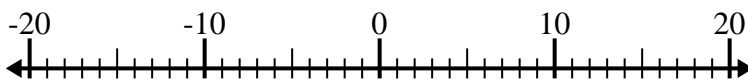
2)  $5 - (-12) = \underline{17}$



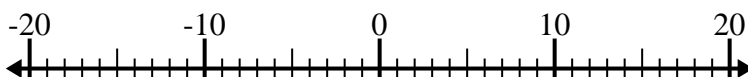
3)  $(-4) - (-13) = \underline{9}$



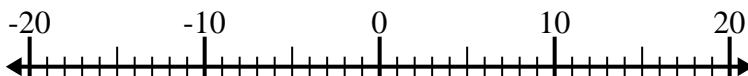
4)  $12 + (-10) = \underline{2}$



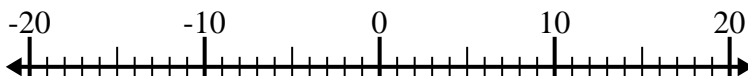
5)  $(-1) - 13 = \underline{-14}$



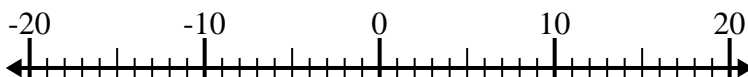
6)  $(-5) + 15 = \underline{10}$



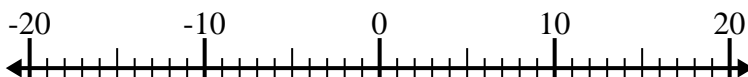
7)  $(-11) + 1 = \underline{-10}$



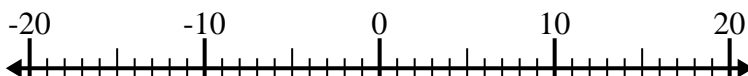
8)  $14 - (-4) = \underline{18}$



9)  $(-2) - 14 = \underline{-16}$



10)  $(-4) + (-1) = \underline{-5}$

**Risposte**1. **1**2. **17**3. **9**4. **2**5. **-14**6. **10**7. **-10**8. **18**9. **-16**10. **-5**