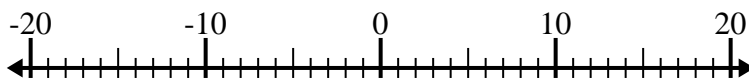


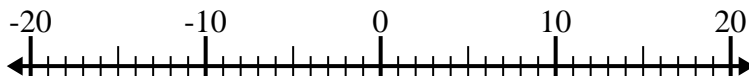


Risolvi ogni operazione. Usa la linea numerata se necessario.

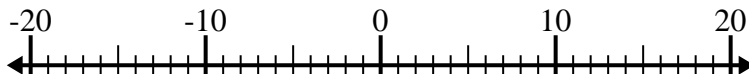
1) $12 + (-15) =$ _____



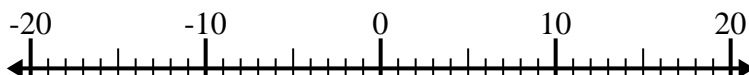
2) $(-8) - (-6) =$ _____



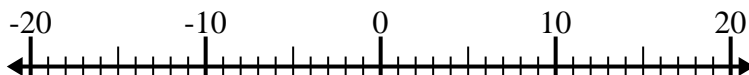
3) $5 - (-9) =$ _____



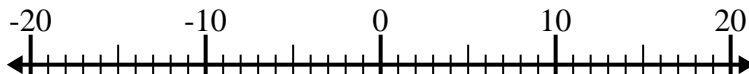
4) $(-10) + (-6) =$ _____



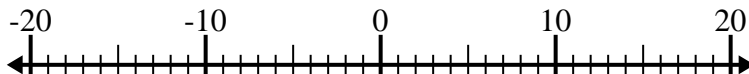
5) $3 + (-15) =$ _____



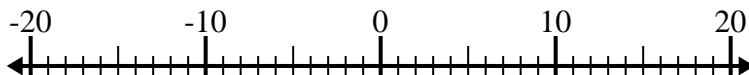
6) $(-12) - (-14) =$ _____



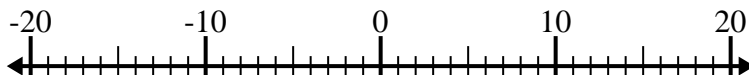
7) $(-11) - 7 =$ _____



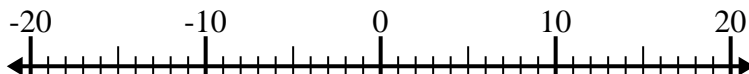
8) $(-4) + 10 =$ _____



9) $(-13) - 2 =$ _____



10) $(-13) + (-7) =$ _____

**Risposte**

1. _____

2. _____

3. _____

4. _____

5. _____

6. _____

7. _____

8. _____

9. _____

10. _____



Risolvi ogni operazione. Usa la linea numerata se necessario.

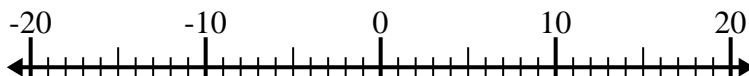
1) $12 + (-15) = \underline{-3}$



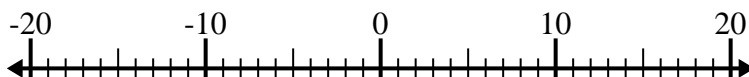
2) $(-8) - (-6) = \underline{-2}$



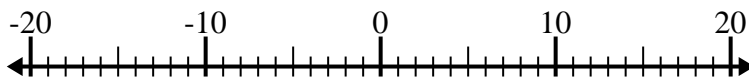
3) $5 - (-9) = \underline{14}$



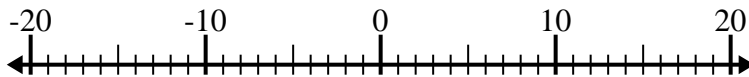
4) $(-10) + (-6) = \underline{-16}$



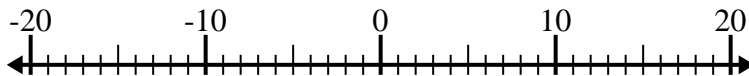
5) $3 + (-15) = \underline{-12}$



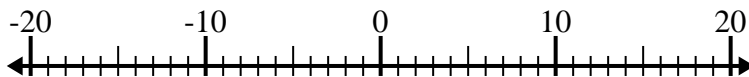
6) $(-12) - (-14) = \underline{2}$



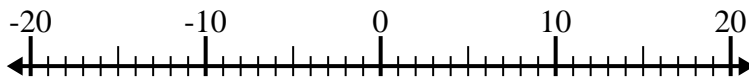
7) $(-11) - 7 = \underline{-18}$



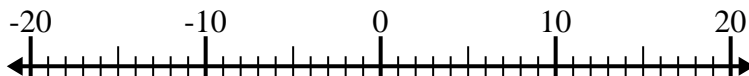
8) $(-4) + 10 = \underline{6}$



9) $(-13) - 2 = \underline{-15}$



10) $(-13) + (-7) = \underline{-20}$

**Risposte**1. **-3**2. **-2**3. **14**4. **-16**5. **-12**6. **2**7. **-18**8. **6**9. **-15**10. **-20**