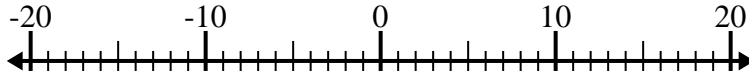


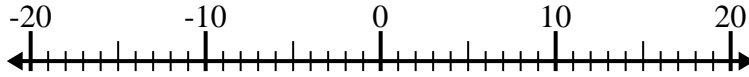


Risolvi ogni operazione. Usa la linea numerata se necessario.

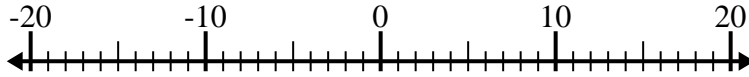
1) $7 + (-3) =$ _____



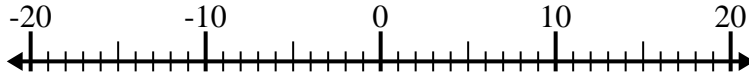
2) $(-6) + (-10) =$ _____



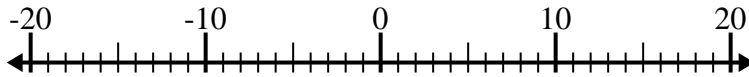
3) $(-13) - (-9) =$ _____



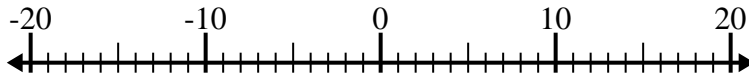
4) $6 - (-7) =$ _____



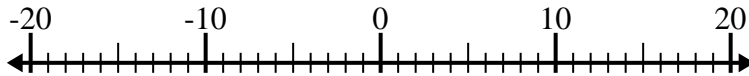
5) $(-8) - (-7) =$ _____



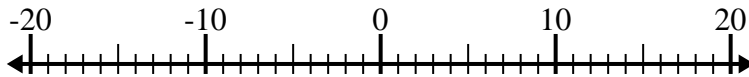
6) $(-8) + 15 =$ _____



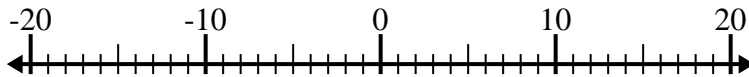
7) $(-12) + (-6) =$ _____



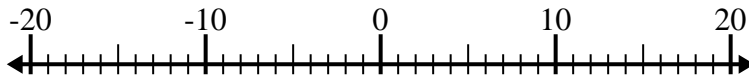
8) $7 - (-6) =$ _____



9) $(-2) - 9 =$ _____



10) $(-11) + 6 =$ _____



Risposte

1. _____
2. _____
3. _____
4. _____
5. _____
6. _____
7. _____
8. _____
9. _____
10. _____



Risolvi ogni operazione. Usa la linea numerata se necessario.

1) $7 + (-3) = \underline{4}$



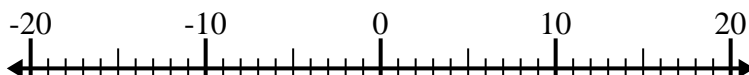
2) $(-6) + (-10) = \underline{-16}$



3) $(-13) - (-9) = \underline{-4}$



4) $6 - (-7) = \underline{13}$



5) $(-8) - (-7) = \underline{-1}$



6) $(-8) + 15 = \underline{7}$



7) $(-12) + (-6) = \underline{-18}$



8) $7 - (-6) = \underline{13}$



9) $(-2) - 9 = \underline{-11}$



10) $(-11) + 6 = \underline{-5}$

**Risposte**1. 42. -163. -44. 135. -16. 77. -188. 139. -1110. -5