



**Risolvi ogni problema.****Risposte**

1) Quale lettera indica meglio -27?




1. \_\_\_\_\_

2) Quale lettera indica meglio -16?




2. \_\_\_\_\_

3) Quale lettera indica meglio -18?




3. \_\_\_\_\_

4) Quale lettera indica meglio -15?




4. \_\_\_\_\_

5) Quale lettera indica meglio -91?




5. \_\_\_\_\_

6) Quale lettera indica meglio -75?




6. \_\_\_\_\_

7) Quale lettera indica meglio -81?



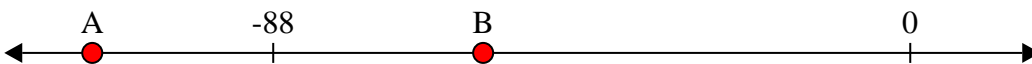
7. \_\_\_\_\_

8) Quale lettera indica meglio -10?




8. \_\_\_\_\_

9) Quale lettera indica meglio -59?



9. \_\_\_\_\_

10) Quale lettera indica meglio -87?




10. \_\_\_\_\_



Risolvi ogni problema.

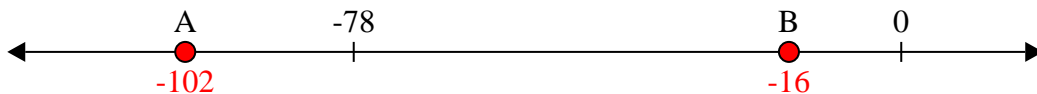
**Risposte**

1) Quale lettera indica meglio -27?



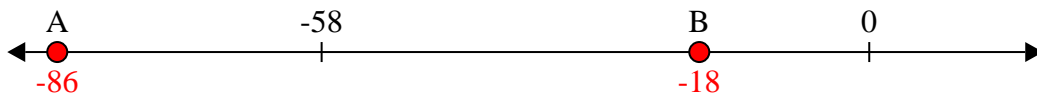
1.     **B**    

2) Quale lettera indica meglio -16?



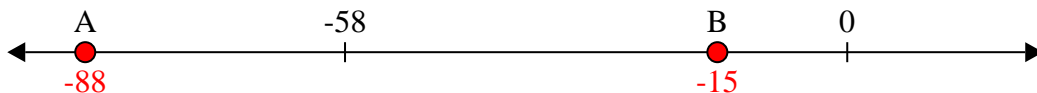
2.     **B**    

3) Quale lettera indica meglio -18?




3.     **B**    

4) Quale lettera indica meglio -15?



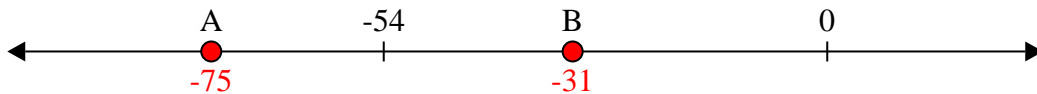
4.     **B**    

5) Quale lettera indica meglio -91?




5.     **A**    

6) Quale lettera indica meglio -75?




6.     **A**    

7) Quale lettera indica meglio -81?



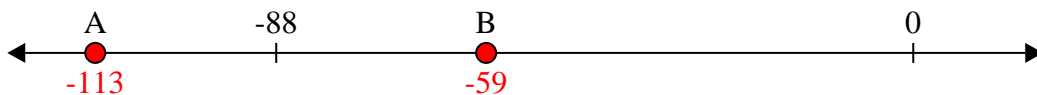
7.     **A**    

8) Quale lettera indica meglio -10?



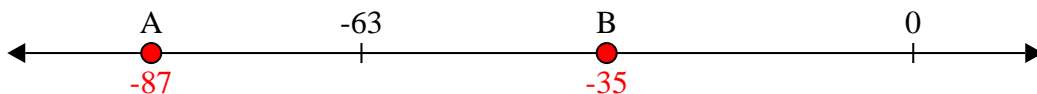
8.     **B**    

9) Quale lettera indica meglio -59?



9.     **B**    

10) Quale lettera indica meglio -87?



10.     **A**