




Risolvi ogni problema.


Risposte

1) Quale lettera indica meglio -28?



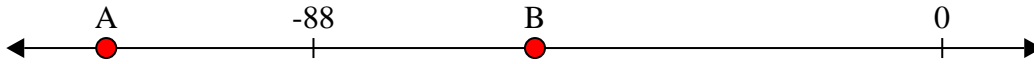
1. _____

2) Quale lettera indica meglio -26?



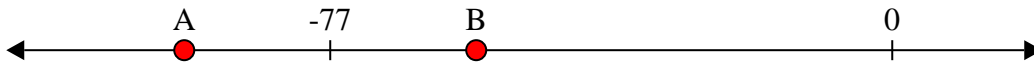
2. _____

3) Quale lettera indica meglio -117?



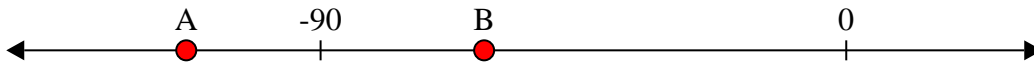
3. _____

4) Quale lettera indica meglio -97?



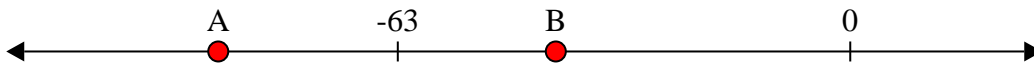
4. _____

5) Quale lettera indica meglio -113?




5. _____

6) Quale lettera indica meglio -88?




6. _____

7) Quale lettera indica meglio -22?




7. _____

8) Quale lettera indica meglio -25?




8. _____

9) Quale lettera indica meglio -82?



9. _____

10) Quale lettera indica meglio -120?



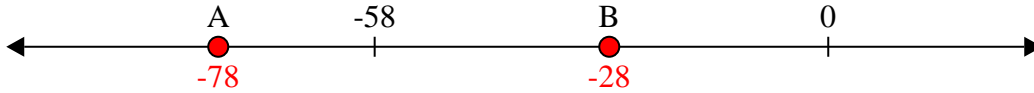
10. _____



Risolvi ogni problema.

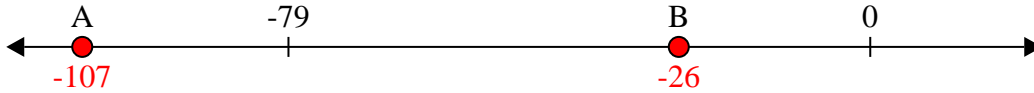
Risposte

1) Quale lettera indica meglio -28?



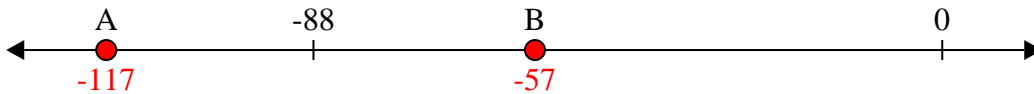
1. **B**

2) Quale lettera indica meglio -26?



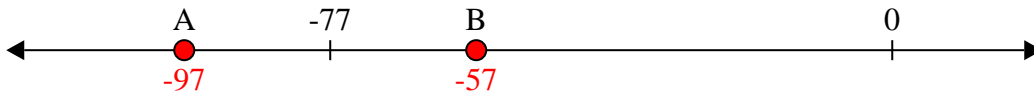
2. **B**

3) Quale lettera indica meglio -117?



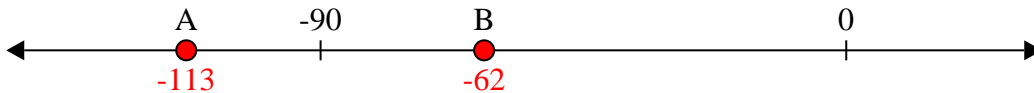
3. **A**

4) Quale lettera indica meglio -97?



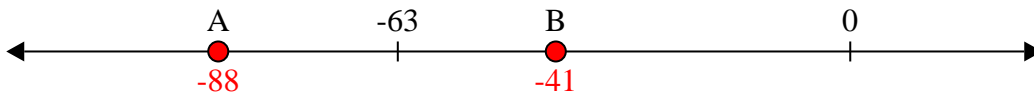
4. **A**

5) Quale lettera indica meglio -113?




5. **A**

6) Quale lettera indica meglio -88?




6. **A**

7) Quale lettera indica meglio -22?




7. **B**

8) Quale lettera indica meglio -25?



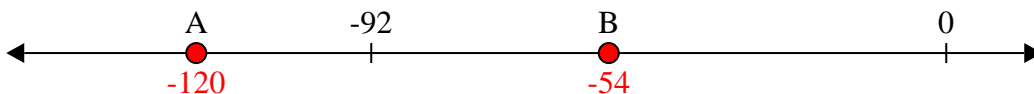
8. **B**

9) Quale lettera indica meglio -82?



9. **A**

10) Quale lettera indica meglio -120?



10. **A**