




Risolvi ogni problema.


Risposte

1) Quale lettera indica meglio -37?



1. _____

2) Quale lettera indica meglio -113?




2. _____

3) Quale lettera indica meglio -97?




3. _____

4) Quale lettera indica meglio -80?



4. _____

5) Quale lettera indica meglio -40?



5. _____

6) Quale lettera indica meglio -101?




6. _____

7) Quale lettera indica meglio -22?




7. _____

8) Quale lettera indica meglio -105?




8. _____

9) Quale lettera indica meglio -115?



9. _____

10) Quale lettera indica meglio -97?



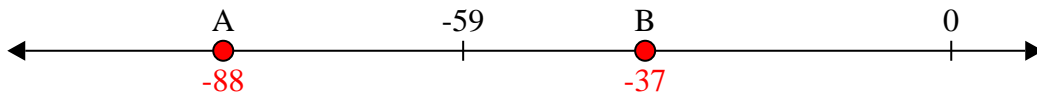
10. _____



Risolvi ogni problema.

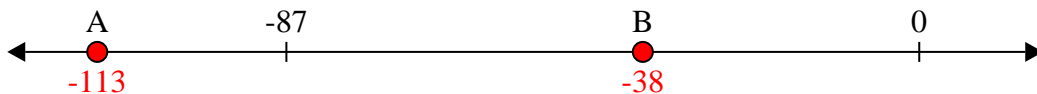
Risposte

1) Quale lettera indica meglio -37?



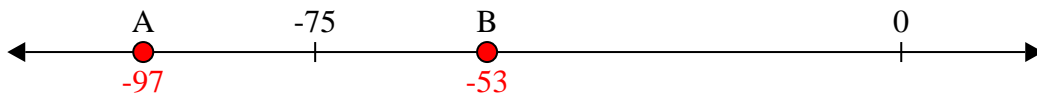
1. **B**

2) Quale lettera indica meglio -113?



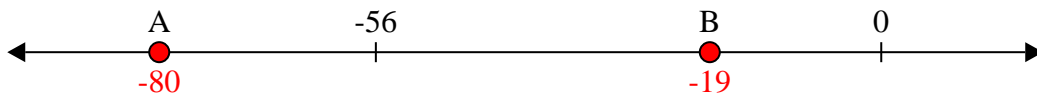
2. **A**

3) Quale lettera indica meglio -97?




3. **A**

4) Quale lettera indica meglio -80?




4. **A**

5) Quale lettera indica meglio -40?




5. **B**

6) Quale lettera indica meglio -101?




6. **A**

7) Quale lettera indica meglio -22?




7. **B**

8) Quale lettera indica meglio -105?



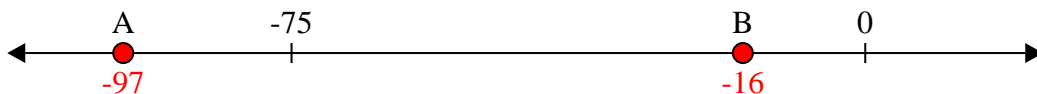
8. **A**

9) Quale lettera indica meglio -115?



9. **A**

10) Quale lettera indica meglio -97?



10. **A**