




Risolvi ogni problema.

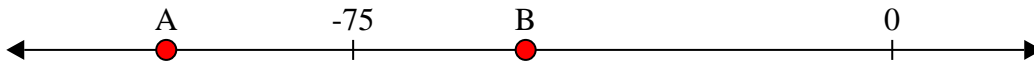
Risposte

1) Quale lettera indica meglio -24?




1. _____

2) Quale lettera indica meglio -101?



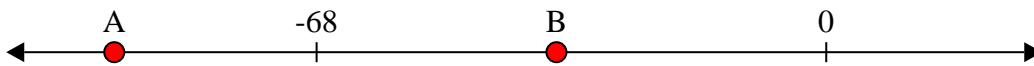
2. _____

3) Quale lettera indica meglio -83?




3. _____

4) Quale lettera indica meglio -95?




4. _____

5) Quale lettera indica meglio -86?



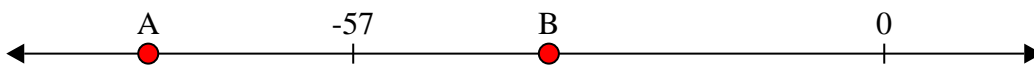
5. _____

6) Quale lettera indica meglio -112?




6. _____

7) Quale lettera indica meglio -79?




7. _____

8) Quale lettera indica meglio -10?



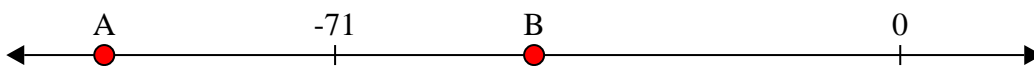
8. _____

9) Quale lettera indica meglio -27?



9. _____

10) Quale lettera indica meglio -100?




10. _____



Risolvi ogni problema.

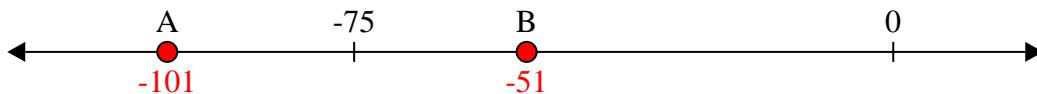
Risposte

1) Quale lettera indica meglio -24?



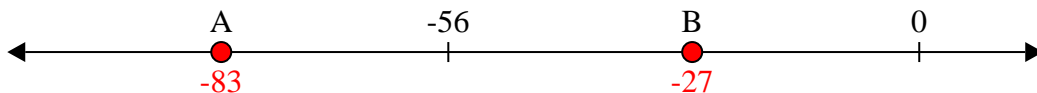
1. **B**

2) Quale lettera indica meglio -101?



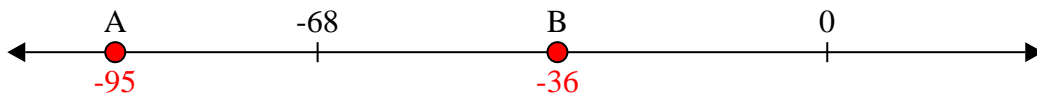
2. **A**

3) Quale lettera indica meglio -83?



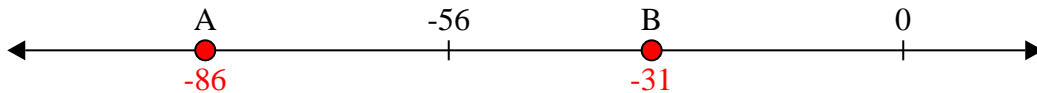
3. **A**

4) Quale lettera indica meglio -95?



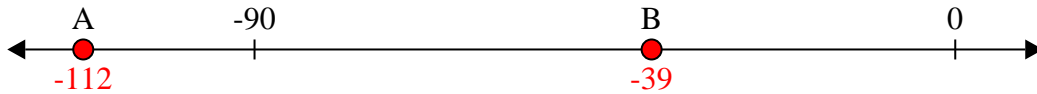
4. **A**

5) Quale lettera indica meglio -86?



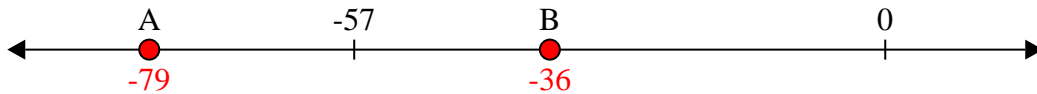
5. **A**

6) Quale lettera indica meglio -112?



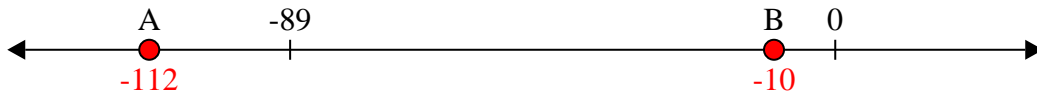
6. **A**

7) Quale lettera indica meglio -79?



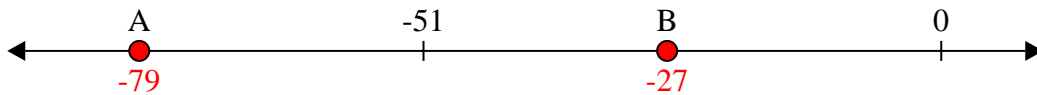
7. **A**

8) Quale lettera indica meglio -10?



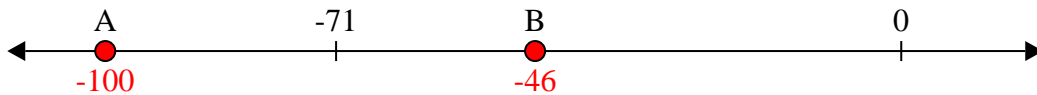
8. **B**

9) Quale lettera indica meglio -27?



9. **B**

10) Quale lettera indica meglio -100?



10. **A**