




Risolvi ogni problema.


Risposte

1) Quale lettera indica meglio -98?




1. _____

2) Quale lettera indica meglio -39?




2. _____

3) Quale lettera indica meglio -20?



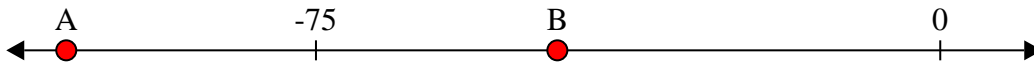
3. _____

4) Quale lettera indica meglio -11?



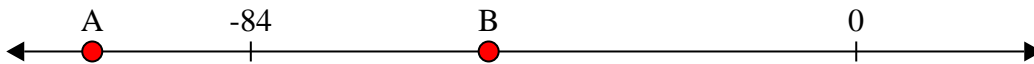
4. _____

5) Quale lettera indica meglio -105?




5. _____

6) Quale lettera indica meglio -106?




6. _____

7) Quale lettera indica meglio -12?




7. _____

8) Quale lettera indica meglio -111?




8. _____

9) Quale lettera indica meglio -12?



9. _____

10) Quale lettera indica meglio -28?




10. _____



Risolvi ogni problema.

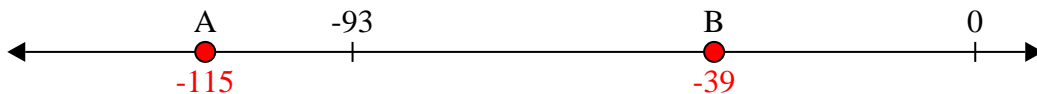
Risposte

1) Quale lettera indica meglio -98?



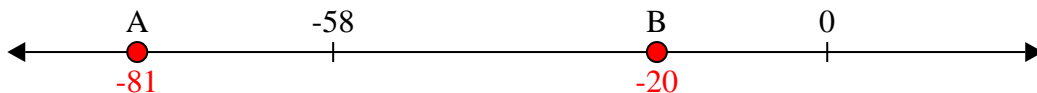
1. **A**

2) Quale lettera indica meglio -39?



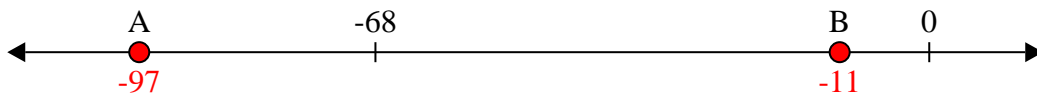
2. **B**

3) Quale lettera indica meglio -20?



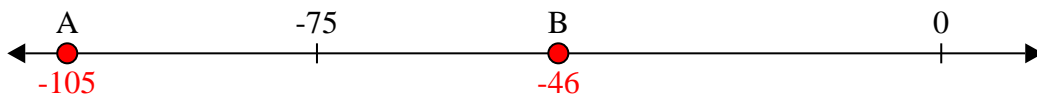
3. **B**

4) Quale lettera indica meglio -11?



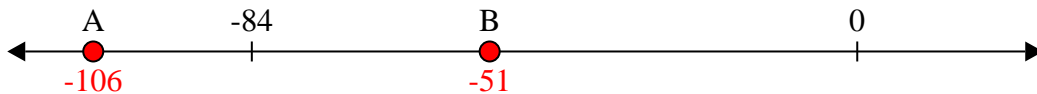
4. **B**

5) Quale lettera indica meglio -105?




5. **A**

6) Quale lettera indica meglio -106?




6. **A**

7) Quale lettera indica meglio -12?




7. **B**

8) Quale lettera indica meglio -111?



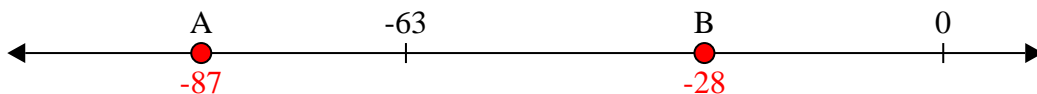
8. **A**

9) Quale lettera indica meglio -12?



9. **B**

10) Quale lettera indica meglio -28?



10. **B**