




Risolvi ogni problema.


**Risposte**

1) Quale lettera indica meglio -128?




1. \_\_\_\_\_

2) Quale lettera indica meglio -114?



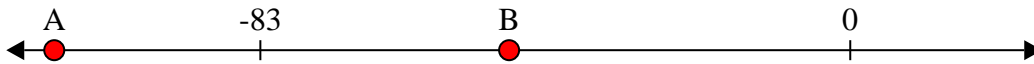
2. \_\_\_\_\_

3) Quale lettera indica meglio -76?




3. \_\_\_\_\_

4) Quale lettera indica meglio -48?




4. \_\_\_\_\_

5) Quale lettera indica meglio -47?




5. \_\_\_\_\_

6) Quale lettera indica meglio -115?



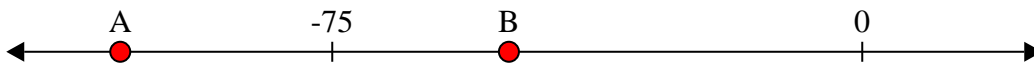
6. \_\_\_\_\_

7) Quale lettera indica meglio -115?




7. \_\_\_\_\_

8) Quale lettera indica meglio -105?




8. \_\_\_\_\_

9) Quale lettera indica meglio -10?



9. \_\_\_\_\_

10) Quale lettera indica meglio -82?




10. \_\_\_\_\_



Risolvi ogni problema.

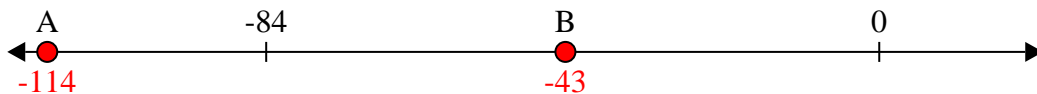
**Risposte**

1) Quale lettera indica meglio -128?



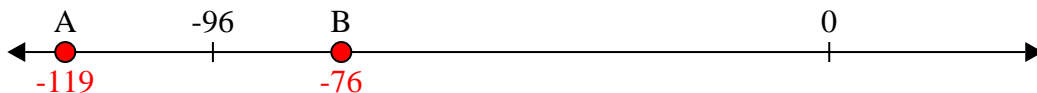
1.   **A**  

2) Quale lettera indica meglio -114?



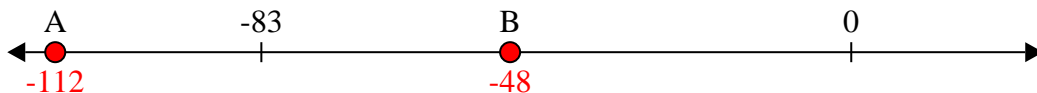
2.   **A**  

3) Quale lettera indica meglio -76?




3.   **B**  

4) Quale lettera indica meglio -48?




4.   **B**  

5) Quale lettera indica meglio -47?




5.   **B**  

6) Quale lettera indica meglio -115?



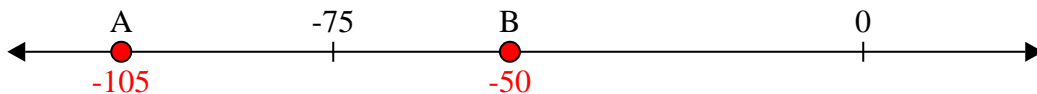
6.   **A**  

7) Quale lettera indica meglio -115?




7.   **A**  

8) Quale lettera indica meglio -105?



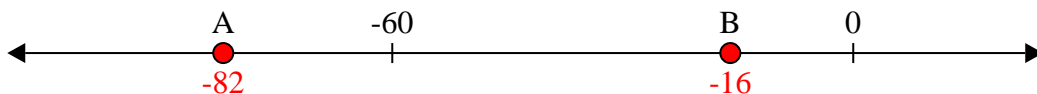
8.   **A**  

9) Quale lettera indica meglio -10?



9.   **B**  

10) Quale lettera indica meglio -82?



10.   **A**