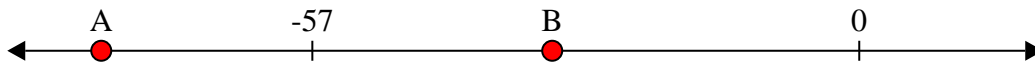



**Risolvi ogni problema.****Risposte**

1) Quale lettera indica meglio -32?




1. \_\_\_\_\_

2) Quale lettera indica meglio -114?




2. \_\_\_\_\_

3) Quale lettera indica meglio -117?




3. \_\_\_\_\_

4) Quale lettera indica meglio -111?



4. \_\_\_\_\_

5) Quale lettera indica meglio -33?



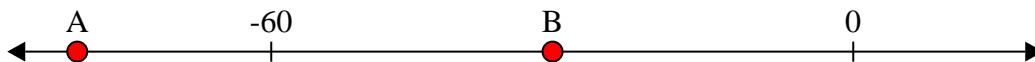
5. \_\_\_\_\_

6) Quale lettera indica meglio -29?




6. \_\_\_\_\_

7) Quale lettera indica meglio -80?



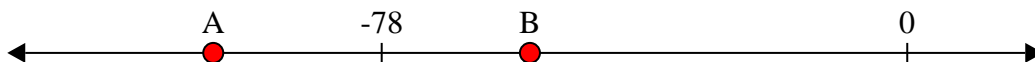
7. \_\_\_\_\_

8) Quale lettera indica meglio -86?




8. \_\_\_\_\_

9) Quale lettera indica meglio -56?



9. \_\_\_\_\_

10) Quale lettera indica meglio -24?



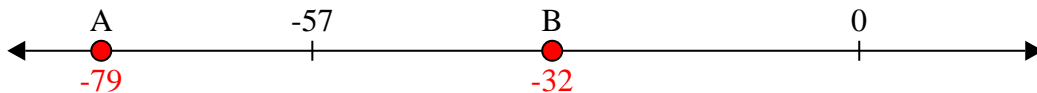
10. \_\_\_\_\_



Risolvi ogni problema.

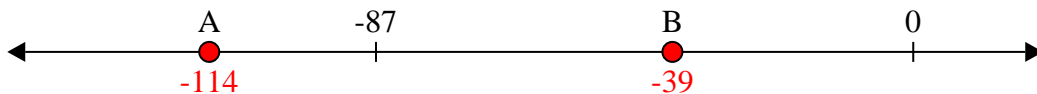
**Risposte**

1) Quale lettera indica meglio -32?



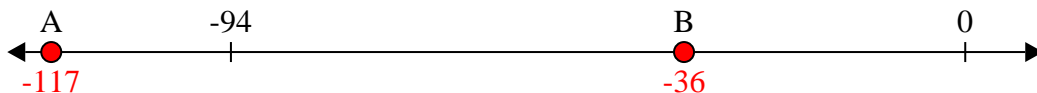
1. **B**

2) Quale lettera indica meglio -114?



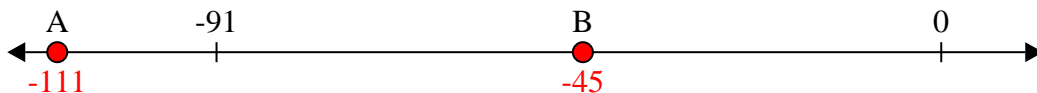
2. **A**

3) Quale lettera indica meglio -117?




3. **A**

4) Quale lettera indica meglio -111?




4. **A**

5) Quale lettera indica meglio -33?



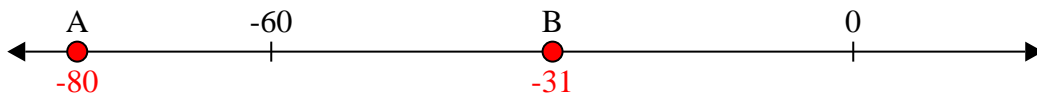
5. **B**

6) Quale lettera indica meglio -29?




6. **B**

7) Quale lettera indica meglio -80?



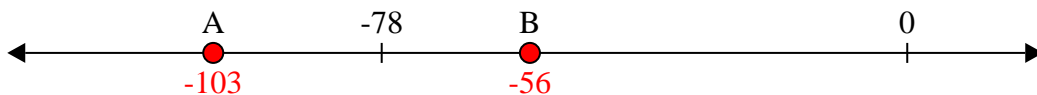
7. **A**

8) Quale lettera indica meglio -86?



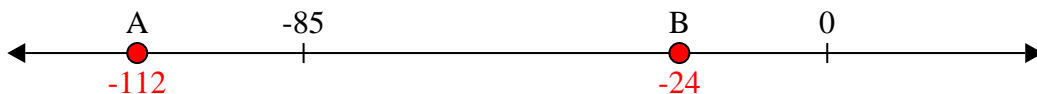
8. **A**

9) Quale lettera indica meglio -56?



9. **B**

10) Quale lettera indica meglio -24?



10. **B**