




Risolvi ogni problema.


Risposte

1) Quale lettera indica meglio -29?




1. _____

2) Quale lettera indica meglio -120?




2. _____

3) Quale lettera indica meglio -118?



3. _____

4) Quale lettera indica meglio -14?



4. _____

5) Quale lettera indica meglio -109?



5. _____

6) Quale lettera indica meglio -28?




6. _____

7) Quale lettera indica meglio -21?




7. _____

8) Quale lettera indica meglio -14?




8. _____

9) Quale lettera indica meglio -13?



9. _____

10) Quale lettera indica meglio -114?



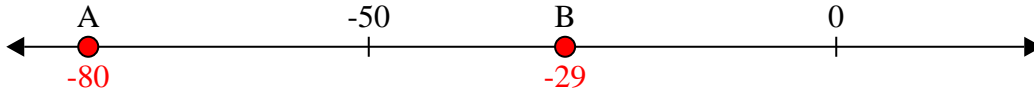
10. _____



Risolvi ogni problema.

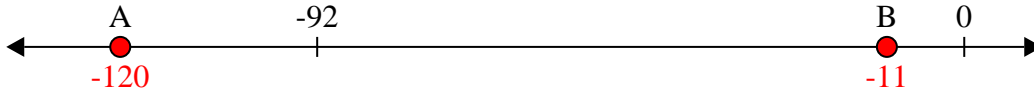
Risposte

1) Quale lettera indica meglio -29?



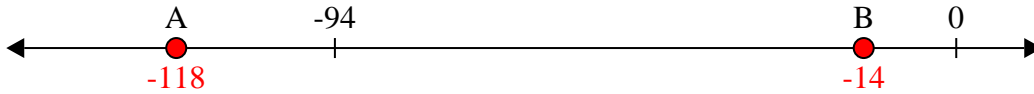
1. **B**

2) Quale lettera indica meglio -120?



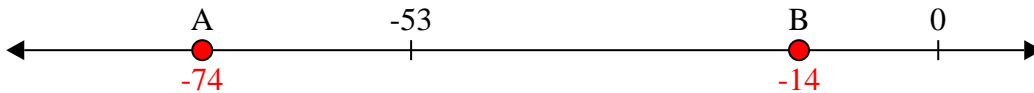
2. **A**

3) Quale lettera indica meglio -118?



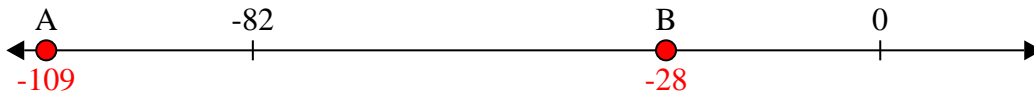
3. **A**

4) Quale lettera indica meglio -14?




4. **B**

5) Quale lettera indica meglio -109?




5. **A**

6) Quale lettera indica meglio -28?




6. **B**

7) Quale lettera indica meglio -21?




7. **B**

8) Quale lettera indica meglio -14?



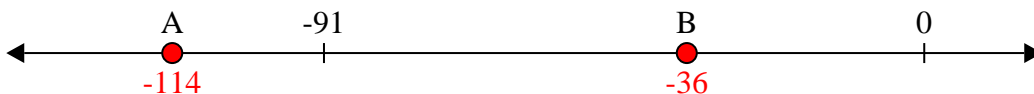
8. **B**

9) Quale lettera indica meglio -13?



9. **B**

10) Quale lettera indica meglio -114?



10. **A**