




Risolvi ogni problema.


**Risposte**

1) Quale lettera indica meglio -118?




1. \_\_\_\_\_

2) Quale lettera indica meglio -63?




2. \_\_\_\_\_

3) Quale lettera indica meglio -43?




3. \_\_\_\_\_

4) Quale lettera indica meglio -69?




4. \_\_\_\_\_

5) Quale lettera indica meglio -124?




5. \_\_\_\_\_

6) Quale lettera indica meglio -27?




6. \_\_\_\_\_

7) Quale lettera indica meglio -102?




7. \_\_\_\_\_

8) Quale lettera indica meglio -34?




8. \_\_\_\_\_

9) Quale lettera indica meglio -14?



9. \_\_\_\_\_

10) Quale lettera indica meglio -25?




10. \_\_\_\_\_



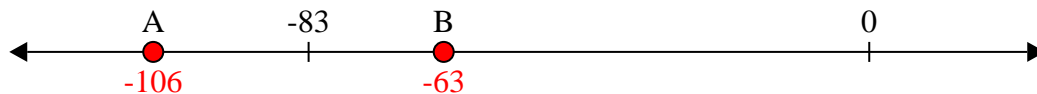
Risolvi ogni problema.

**Risposte**

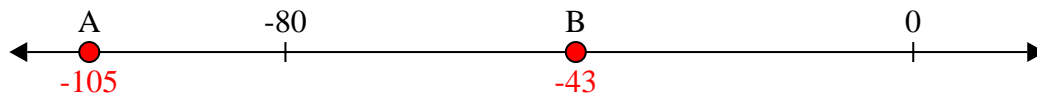
1) Quale lettera indica meglio -118?

1.   **A**  

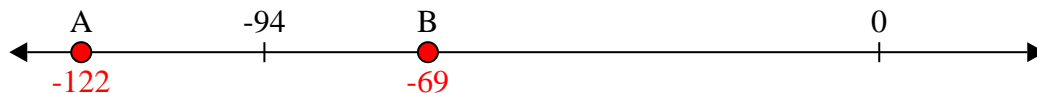
2) Quale lettera indica meglio -63?

2.   **B**  


3) Quale lettera indica meglio -43?

3.   **B**  


4) Quale lettera indica meglio -69?

4.   **B**  


5) Quale lettera indica meglio -124?

5.   **A**  


6) Quale lettera indica meglio -27?

6.   **B**  


7) Quale lettera indica meglio -102?

7.   **A**  

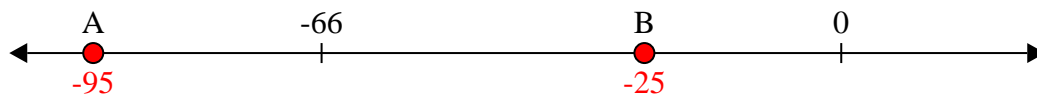
8) Quale lettera indica meglio -34?

8.   **B**  

9) Quale lettera indica meglio -14?

9.   **B**  

10) Quale lettera indica meglio -25?

10.   **B**