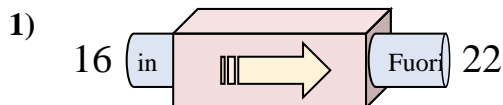
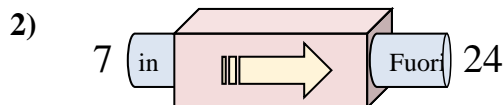




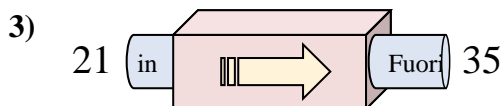
Determina quale regola viene usata nelle seguenti funzioni.

**Risposte**

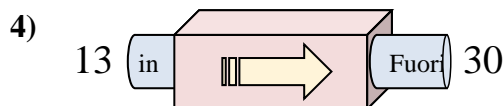
- A. Aggiungi 11
- B. Aggiungi 7
- C. Aggiungi 6
- D. Aggiungi 5



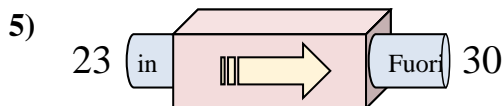
- A. Aggiungi 17
- B. Aggiungi 18
- C. Sottrai 14
- D. Sottrai 18



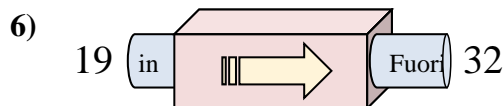
- A. Sottrai 11
- B. Aggiungi 18
- C. Aggiungi 14
- D. Sottrai 15



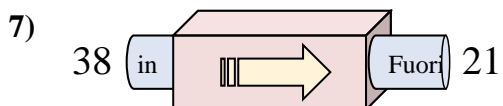
- A. Aggiungi 18
- B. Aggiungi 21
- C. Aggiungi 17
- D. Sottrai 19



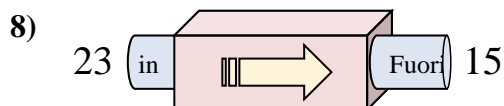
- A. Sottrai 11
- B. Aggiungi 7
- C. Sottrai 3
- D. Aggiungi 4



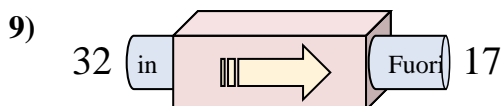
- A. Sottrai 13
- B. Aggiungi 13
- C. Aggiungi 17
- D. Sottrai 8



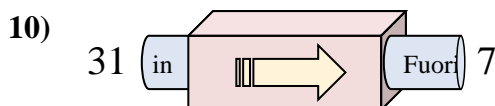
- A. Sottrai 18
- B. Sottrai 17
- C. Aggiungi 13
- D. Sottrai 14



- A. Sottrai 9
- B. Sottrai 11
- C. Sottrai 8
- D. Aggiungi 9



- A. Sottrai 11
- B. Sottrai 15
- C. Aggiungi 10
- D. Sottrai 20



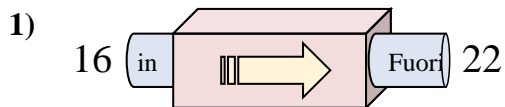
- A. Sottrai 19
- B. Sottrai 25
- C. Sottrai 24
- D. Aggiungi 22

1. \_\_\_\_\_
2. \_\_\_\_\_
3. \_\_\_\_\_
4. \_\_\_\_\_
5. \_\_\_\_\_
6. \_\_\_\_\_
7. \_\_\_\_\_
8. \_\_\_\_\_
9. \_\_\_\_\_
10. \_\_\_\_\_

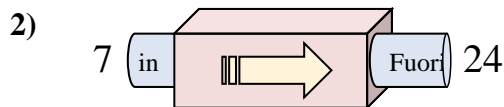


Determina quale regola viene usata nelle seguenti funzioni.

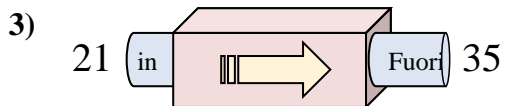
**Risposte**



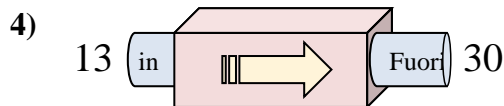
- A. Aggiungi 11
- B. Aggiungi 7
- C. Aggiungi 6
- D. Aggiungi 5



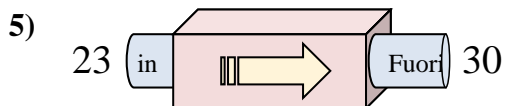
- A. Aggiungi 17
- B. Aggiungi 18
- C. Sottrai 14
- D. Sottrai 18



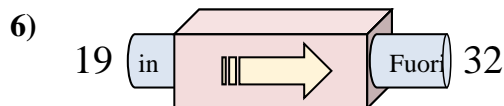
- A. Sottrai 11
- B. Aggiungi 18
- C. Aggiungi 14
- D. Sottrai 15



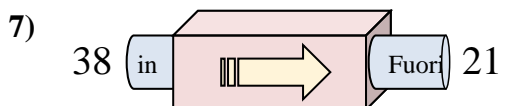
- A. Aggiungi 18
- B. Aggiungi 21
- C. Aggiungi 17
- D. Sottrai 19



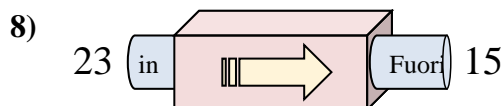
- A. Sottrai 11
- B. Aggiungi 7
- C. Sottrai 3
- D. Aggiungi 4



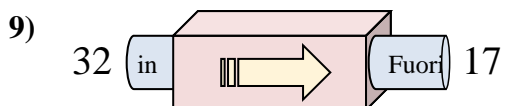
- A. Sottrai 13
- B. Aggiungi 13
- C. Aggiungi 17
- D. Sottrai 8



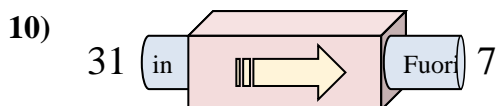
- A. Sottrai 18
- B. Sottrai 17
- C. Aggiungi 13
- D. Sottrai 14



- A. Sottrai 9
- B. Sottrai 11
- C. Sottrai 8
- D. Aggiungi 9



- A. Sottrai 11
- B. Sottrai 15
- C. Aggiungi 10
- D. Sottrai 20



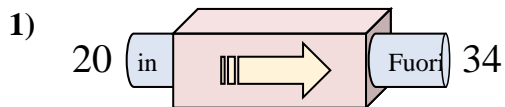
- A. Sottrai 19
- B. Sottrai 25
- C. Sottrai 24
- D. Aggiungi 22

- 1.   **C**
- 2.   **A**
- 3.   **C**
- 4.   **C**
- 5.   **B**
- 6.   **B**
- 7.   **B**
- 8.   **C**
- 9.   **B**
- 10.   **C**

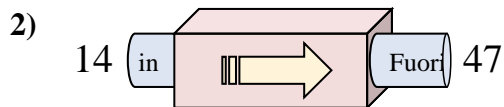


Determina quale regola viene usata nelle seguenti funzioni.

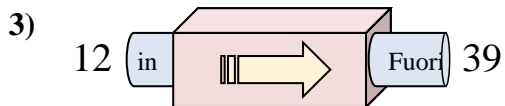
**Risposte**



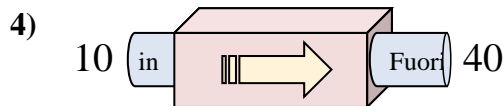
- A. Sottrai 13
- B. Aggiungi 14
- C. Aggiungi 12
- D. Aggiungi 9



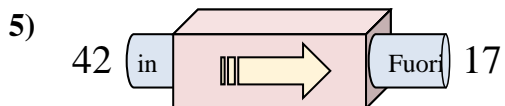
- A. Aggiungi 32
- B. Aggiungi 33
- C. Sottrai 35
- D. Aggiungi 37



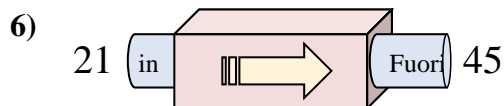
- A. Aggiungi 31
- B. Aggiungi 27
- C. Aggiungi 26
- D. Sottrai 24



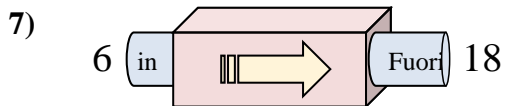
- A. Sottrai 28
- B. Sottrai 31
- C. Aggiungi 26
- D. Aggiungi 30



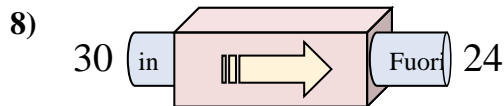
- A. Sottrai 29
- B. Aggiungi 24
- C. Sottrai 25
- D. Aggiungi 22



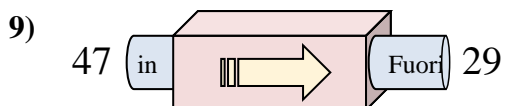
- A. Aggiungi 24
- B. Aggiungi 27
- C. Sottrai 29
- D. Aggiungi 25



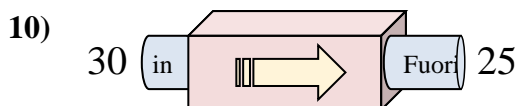
- A. Aggiungi 9
- B. Aggiungi 12
- C. Sottrai 9
- D. Aggiungi 14



- A. Sottrai 6
- B. Aggiungi 5
- C. Sottrai 11
- D. Sottrai 10



- A. Aggiungi 22
- B. Sottrai 18
- C. Sottrai 21
- D. Sottrai 19



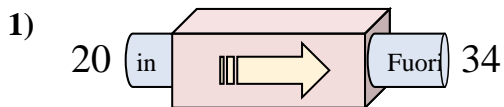
- A. Aggiungi 8
- B. Aggiungi 10
- C. Sottrai 7
- D. Sottrai 5

1. \_\_\_\_\_
2. \_\_\_\_\_
3. \_\_\_\_\_
4. \_\_\_\_\_
5. \_\_\_\_\_
6. \_\_\_\_\_
7. \_\_\_\_\_
8. \_\_\_\_\_
9. \_\_\_\_\_
10. \_\_\_\_\_

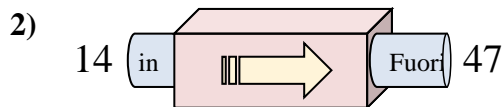


Determina quale regola viene usata nelle seguenti funzioni.

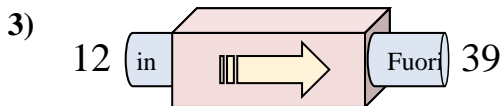
**Risposte**



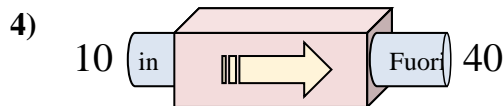
- A. Sottrai 13
- B. Aggiungi 14
- C. Aggiungi 12
- D. Aggiungi 9



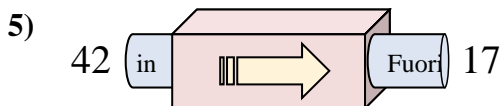
- A. Aggiungi 32
- B. Aggiungi 33
- C. Sottrai 35
- D. Aggiungi 37



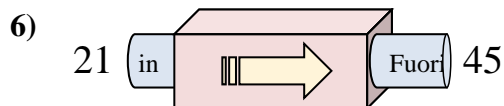
- A. Aggiungi 31
- B. Aggiungi 27
- C. Aggiungi 26
- D. Sottrai 24



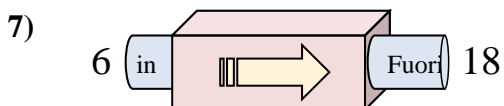
- A. Sottrai 28
- B. Sottrai 31
- C. Aggiungi 26
- D. Aggiungi 30



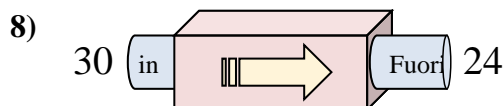
- A. Sottrai 29
- B. Aggiungi 24
- C. Sottrai 25
- D. Aggiungi 22



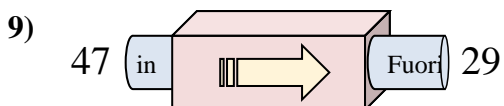
- A. Aggiungi 24
- B. Aggiungi 27
- C. Sottrai 29
- D. Aggiungi 25



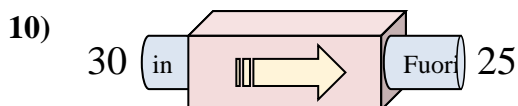
- A. Aggiungi 9
- B. Aggiungi 12
- C. Sottrai 9
- D. Aggiungi 14



- A. Sottrai 6
- B. Aggiungi 5
- C. Sottrai 11
- D. Sottrai 10



- A. Aggiungi 22
- B. Sottrai 18
- C. Sottrai 21
- D. Sottrai 19



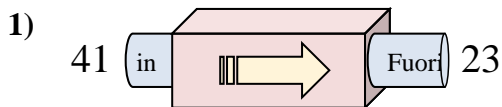
- A. Aggiungi 8
- B. Aggiungi 10
- C. Sottrai 7
- D. Sottrai 5

- 1. **B**
- 2. **B**
- 3. **B**
- 4. **D**
- 5. **C**
- 6. **A**
- 7. **B**
- 8. **A**
- 9. **B**
- 10. **D**

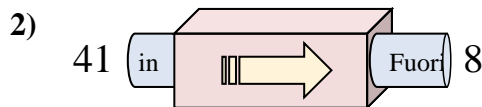


Determina quale regola viene usata nelle seguenti funzioni.

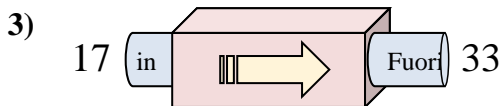
**Risposte**



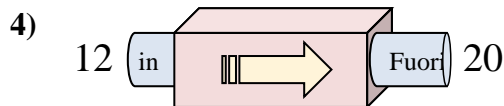
- A. Sottrai 18
- B. Aggiungi 21
- C. Aggiungi 16
- D. Sottrai 16



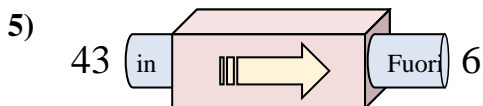
- A. Sottrai 33
- B. Sottrai 29
- C. Aggiungi 31
- D. Sottrai 31



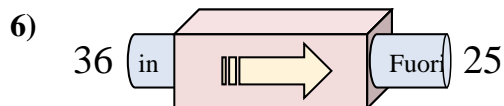
- A. Aggiungi 16
- B. Sottrai 18
- C. Aggiungi 20
- D. Aggiungi 18



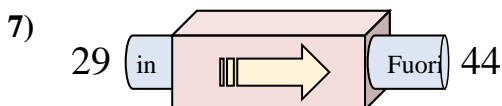
- A. Aggiungi 11
- B. Sottrai 7
- C. Aggiungi 7
- D. Aggiungi 8



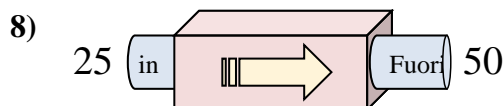
- A. Sottrai 37
- B. Sottrai 38
- C. Sottrai 34
- D. Aggiungi 42



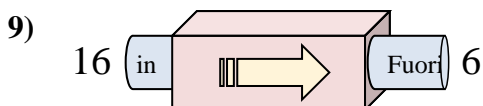
- A. Sottrai 14
- B. Sottrai 15
- C. Aggiungi 8
- D. Sottrai 11



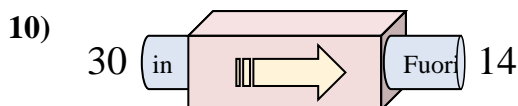
- A. Sottrai 12
- B. Aggiungi 16
- C. Aggiungi 17
- D. Aggiungi 15



- A. Aggiungi 30
- B. Sottrai 30
- C. Aggiungi 25
- D. Aggiungi 26



- A. Sottrai 6
- B. Sottrai 10
- C. Sottrai 15
- D. Sottrai 13



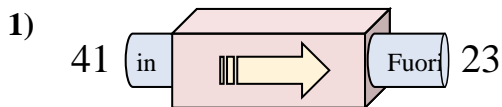
- A. Sottrai 19
- B. Sottrai 12
- C. Sottrai 16
- D. Aggiungi 12

1. \_\_\_\_\_
2. \_\_\_\_\_
3. \_\_\_\_\_
4. \_\_\_\_\_
5. \_\_\_\_\_
6. \_\_\_\_\_
7. \_\_\_\_\_
8. \_\_\_\_\_
9. \_\_\_\_\_
10. \_\_\_\_\_

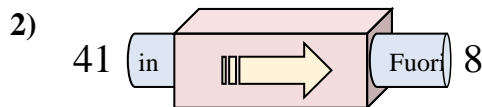


Determina quale regola viene usata nelle seguenti funzioni.

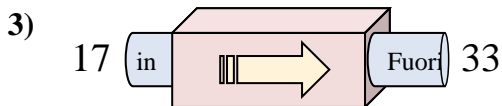
**Risposte**



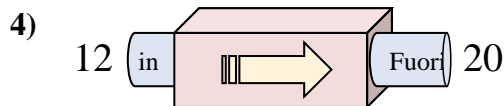
- A. Sottrai 18
- B. Aggiungi 21
- C. Aggiungi 16
- D. Sottrai 16



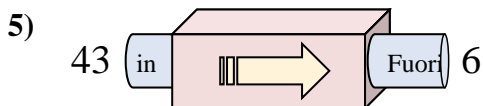
- A. Sottrai 33
- B. Sottrai 29
- C. Aggiungi 31
- D. Sottrai 31



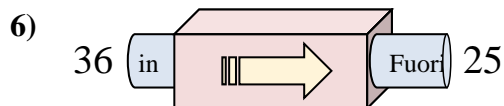
- A. Aggiungi 16
- B. Sottrai 18
- C. Aggiungi 20
- D. Aggiungi 18



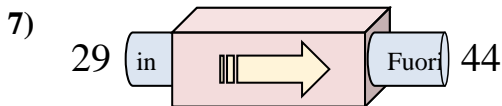
- A. Aggiungi 11
- B. Sottrai 7
- C. Aggiungi 7
- D. Aggiungi 8



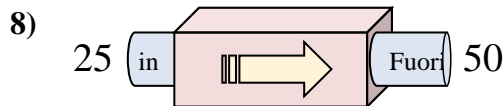
- A. Sottrai 37
- B. Sottrai 38
- C. Sottrai 34
- D. Aggiungi 42



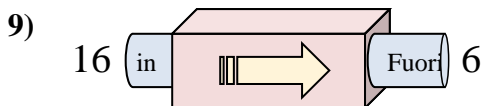
- A. Sottrai 14
- B. Sottrai 15
- C. Aggiungi 8
- D. Sottrai 11



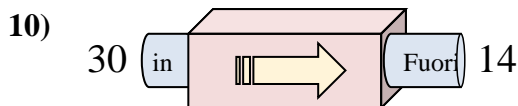
- A. Sottrai 12
- B. Aggiungi 16
- C. Aggiungi 17
- D. Aggiungi 15



- A. Aggiungi 30
- B. Sottrai 30
- C. Aggiungi 25
- D. Aggiungi 26



- A. Sottrai 6
- B. Sottrai 10
- C. Sottrai 15
- D. Sottrai 13



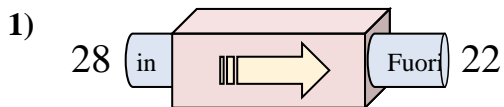
- A. Sottrai 19
- B. Sottrai 12
- C. Sottrai 16
- D. Aggiungi 12

- 1. **A**
- 2. **A**
- 3. **A**
- 4. **D**
- 5. **A**
- 6. **D**
- 7. **D**
- 8. **C**
- 9. **B**
- 10. **C**

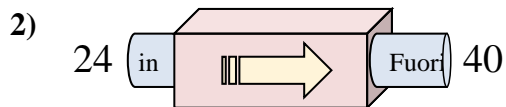


Determina quale regola viene usata nelle seguenti funzioni.

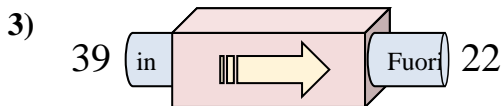
**Risposte**



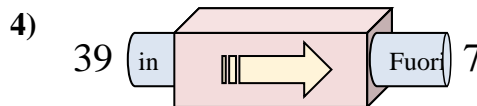
- A. Sottrai 5
- B. Sottrai 11
- C. Sottrai 6
- D. Aggiungi 5



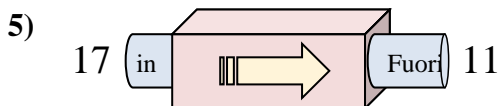
- A. Aggiungi 20
- B. Aggiungi 17
- C. Sottrai 19
- D. Aggiungi 16



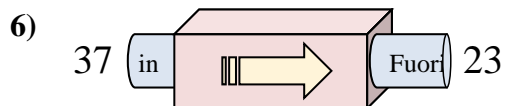
- A. Aggiungi 17
- B. Sottrai 17
- C. Sottrai 20
- D. Sottrai 19



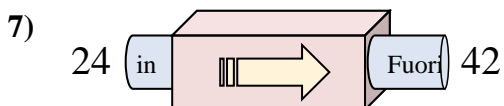
- A. Sottrai 30
- B. Sottrai 35
- C. Sottrai 32
- D. Sottrai 34



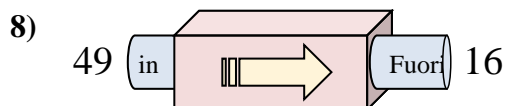
- A. Aggiungi 9
- B. Sottrai 8
- C. Sottrai 6
- D. Sottrai 2



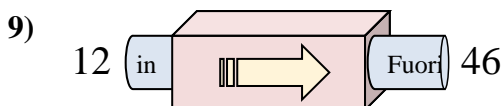
- A. Sottrai 12
- B. Aggiungi 10
- C. Sottrai 14
- D. Sottrai 15



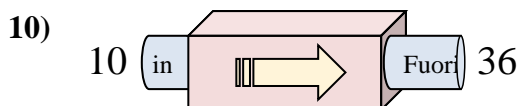
- A. Aggiungi 18
- B. Aggiungi 15
- C. Aggiungi 22
- D. Aggiungi 14



- A. Sottrai 33
- B. Sottrai 32
- C. Aggiungi 32
- D. Aggiungi 30



- A. Aggiungi 37
- B. Aggiungi 32
- C. Aggiungi 34
- D. Aggiungi 38



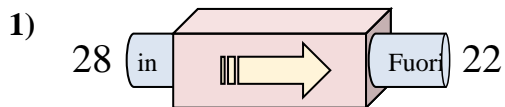
- A. Aggiungi 29
- B. Aggiungi 26
- C. Sottrai 29
- D. Aggiungi 30

1. \_\_\_\_\_
2. \_\_\_\_\_
3. \_\_\_\_\_
4. \_\_\_\_\_
5. \_\_\_\_\_
6. \_\_\_\_\_
7. \_\_\_\_\_
8. \_\_\_\_\_
9. \_\_\_\_\_
10. \_\_\_\_\_

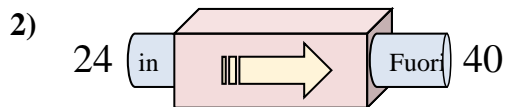


Determina quale regola viene usata nelle seguenti funzioni.

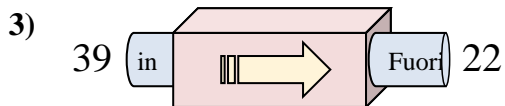
**Risposte**



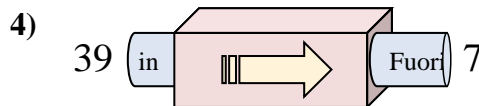
- A. Sottrai 5
- B. Sottrai 11
- C. Sottrai 6
- D. Aggiungi 5



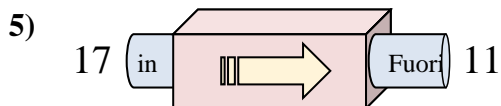
- A. Aggiungi 20
- B. Aggiungi 17
- C. Sottrai 19
- D. Aggiungi 16



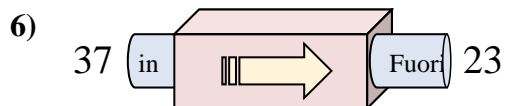
- A. Aggiungi 17
- B. Sottrai 17
- C. Sottrai 20
- D. Sottrai 19



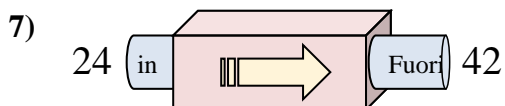
- A. Sottrai 30
- B. Sottrai 35
- C. Sottrai 32
- D. Sottrai 34



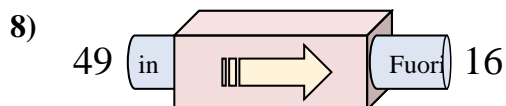
- A. Aggiungi 9
- B. Sottrai 8
- C. Sottrai 6
- D. Sottrai 2



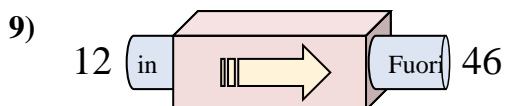
- A. Sottrai 12
- B. Aggiungi 10
- C. Sottrai 14
- D. Sottrai 15



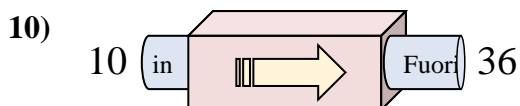
- A. Aggiungi 18
- B. Aggiungi 15
- C. Aggiungi 22
- D. Aggiungi 14



- A. Sottrai 33
- B. Sottrai 32
- C. Aggiungi 32
- D. Aggiungi 30



- A. Aggiungi 37
- B. Aggiungi 32
- C. Aggiungi 34
- D. Aggiungi 38



- A. Aggiungi 29
- B. Aggiungi 26
- C. Sottrai 29
- D. Aggiungi 30

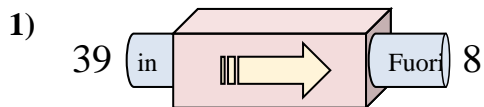
- 1. **C**
- 2. **D**
- 3. **B**
- 4. **C**
- 5. **C**
- 6. **C**
- 7. **A**
- 8. **A**
- 9. **C**
- 10. **B**



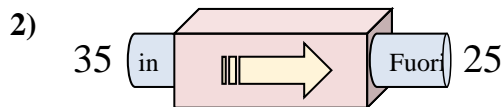


Determina quale regola viene usata nelle seguenti funzioni.

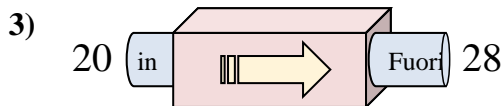
**Risposte**



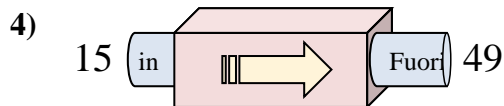
- A. Sottrai 34
- B. Aggiungi 28
- C. Aggiungi 26
- D. Sottrai 31



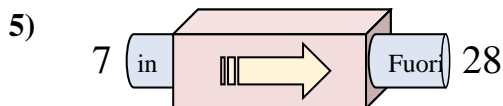
- A. Sottrai 6
- B. Sottrai 14
- C. Sottrai 10
- D. Aggiungi 9



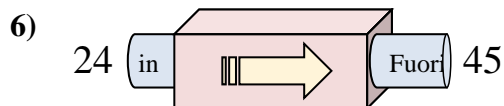
- A. Aggiungi 3
- B. Aggiungi 4
- C. Aggiungi 9
- D. Aggiungi 8



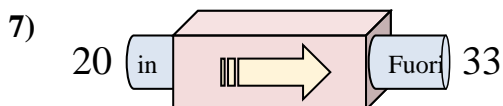
- A. Sottrai 36
- B. Aggiungi 29
- C. Aggiungi 34
- D. Aggiungi 31



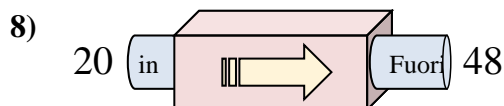
- A. Sottrai 20
- B. Aggiungi 23
- C. Aggiungi 20
- D. Aggiungi 21



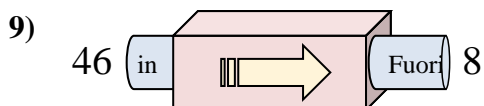
- A. Aggiungi 17
- B. Sottrai 22
- C. Aggiungi 18
- D. Aggiungi 21



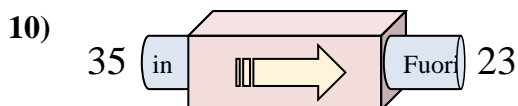
- A. Aggiungi 9
- B. Aggiungi 15
- C. Aggiungi 17
- D. Aggiungi 13



- A. Aggiungi 28
- B. Sottrai 27
- C. Aggiungi 25
- D. Aggiungi 29



- A. Sottrai 42
- B. Sottrai 40
- C. Aggiungi 34
- D. Sottrai 38



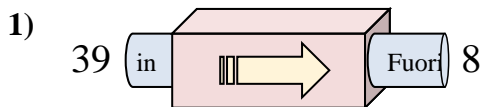
- A. Sottrai 10
- B. Sottrai 12
- C. Aggiungi 17
- D. Aggiungi 8

1. \_\_\_\_\_
2. \_\_\_\_\_
3. \_\_\_\_\_
4. \_\_\_\_\_
5. \_\_\_\_\_
6. \_\_\_\_\_
7. \_\_\_\_\_
8. \_\_\_\_\_
9. \_\_\_\_\_
10. \_\_\_\_\_

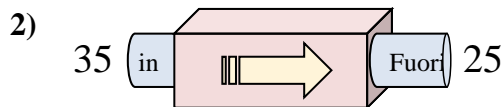


Determina quale regola viene usata nelle seguenti funzioni.

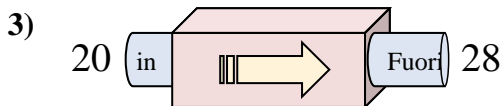
**Risposte**



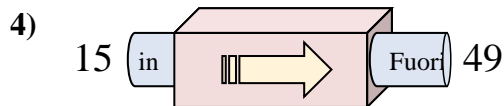
- A. Sottrai 34
- B. Aggiungi 28
- C. Aggiungi 26
- D. Sottrai 31



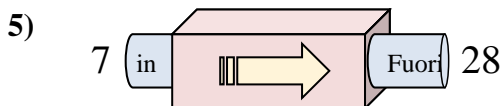
- A. Sottrai 6
- B. Sottrai 14
- C. Sottrai 10
- D. Aggiungi 9



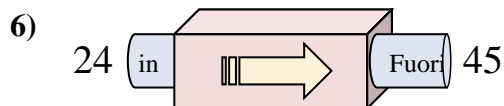
- A. Aggiungi 3
- B. Aggiungi 4
- C. Aggiungi 9
- D. Aggiungi 8



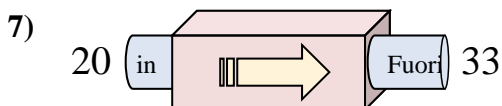
- A. Sottrai 36
- B. Aggiungi 29
- C. Aggiungi 34
- D. Aggiungi 31



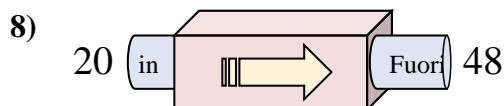
- A. Sottrai 20
- B. Aggiungi 23
- C. Aggiungi 20
- D. Aggiungi 21



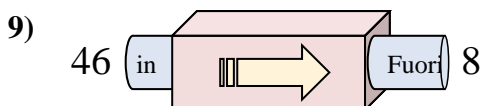
- A. Aggiungi 17
- B. Sottrai 22
- C. Aggiungi 18
- D. Aggiungi 21



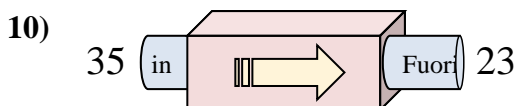
- A. Aggiungi 9
- B. Aggiungi 15
- C. Aggiungi 17
- D. Aggiungi 13



- A. Aggiungi 28
- B. Sottrai 27
- C. Aggiungi 25
- D. Aggiungi 29



- A. Sottrai 42
- B. Sottrai 40
- C. Aggiungi 34
- D. Sottrai 38



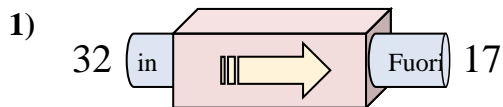
- A. Sottrai 10
- B. Sottrai 12
- C. Aggiungi 17
- D. Aggiungi 8

- 1.   **D**
- 2.   **C**
- 3.   **D**
- 4.   **C**
- 5.   **D**
- 6.   **D**
- 7.   **D**
- 8.   **A**
- 9.   **D**
- 10.   **B**

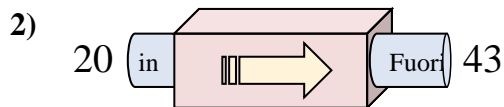


Determina quale regola viene usata nelle seguenti funzioni.

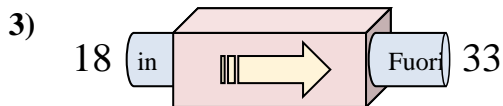
**Risposte**



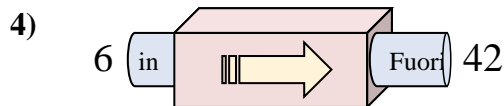
- A. Sottrai 20
- B. Sottrai 14
- C. Aggiungi 12
- D. Sottrai 15



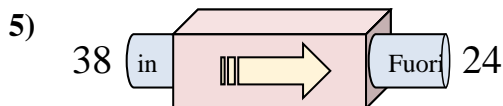
- A. Aggiungi 24
- B. Aggiungi 21
- C. Aggiungi 20
- D. Aggiungi 23



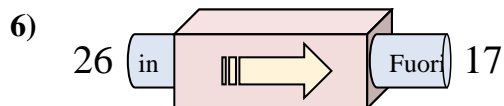
- A. Aggiungi 15
- B. Sottrai 19
- C. Aggiungi 17
- D. Aggiungi 10



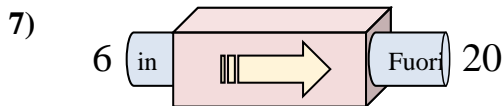
- A. Aggiungi 31
- B. Sottrai 31
- C. Aggiungi 36
- D. Sottrai 40



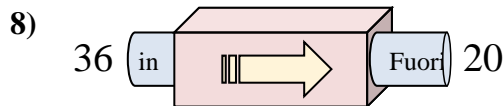
- A. Sottrai 12
- B. Sottrai 14
- C. Sottrai 13
- D. Aggiungi 11



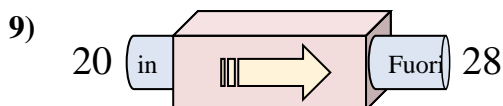
- A. Aggiungi 6
- B. Sottrai 8
- C. Sottrai 9
- D. Sottrai 4



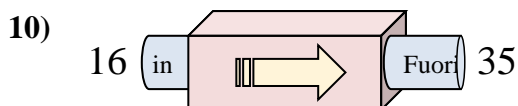
- A. Sottrai 13
- B. Sottrai 14
- C. Aggiungi 18
- D. Aggiungi 14



- A. Sottrai 16
- B. Sottrai 11
- C. Aggiungi 16
- D. Sottrai 13



- A. Aggiungi 5
- B. Aggiungi 8
- C. Sottrai 11
- D. Aggiungi 7



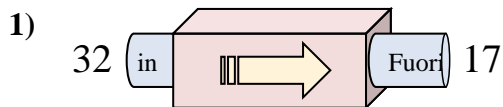
- A. Aggiungi 24
- B. Aggiungi 19
- C. Sottrai 16
- D. Sottrai 24

1. \_\_\_\_\_
2. \_\_\_\_\_
3. \_\_\_\_\_
4. \_\_\_\_\_
5. \_\_\_\_\_
6. \_\_\_\_\_
7. \_\_\_\_\_
8. \_\_\_\_\_
9. \_\_\_\_\_
10. \_\_\_\_\_

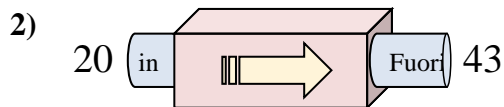


Determina quale regola viene usata nelle seguenti funzioni.

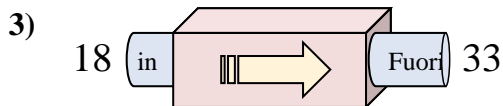
**Risposte**



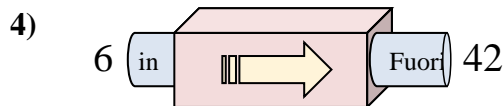
- A. Sottrai 20
- B. Sottrai 14
- C. Aggiungi 12
- D. Sottrai 15



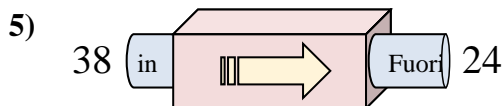
- A. Aggiungi 24
- B. Aggiungi 21
- C. Aggiungi 20
- D. Aggiungi 23



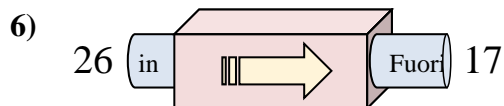
- A. Aggiungi 15
- B. Sottrai 19
- C. Aggiungi 17
- D. Aggiungi 10



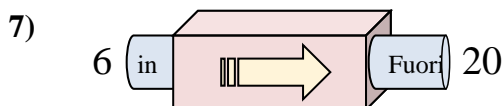
- A. Aggiungi 31
- B. Sottrai 31
- C. Aggiungi 36
- D. Sottrai 40



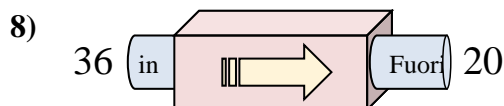
- A. Sottrai 12
- B. Sottrai 14
- C. Sottrai 13
- D. Aggiungi 11



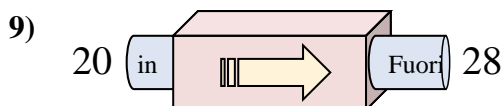
- A. Aggiungi 6
- B. Sottrai 8
- C. Sottrai 9
- D. Sottrai 4



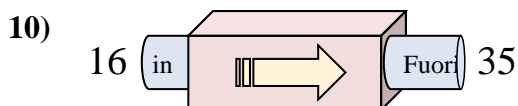
- A. Sottrai 13
- B. Sottrai 14
- C. Aggiungi 18
- D. Aggiungi 14



- A. Sottrai 16
- B. Sottrai 11
- C. Aggiungi 16
- D. Sottrai 13



- A. Aggiungi 5
- B. Aggiungi 8
- C. Sottrai 11
- D. Aggiungi 7

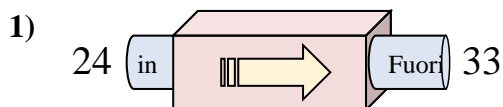


- A. Aggiungi 24
- B. Aggiungi 19
- C. Sottrai 16
- D. Sottrai 24

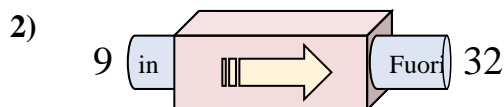
- 1. **D**
- 2. **D**
- 3. **A**
- 4. **C**
- 5. **B**
- 6. **C**
- 7. **D**
- 8. **A**
- 9. **B**
- 10. **B**



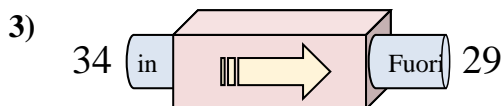
Determina quale regola viene usata nelle seguenti funzioni.

**Risposte**

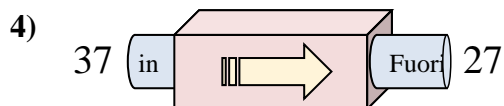
- A. Aggiungi 12
- B. Sottrai 8
- C. Aggiungi 13
- D. Aggiungi 9



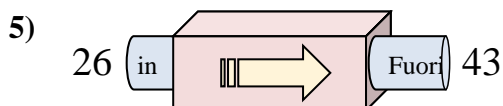
- A. Aggiungi 25
- B. Aggiungi 23
- C. Aggiungi 26
- D. Sottrai 19



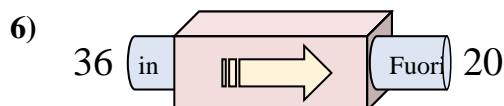
- A. Aggiungi 7
- B. Sottrai 5
- C. Sottrai 6
- D. Aggiungi 3



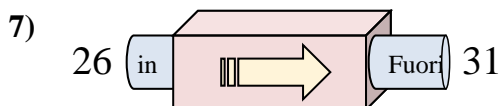
- A. Aggiungi 13
- B. Sottrai 10
- C. Sottrai 15
- D. Sottrai 13



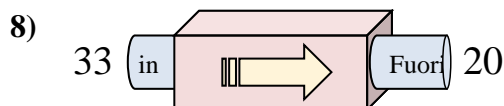
- A. Aggiungi 14
- B. Sottrai 22
- C. Aggiungi 15
- D. Aggiungi 17



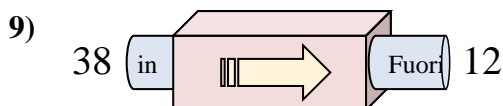
- A. Sottrai 16
- B. Aggiungi 19
- C. Aggiungi 21
- D. Sottrai 17



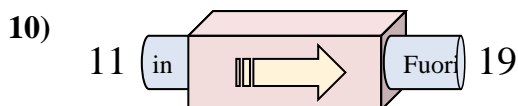
- A. Aggiungi 5
- B. Sottrai 7
- C. Aggiungi 7
- D. Sottrai 4



- A. Sottrai 16
- B. Aggiungi 16
- C. Sottrai 8
- D. Sottrai 13



- A. Sottrai 29
- B. Sottrai 30
- C. Sottrai 26
- D. Aggiungi 21



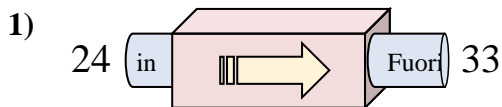
- A. Aggiungi 8
- B. Aggiungi 9
- C. Sottrai 13
- D. Aggiungi 5

- 1. \_\_\_\_\_
- 2. \_\_\_\_\_
- 3. \_\_\_\_\_
- 4. \_\_\_\_\_
- 5. \_\_\_\_\_
- 6. \_\_\_\_\_
- 7. \_\_\_\_\_
- 8. \_\_\_\_\_
- 9. \_\_\_\_\_
- 10. \_\_\_\_\_

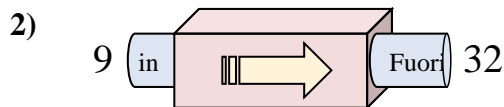


Determina quale regola viene usata nelle seguenti funzioni.

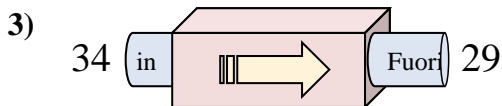
**Risposte**



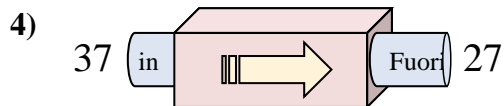
- A. Aggiungi 12
- B. Sottrai 8
- C. Aggiungi 13
- D. Aggiungi 9



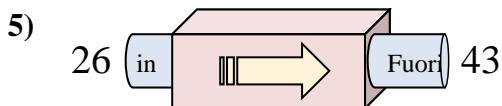
- A. Aggiungi 25
- B. Aggiungi 23
- C. Aggiungi 26
- D. Sottrai 19



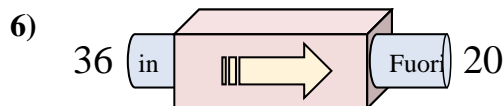
- A. Aggiungi 7
- B. Sottrai 5
- C. Sottrai 6
- D. Aggiungi 3



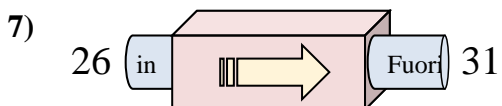
- A. Aggiungi 13
- B. Sottrai 10
- C. Sottrai 15
- D. Sottrai 13



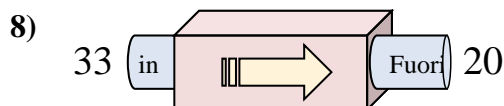
- A. Aggiungi 14
- B. Sottrai 22
- C. Aggiungi 15
- D. Aggiungi 17



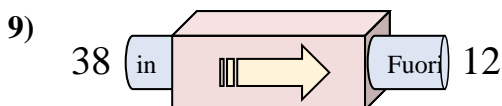
- A. Sottrai 16
- B. Aggiungi 19
- C. Aggiungi 21
- D. Sottrai 17



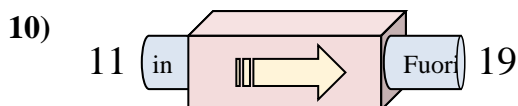
- A. Aggiungi 5
- B. Sottrai 7
- C. Aggiungi 7
- D. Sottrai 4



- A. Sottrai 16
- B. Aggiungi 16
- C. Sottrai 8
- D. Sottrai 13



- A. Sottrai 29
- B. Sottrai 30
- C. Sottrai 26
- D. Aggiungi 21

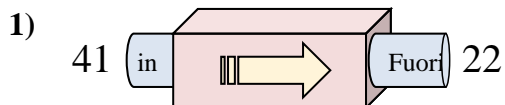


- A. Aggiungi 8
- B. Aggiungi 9
- C. Sottrai 13
- D. Aggiungi 5

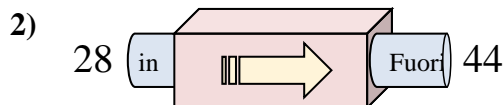
- 1. **D**
- 2. **B**
- 3. **B**
- 4. **B**
- 5. **D**
- 6. **A**
- 7. **A**
- 8. **D**
- 9. **C**
- 10. **A**



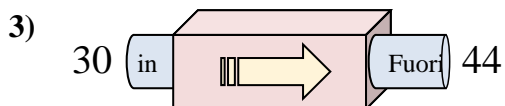
Determina quale regola viene usata nelle seguenti funzioni.

**Risposte**

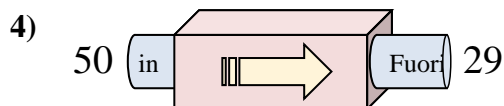
- A. Sottrai 19
- B. Aggiungi 16
- C. Sottrai 24
- D. Aggiungi 24



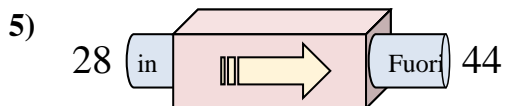
- A. Aggiungi 16
- B. Aggiungi 18
- C. Sottrai 16
- D. Aggiungi 21



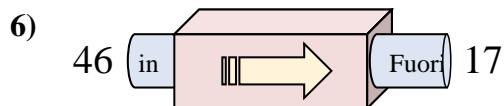
- A. Aggiungi 12
- B. Aggiungi 17
- C. Sottrai 18
- D. Aggiungi 14



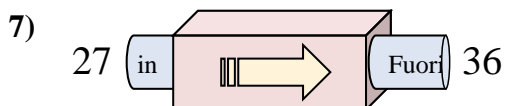
- A. Aggiungi 23
- B. Sottrai 21
- C. Aggiungi 24
- D. Sottrai 23



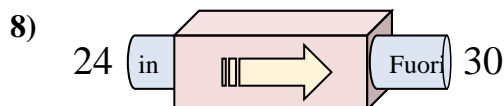
- A. Aggiungi 12
- B. Aggiungi 19
- C. Aggiungi 16
- D. Aggiungi 21



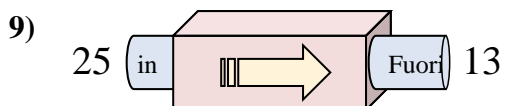
- A. Sottrai 25
- B. Sottrai 29
- C. Aggiungi 31
- D. Aggiungi 34



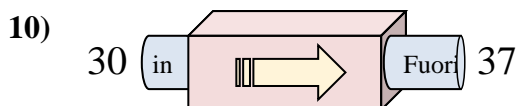
- A. Aggiungi 7
- B. Aggiungi 6
- C. Aggiungi 9
- D. Sottrai 13



- A. Sottrai 7
- B. Aggiungi 2
- C. Aggiungi 6
- D. Aggiungi 10



- A. Aggiungi 12
- B. Sottrai 8
- C. Aggiungi 11
- D. Sottrai 12



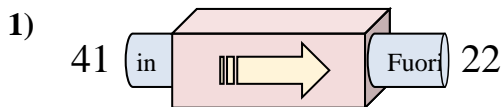
- A. Aggiungi 7
- B. Aggiungi 9
- C. Aggiungi 3
- D. Sottrai 3

1. \_\_\_\_\_
2. \_\_\_\_\_
3. \_\_\_\_\_
4. \_\_\_\_\_
5. \_\_\_\_\_
6. \_\_\_\_\_
7. \_\_\_\_\_
8. \_\_\_\_\_
9. \_\_\_\_\_
10. \_\_\_\_\_

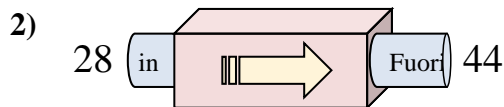


Determina quale regola viene usata nelle seguenti funzioni.

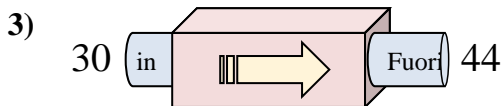
**Risposte**



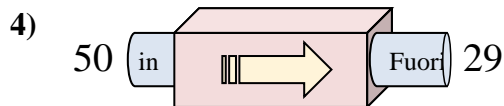
- A. Sottrai 19
- B. Aggiungi 16
- C. Sottrai 24
- D. Aggiungi 24



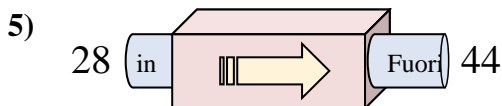
- A. Aggiungi 16
- B. Aggiungi 18
- C. Sottrai 16
- D. Aggiungi 21



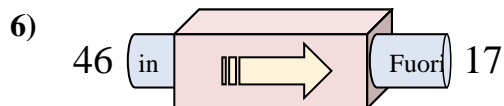
- A. Aggiungi 12
- B. Aggiungi 17
- C. Sottrai 18
- D. Aggiungi 14



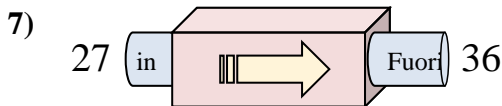
- A. Aggiungi 23
- B. Sottrai 21
- C. Aggiungi 24
- D. Sottrai 23



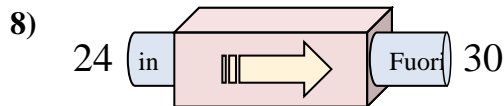
- A. Aggiungi 12
- B. Aggiungi 19
- C. Aggiungi 16
- D. Aggiungi 21



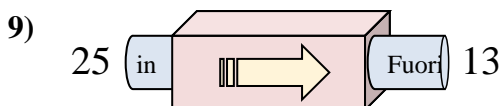
- A. Sottrai 25
- B. Sottrai 29
- C. Aggiungi 31
- D. Aggiungi 34



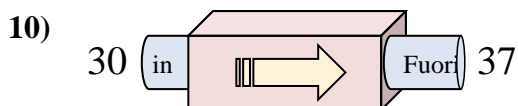
- A. Aggiungi 7
- B. Aggiungi 6
- C. Aggiungi 9
- D. Sottrai 13



- A. Sottrai 7
- B. Aggiungi 2
- C. Aggiungi 6
- D. Aggiungi 10



- A. Aggiungi 12
- B. Sottrai 8
- C. Aggiungi 11
- D. Sottrai 12



- A. Aggiungi 7
- B. Aggiungi 9
- C. Aggiungi 3
- D. Sottrai 3

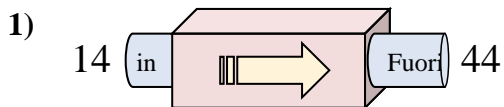
- 1. **A**
- 2. **A**
- 3. **D**
- 4. **B**
- 5. **C**
- 6. **B**
- 7. **C**
- 8. **C**
- 9. **D**
- 10. **A**



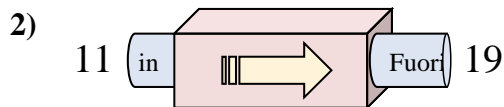


Determina quale regola viene usata nelle seguenti funzioni.

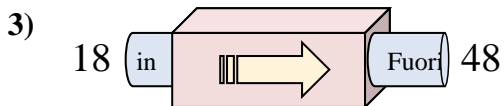
**Risposte**



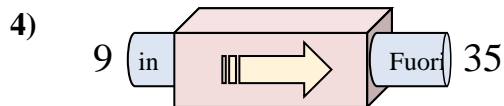
- A. Aggiungi 27
- B. Aggiungi 30
- C. Aggiungi 25
- D. Sottrai 32



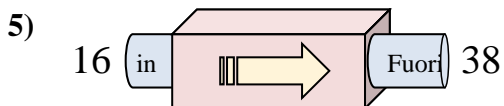
- A. Aggiungi 8
- B. Aggiungi 6
- C. Sottrai 3
- D. Aggiungi 4



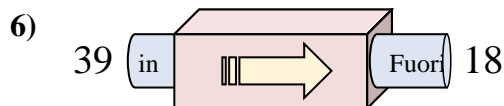
- A. Sottrai 25
- B. Aggiungi 30
- C. Aggiungi 29
- D. Aggiungi 34



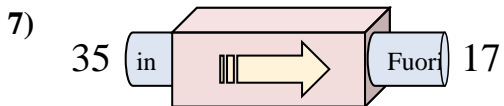
- A. Aggiungi 28
- B. Aggiungi 26
- C. Sottrai 30
- D. Sottrai 22



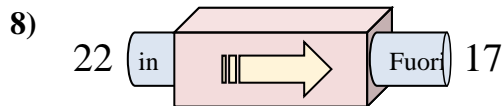
- A. Aggiungi 22
- B. Aggiungi 27
- C. Aggiungi 24
- D. Sottrai 17



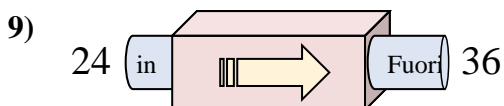
- A. Sottrai 20
- B. Sottrai 23
- C. Sottrai 16
- D. Sottrai 21



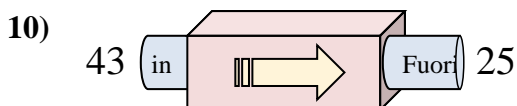
- A. Sottrai 17
- B. Aggiungi 21
- C. Sottrai 14
- D. Sottrai 18



- A. Sottrai 10
- B. Aggiungi 2
- C. Sottrai 6
- D. Sottrai 5



- A. Sottrai 17
- B. Sottrai 12
- C. Aggiungi 12
- D. Aggiungi 9



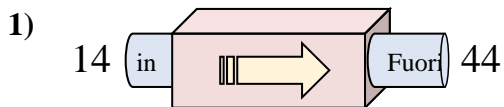
- A. Aggiungi 15
- B. Sottrai 16
- C. Aggiungi 13
- D. Sottrai 18

1. \_\_\_\_\_
2. \_\_\_\_\_
3. \_\_\_\_\_
4. \_\_\_\_\_
5. \_\_\_\_\_
6. \_\_\_\_\_
7. \_\_\_\_\_
8. \_\_\_\_\_
9. \_\_\_\_\_
10. \_\_\_\_\_

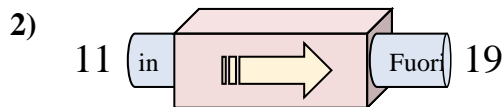


Determina quale regola viene usata nelle seguenti funzioni.

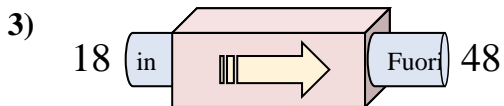
**Risposte**



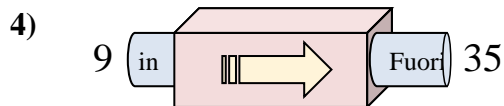
- A. Aggiungi 27
- B. Aggiungi 30
- C. Aggiungi 25
- D. Sottrai 32



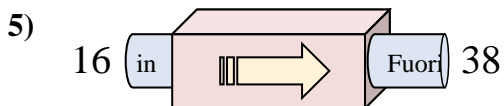
- A. Aggiungi 8
- B. Aggiungi 6
- C. Sottrai 3
- D. Aggiungi 4



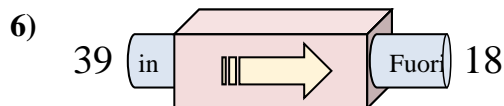
- A. Sottrai 25
- B. Aggiungi 30
- C. Aggiungi 29
- D. Aggiungi 34



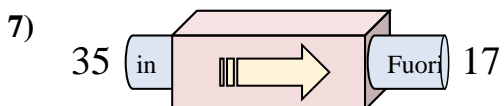
- A. Aggiungi 28
- B. Aggiungi 26
- C. Sottrai 30
- D. Sottrai 22



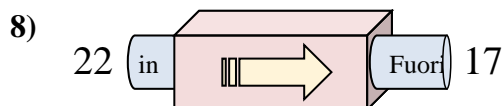
- A. Aggiungi 22
- B. Aggiungi 27
- C. Aggiungi 24
- D. Sottrai 17



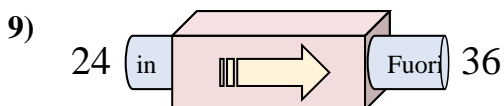
- A. Sottrai 20
- B. Sottrai 23
- C. Sottrai 16
- D. Sottrai 21



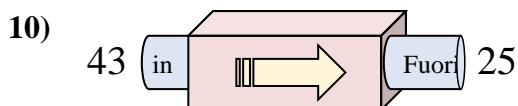
- A. Sottrai 17
- B. Aggiungi 21
- C. Sottrai 14
- D. Sottrai 18



- A. Sottrai 10
- B. Aggiungi 2
- C. Sottrai 6
- D. Sottrai 5



- A. Sottrai 17
- B. Sottrai 12
- C. Aggiungi 12
- D. Aggiungi 9



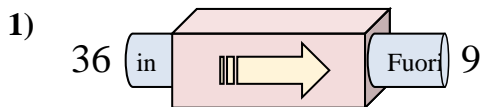
- A. Aggiungi 15
- B. Sottrai 16
- C. Aggiungi 13
- D. Sottrai 18

- 1. **B**
- 2. **A**
- 3. **B**
- 4. **B**
- 5. **A**
- 6. **D**
- 7. **D**
- 8. **D**
- 9. **C**
- 10. **D**

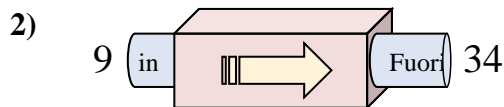


Determina quale regola viene usata nelle seguenti funzioni.

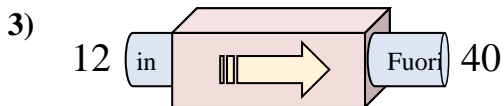
**Risposte**



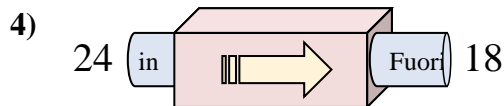
- A. Aggiungi 30
- B. Sottrai 32
- C. Sottrai 31
- D. Sottrai 27



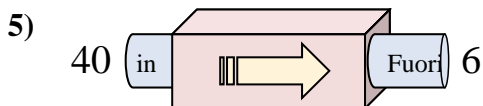
- A. Aggiungi 23
- B. Sottrai 29
- C. Sottrai 21
- D. Aggiungi 25



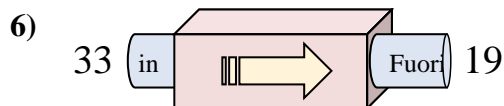
- A. Sottrai 30
- B. Aggiungi 33
- C. Aggiungi 29
- D. Aggiungi 28



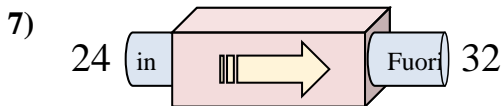
- A. Aggiungi 4
- B. Sottrai 2
- C. Sottrai 6
- D. Sottrai 5



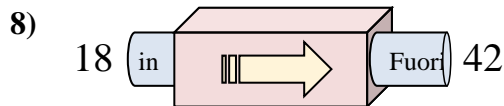
- A. Aggiungi 29
- B. Sottrai 39
- C. Sottrai 34
- D. Aggiungi 30



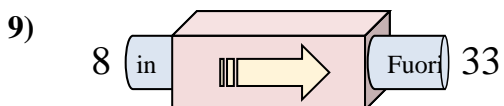
- A. Aggiungi 16
- B. Sottrai 17
- C. Sottrai 14
- D. Sottrai 9



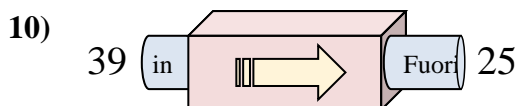
- A. Aggiungi 11
- B. Aggiungi 8
- C. Sottrai 12
- D. Aggiungi 12



- A. Aggiungi 24
- B. Aggiungi 23
- C. Sottrai 23
- D. Aggiungi 21



- A. Aggiungi 25
- B. Sottrai 24
- C. Sottrai 26
- D. Aggiungi 27



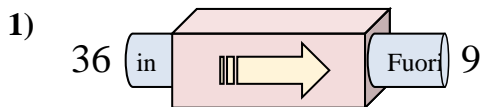
- A. Aggiungi 9
- B. Aggiungi 14
- C. Sottrai 10
- D. Sottrai 14

1. \_\_\_\_\_
2. \_\_\_\_\_
3. \_\_\_\_\_
4. \_\_\_\_\_
5. \_\_\_\_\_
6. \_\_\_\_\_
7. \_\_\_\_\_
8. \_\_\_\_\_
9. \_\_\_\_\_
10. \_\_\_\_\_

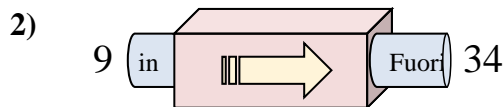


Determina quale regola viene usata nelle seguenti funzioni.

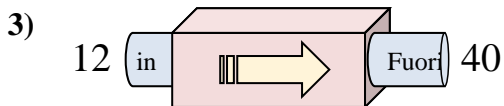
**Risposte**



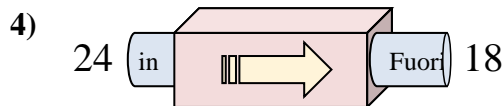
- A. Aggiungi 30
- B. Sottrai 32
- C. Sottrai 31
- D. Sottrai 27



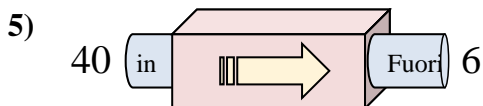
- A. Aggiungi 23
- B. Sottrai 29
- C. Sottrai 21
- D. Aggiungi 25



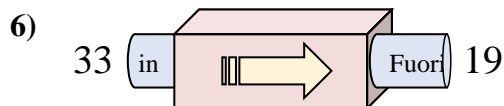
- A. Sottrai 30
- B. Aggiungi 33
- C. Aggiungi 29
- D. Aggiungi 28



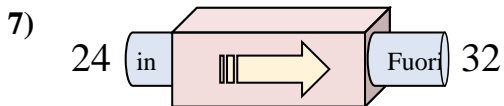
- A. Aggiungi 4
- B. Sottrai 2
- C. Sottrai 6
- D. Sottrai 5



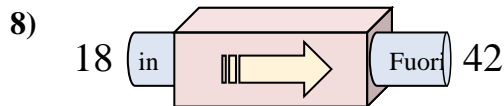
- A. Aggiungi 29
- B. Sottrai 39
- C. Sottrai 34
- D. Aggiungi 30



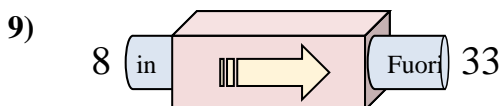
- A. Aggiungi 16
- B. Sottrai 17
- C. Sottrai 14
- D. Sottrai 9



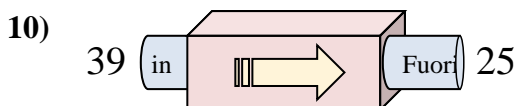
- A. Aggiungi 11
- B. Aggiungi 8
- C. Sottrai 12
- D. Aggiungi 12



- A. Aggiungi 24
- B. Aggiungi 23
- C. Sottrai 23
- D. Aggiungi 21



- A. Aggiungi 25
- B. Sottrai 24
- C. Sottrai 26
- D. Aggiungi 27



- A. Aggiungi 9
- B. Aggiungi 14
- C. Sottrai 10
- D. Sottrai 14

- 1. **D**
- 2. **D**
- 3. **D**
- 4. **C**
- 5. **C**
- 6. **C**
- 7. **B**
- 8. **A**
- 9. **A**
- 10. **D**