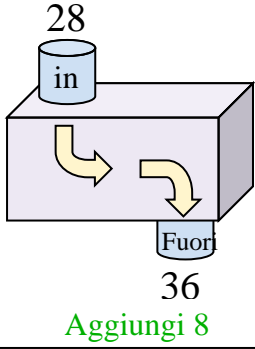


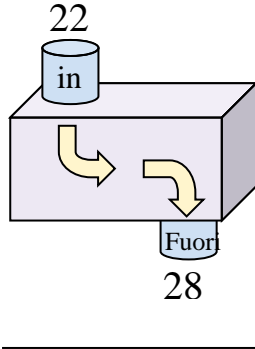


Determina quale regola viene usata nelle seguenti funzioni.

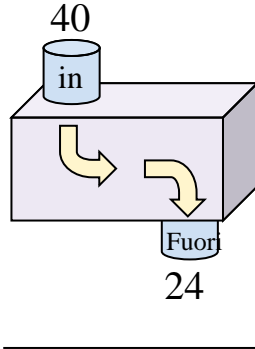
Es)



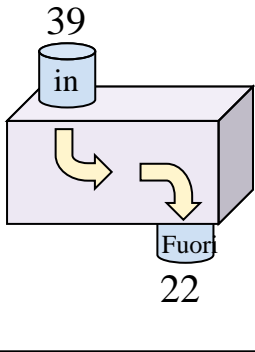
1)



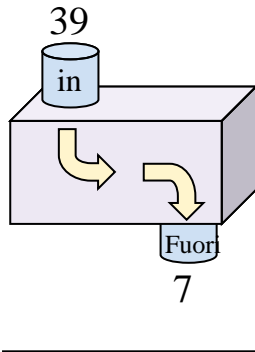
2)



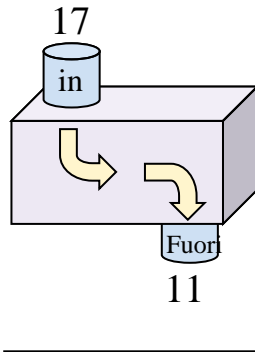
3)



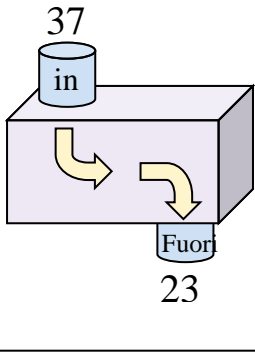
4)



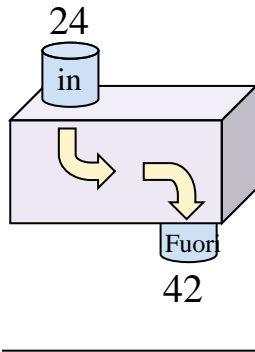
5)



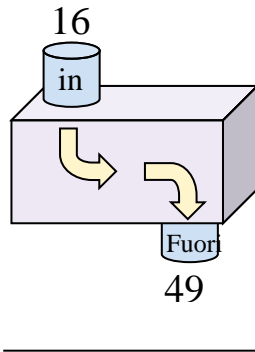
6)



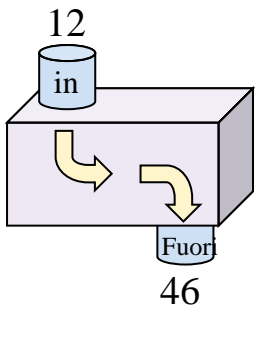
7)



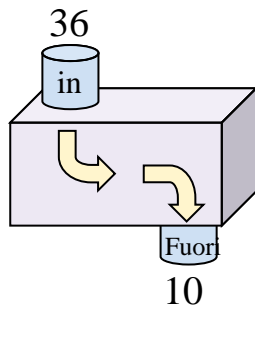
8)



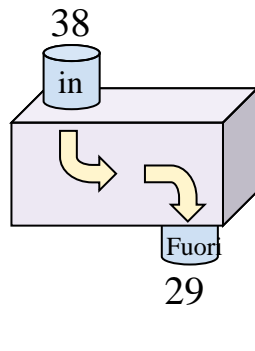
9)



10)



11)



**Risposte**

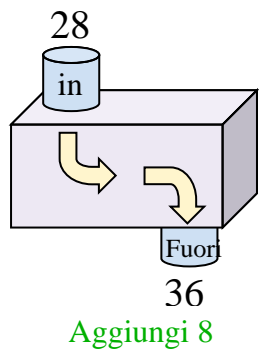
Es. **Aggiungi 8**

1. \_\_\_\_\_
2. \_\_\_\_\_
3. \_\_\_\_\_
4. \_\_\_\_\_
5. \_\_\_\_\_
6. \_\_\_\_\_
7. \_\_\_\_\_
8. \_\_\_\_\_
9. \_\_\_\_\_
10. \_\_\_\_\_
11. \_\_\_\_\_

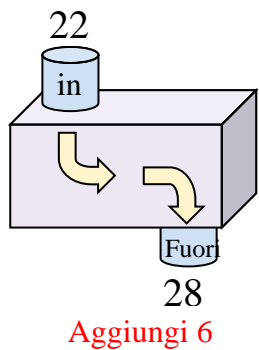


Determina quale regola viene usata nelle seguenti funzioni.

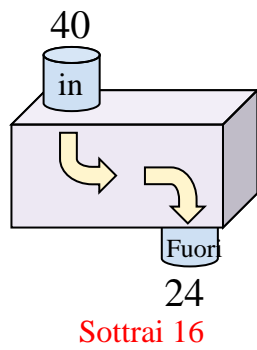
Es)



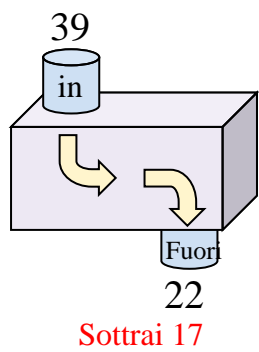
1)



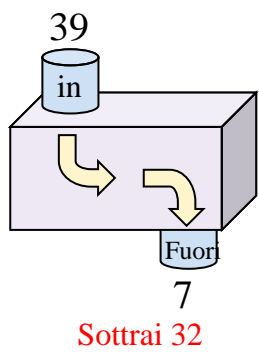
2)



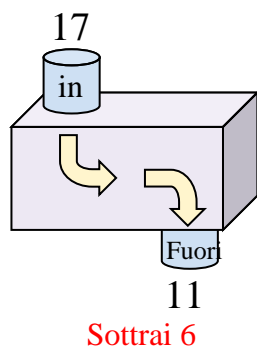
3)



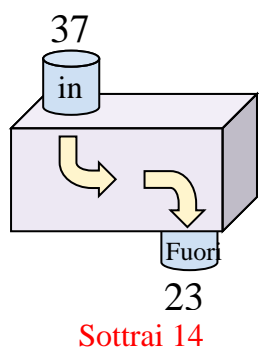
4)



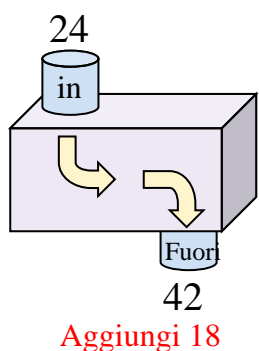
5)



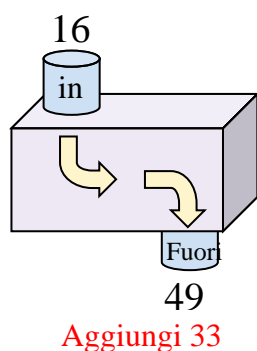
6)



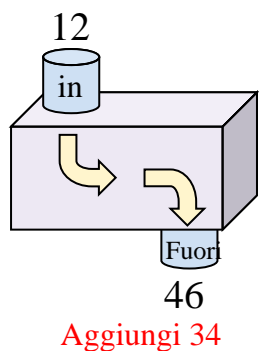
7)



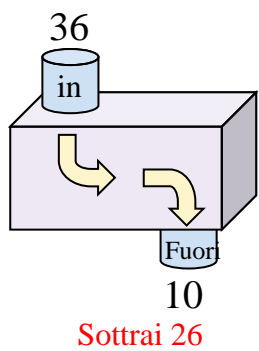
8)



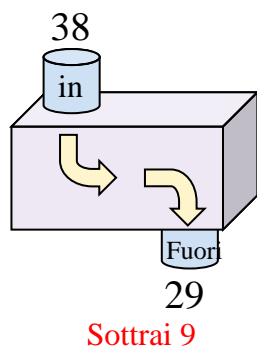
9)



10)



11)



**Risposte**

Es. **Aggiungi 8**

1. **Aggiungi 6**

2. **Sottrai 16**

3. **Sottrai 17**

4. **Sottrai 32**

5. **Sottrai 6**

6. **Sottrai 14**

7. **Aggiungi 18**

8. **Aggiungi 33**

9. **Aggiungi 34**

10. **Sottrai 26**

11. **Sottrai 9**