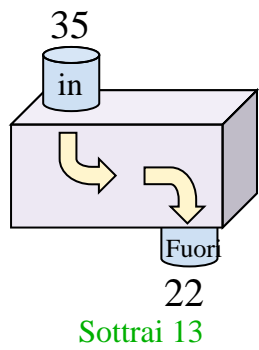


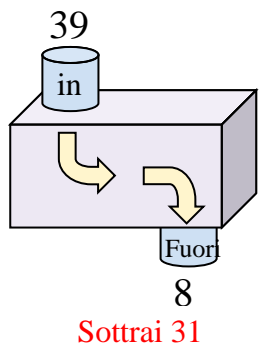


Determina quale regola viene usata nelle seguenti funzioni.

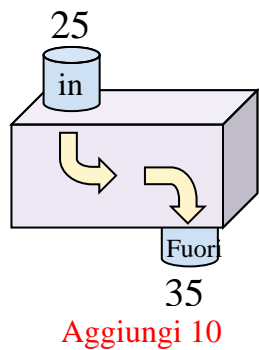
Es)



1)



2)



Es.

Sottrai 13

1.

Sottrai 31

2.

Aggiungi 10

3.

Aggiungi 8

4.

Aggiungi 34

5.

Aggiungi 21

6.

Sottrai 21

7.

Sottrai 13

8.

Sottrai 28

9.

Aggiungi 38

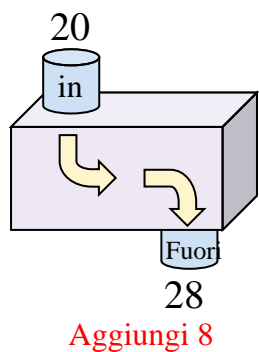
10.

Aggiungi 12

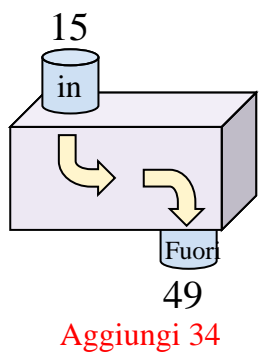
11.

Aggiungi 6

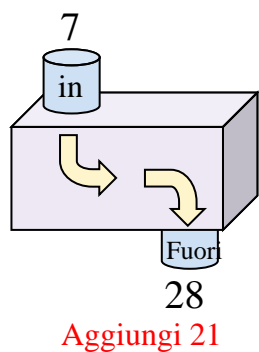
3)



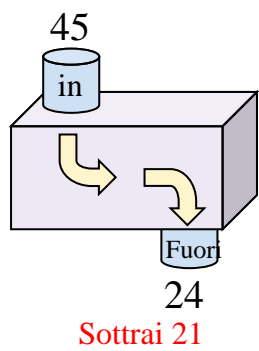
4)



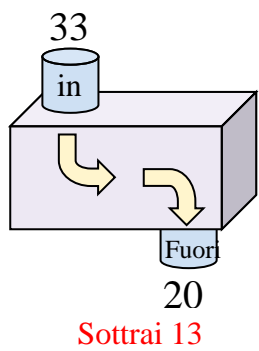
5)



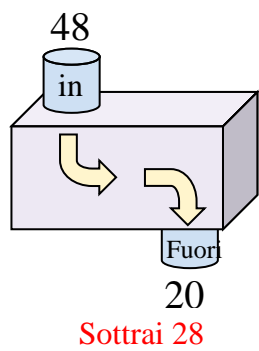
6)



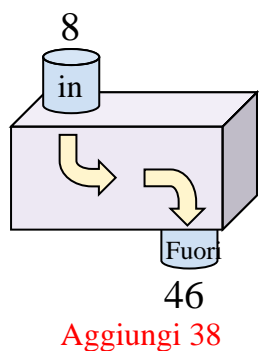
7)



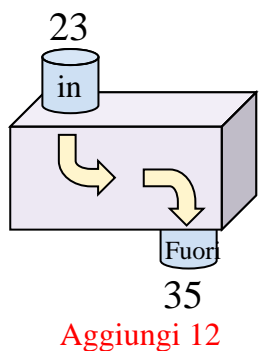
8)



9)



10)



11)

