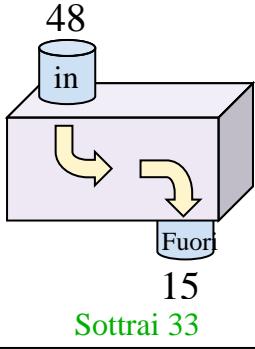


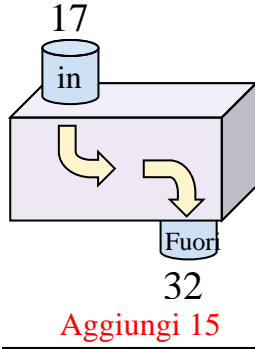


Determina quale regola viene usata nelle seguenti funzioni.

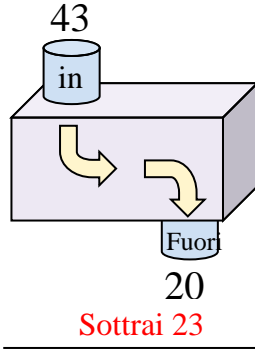
Es)



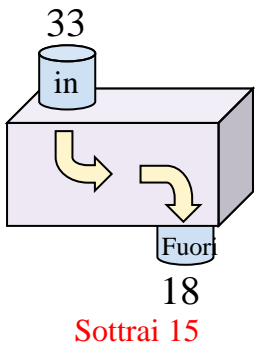
1)



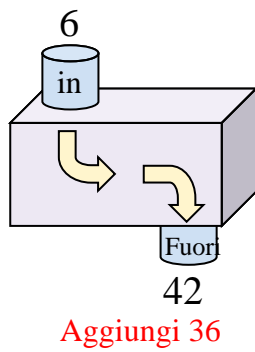
2)



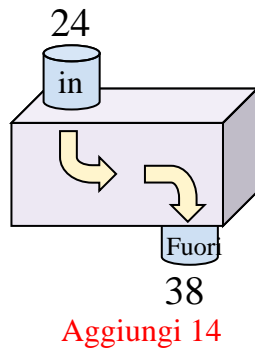
3)



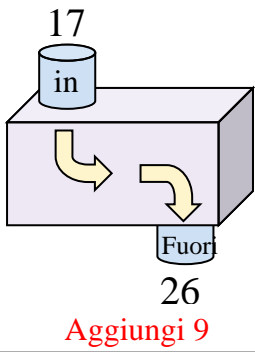
4)



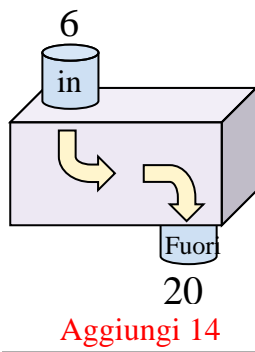
5)



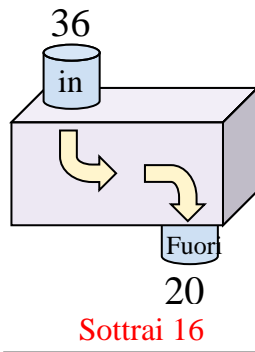
6)



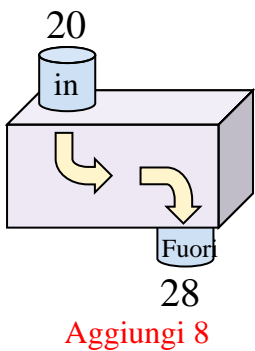
7)



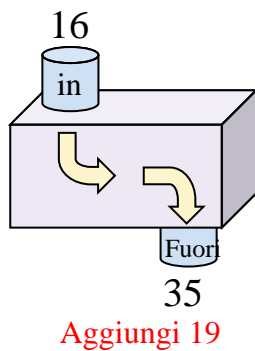
8)



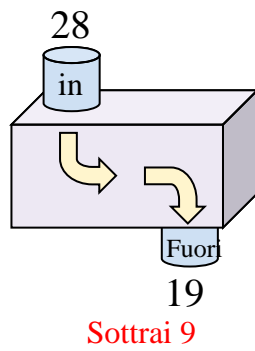
9)



10)



11)



Risposte

Es. **Sottrai 33**

1. **Aggiungi 15**

2. **Sottrai 23**

3. **Sottrai 15**

4. **Aggiungi 36**

5. **Aggiungi 14**

6. **Aggiungi 9**

7. **Aggiungi 14**

8. **Sottrai 16**

9. **Aggiungi 8**

10. **Aggiungi 19**

11. **Sottrai 9**