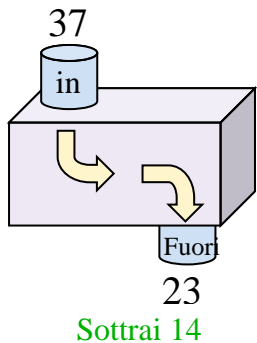


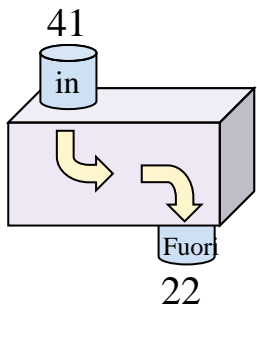


Determina quale regola viene usata nelle seguenti funzioni.

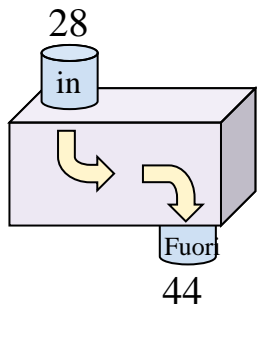
Es)



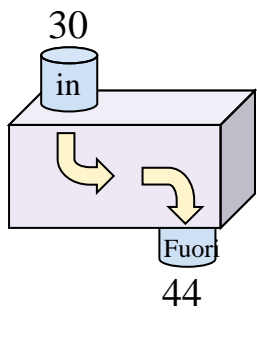
1)



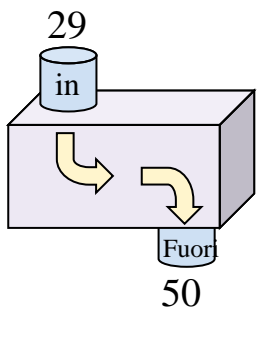
2)



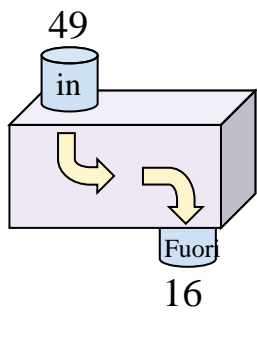
3)



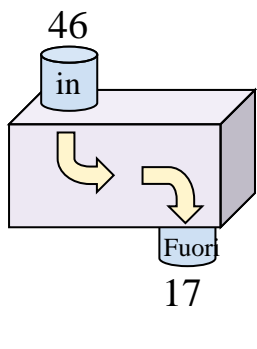
4)



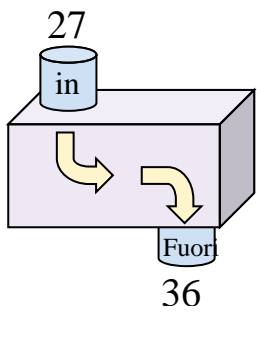
5)



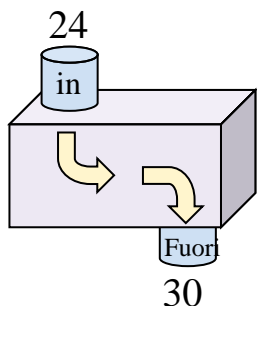
6)



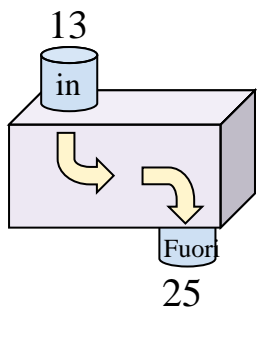
7)



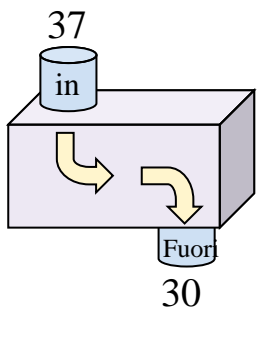
8)



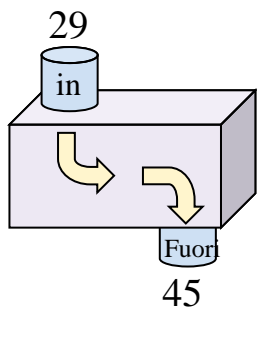
9)



10)



11)



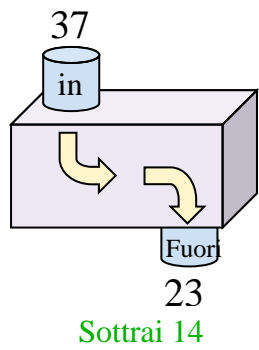
**Risposte**

- Es. **Sottrai 14**
1. \_\_\_\_\_
2. \_\_\_\_\_
3. \_\_\_\_\_
4. \_\_\_\_\_
5. \_\_\_\_\_
6. \_\_\_\_\_
7. \_\_\_\_\_
8. \_\_\_\_\_
9. \_\_\_\_\_
10. \_\_\_\_\_
11. \_\_\_\_\_

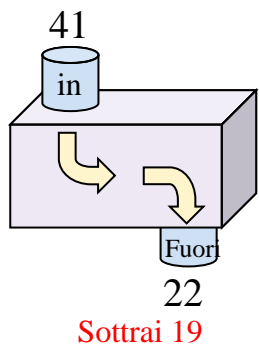


Determina quale regola viene usata nelle seguenti funzioni.

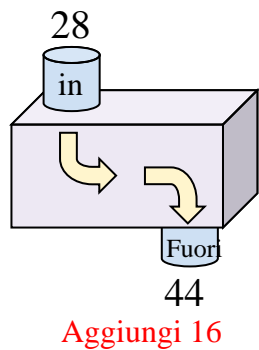
Es)



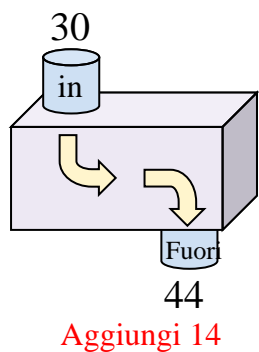
1)



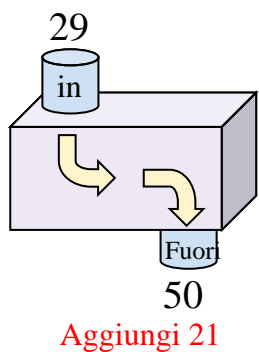
2)



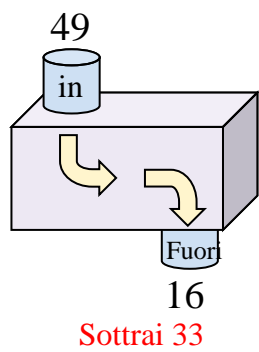
3)



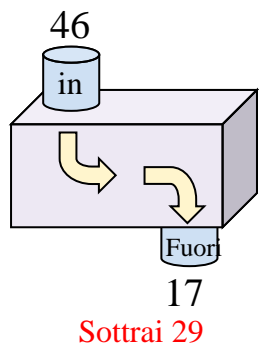
4)



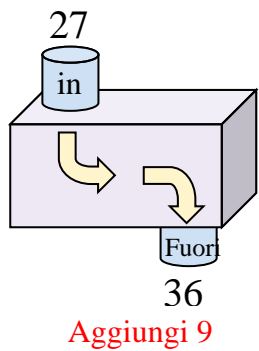
5)



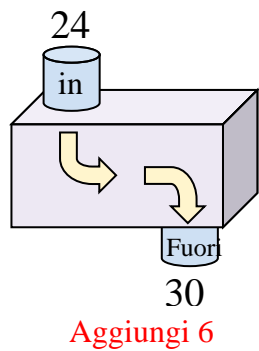
6)



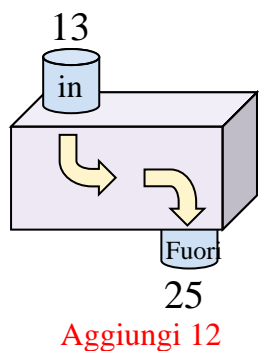
7)



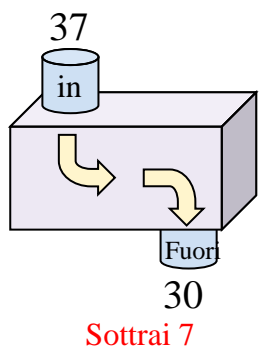
8)



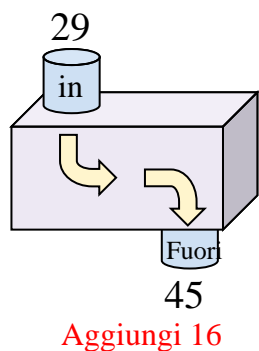
9)



10)



11)



**Risposte**

Es. **Sottrai 14**

1. **Sottrai 19**

2. **Aggiungi 16**

3. **Aggiungi 14**

4. **Aggiungi 21**

5. **Sottrai 33**

6. **Sottrai 29**

7. **Aggiungi 9**

8. **Aggiungi 6**

9. **Aggiungi 12**

10. **Sottrai 7**

11. **Aggiungi 16**