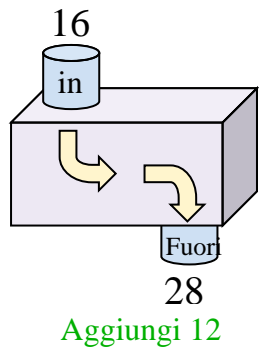


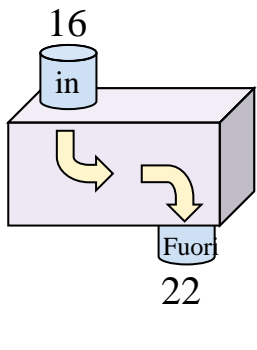


Determina quale regola viene usata nelle seguenti funzioni.

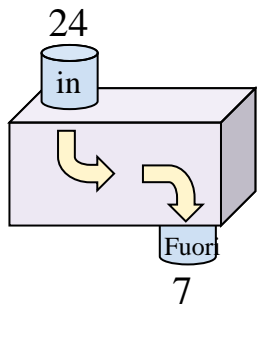
Es)



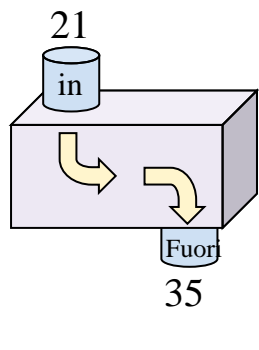
1)



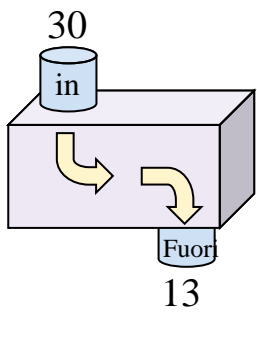
2)



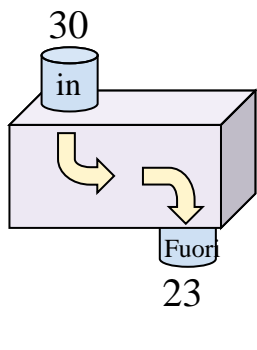
3)



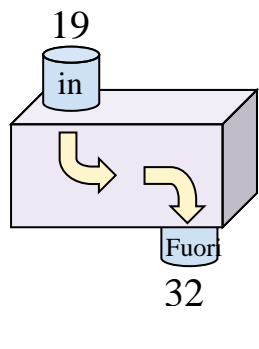
4)



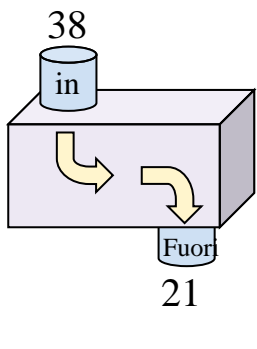
5)



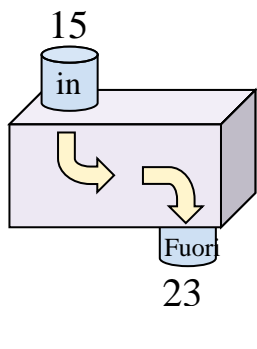
6)



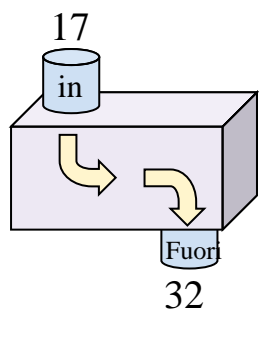
7)



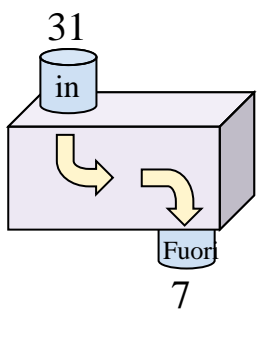
8)



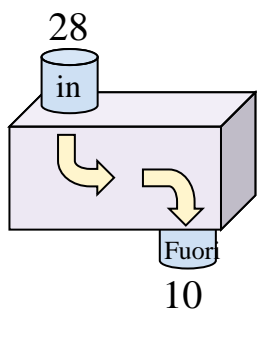
9)



10)



11)



Risposte

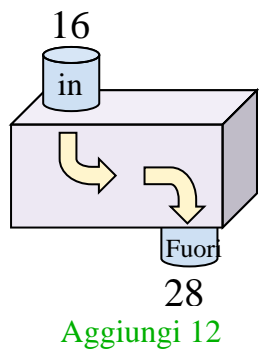
Es. **Aggiungi 12**

- 1. _____
- 2. _____
- 3. _____
- 4. _____
- 5. _____
- 6. _____
- 7. _____
- 8. _____
- 9. _____
- 10. _____
- 11. _____

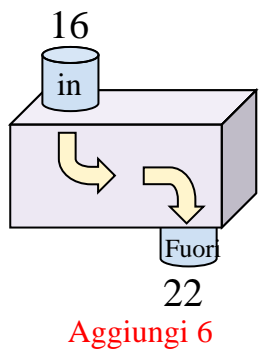


Determina quale regola viene usata nelle seguenti funzioni.

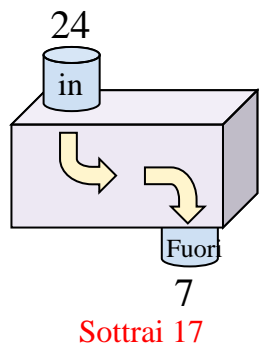
Es)



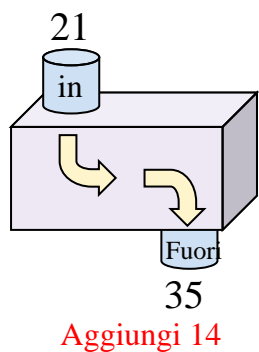
1)



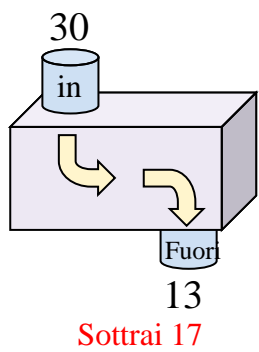
2)



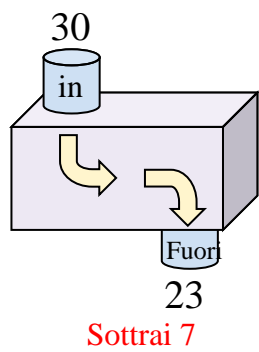
3)



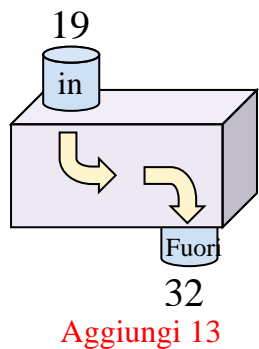
4)



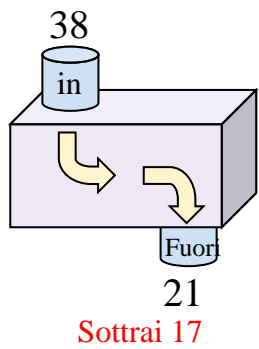
5)



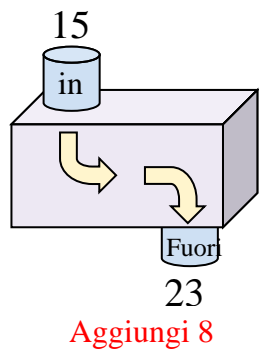
6)



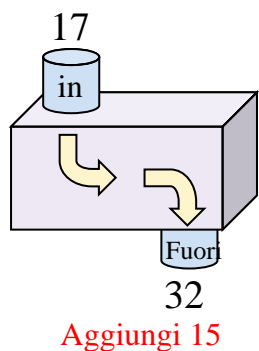
7)



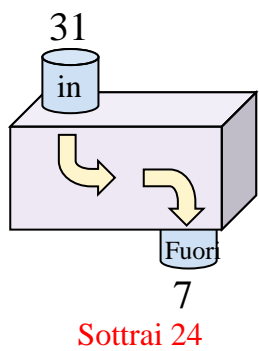
8)



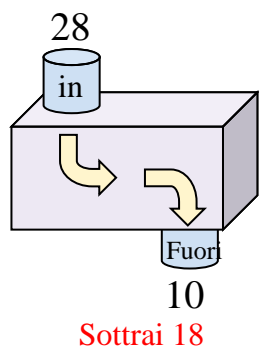
9)



10)



11)



Risposte

Es. **Aggiungi 12**

1. **Aggiungi 6**

2. **Sottrai 17**

3. **Aggiungi 14**

4. **Sottrai 17**

5. **Sottrai 7**

6. **Aggiungi 13**

7. **Sottrai 17**

8. **Aggiungi 8**

9. **Aggiungi 15**

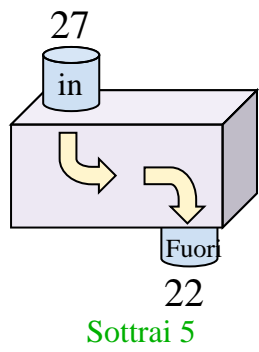
10. **Sottrai 24**

11. **Sottrai 18**

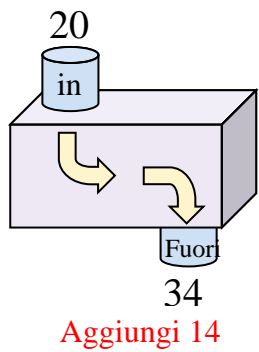


Determina quale regola viene usata nelle seguenti funzioni.

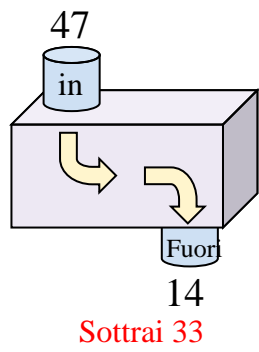
Es)



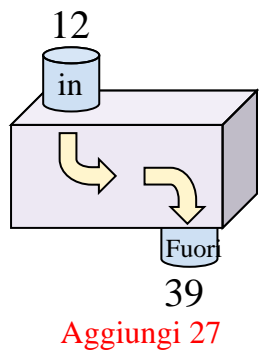
1)



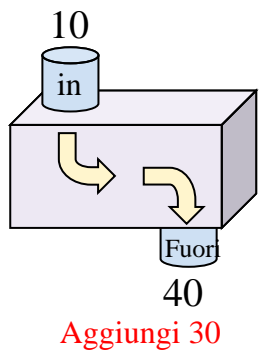
2)



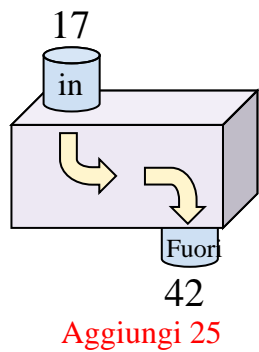
3)



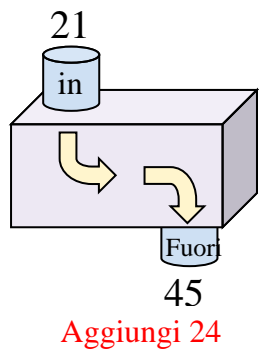
4)



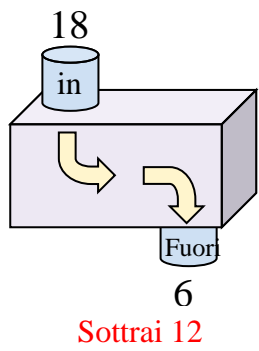
5)



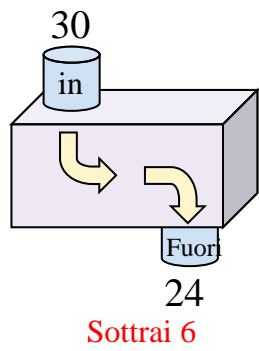
6)



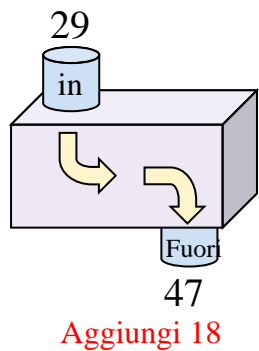
7)



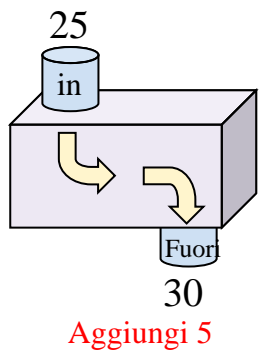
8)



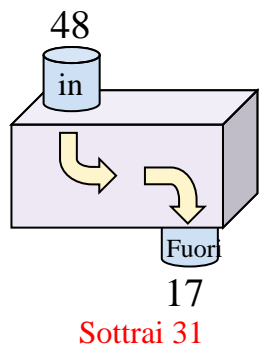
9)



10)



11)



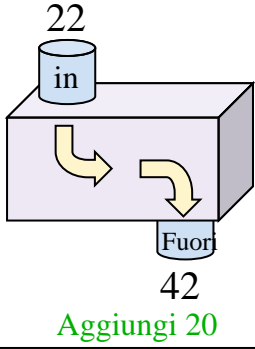
Risposte

- Es. **Sottrai 5**
- 1. **Aggiungi 14**
- 2. **Sottrai 33**
- 3. **Aggiungi 27**
- 4. **Aggiungi 30**
- 5. **Aggiungi 25**
- 6. **Aggiungi 24**
- 7. **Sottrai 12**
- 8. **Sottrai 6**
- 9. **Aggiungi 18**
- 10. **Aggiungi 5**
- 11. **Sottrai 31**

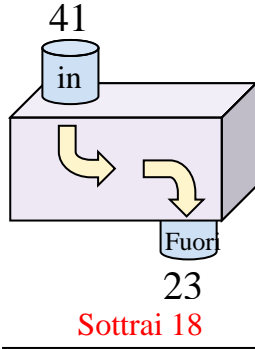


Determina quale regola viene usata nelle seguenti funzioni.

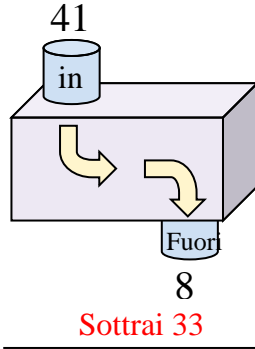
Es)



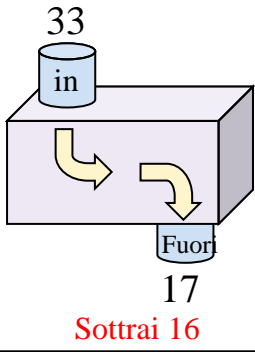
1)



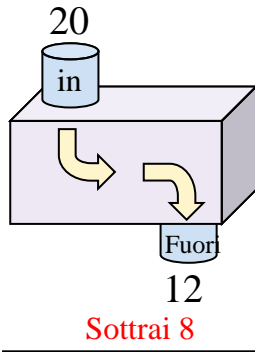
2)



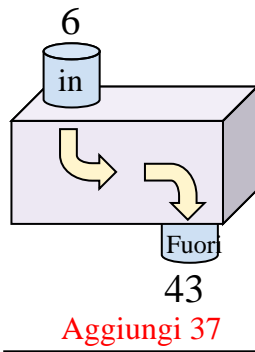
3)



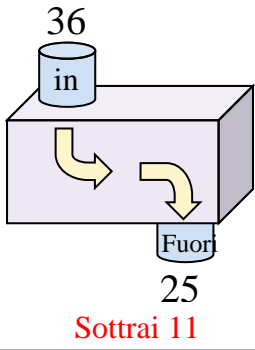
4)



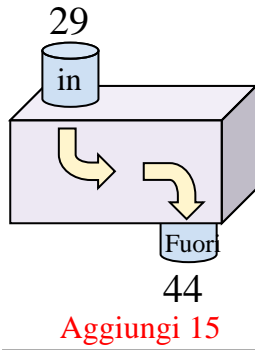
5)



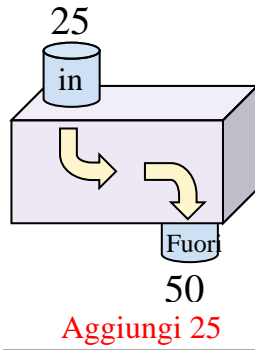
6)



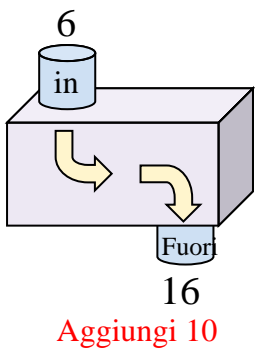
7)



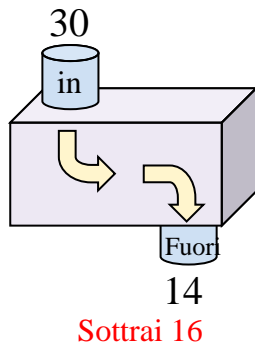
8)



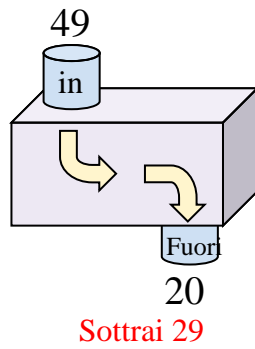
9)



10)



11)



Risposte

Es. **Aggiungi 20**

1. **Sottrai 18**

2. **Sottrai 33**

3. **Sottrai 16**

4. **Sottrai 8**

5. **Aggiungi 37**

6. **Sottrai 11**

7. **Aggiungi 15**

8. **Aggiungi 25**

9. **Aggiungi 10**

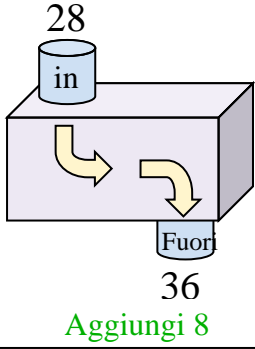
10. **Sottrai 16**

11. **Sottrai 29**

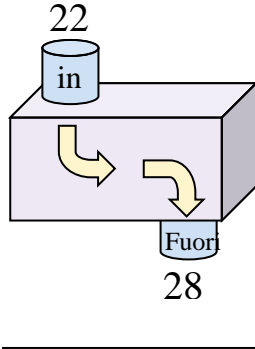


Determina quale regola viene usata nelle seguenti funzioni.

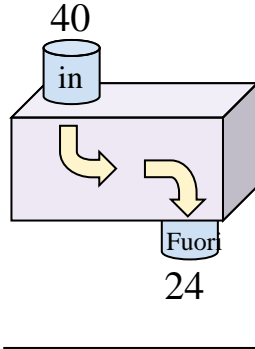
Es)



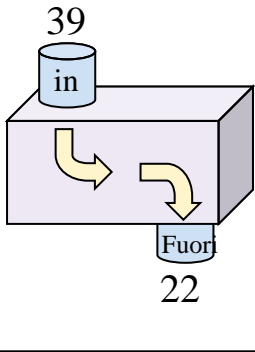
1)



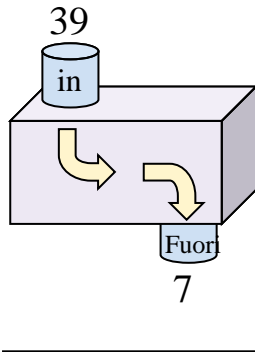
2)



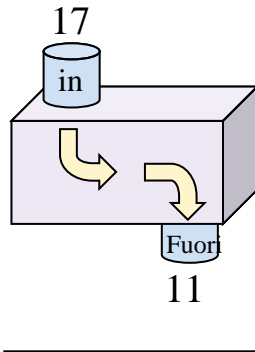
3)



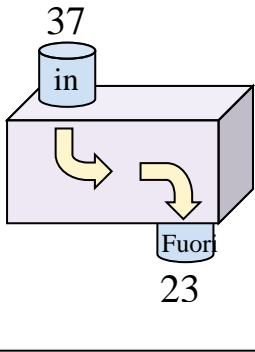
4)



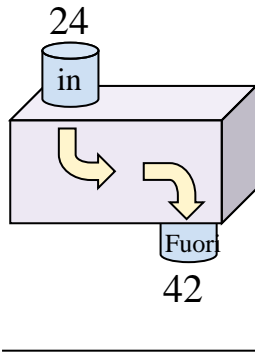
5)



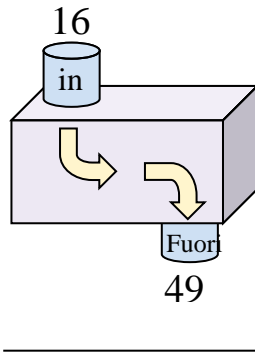
6)



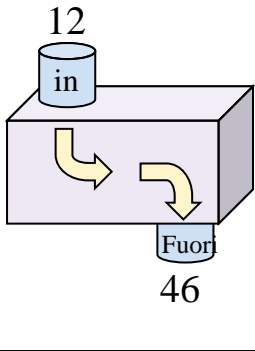
7)



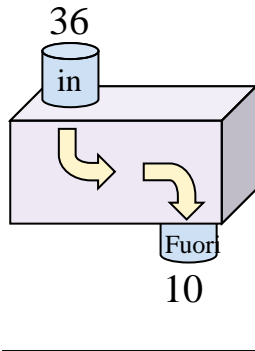
8)



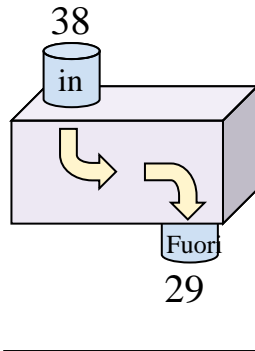
9)



10)



11)



Risposte

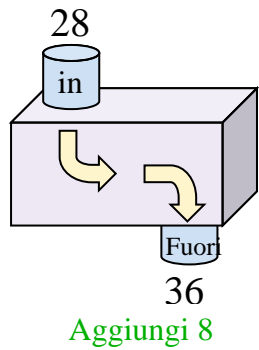
Es. **Aggiungi 8**

1. _____
2. _____
3. _____
4. _____
5. _____
6. _____
7. _____
8. _____
9. _____
10. _____
11. _____

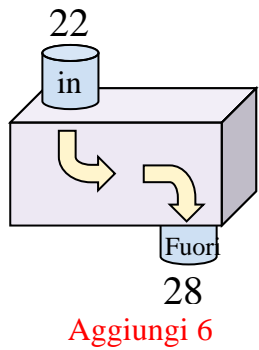


Determina quale regola viene usata nelle seguenti funzioni.

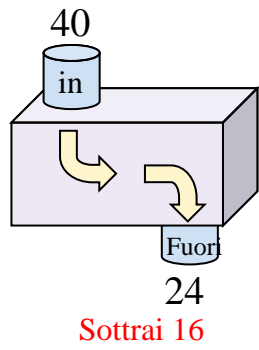
Es)



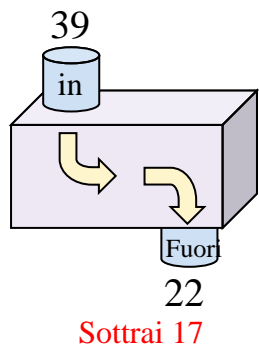
1)



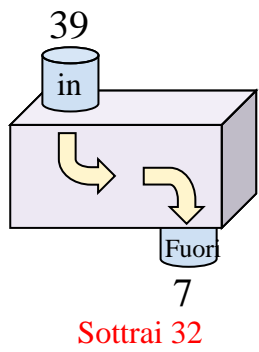
2)



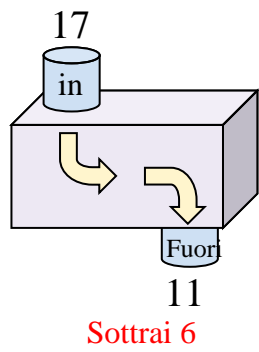
3)



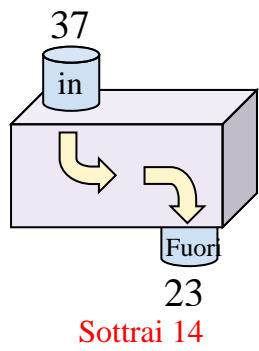
4)



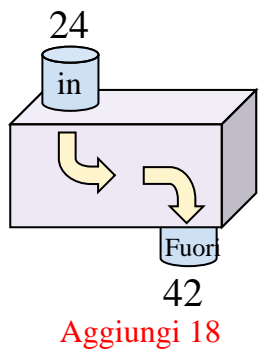
5)



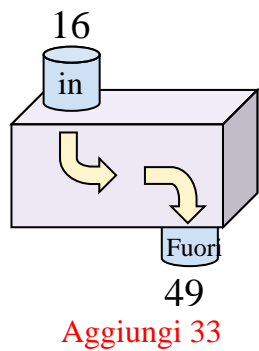
6)



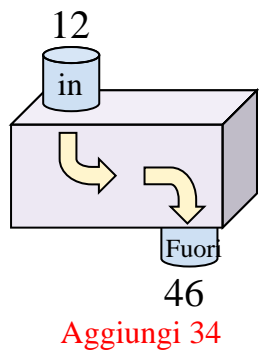
7)



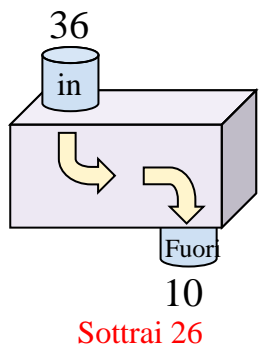
8)



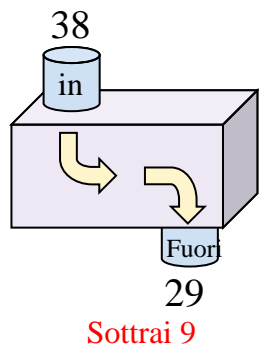
9)



10)



11)



Risposte

Es. **Aggiungi 8**

1. **Aggiungi 6**

2. **Sottrai 16**

3. **Sottrai 17**

4. **Sottrai 32**

5. **Sottrai 6**

6. **Sottrai 14**

7. **Aggiungi 18**

8. **Aggiungi 33**

9. **Aggiungi 34**

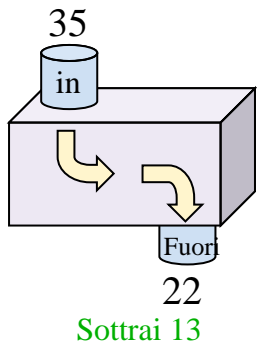
10. **Sottrai 26**

11. **Sottrai 9**

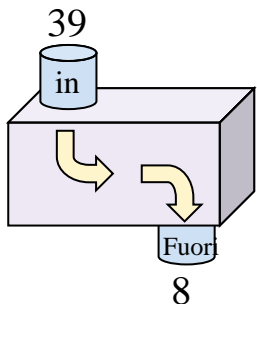


Determina quale regola viene usata nelle seguenti funzioni.

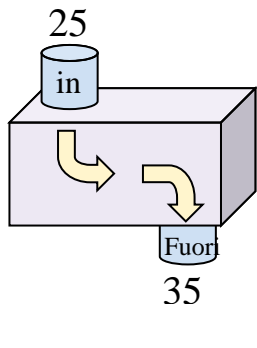
Es)



1)



2)



Risposte

Es. **Sottrai 13**

1. _____

2. _____

3. _____

4. _____

5. _____

6. _____

7. _____

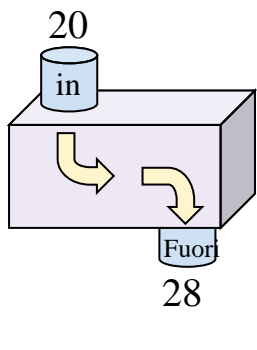
8. _____

9. _____

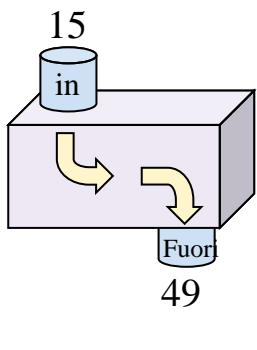
10. _____

11. _____

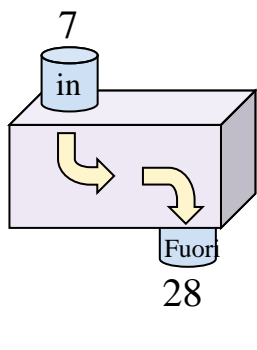
3)



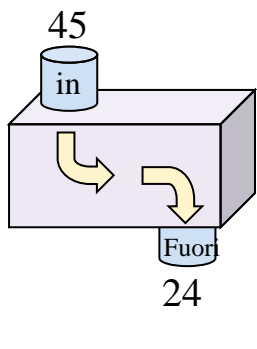
4)



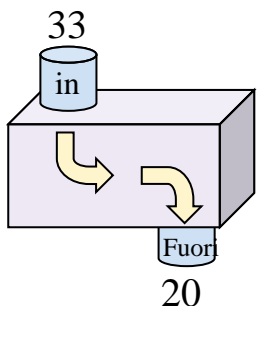
5)



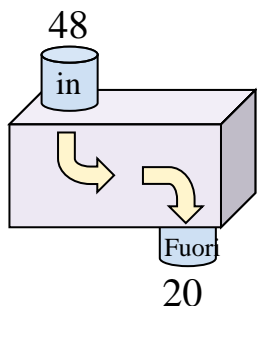
6)



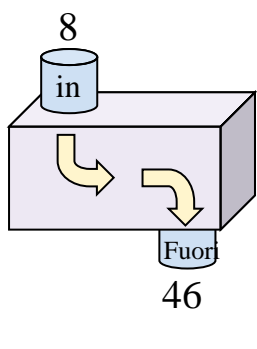
7)



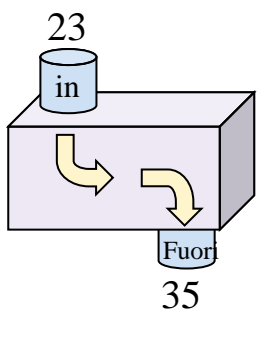
8)



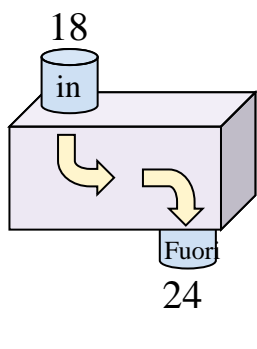
9)



10)



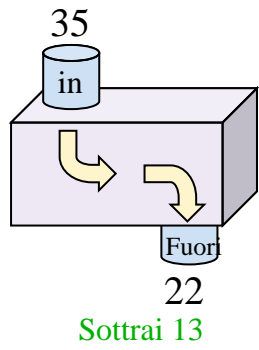
11)



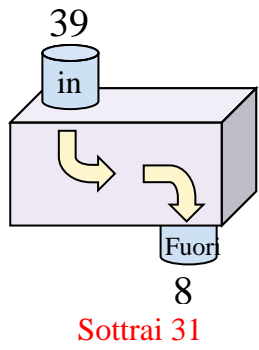


Determina quale regola viene usata nelle seguenti funzioni.

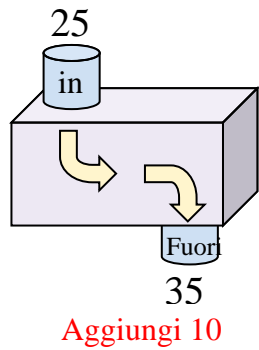
Es)



1)



2)



Es.

Sottrai 13

1.

Sottrai 31

2.

Aggiungi 10

3.

Aggiungi 8

4.

Aggiungi 34

5.

Aggiungi 21

6.

Sottrai 21

7.

Sottrai 13

8.

Sottrai 28

9.

Aggiungi 38

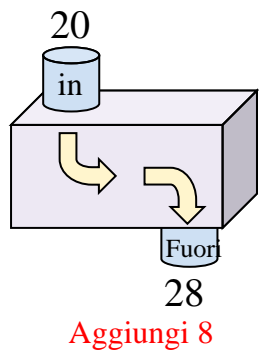
10.

Aggiungi 12

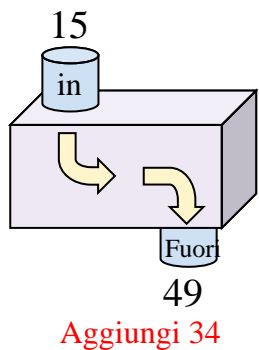
11.

Aggiungi 6

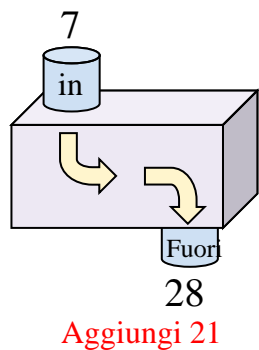
3)



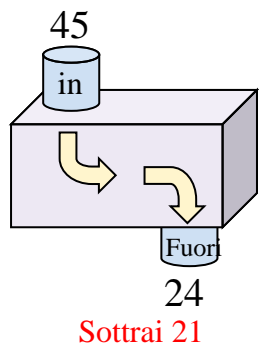
4)



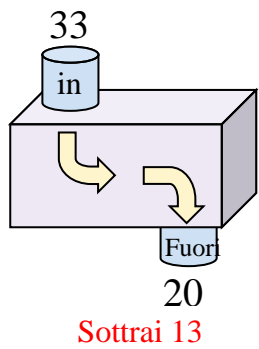
5)



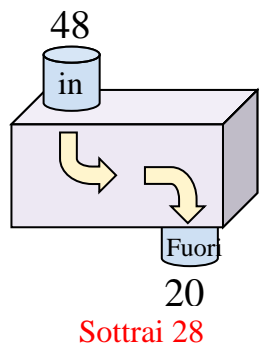
6)



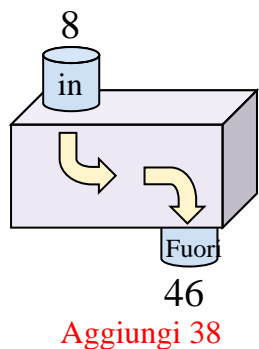
7)



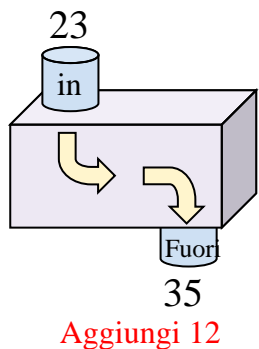
8)



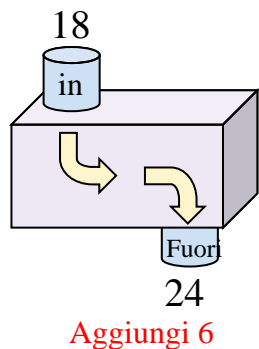
9)



10)



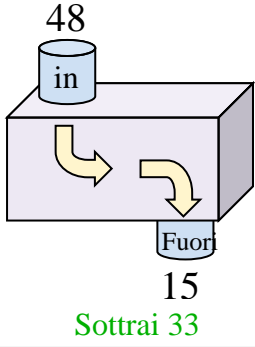
11)



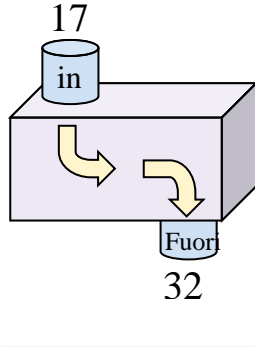


Determina quale regola viene usata nelle seguenti funzioni.

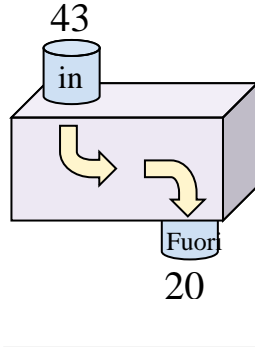
Es)



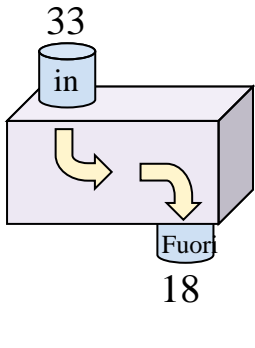
1)



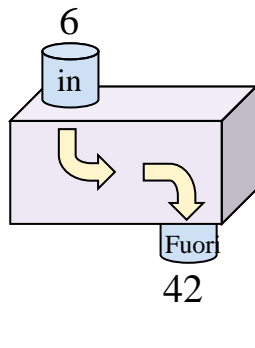
2)



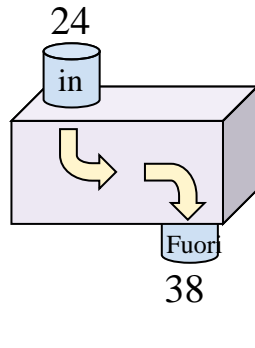
3)



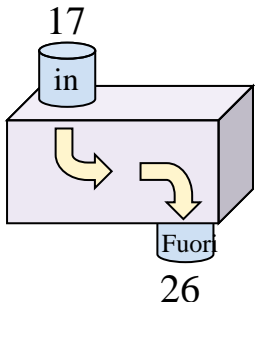
4)



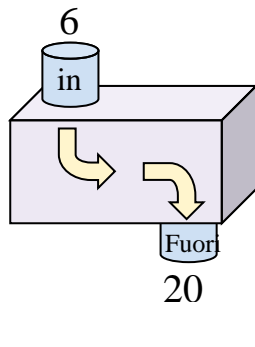
5)



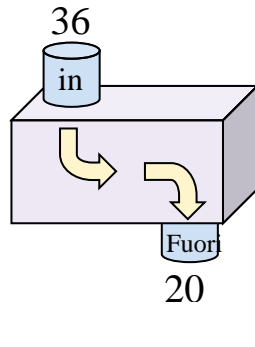
6)



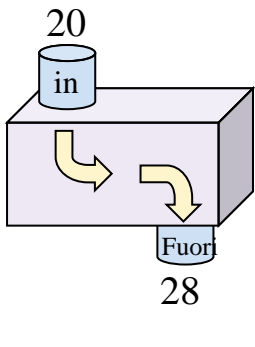
7)



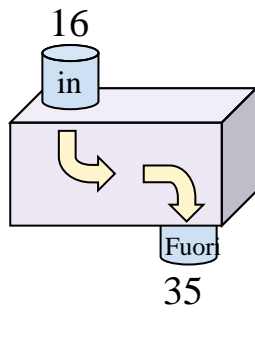
8)



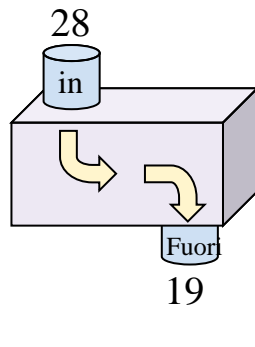
9)



10)



11)



Risposte

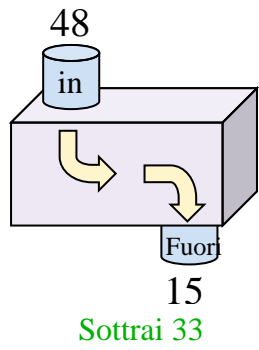
Es. **Sottrai 33**

1. _____
2. _____
3. _____
4. _____
5. _____
6. _____
7. _____
8. _____
9. _____
10. _____
11. _____

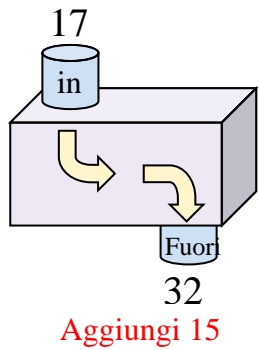


Determina quale regola viene usata nelle seguenti funzioni.

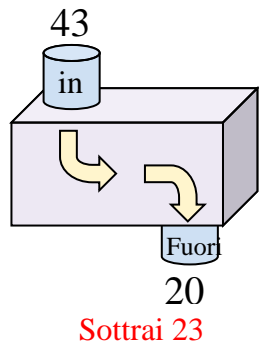
Es)



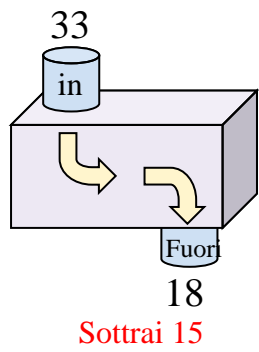
1)



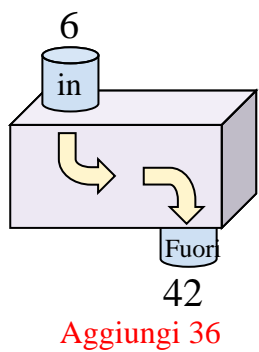
2)



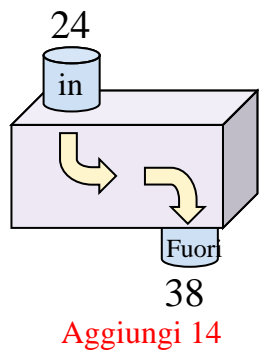
3)



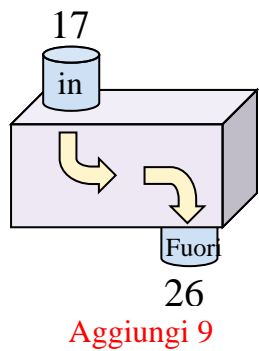
4)



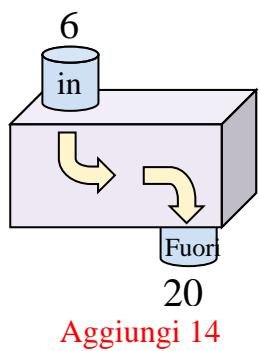
5)



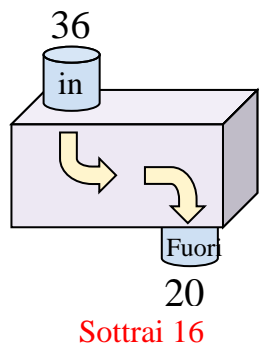
6)



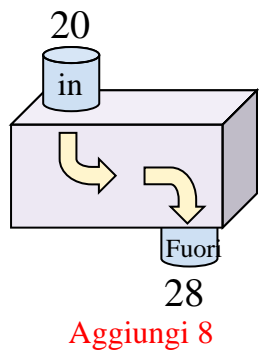
7)



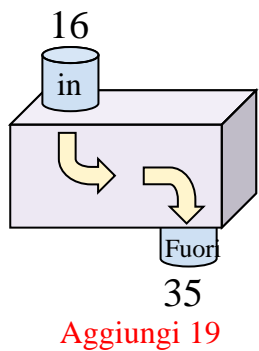
8)



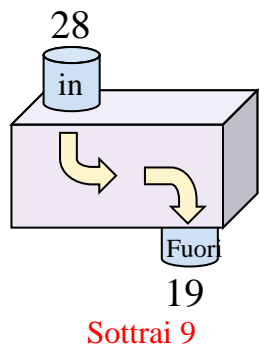
9)



10)



11)



Risposte

Es. **Sottrai 33**

1. **Aggiungi 15**

2. **Sottrai 23**

3. **Sottrai 15**

4. **Aggiungi 36**

5. **Aggiungi 14**

6. **Aggiungi 9**

7. **Aggiungi 14**

8. **Sottrai 16**

9. **Aggiungi 8**

10. **Aggiungi 19**

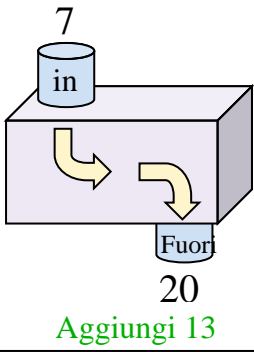
11. **Sottrai 9**



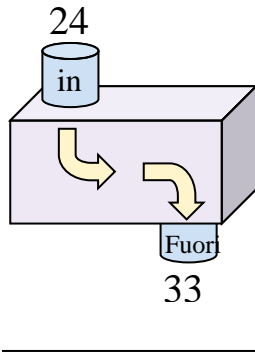
Determina quale regola viene usata nelle seguenti funzioni.

Risposte

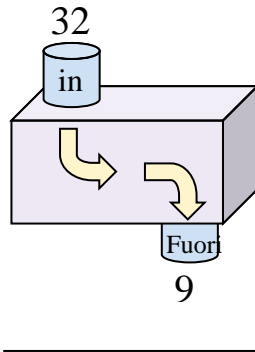
Es)



1)



2)



Es. **Aggiungi 13**

1. _____

2. _____

3. _____

4. _____

5. _____

6. _____

7. _____

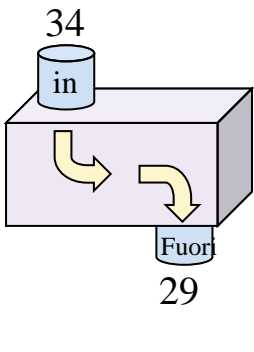
8. _____

9. _____

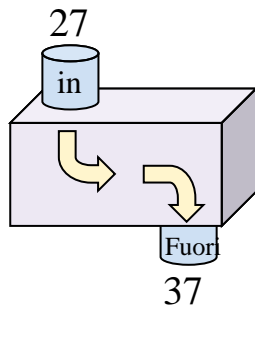
10. _____

11. _____

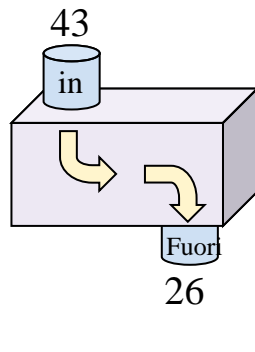
3)



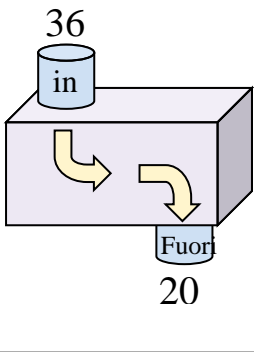
4)



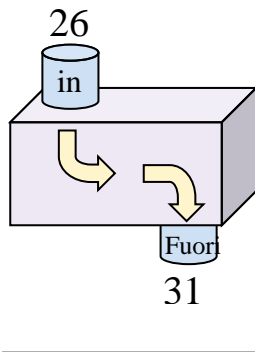
5)



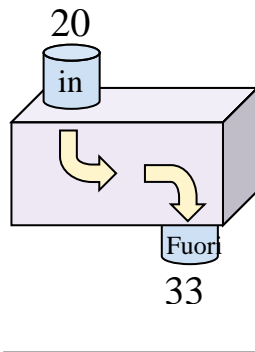
6)



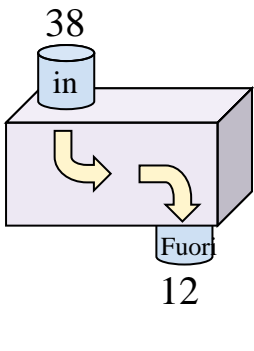
7)



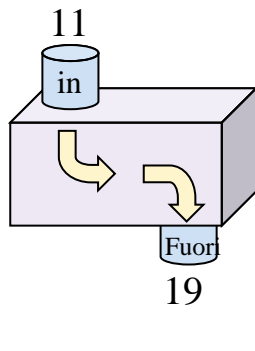
8)



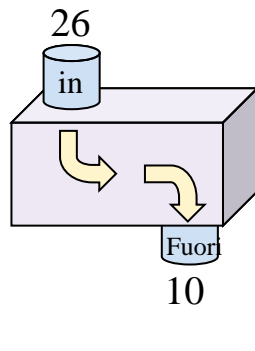
9)



10)



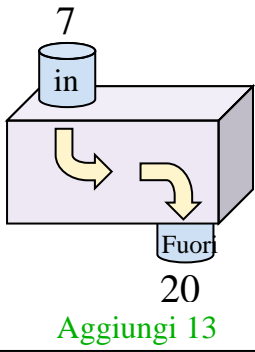
11)



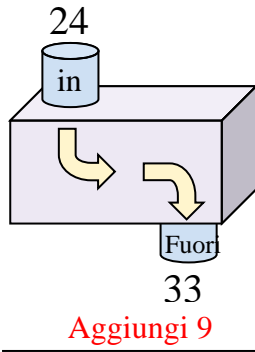


Determina quale regola viene usata nelle seguenti funzioni.

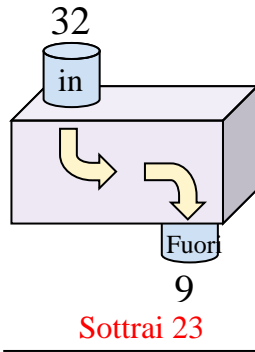
Es)



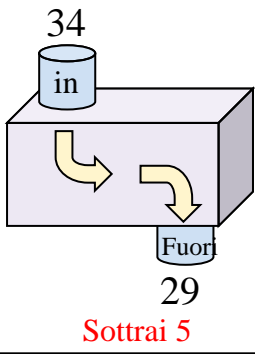
1)



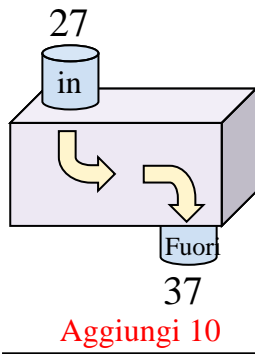
2)



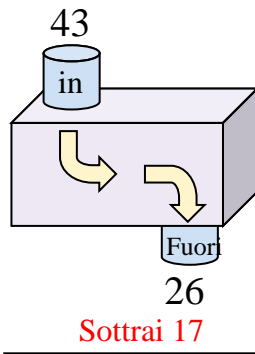
3)



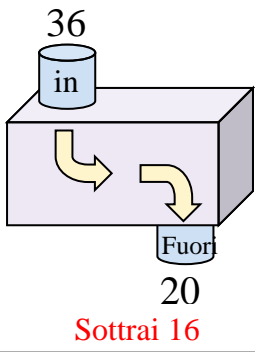
4)



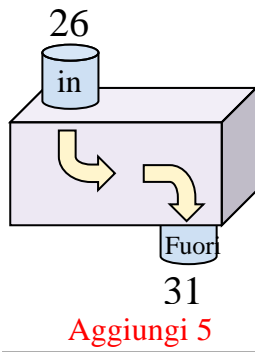
5)



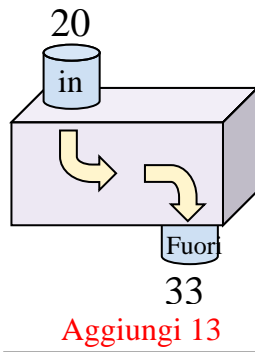
6)



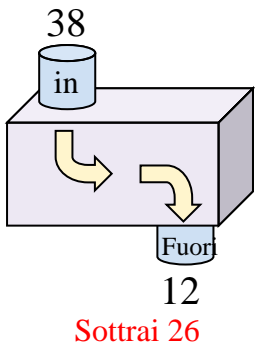
7)



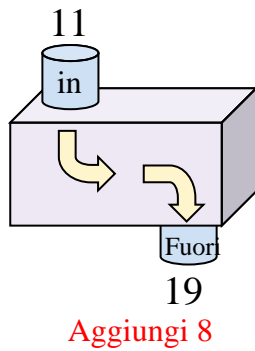
8)



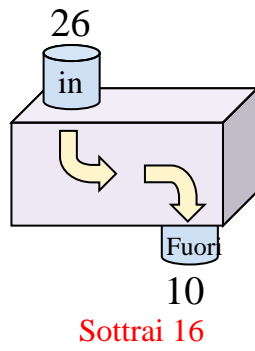
9)



10)



11)



Risposte

Es. **Aggiungi 13**

1. **Aggiungi 9**

2. **Sottrai 23**

3. **Sottrai 5**

4. **Aggiungi 10**

5. **Sottrai 17**

6. **Sottrai 16**

7. **Aggiungi 5**

8. **Aggiungi 13**

9. **Sottrai 26**

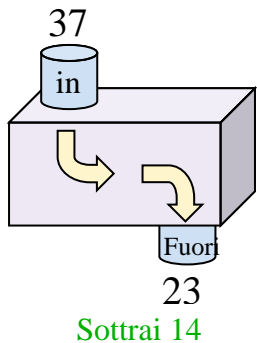
10. **Aggiungi 8**

11. **Sottrai 16**

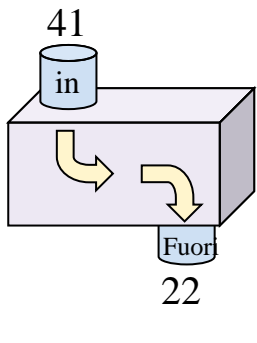


Determina quale regola viene usata nelle seguenti funzioni.

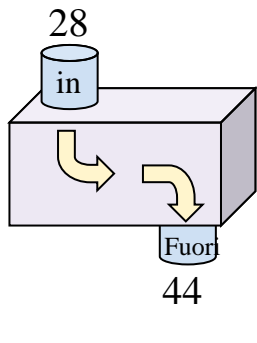
Es)



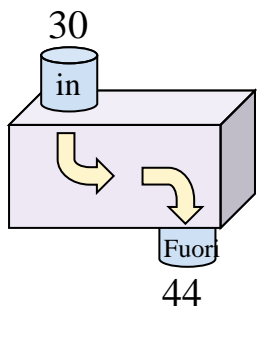
1)



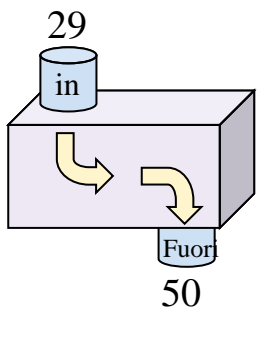
2)



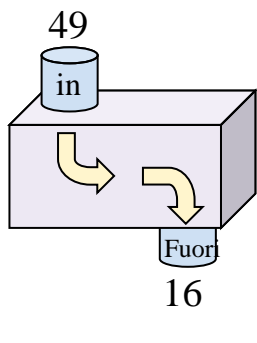
3)



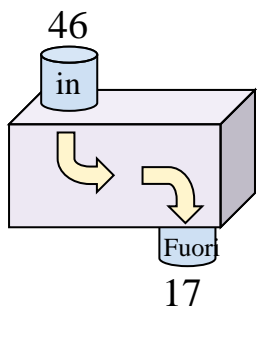
4)



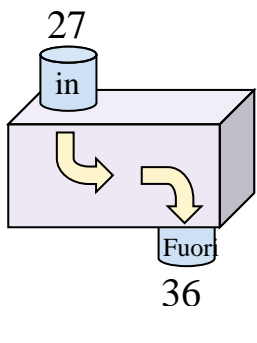
5)



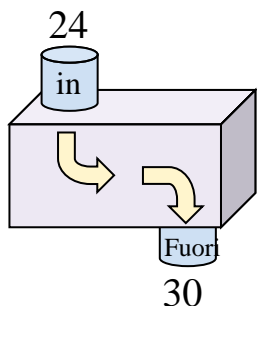
6)



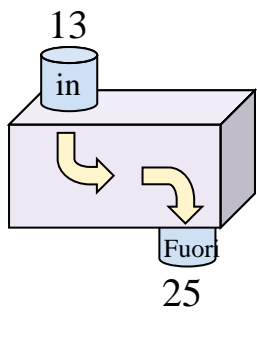
7)



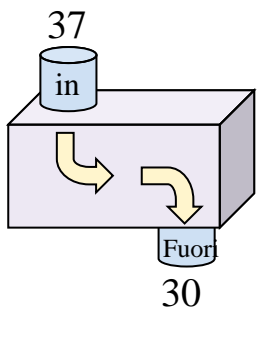
8)



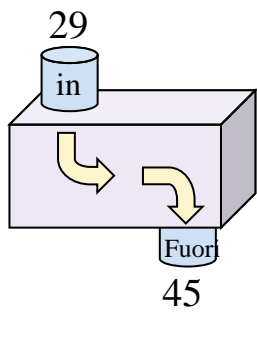
9)



10)



11)



Risposte

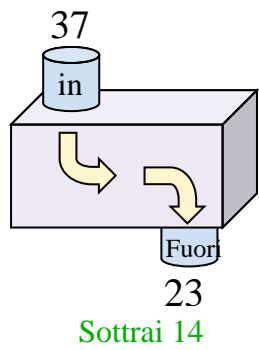
Es. **Sottrai 14**

- 1. _____
- 2. _____
- 3. _____
- 4. _____
- 5. _____
- 6. _____
- 7. _____
- 8. _____
- 9. _____
- 10. _____
- 11. _____

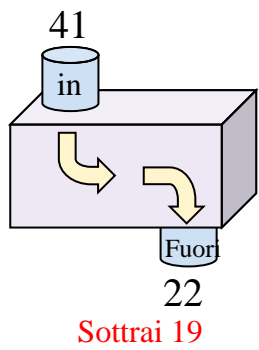


Determina quale regola viene usata nelle seguenti funzioni.

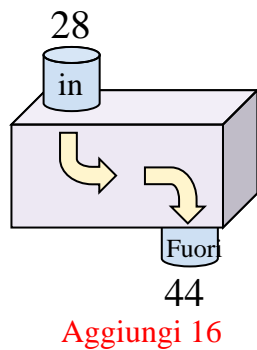
Es)



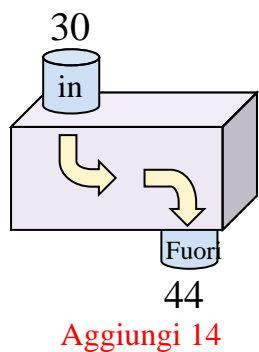
1)



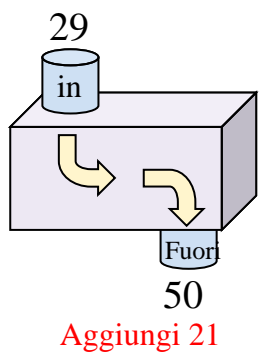
2)



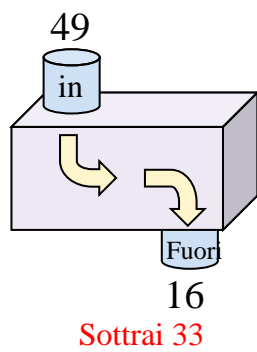
3)



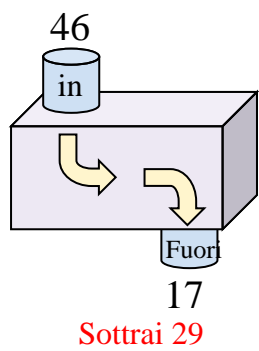
4)



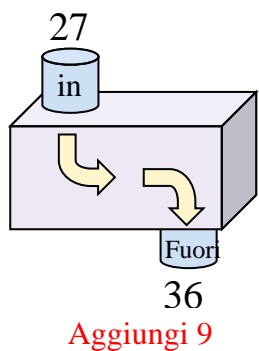
5)



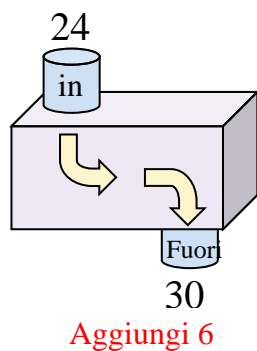
6)



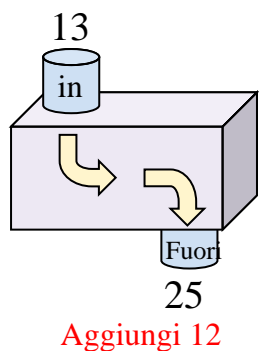
7)



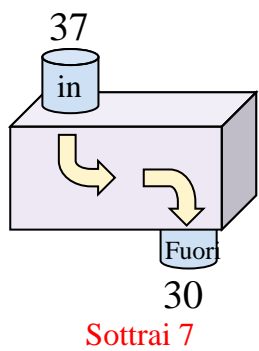
8)



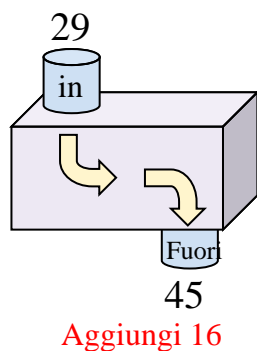
9)



10)



11)



Risposte

Es. **Sottrai 14**

1. **Sottrai 19**

2. **Aggiungi 16**

3. **Aggiungi 14**

4. **Aggiungi 21**

5. **Sottrai 33**

6. **Sottrai 29**

7. **Aggiungi 9**

8. **Aggiungi 6**

9. **Aggiungi 12**

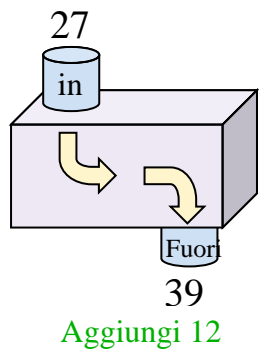
10. **Sottrai 7**

11. **Aggiungi 16**

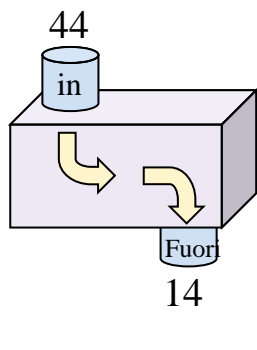


Determina quale regola viene usata nelle seguenti funzioni.

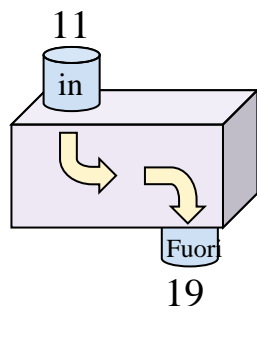
Es)



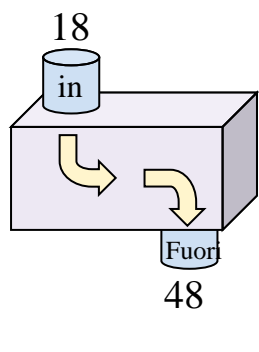
1)



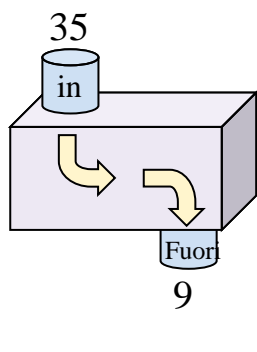
2)



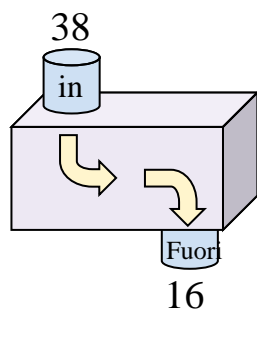
3)



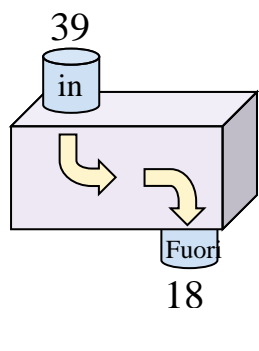
4)



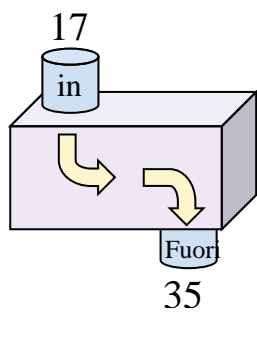
5)



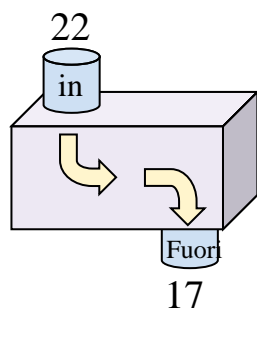
6)



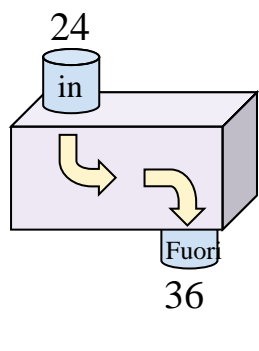
7)



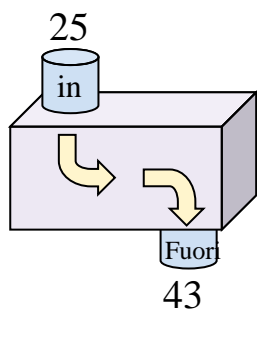
8)



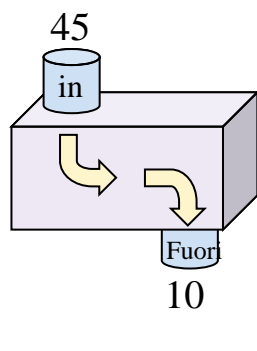
9)



10)



11)



Risposte

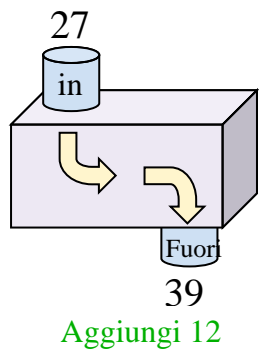
Es. **Aggiungi 12**

1. _____
2. _____
3. _____
4. _____
5. _____
6. _____
7. _____
8. _____
9. _____
10. _____
11. _____

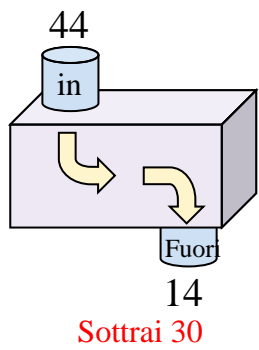


Determina quale regola viene usata nelle seguenti funzioni.

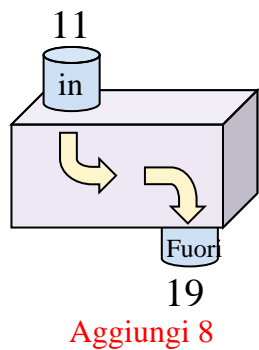
Es)



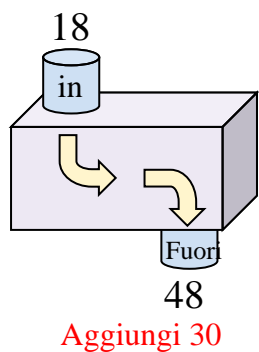
1)



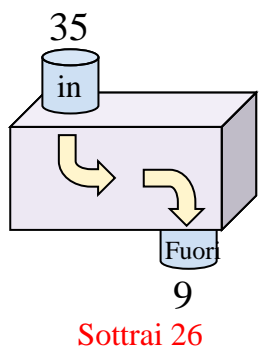
2)



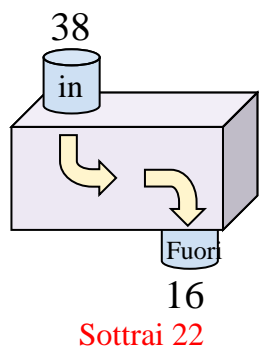
3)



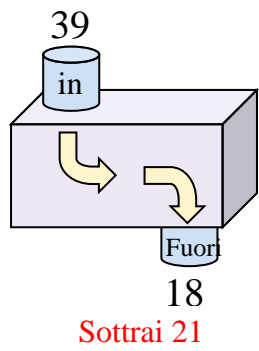
4)



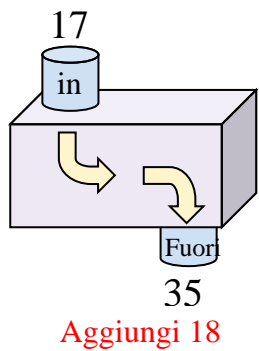
5)



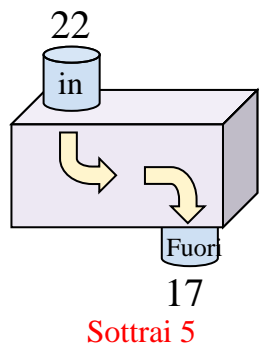
6)



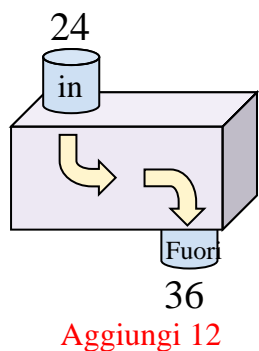
7)



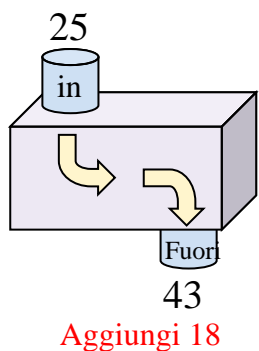
8)



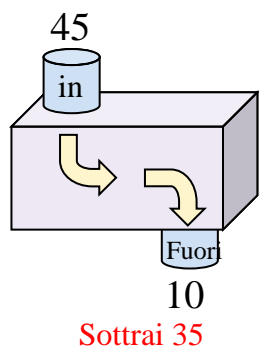
9)



10)



11)



Risposte

Es. **Aggiungi 12**

1. **Sottrai 30**

2. **Aggiungi 8**

3. **Aggiungi 30**

4. **Sottrai 26**

5. **Sottrai 22**

6. **Sottrai 21**

7. **Aggiungi 18**

8. **Sottrai 5**

9. **Aggiungi 12**

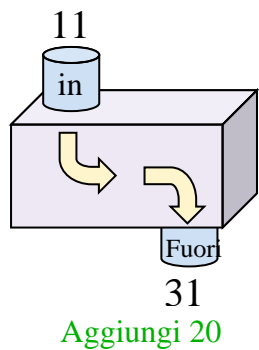
10. **Aggiungi 18**

11. **Sottrai 35**

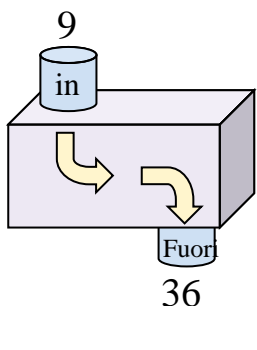


Determina quale regola viene usata nelle seguenti funzioni.

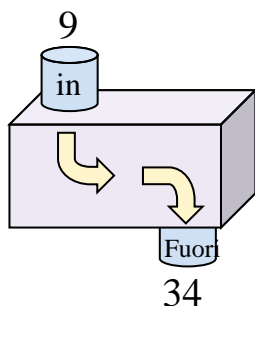
Es)



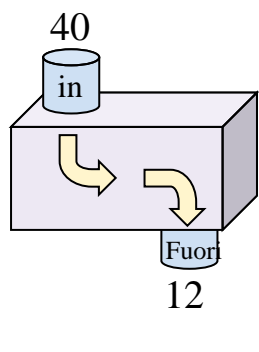
1)



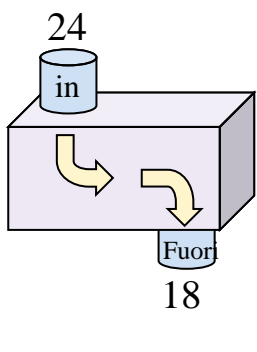
2)



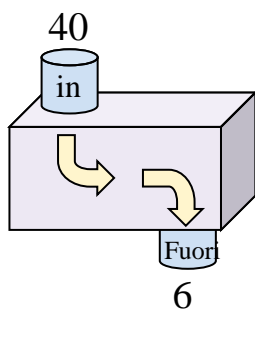
3)



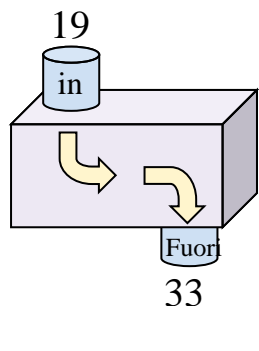
4)



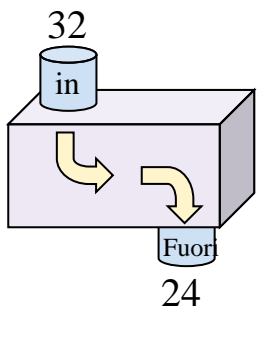
5)



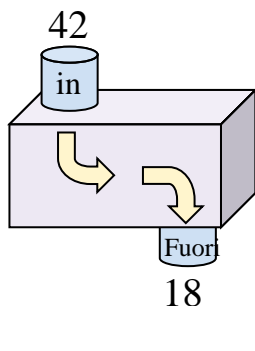
6)



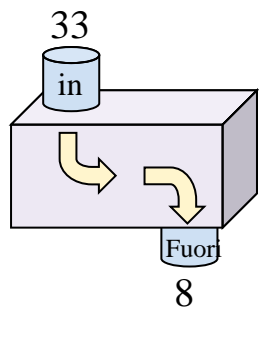
7)



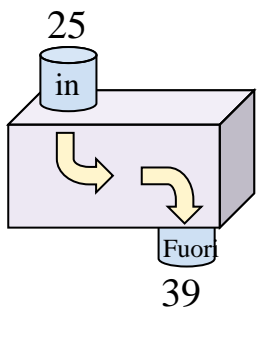
8)



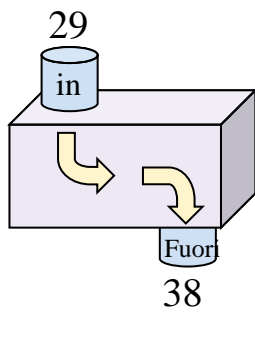
9)



10)



11)



Risposte

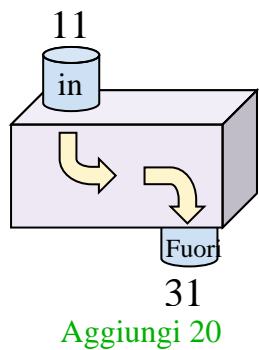
Es. **Aggiungi 20**

1. _____
2. _____
3. _____
4. _____
5. _____
6. _____
7. _____
8. _____
9. _____
10. _____
11. _____

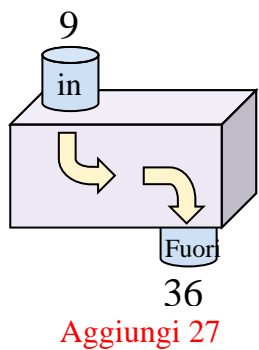


Determina quale regola viene usata nelle seguenti funzioni.

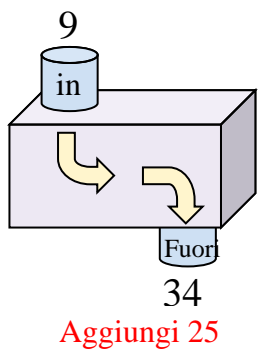
Es)



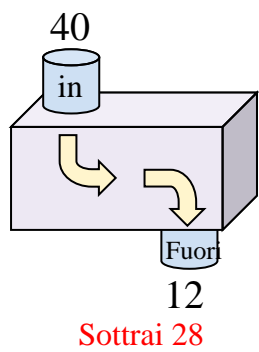
1)



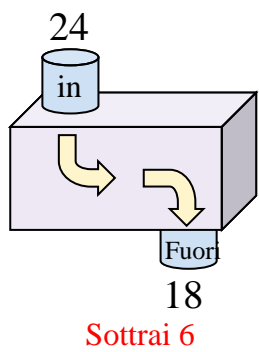
2)



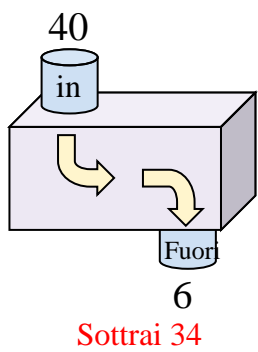
3)



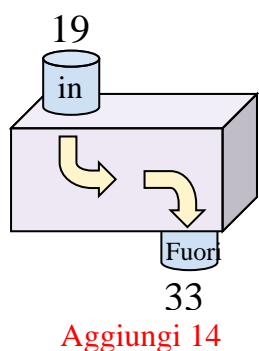
4)



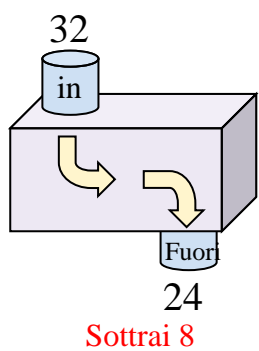
5)



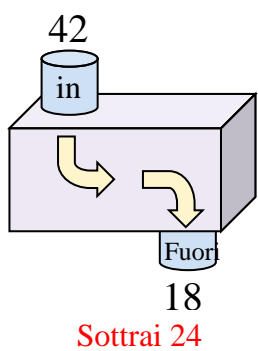
6)



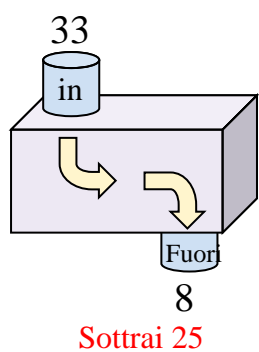
7)



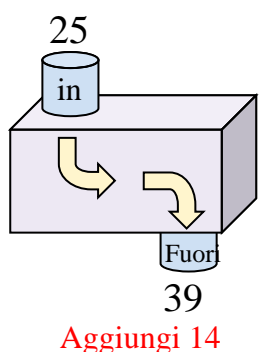
8)



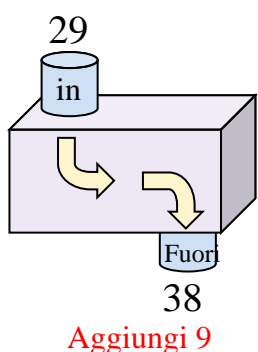
9)



10)



11)



Risposte

Es. **Aggiungi 20**

1. **Aggiungi 27**

2. **Aggiungi 25**

3. **Sottrai 28**

4. **Sottrai 6**

5. **Sottrai 34**

6. **Aggiungi 14**

7. **Sottrai 8**

8. **Sottrai 24**

9. **Sottrai 25**

10. **Aggiungi 14**

11. **Aggiungi 9**