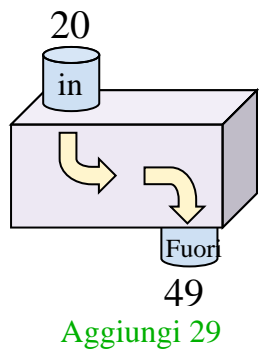


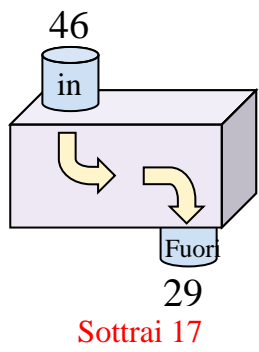


Determina quale regola viene usata nelle seguenti funzioni.

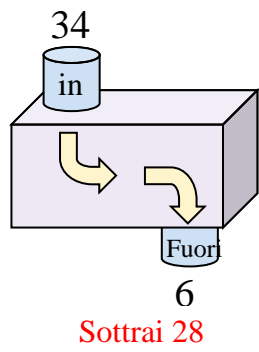
Es)



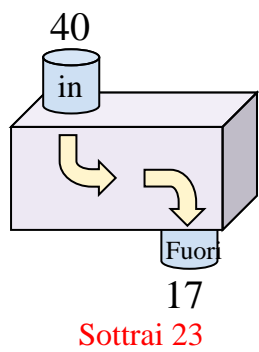
1)



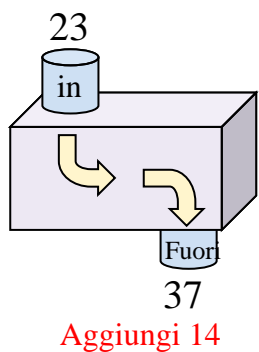
2)



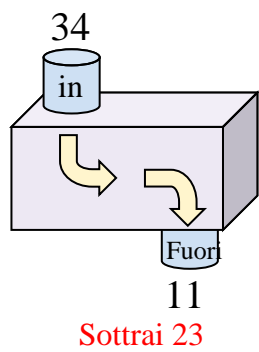
3)



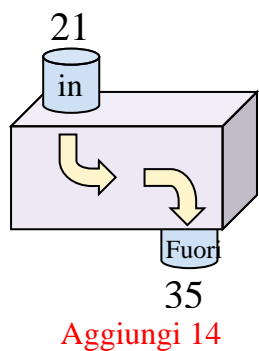
4)



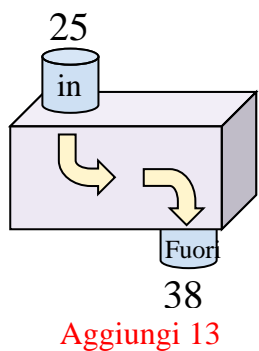
5)



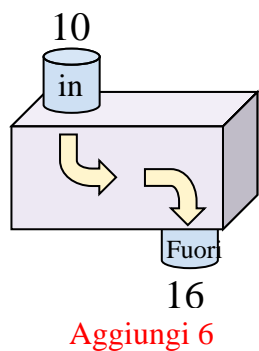
6)



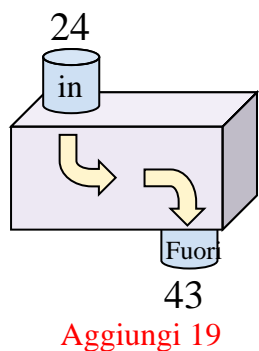
7)



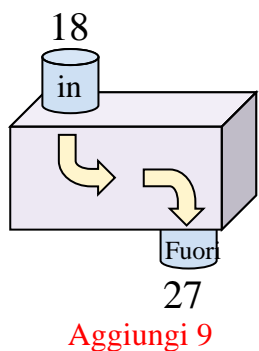
8)



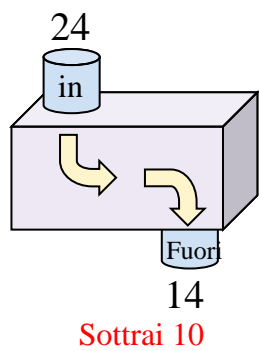
9)



10)



11)



Risposte

Es. **Aggiungi 29**

1. **Sottrai 17**

2. **Sottrai 28**

3. **Sottrai 23**

4. **Aggiungi 14**

5. **Sottrai 23**

6. **Aggiungi 14**

7. **Aggiungi 13**

8. **Aggiungi 6**

9. **Aggiungi 19**

10. **Aggiungi 9**

11. **Sottrai 10**