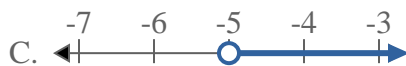
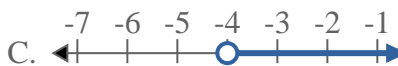
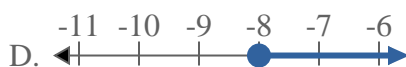
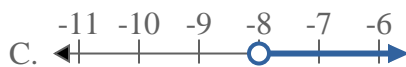
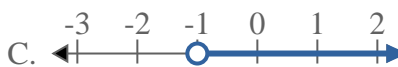
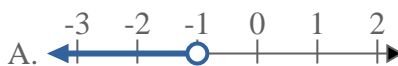
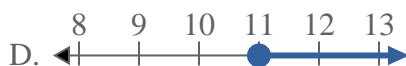
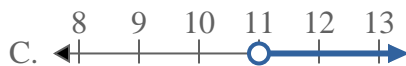
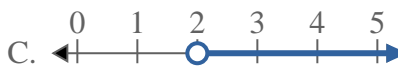
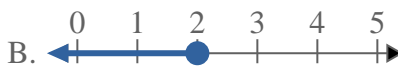
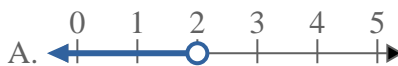


**Risolvi ogni problema.****Risposte**1) Quale opzione rappresenta correttamente $X < -5$ 2) Quale opzione rappresenta correttamente $X < -4$ 3) Quale opzione rappresenta correttamente $X < -8$ 4) Quale opzione rappresenta correttamente $X < -1$ 5) Quale opzione rappresenta correttamente $X \geq 11$ 6) Quale opzione rappresenta correttamente $X \geq 5$ 7) Quale opzione rappresenta correttamente $X \geq 13$ 8) Quale opzione rappresenta correttamente $X < 2$ 

1. _____

2. _____

3. _____

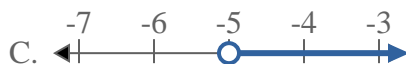
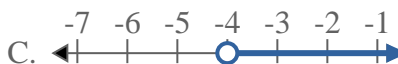
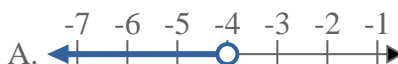
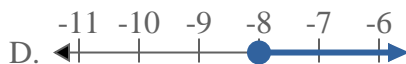
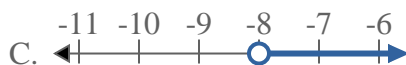
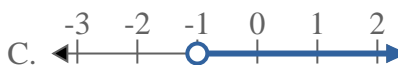
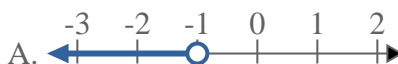
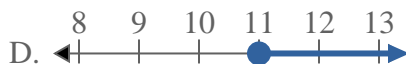
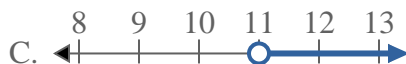
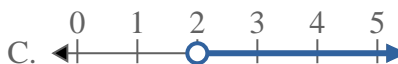
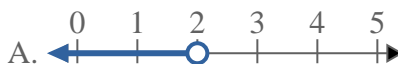
4. _____

5. _____

6. _____

7. _____

8. _____

**Risolvi ogni problema.****Risposte**1) Quale opzione rappresenta correttamente $X < -5$ 2) Quale opzione rappresenta correttamente $X < -4$ 3) Quale opzione rappresenta correttamente $X < -8$ 4) Quale opzione rappresenta correttamente $X < -1$ 5) Quale opzione rappresenta correttamente $X \geq 11$ 6) Quale opzione rappresenta correttamente $X \geq 5$ 7) Quale opzione rappresenta correttamente $X \geq 13$ 8) Quale opzione rappresenta correttamente $X < 2$ 1. **A** 2. **A** 3. **A** 4. **A** 5. **D** 6. **D** 7. **D** 8. **A**