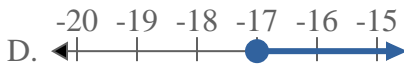
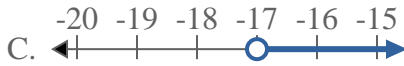
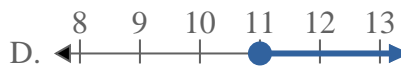
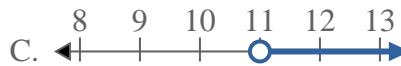
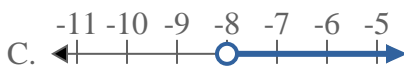
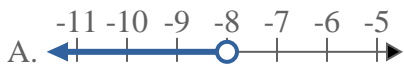
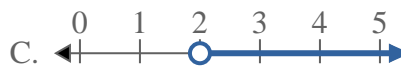
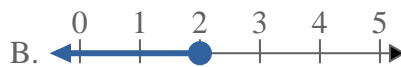
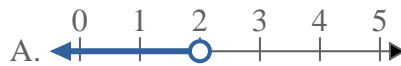


**Risolvi ogni problema.****Risposte**1) Quale opzione rappresenta correttamente $X < -17$ 2) Quale opzione rappresenta correttamente $X \leq 20$ 3) Quale opzione rappresenta correttamente $X \geq 12$ 4) Quale opzione rappresenta correttamente $X \geq -17$ 5) Quale opzione rappresenta correttamente $X \geq 6$ 6) Quale opzione rappresenta correttamente $X \leq 11$ 7) Quale opzione rappresenta correttamente $X \leq -8$ 8) Quale opzione rappresenta correttamente $X > 2$ 

1. _____

2. _____

3. _____

4. _____

5. _____

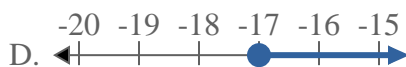
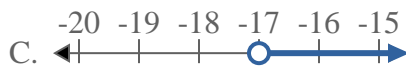

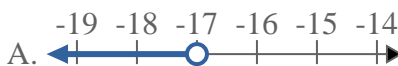
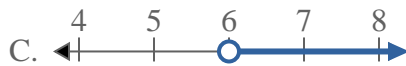
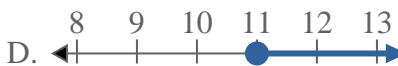
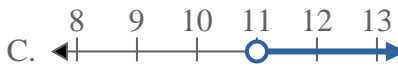
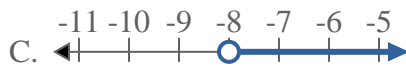
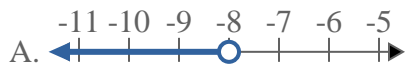
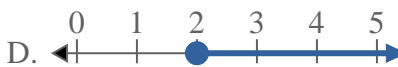
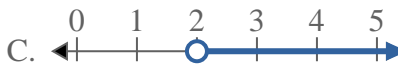
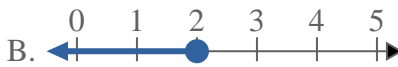
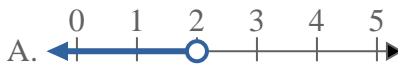
6. _____

7. _____

8. _____



Risolvi ogni problema.

Risposte1) Quale opzione rappresenta correttamente $X < -17$ 2) Quale opzione rappresenta correttamente $X \leq 20$ 3) Quale opzione rappresenta correttamente $X \geq 12$ 4) Quale opzione rappresenta correttamente $X \geq -17$ 5) Quale opzione rappresenta correttamente $X \geq 6$ 6) Quale opzione rappresenta correttamente $X \leq 11$ 7) Quale opzione rappresenta correttamente $X \leq -8$ 8) Quale opzione rappresenta correttamente $X > 2$ 1. **A** 2. **B** 3. **D** 4. **D** 5. **D** 6. **B** 7. **B** 8. **C**