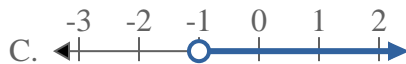
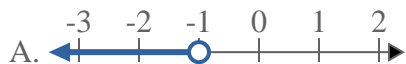
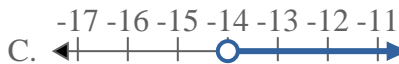
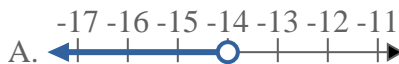
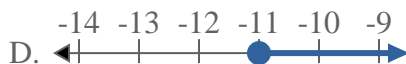
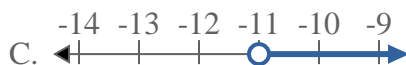
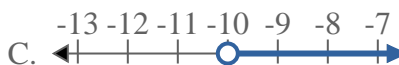
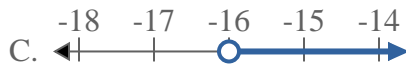
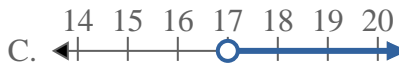
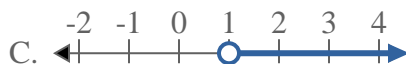
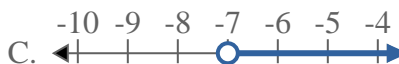
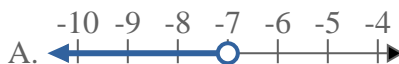


**Risolvi ogni problema.****Risposte**1) Quale opzione rappresenta correttamente  $X > -1$ 2) Quale opzione rappresenta correttamente  $X < -14$ 3) Quale opzione rappresenta correttamente  $X \leq -11$ 4) Quale opzione rappresenta correttamente  $X < -10$ 5) Quale opzione rappresenta correttamente  $X \leq -16$ 6) Quale opzione rappresenta correttamente  $X > 17$ 7) Quale opzione rappresenta correttamente  $X > 1$ 8) Quale opzione rappresenta correttamente  $X > -7$ 

1. \_\_\_\_\_

2. \_\_\_\_\_

3. \_\_\_\_\_

4. \_\_\_\_\_

5. \_\_\_\_\_

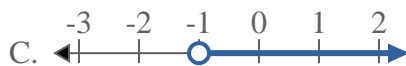
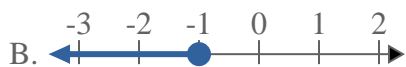
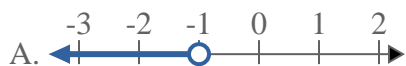
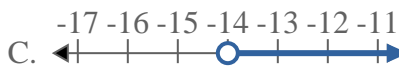
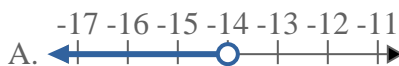
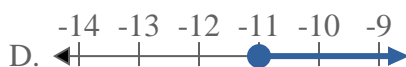
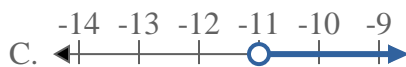
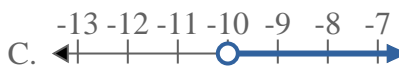
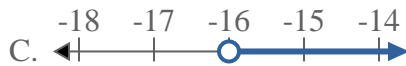
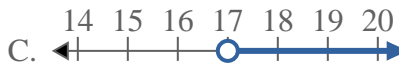
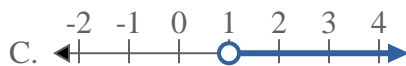
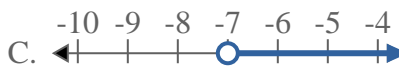
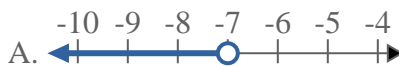
6. \_\_\_\_\_

7. \_\_\_\_\_

8. \_\_\_\_\_



Risolvi ogni problema.

**Risposte**1) Quale opzione rappresenta correttamente  $X > -1$ 2) Quale opzione rappresenta correttamente  $X < -14$ 3) Quale opzione rappresenta correttamente  $X \leq -11$ 4) Quale opzione rappresenta correttamente  $X < -10$ 5) Quale opzione rappresenta correttamente  $X \leq -16$ 6) Quale opzione rappresenta correttamente  $X > 17$ 7) Quale opzione rappresenta correttamente  $X > 1$ 8) Quale opzione rappresenta correttamente  $X > -7$ 1.     **C**    2.     **A**    3.     **B**    4.     **A**    5.     **B**    6.     **C**    7.     **C**    8.     **C**