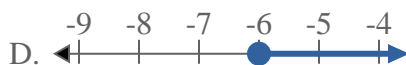
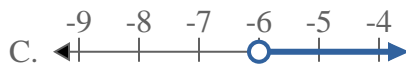
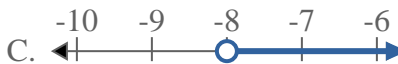
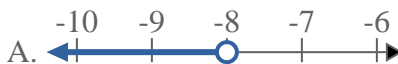
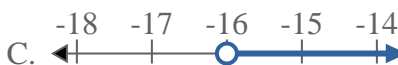
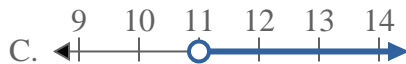
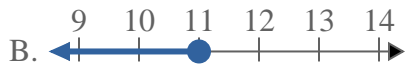
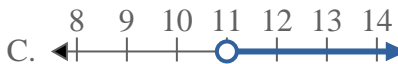
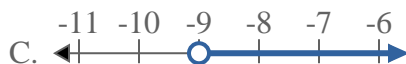
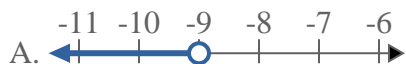


**Risolvi ogni problema.****Risposte**1) Quale opzione rappresenta correttamente  $X \leq -6$ 2) Quale opzione rappresenta correttamente  $X > -8$ 3) Quale opzione rappresenta correttamente  $X < 13$ 4) Quale opzione rappresenta correttamente  $X < -16$ 5) Quale opzione rappresenta correttamente  $X \leq 11$ 6) Quale opzione rappresenta correttamente  $X \geq 11$ 7) Quale opzione rappresenta correttamente  $X > -9$ 8) Quale opzione rappresenta correttamente  $X \geq -5$ 

1. \_\_\_\_\_

2. \_\_\_\_\_

3. \_\_\_\_\_

4. \_\_\_\_\_

5. \_\_\_\_\_

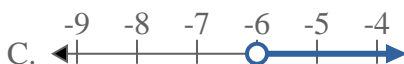
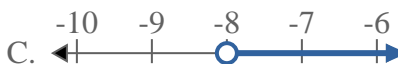
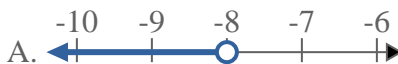
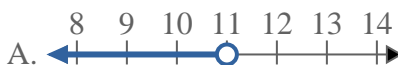
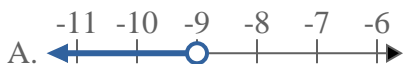
6. \_\_\_\_\_

7. \_\_\_\_\_

8. \_\_\_\_\_



Risolvi ogni problema.

**Risposte**1) Quale opzione rappresenta correttamente  $X \leq -6$ 2) Quale opzione rappresenta correttamente  $X > -8$ 3) Quale opzione rappresenta correttamente  $X < 13$ 4) Quale opzione rappresenta correttamente  $X < -16$ 5) Quale opzione rappresenta correttamente  $X \leq 11$ 6) Quale opzione rappresenta correttamente  $X \geq 11$ 7) Quale opzione rappresenta correttamente  $X > -9$ 8) Quale opzione rappresenta correttamente  $X \geq -5$ 1.     **B**    2.     **C**    3.     **A**    4.     **A**    5.     **B**    6.     **D**    7.     **C**    8.     **D**