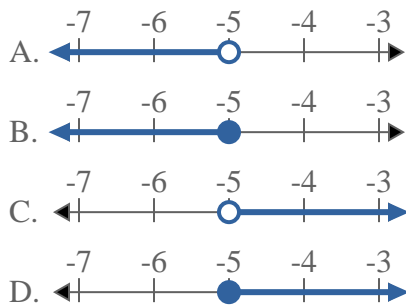




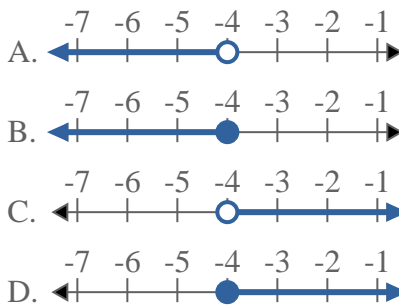
Risolvi ogni problema.

Risposte

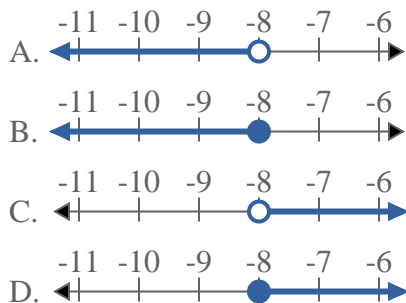
1) Quale opzione rappresenta correttamente $X < -5$



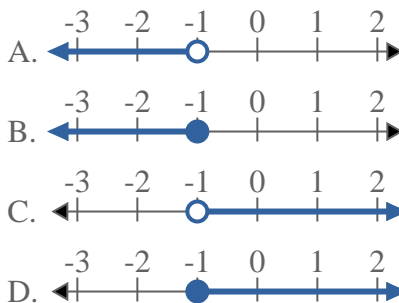
2) Quale opzione rappresenta correttamente $X < -4$



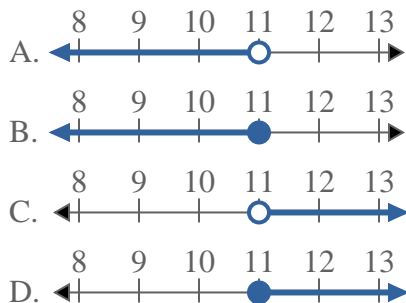
3) Quale opzione rappresenta correttamente $X < -8$



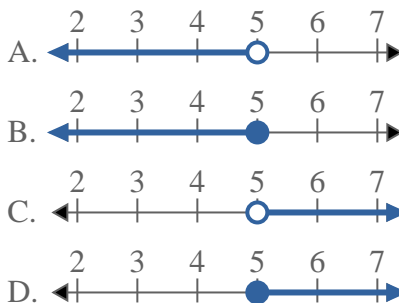
4) Quale opzione rappresenta correttamente $X < -1$



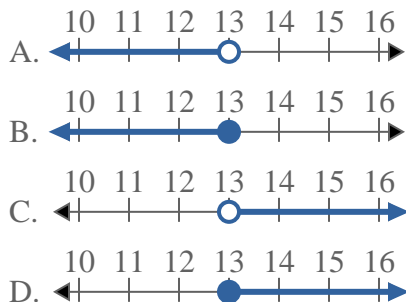
5) Quale opzione rappresenta correttamente $X \geq 11$



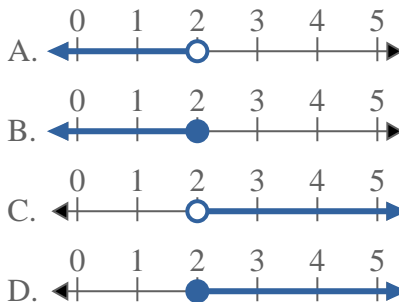
6) Quale opzione rappresenta correttamente $X \geq 5$



7) Quale opzione rappresenta correttamente $X \geq 13$



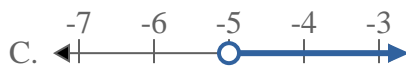
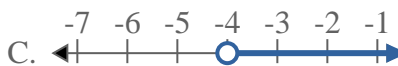
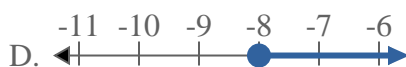
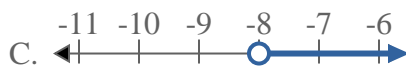
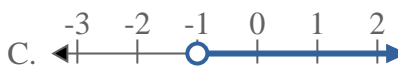
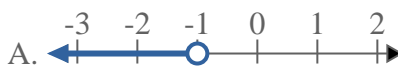
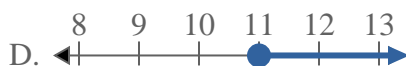
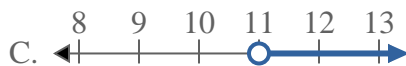
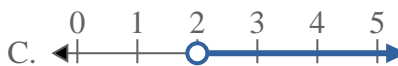
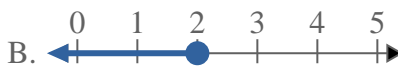
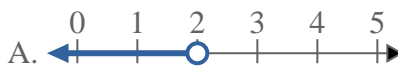
8) Quale opzione rappresenta correttamente $X < 2$

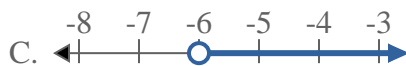
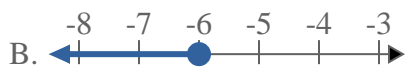
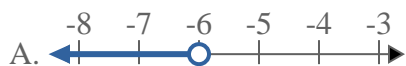
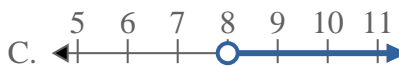
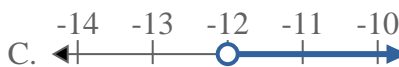
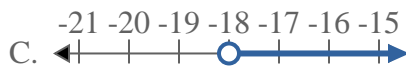
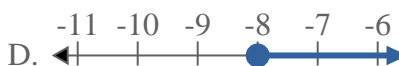
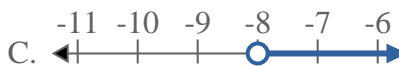
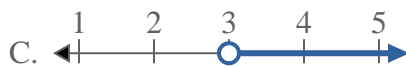
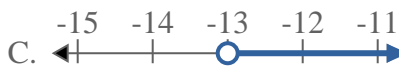


- 1. _____
- 2. _____
- 3. _____
- 4. _____
- 5. _____
- 6. _____
- 7. _____
- 8. _____



Risolvi ogni problema.

Risposte1) Quale opzione rappresenta correttamente $X < -5$ 2) Quale opzione rappresenta correttamente $X < -4$ 3) Quale opzione rappresenta correttamente $X < -8$ 4) Quale opzione rappresenta correttamente $X < -1$ 5) Quale opzione rappresenta correttamente $X \geq 11$ 6) Quale opzione rappresenta correttamente $X \geq 5$ 7) Quale opzione rappresenta correttamente $X \geq 13$ 8) Quale opzione rappresenta correttamente $X < 2$ 1. **A** 2. **A** 3. **A** 4. **A** 5. **D** 6. **D** 7. **D** 8. **A**

**Risolvi ogni problema.****Risposte**1) Quale opzione rappresenta correttamente $X < -6$ 2) Quale opzione rappresenta correttamente $X < 8$ 3) Quale opzione rappresenta correttamente $X \leq 5$ 4) Quale opzione rappresenta correttamente $X \geq -12$ 5) Quale opzione rappresenta correttamente $X \geq -18$ 6) Quale opzione rappresenta correttamente $X \geq -8$ 7) Quale opzione rappresenta correttamente $X < 3$ 8) Quale opzione rappresenta correttamente $X < -13$ 

1. _____

2. _____

3. _____

4. _____

5. _____

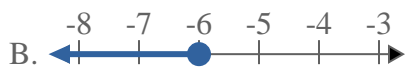
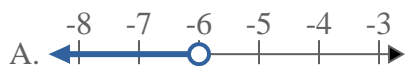
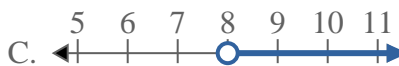
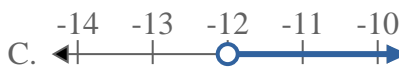
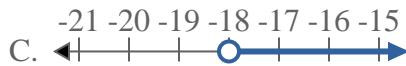
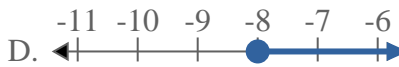
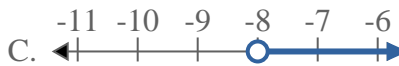
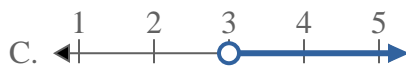
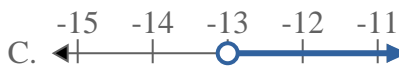
6. _____

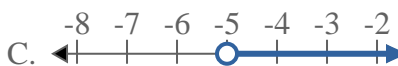
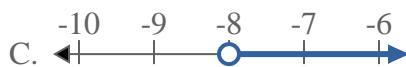
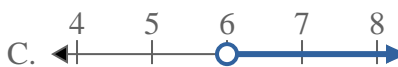
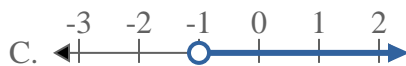
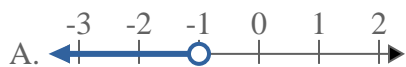
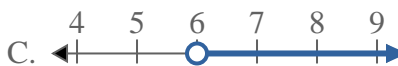
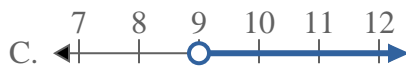
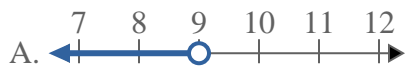
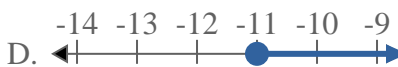
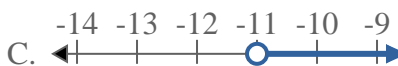
7. _____

8. _____



Risolvi ogni problema.

Risposte1) Quale opzione rappresenta correttamente $X < -6$ 2) Quale opzione rappresenta correttamente $X < 8$ 3) Quale opzione rappresenta correttamente $X \leq 5$ 4) Quale opzione rappresenta correttamente $X \geq -12$ 5) Quale opzione rappresenta correttamente $X \geq -18$ 6) Quale opzione rappresenta correttamente $X \geq -8$ 7) Quale opzione rappresenta correttamente $X < 3$ 8) Quale opzione rappresenta correttamente $X < -13$ 1. **A** 2. **A** 3. **B** 4. **D** 5. **D** 6. **D** 7. **A** 8. **A**

**Risolvi ogni problema.****Risposte**1) Quale opzione rappresenta correttamente $X < 20$ 2) Quale opzione rappresenta correttamente $X \geq -5$ 3) Quale opzione rappresenta correttamente $X \leq -8$ 4) Quale opzione rappresenta correttamente $X \geq 6$ 5) Quale opzione rappresenta correttamente $X > -1$ 6) Quale opzione rappresenta correttamente $X \leq 6$ 7) Quale opzione rappresenta correttamente $X < 9$ 8) Quale opzione rappresenta correttamente $X \leq -11$ 

1. _____

2. _____

3. _____

4. _____

5. _____

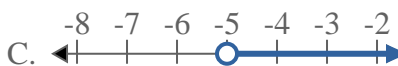
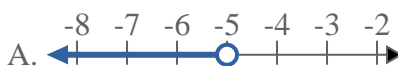
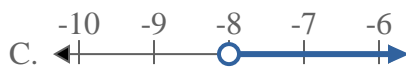
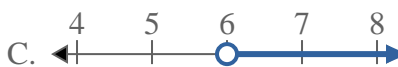
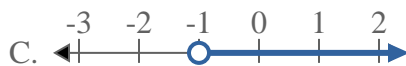
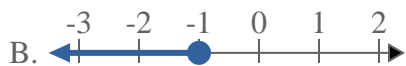
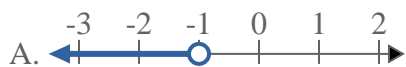
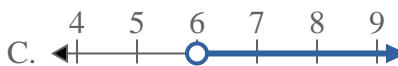
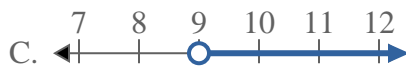
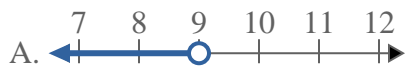
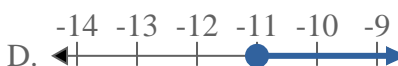
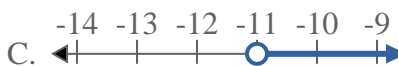
6. _____

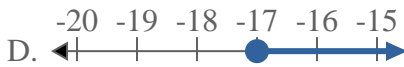
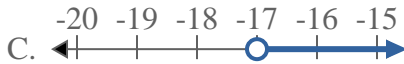
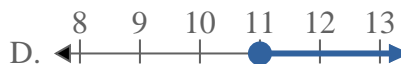
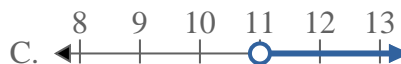
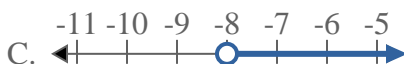
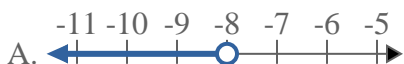
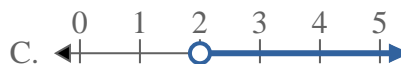
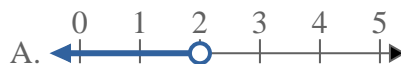
7. _____

8. _____



Risolvi ogni problema.

Risposte1) Quale opzione rappresenta correttamente $X < 20$ 2) Quale opzione rappresenta correttamente $X \geq -5$ 3) Quale opzione rappresenta correttamente $X \leq -8$ 4) Quale opzione rappresenta correttamente $X \geq 6$ 5) Quale opzione rappresenta correttamente $X > -1$ 6) Quale opzione rappresenta correttamente $X \leq 6$ 7) Quale opzione rappresenta correttamente $X < 9$ 8) Quale opzione rappresenta correttamente $X \leq -11$ 1. **A** 2. **D** 3. **B** 4. **D** 5. **C** 6. **B** 7. **A** 8. **B**

**Risolvi ogni problema.****Risposte**1) Quale opzione rappresenta correttamente $X < -17$ 2) Quale opzione rappresenta correttamente $X \leq 20$ 3) Quale opzione rappresenta correttamente $X \geq 12$ 4) Quale opzione rappresenta correttamente $X \geq -17$ 5) Quale opzione rappresenta correttamente $X \geq 6$ 6) Quale opzione rappresenta correttamente $X \leq 11$ 7) Quale opzione rappresenta correttamente $X \leq -8$ 8) Quale opzione rappresenta correttamente $X > 2$ 

1. _____

2. _____

3. _____

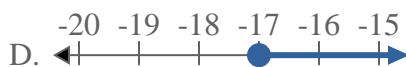
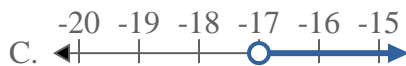

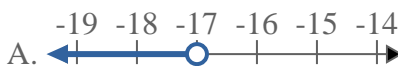
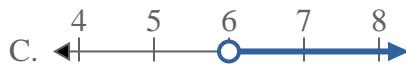
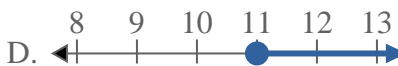
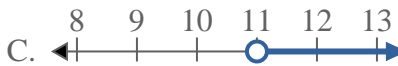
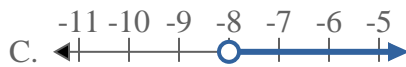
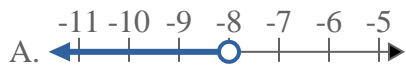
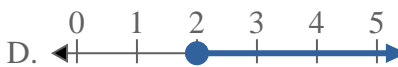
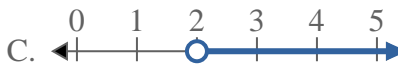
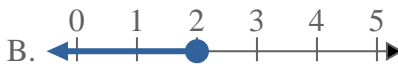
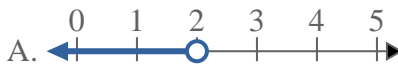
4. _____

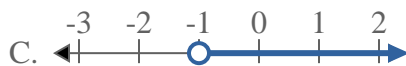
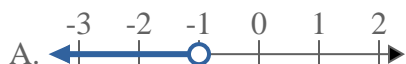
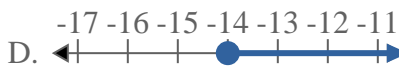
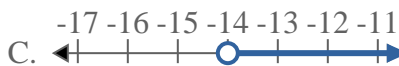
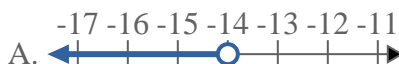
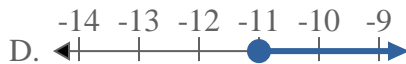
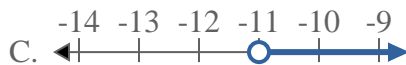
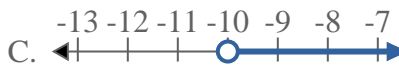
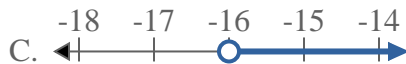
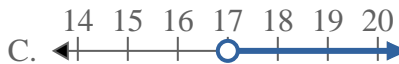
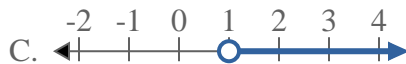
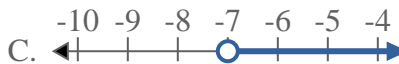
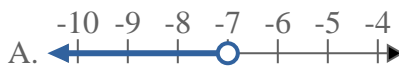
5. _____

6. _____

7. _____

8. _____

**Risolvi ogni problema.****Risposte**1) Quale opzione rappresenta correttamente $X < -17$ 2) Quale opzione rappresenta correttamente $X \leq 20$ 3) Quale opzione rappresenta correttamente $X \geq 12$ 4) Quale opzione rappresenta correttamente $X \geq -17$ 5) Quale opzione rappresenta correttamente $X \geq 6$ 6) Quale opzione rappresenta correttamente $X \leq 11$ 7) Quale opzione rappresenta correttamente $X \leq -8$ 8) Quale opzione rappresenta correttamente $X > 2$ 1. **A** 2. **B** 3. **D** 4. **D** 5. **D** 6. **B** 7. **B** 8. **C**

**Risolvi ogni problema.****Risposte**1) Quale opzione rappresenta correttamente $X > -1$ 2) Quale opzione rappresenta correttamente $X < -14$ 3) Quale opzione rappresenta correttamente $X \leq -11$ 4) Quale opzione rappresenta correttamente $X < -10$ 5) Quale opzione rappresenta correttamente $X \leq -16$ 6) Quale opzione rappresenta correttamente $X > 17$ 7) Quale opzione rappresenta correttamente $X > 1$ 8) Quale opzione rappresenta correttamente $X > -7$ 

1. _____

2. _____

3. _____

4. _____

5. _____

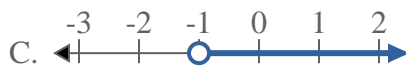
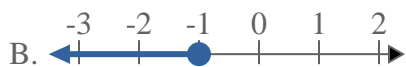
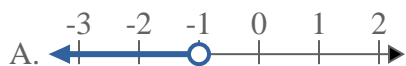
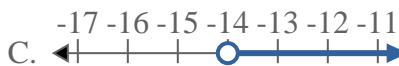
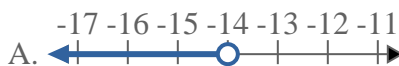
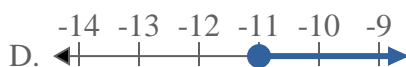
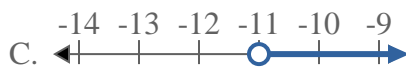
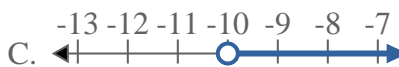
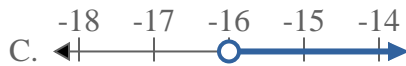
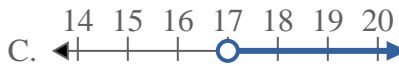
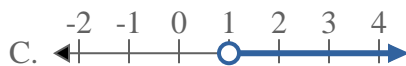
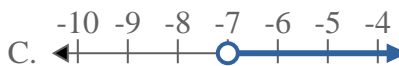
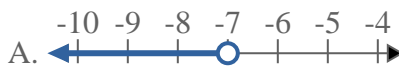
6. _____

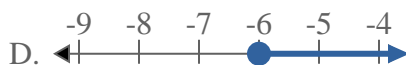
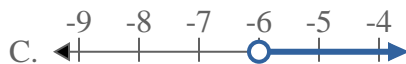
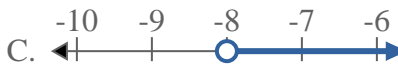
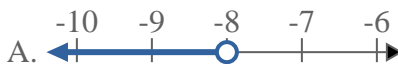
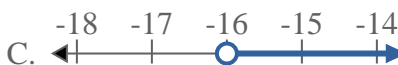
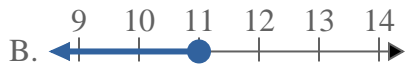
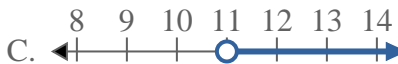
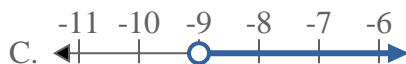
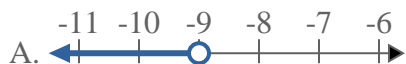
7. _____

8. _____



Risolvi ogni problema.

Risposte1) Quale opzione rappresenta correttamente $X > -1$ 2) Quale opzione rappresenta correttamente $X < -14$ 3) Quale opzione rappresenta correttamente $X \leq -11$ 4) Quale opzione rappresenta correttamente $X < -10$ 5) Quale opzione rappresenta correttamente $X \leq -16$ 6) Quale opzione rappresenta correttamente $X > 17$ 7) Quale opzione rappresenta correttamente $X > 1$ 8) Quale opzione rappresenta correttamente $X > -7$ 1. **C** 2. **A** 3. **B** 4. **A** 5. **B** 6. **C** 7. **C** 8. **C**

**Risolvi ogni problema.****Risposte**1) Quale opzione rappresenta correttamente $X \leq -6$ 2) Quale opzione rappresenta correttamente $X > -8$ 3) Quale opzione rappresenta correttamente $X < 13$ 4) Quale opzione rappresenta correttamente $X < -16$ 5) Quale opzione rappresenta correttamente $X \leq 11$ 6) Quale opzione rappresenta correttamente $X \geq 11$ 7) Quale opzione rappresenta correttamente $X > -9$ 8) Quale opzione rappresenta correttamente $X \geq -5$ 

1. _____

2. _____

3. _____

4. _____

5. _____

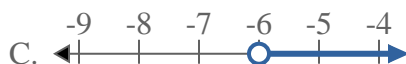
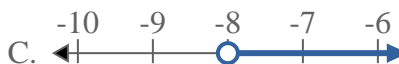
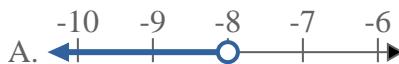
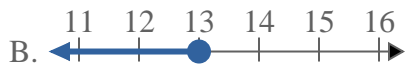
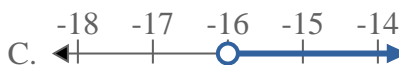
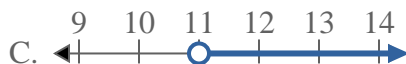
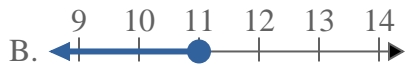
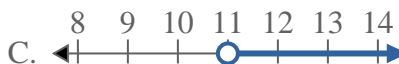
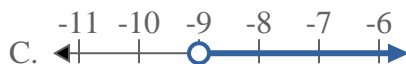
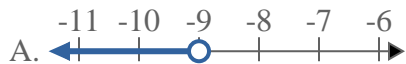
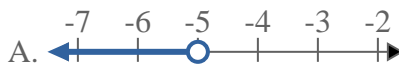
6. _____

7. _____

8. _____

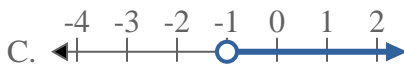
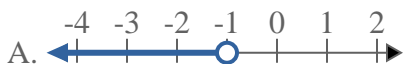
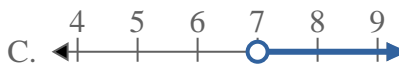
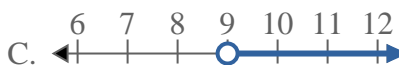
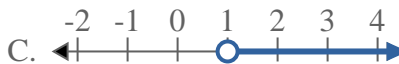
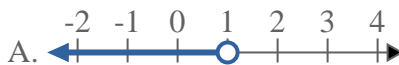
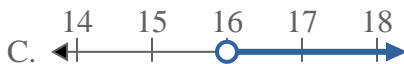
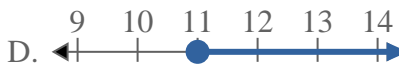
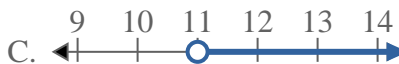
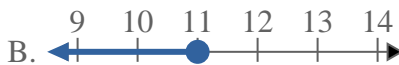
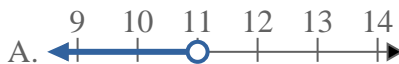


Risolvi ogni problema.

Risposte1) Quale opzione rappresenta correttamente $X \leq -6$ 2) Quale opzione rappresenta correttamente $X > -8$ 3) Quale opzione rappresenta correttamente $X < 13$ 4) Quale opzione rappresenta correttamente $X < -16$ 5) Quale opzione rappresenta correttamente $X \leq 11$ 6) Quale opzione rappresenta correttamente $X \geq 11$ 7) Quale opzione rappresenta correttamente $X > -9$ 8) Quale opzione rappresenta correttamente $X \geq -5$ 1. **B** 2. **C** 3. **A** 4. **A** 5. **B** 6. **D** 7. **C** 8. **D**



Risolvi ogni problema.

Risposte1) Quale opzione rappresenta correttamente $X \geq -1$ 2) Quale opzione rappresenta correttamente $X \leq 7$ 3) Quale opzione rappresenta correttamente $X > 14$ 4) Quale opzione rappresenta correttamente $X > 9$ 5) Quale opzione rappresenta correttamente $X < -14$ 6) Quale opzione rappresenta correttamente $X \geq 1$ 7) Quale opzione rappresenta correttamente $X \leq 16$ 8) Quale opzione rappresenta correttamente $X \leq 11$ 

1. _____

2. _____

3. _____

4. _____

5. _____

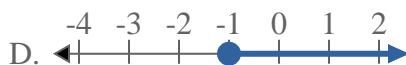
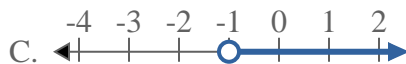
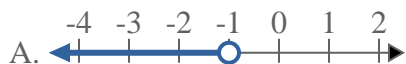
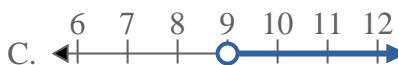
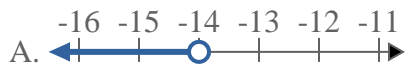
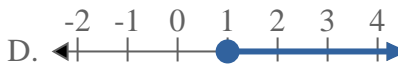
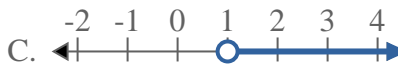
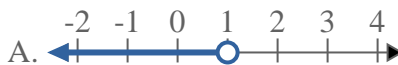

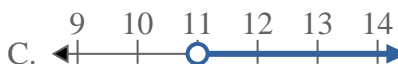
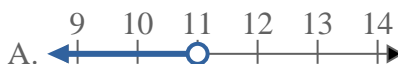
6. _____

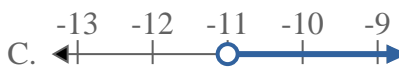
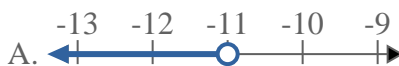
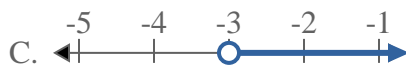
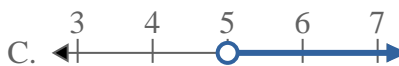
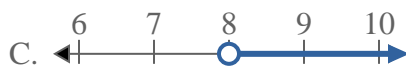
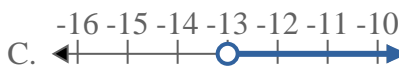
7. _____

8. _____



Risolvi ogni problema.

Risposte1) Quale opzione rappresenta correttamente $X \geq -1$ 2) Quale opzione rappresenta correttamente $X \leq 7$ 3) Quale opzione rappresenta correttamente $X > 14$ 4) Quale opzione rappresenta correttamente $X > 9$ 5) Quale opzione rappresenta correttamente $X < -14$ 6) Quale opzione rappresenta correttamente $X \geq 1$ 7) Quale opzione rappresenta correttamente $X \leq 16$ 8) Quale opzione rappresenta correttamente $X \leq 11$ 1. **D** 2. **B** 3. **C** 4. **C** 5. **A** 6. **D** 7. **B** 8. **B**

**Risolvi ogni problema.****Risposte**1) Quale opzione rappresenta correttamente $X > -5$ 2) Quale opzione rappresenta correttamente $X \geq 12$ 3) Quale opzione rappresenta correttamente $X \leq 20$ 4) Quale opzione rappresenta correttamente $X \geq -11$ 5) Quale opzione rappresenta correttamente $X > -3$ 6) Quale opzione rappresenta correttamente $X \geq 5$ 7) Quale opzione rappresenta correttamente $X \leq 8$ 8) Quale opzione rappresenta correttamente $X \leq -13$ 

1. _____

2. _____

3. _____

4. _____

5. _____


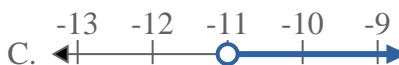
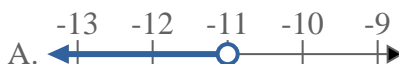
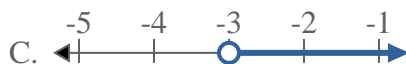
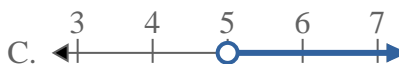
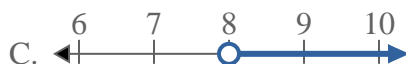
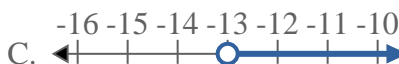
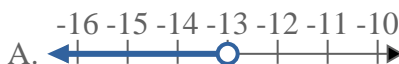
6. _____

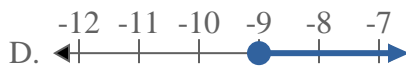
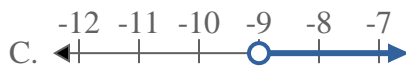
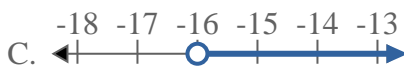
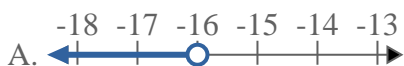
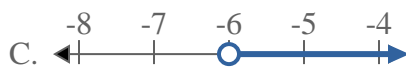
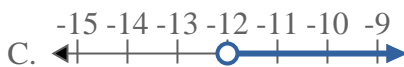
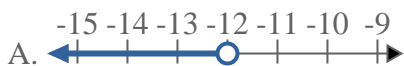
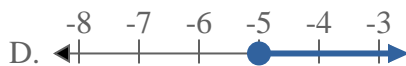
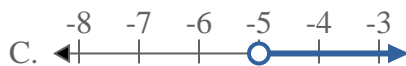
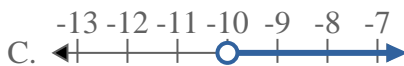
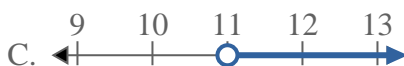
7. _____

8. _____



Risolvi ogni problema.

Risposte1) Quale opzione rappresenta correttamente $X > -5$ 2) Quale opzione rappresenta correttamente $X \geq 12$ 3) Quale opzione rappresenta correttamente $X \leq 20$ 4) Quale opzione rappresenta correttamente $X \geq -11$ 5) Quale opzione rappresenta correttamente $X > -3$ 6) Quale opzione rappresenta correttamente $X \geq 5$ 7) Quale opzione rappresenta correttamente $X \leq 8$ 8) Quale opzione rappresenta correttamente $X \leq -13$ 1. **C** 2. **D** 3. **B** 4. **D** 5. **C** 6. **C** 7. **B** 8. **B**

**Risolvi ogni problema.****Risposte**1) Quale opzione rappresenta correttamente $X < -9$ 2) Quale opzione rappresenta correttamente $X \leq -16$ 3) Quale opzione rappresenta correttamente $X \geq -6$ 4) Quale opzione rappresenta correttamente $X > -12$ 5) Quale opzione rappresenta correttamente $X \leq -5$ 6) Quale opzione rappresenta correttamente $X < -10$ 7) Quale opzione rappresenta correttamente $X > 13$ 8) Quale opzione rappresenta correttamente $X < 11$ 

1. _____

2. _____

3. _____

4. _____

5. _____

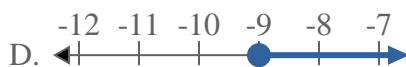
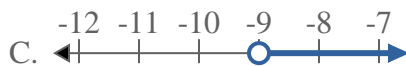
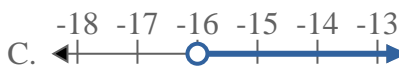
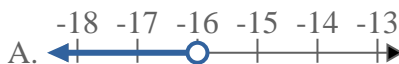
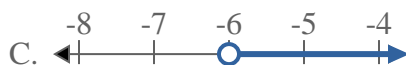
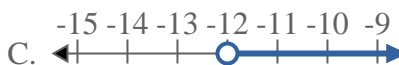
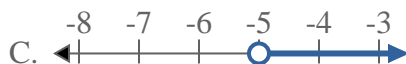
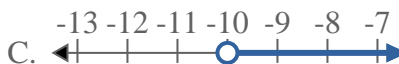
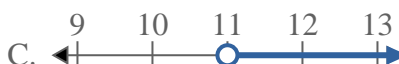
6. _____

7. _____

8. _____



Risolvi ogni problema.

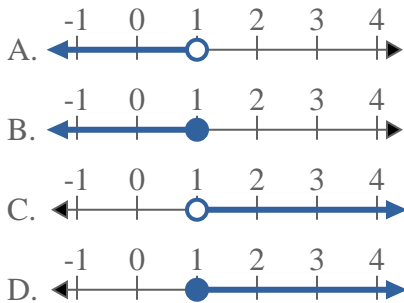
Risposte1) Quale opzione rappresenta correttamente $X < -9$ 2) Quale opzione rappresenta correttamente $X \leq -16$ 3) Quale opzione rappresenta correttamente $X \geq -6$ 4) Quale opzione rappresenta correttamente $X > -12$ 5) Quale opzione rappresenta correttamente $X \leq -5$ 6) Quale opzione rappresenta correttamente $X < -10$ 7) Quale opzione rappresenta correttamente $X > 13$ 8) Quale opzione rappresenta correttamente $X < 11$ 1. **A** 2. **B** 3. **D** 4. **C** 5. **B** 6. **A** 7. **C** 8. **A**



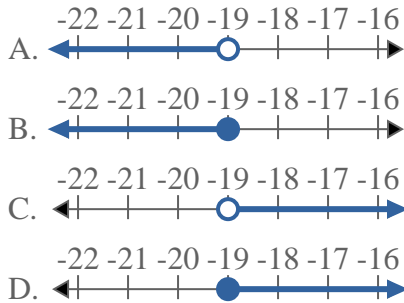
Risolvi ogni problema.

Risposte

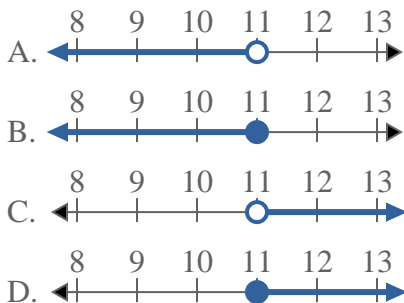
1) Quale opzione rappresenta correttamente $X \leq 1$



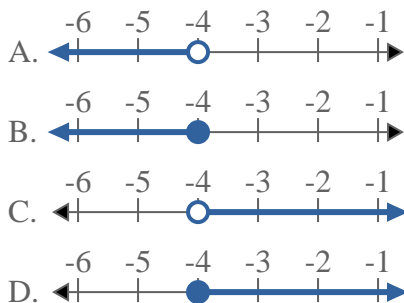
2) Quale opzione rappresenta correttamente $X < -19$



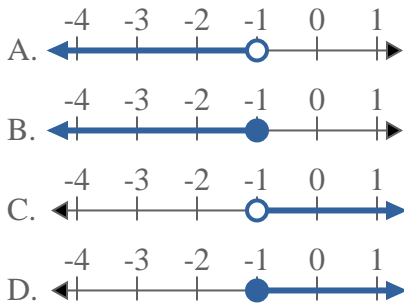
3) Quale opzione rappresenta correttamente $X \geq 11$



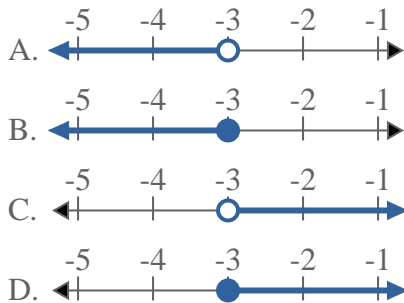
4) Quale opzione rappresenta correttamente $X \geq -4$



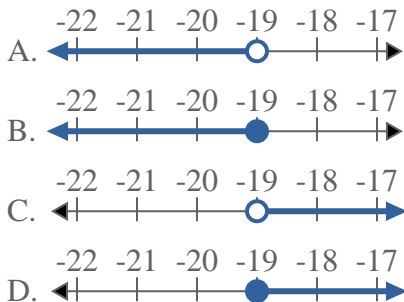
5) Quale opzione rappresenta correttamente $X \geq -1$



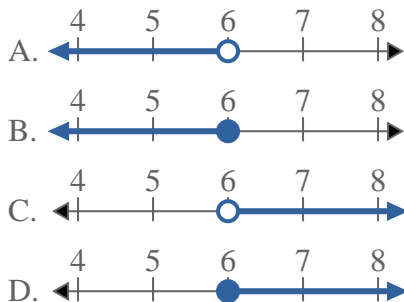
6) Quale opzione rappresenta correttamente $X \leq -3$



7) Quale opzione rappresenta correttamente $X > -19$



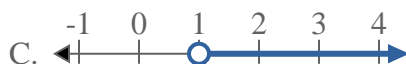
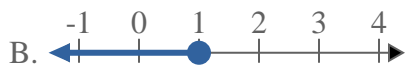
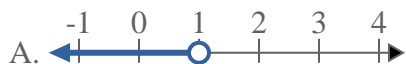
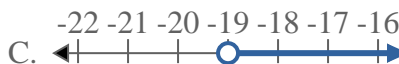
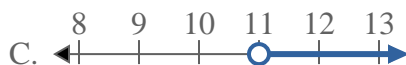
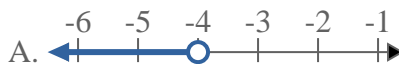
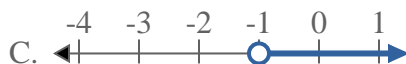
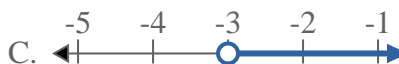
8) Quale opzione rappresenta correttamente $X > 6$



- 1. _____
- 2. _____
- 3. _____
- 4. _____
- 5. _____
- 6. _____
- 7. _____
- 8. _____



Risolvi ogni problema.

Risposte1) Quale opzione rappresenta correttamente $X \leq 1$ 2) Quale opzione rappresenta correttamente $X < -19$ 3) Quale opzione rappresenta correttamente $X \geq 11$ 4) Quale opzione rappresenta correttamente $X \geq -4$ 5) Quale opzione rappresenta correttamente $X \geq -1$ 6) Quale opzione rappresenta correttamente $X \leq -3$ 7) Quale opzione rappresenta correttamente $X > -19$ 8) Quale opzione rappresenta correttamente $X > 6$ 1. **B**2. **A**3. **D**4. **D**5. **D**6. **B**7. **C**8. **C**